




Determine if the angle shown is 'less', 'more' or 'equal' to 90°.

Answers

Ex)



1)



2)

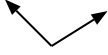


Ex. more

1. \_\_\_\_\_

2. \_\_\_\_\_

3)



4)



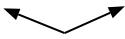
5)



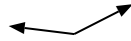
3. \_\_\_\_\_

4. \_\_\_\_\_

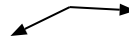
6)



7)



8)



5. \_\_\_\_\_

6. \_\_\_\_\_

7. \_\_\_\_\_

9)



10)



11)



8. \_\_\_\_\_

9. \_\_\_\_\_

10. \_\_\_\_\_

12)



13)



14)



11. \_\_\_\_\_

12. \_\_\_\_\_

13. \_\_\_\_\_

15)



16)



17)



14. \_\_\_\_\_

15. \_\_\_\_\_

16. \_\_\_\_\_

18)



19)



20)



17. \_\_\_\_\_

18. \_\_\_\_\_

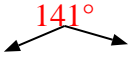
19. \_\_\_\_\_

20. \_\_\_\_\_



Determine if the angle shown is 'less', 'more' or 'equal' to 90°.

Ex)



1)



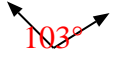
2)



Answers

Ex. more

3)



4)



5)



1. less

2. equal

3. more


4. equal

5. equal


6)



7)



8)



6. more

7. more

8. more

9)



10)



11)



9. less

10. less

11. less

12)



13)



14)



12. equal

13. less

14. equal

15)



16)



17)



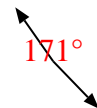
15. equal

16. more

18)



19)



20)



17. equal

18. less

19. more

20. less