



Determine if the angle shown is 'less', 'more' or 'equal' to 90°.

Answers

Ex)



1)



2)



Ex. **less**

1. _____

3)



4)



5)



2. _____

3. _____

6)



7)



8)



4. _____

5. _____

6. _____

7. _____

9)



10)



11)




8. _____

9. _____

10. _____

11. _____

12)



13)



14)



12. _____

13. _____

14. _____

15)



16)



17)



15. _____

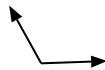
16. _____

17. _____

18)



19)



20)



18. _____

19. _____

20. _____

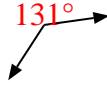


Determine if the angle shown is 'less', 'more' or 'equal' to 90° .

Ex)



1)



2)

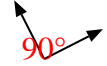


Ex. less

3)



4)



5)



1. more

2. more


3. less

4. equal

6)



7)



8)

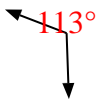


5. more

6. equal

7. equal

9)



10)



11)



8. equal

9. more

10. less

12)



13)



14)



11. equal

12. more

13. more

15)



16)



17)



14. less

15. less

16. equal

18)



19)



20)



17. less

18. equal

19. more

20. equal