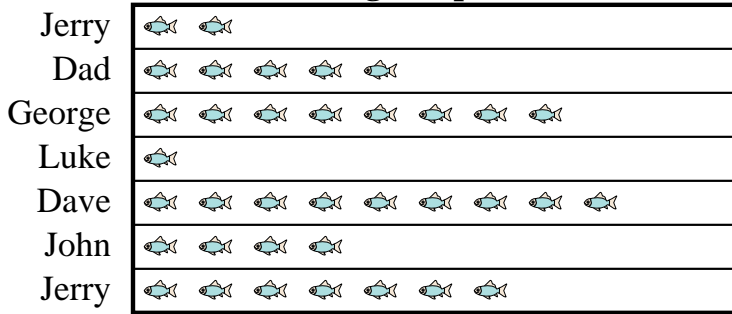





Answers

Dave's father took Dave and 5 friends on a fishing trip. They recorded the number of fish they caught using the pictograph below.

Fishing Trip Results



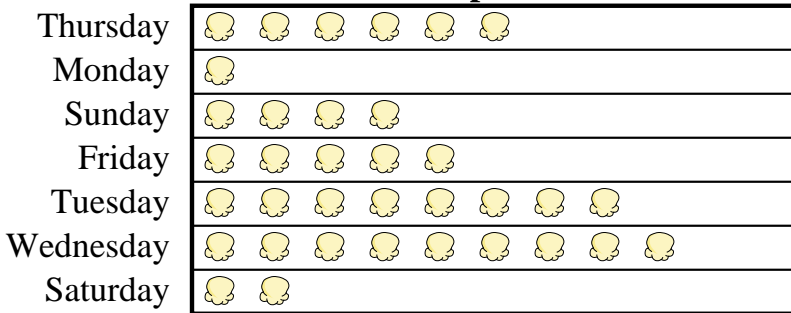
 = 4 Fish Caught

- How many fish did George catch?
- Who caught the most fish?
- Who caught the fewest fish?
- Who caught more fish, Jerry or Dad?
- Who caught exactly 4 fish?

- _____
- _____
- _____
- _____
- _____
- _____
- _____
- _____
- _____
- _____

A movie theater was tracking the number of small popcorns they sold each day. They organized the information in the pictograph below.

Small Popcorns Sold



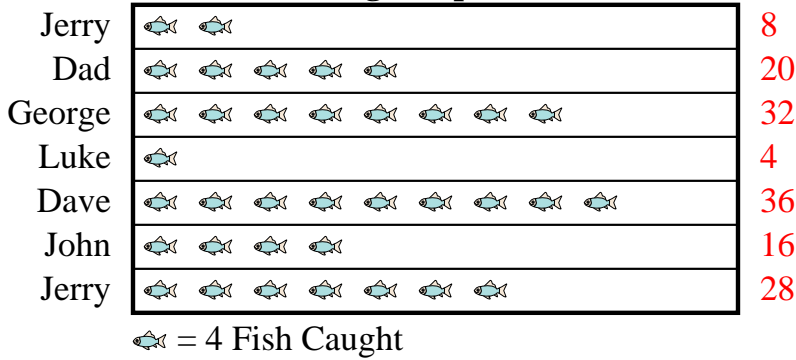
 = 4 Bags Sold

- Which day did they sell exactly 20 bags?
- How many bags did they sell on Sunday?
- Which day did they sell the most popcorn?
- Which day did they sell more popcorn, Thursday or Monday?
- Which day did they sell the least amount of popcorn?



Dave's father took Dave and 5 friends on a fishing trip. They recorded the number of fish they caught using the pictograph below.

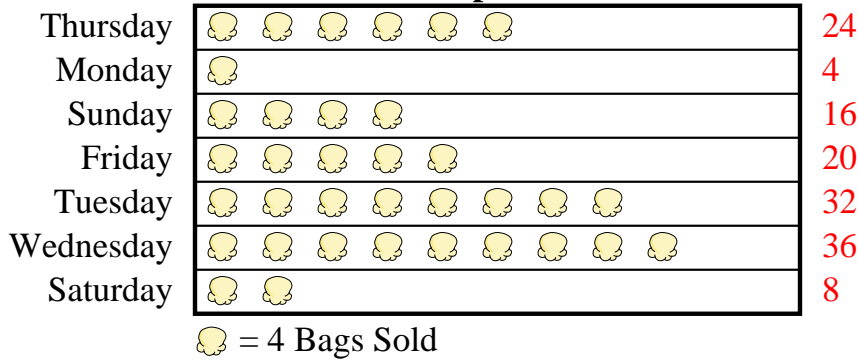
Fishing Trip Results



- How many fish did George catch?
- Who caught the most fish?
- Who caught the fewest fish?
- Who caught more fish, Jerry or Dad?
- Who caught exactly 4 fish?

A movie theater was tracking the number of small popcorns they sold each day. They organized the information in the pictograph below.

Small Popcorns Sold



- Which day did they sell exactly 20 bags?
- How many bags did they sell on Sunday?
- Which day did they sell the most popcorn?
- Which day did they sell more popcorn, Thursday or Monday?
- Which day did they sell the least amount of popcorn?

Answers

- 32
- Dave
- Luke
- Jerry
- Luke
- Friday
- 16
- Wednesday
- Thursday
- Monday