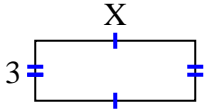




Find the value of X for each figure. Each figure is in centimeters (cm). Not to scale.

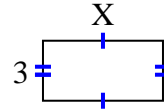
1) area = 24 cm^2



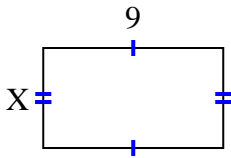
2) area = 4 cm^2



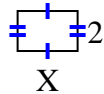
3) area = 18 cm^2



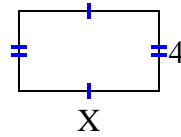
4) area = 45 cm^2



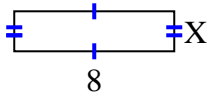
5) area = 6 cm^2



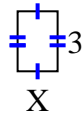
6) area = 28 cm^2



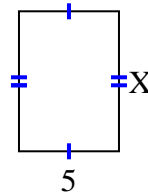
7) area = 16 cm^2



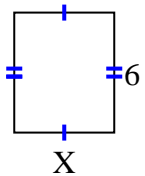
8) area = 6 cm^2



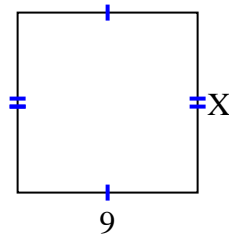
9) area = 35 cm^2



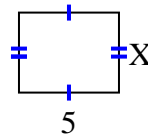
10) area = 30 cm^2



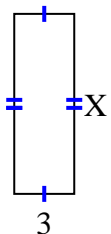
11) area = 81 cm^2



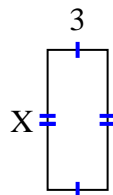
12) area = 20 cm^2



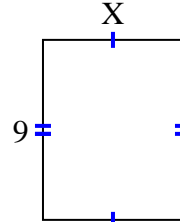
13) area = 27 cm^2



14) area = 21 cm^2



15) area = 63 cm^2



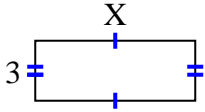
Answers

1. _____
2. _____
3. _____
4. _____
5. _____
6. _____
7. _____
8. _____
9. _____
10. _____
11. _____
12. _____
13. _____
14. _____
15. _____



Find the value of X for each figure. Each figure is in centimeters (cm). Not to scale.

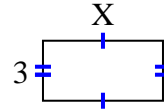
1) area = 24 cm^2



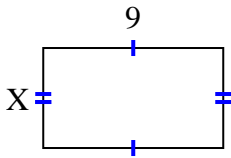
2) area = 4 cm^2



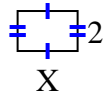
3) area = 18 cm^2



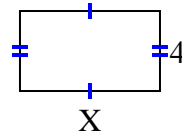
4) area = 45 cm^2



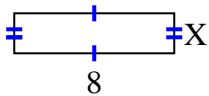
5) area = 6 cm^2



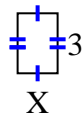
6) area = 28 cm^2



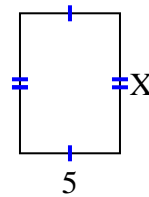
7) area = 16 cm^2



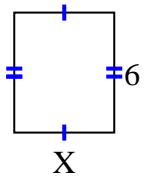
8) area = 6 cm^2



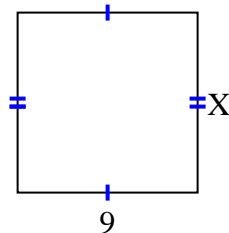
9) area = 35 cm^2



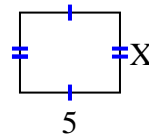
10) area = 30 cm^2



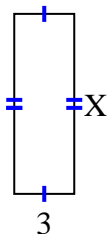
11) area = 81 cm^2



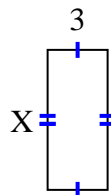
12) area = 20 cm^2



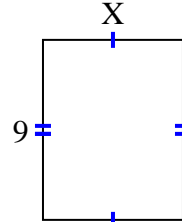
13) area = 27 cm^2



14) area = 21 cm^2



15) area = 63 cm^2



Answers

1. 8

2. 2

3. 6

4. 5

5. 3

6. 7

7. 2

8. 2

9. 7

10. 5

11. 9

12. 4

13. 9

14. 7

15. 7