




Use the scale to answer each question.


Answers

1)



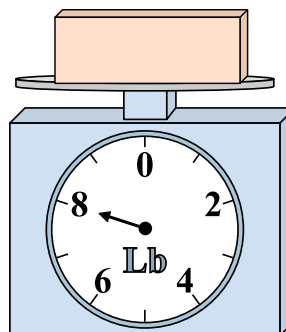
If the block shown were 3 pounds lighter, how much would it weigh?

2)




If the block shown were 5 ounces lighter, how much would it weigh?

3)



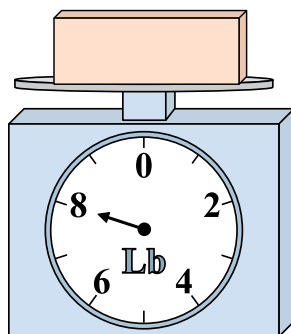
What is the weight (in pounds) of the block?

4)




What is the weight (in ounces) of the block?

5)



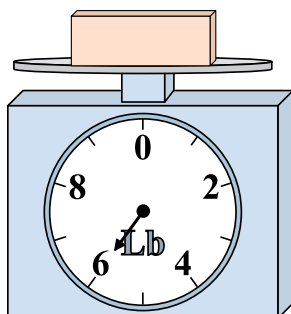
If the block shown were 7 pounds heavier, how much would it weigh?

6)




If you have 10 blocks that are the same weight, how many ounces total do the blocks weigh?

7)



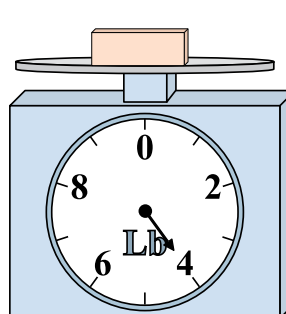
If the block shown were 6 pounds heavier, how much would it weigh?

8)



What is the weight (in ounces) of the block?

9)




If you have 6 blocks that are the same weight, how many pounds total do the blocks weigh?

1. \_\_\_\_\_
2. \_\_\_\_\_
3. \_\_\_\_\_
4. \_\_\_\_\_
5. \_\_\_\_\_
6. \_\_\_\_\_
7. \_\_\_\_\_
8. \_\_\_\_\_
9. \_\_\_\_\_




Use the scale to answer each question.

1)



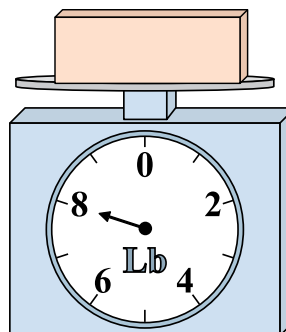
If the block shown were 3 pounds lighter, how much would it weigh?

2)




If the block shown were 5 ounces lighter, how much would it weigh?

3)



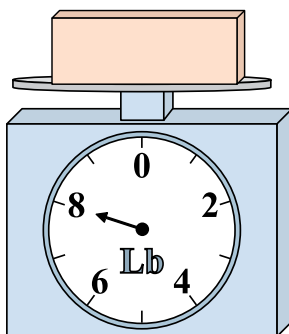
What is the weight (in pounds) of the block?

4)




What is the weight (in ounces) of the block?

5)



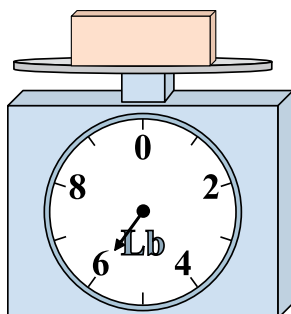
If the block shown were 7 pounds heavier, how much would it weigh?

6)




If you have 10 blocks that are the same weight, how many ounces total do the blocks weigh?

7)



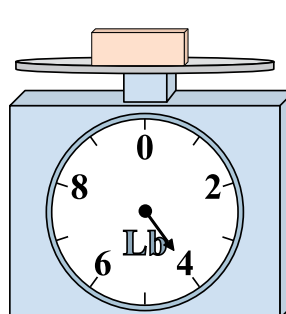
If the block shown were 6 pounds heavier, how much would it weigh?

8)



What is the weight (in ounces) of the block?

9)



If you have 6 blocks that are the same weight, how many pounds total do the blocks weigh?

**Answers**

1. **2**
2. **3**
3. **8**
4. **8**
5. **15**
6. **140**
7. **12**
8. **15**
9. **24**