



Determine which letter best represents the weight.

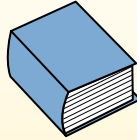
Gram (g)

A gram is about the weight of a paperclip.



Kilogram (kg)

A kilogram is about the weight of a thick book.




Remember:

Kilo means 1,000. So a kilogram is 1,000 grams.
1 Kilogram is also about the same weight as 2 pounds.

Answers

1)



Popcorn

- A. 1 gram
- B. 100 grams
- C. 1 kilogram
- D. 100 kilograms

2)



Frog

- A. 30 grams
- B. 5000 kilograms
- C. 30 kilograms
- D. 5000 grams

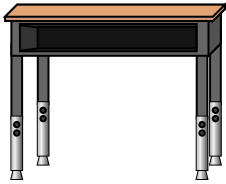
3)



Pen

- A. 5 grams
- B. 5000 grams
- C. 5 kilograms
- D. 500 grams


4)



Desk

- A. 15 grams
- B. 300 kilograms
- C. 15 kilograms
- D. 300 grams


5)



Notebook Paper

- A. 3 grams
- B. 1 kilogram
- C. 85 grams
- D. 500 grams


6)



Skateboard

- A. 20 grams
- B. 2 kilograms
- C. 200 grams
- D. 15 kilograms

7)



Can of Soda

- A. 250 grams
- B. 1 gram
- C. 2 kilograms
- D. 500 kilograms

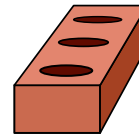
8)



Cereal Box

- A. 425 kilograms
- B. 5 grams
- C. 425 grams
- D. 5 kilograms

9)



Brick

- A. 2 kilograms
- B. 3 grams
- C. 500 grams
- D. 500 kilograms

- 1. _____
- 2. _____
- 3. _____
- 4. _____
- 5. _____
- 6. _____
- 7. _____
- 8. _____
- 9. _____



Determine which letter best represents the weight.

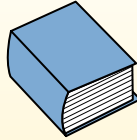
Gram (g)

A gram is about the weight of a paperclip.



Kilogram (kg)

A kilogram is about the weight of a thick book.



Remember:

Kilo means 1,000. So a kilogram is 1,000 grams.
1 Kilogram is also about the same weight as 2 pounds.

1)



Popcorn

- A. 1 gram
- B. 100 grams
- C. 1 kilogram
- D. 100 kilograms

2)



Frog

- A. 30 grams
- B. 5000 kilograms
- C. 30 kilograms
- D. 5000 grams

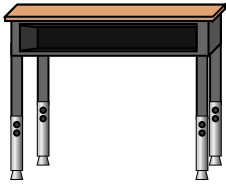
3)



Pen

- A. 5 grams
- B. 5000 grams
- C. 5 kilograms
- D. 500 grams


4)



Desk

- A. 15 grams
- B. 300 kilograms
- C. 15 kilograms
- D. 300 grams

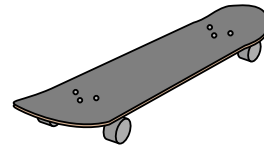
5)



Notebook Paper

- A. 3 grams
- B. 1 kilogram
- C. 85 grams
- D. 500 grams


6)



Skateboard

- A. 20 grams
- B. 2 kilograms
- C. 200 grams
- D. 15 kilograms

7)



Can of Soda

- A. 250 grams
- B. 1 gram
- C. 2 kilograms
- D. 500 kilograms

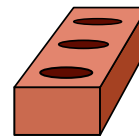
8)



Cereal Box

- A. 425 kilograms
- B. 5 grams
- C. 425 grams
- D. 5 kilograms

9)



Brick

- A. 2 kilograms
- B. 3 grams
- C. 500 grams
- D. 500 kilograms

Answers

- 1. **A**
- 2. **A**
- 3. **A**
- 4. **C**
- 5. **A**
- 6. **B**
- 7. **A**
- 8. **C**
- 9. **A**