



Determine which letter best represents the weight.

**Gram (g)**

A gram is about the weight of a paperclip.



**Kilogram (kg)**

A kilogram is about the weight of a thick book.




**Remember:**

Kilo means 1,000. So a kilogram is 1,000 grams.  
1 Kilogram is also about the same weight as 2 pounds.

**Answers**

1. \_\_\_\_\_
2. \_\_\_\_\_
3. \_\_\_\_\_
4. \_\_\_\_\_
5. \_\_\_\_\_
6. \_\_\_\_\_
7. \_\_\_\_\_
8. \_\_\_\_\_
9. \_\_\_\_\_

1)



2 Liter of Soda

- A. 50 grams
- B. 2 kilograms
- C. 100 grams
- D. 3 grams

2)



Big Screen TV

- A. 20 grams
- B. 20 kilograms
- C. 100 grams
- D. 1000 kilograms

3)



Shovel

- A. 30 kilograms
- B. 5 kilograms
- C. 10 grams
- D. 1 gram

4)



Monitor

- A. 500 kilograms
- B. 8 kilograms
- C. 8 grams
- D. 500 grams


5)



Glue Stick

- A. 500 grams
- B. 1 kilogram
- C. 62 grams
- D. 1 gram

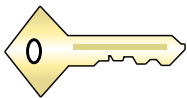
6)



Recliner

- A. 150 grams
- B. 1 kilogram
- C. 35 kilograms
- D. 90 grams

7)



Key

- A. 1 gram
- B. 100 kilograms
- C. 100 grams
- D. 1 kilogram

8)



File Cabinet

- A. 1 gram
- B. 55 kilograms
- C. 1 kilogram
- D. 300 grams

9)



Broom

- A. 10 kilograms
- B. 200 kilograms
- C. 10 grams
- D. 500 grams



Determine which letter best represents the weight.

**Gram (g)**

A gram is about the weight of a paperclip.



**Kilogram (kg)**

A kilogram is about the weight of a thick book.




**Remember:**

Kilo means 1,000. So a kilogram is 1,000 grams.

1 Kilogram is also about the same weight as 2 pounds.

**Answers**

1)



2 Liter of Soda

- A. 50 grams
- B. 2 kilograms
- C. 100 grams
- D. 3 grams

2)



Big Screen TV

- A. 20 grams
- B. 20 kilograms
- C. 100 grams
- D. 1000 kilograms

3)



Shovel

- A. 30 kilograms
- B. 5 kilograms
- C. 10 grams
- D. 1 gram

4)



Monitor

- A. 500 kilograms
- B. 8 kilograms
- C. 8 grams
- D. 500 grams


5)



Glue Stick

- A. 500 grams
- B. 1 kilogram
- C. 62 grams
- D. 1 gram

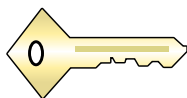
6)



Recliner

- A. 150 grams
- B. 1 kilogram
- C. 35 kilograms
- D. 90 grams

7)



Key

- A. 1 gram
- B. 100 kilograms
- C. 100 grams
- D. 1 kilogram

8)



File Cabinet

- A. 1 gram
- B. 55 kilograms
- C. 1 kilogram
- D. 300 grams

9)



Broom

- A. 10 kilograms
- B. 200 kilograms
- C. 10 grams
- D. 500 grams

- 1. **B**
- 2. **B**
- 3. **B**
- 4. **B**
- 5. **C**
- 6. **C**
- 7. **C**
- 8. **B**
- 9. **D**



Determine which letter best represents the weight.

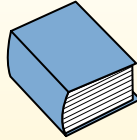
**Gram (g)**

A gram is about the weight of a paperclip.



**Kilogram (kg)**

A kilogram is about the weight of a thick book.




**Remember:**

Kilo means 1,000. So a kilogram is 1,000 grams.  
1 Kilogram is also about the same weight as 2 pounds.

**Answers**

1. \_\_\_\_\_
2. \_\_\_\_\_
3. \_\_\_\_\_
4. \_\_\_\_\_
5. \_\_\_\_\_
6. \_\_\_\_\_
7. \_\_\_\_\_
8. \_\_\_\_\_
9. \_\_\_\_\_


1)



Car

- A. 15 grams
- B. 2000 kilograms
- C. 6000 grams
- D. 2 kilograms


2)



Lawn Mower

- A. 500 grams
- B. 22 kilograms
- C. 200 grams
- D. 100 kilograms

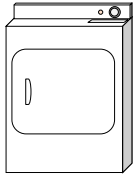
3)



Spider

- A. 1 gram
- B. 500 grams
- C. 15 grams
- D. 1 kilogram

4)



Clothes Dryer

- A. 60 grams
- B. 3 grams
- C. 60 kilograms
- D. 3 kilograms

5)



Pen

- A. 500 grams
- B. 5000 grams
- C. 5 grams
- D. 5 kilograms


6)



Apple

- A. 5 kilograms
- B. 200 kilograms
- C. 200 grams
- D. 5 grams

7)



Can of Soda

- A. 1 gram
- B. 250 grams
- C. 500 kilograms
- D. 2 kilograms

8)



Battery

- A. 1 gram
- B. 15 grams
- C. 10 kilograms
- D. 90 kilograms

9)



Phone

- A. 500 grams
- B. 5 grams
- C. 15 kilograms
- D. 500 kilograms



Determine which letter best represents the weight.

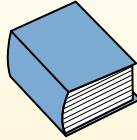
**Gram (g)**

A gram is about the weight of a paperclip.



**Kilogram (kg)**


A kilogram is about the weight of a thick book.



**Remember:**


Kilo means 1,000. So a kilogram is 1,000 grams.  
1 Kilogram is also about the same weight as 2 pounds.

1)




- Car
- A. 15 grams
  - B. 2000 kilograms
  - C. 6000 grams
  - D. 2 kilograms

2)



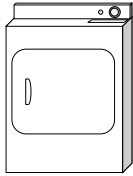
- Lawn Mower
- A. 500 grams
  - B. 22 kilograms
  - C. 200 grams
  - D. 100 kilograms

3)



- Spider
- A. 1 gram
  - B. 500 grams
  - C. 15 grams
  - D. 1 kilogram

4)




- Clothes Dryer
- A. 60 grams
  - B. 3 grams
  - C. 60 kilograms
  - D. 3 kilograms

5)




- Pen
- A. 500 grams
  - B. 5000 grams
  - C. 5 grams
  - D. 5 kilograms

6)



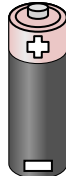
- Apple
- A. 5 kilograms
  - B. 200 kilograms
  - C. 200 grams
  - D. 5 grams

7)



- Can of Soda
- A. 1 gram
  - B. 250 grams
  - C. 500 kilograms
  - D. 2 kilograms

8)



- Battery
- A. 1 gram
  - B. 15 grams
  - C. 10 kilograms
  - D. 90 kilograms

9)



- Phone
- A. 500 grams
  - B. 5 grams
  - C. 15 kilograms
  - D. 500 kilograms

**Answers**

- 1. **B**
- 2. **B**
- 3. **A**
- 4. **C**
- 5. **C**
- 6. **C**
- 7. **B**
- 8. **B**
- 9. **A**



Determine which letter best represents the weight.

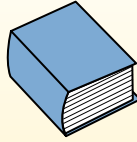
**Gram (g)**

A gram is about the weight of a paperclip.



**Kilogram (kg)**

A kilogram is about the weight of a thick book.




**Remember:**

Kilo means 1,000. So a kilogram is 1,000 grams.  
1 Kilogram is also about the same weight as 2 pounds.

**Answers**

1. \_\_\_\_\_
2. \_\_\_\_\_
3. \_\_\_\_\_
4. \_\_\_\_\_
5. \_\_\_\_\_
6. \_\_\_\_\_
7. \_\_\_\_\_
8. \_\_\_\_\_
9. \_\_\_\_\_

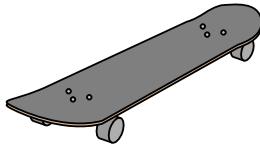
1)



Notebook Paper

- A. 1 kilogram
- B. 3 grams
- C. 500 grams
- D. 85 grams

2)



Skateboard

- A. 20 grams
- B. 15 kilograms
- C. 2 kilograms
- D. 200 grams


3)



Broom

- A. 500 grams
- B. 10 kilograms
- C. 10 grams
- D. 200 kilograms


4)



Pear

- A. 2 kilograms
- B. 170 kilograms
- C. 170 grams
- D. 2 grams

5)



Lawn Mower

- A. 500 grams
- B. 100 kilograms
- C. 200 grams
- D. 22 kilograms

6)



File Cabinet

- A. 55 kilograms
- B. 1 gram
- C. 300 grams
- D. 1 kilogram

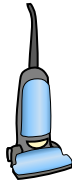
7)



Wrist Watch

- A. 1 gram
- B. 90 grams
- C. 1 kilogram
- D. 500 kilograms


8)



Vacuum

- A. 20 kilograms
- B. 90 grams
- C. 500 kilograms
- D. 50 grams

9)



Apple

- A. 5 grams
- B. 200 kilograms
- C. 200 grams
- D. 5 kilograms



Determine which letter best represents the weight.


**Gram (g)**

A gram is about the weight of a paperclip.



**Kilogram (kg)**

A kilogram is about the weight of a thick book.




**Remember:**

Kilo means 1,000. So a kilogram is 1,000 grams.

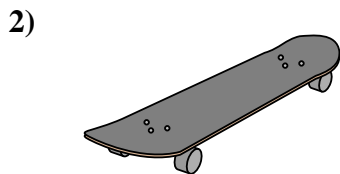
1 Kilogram is also about the same weight as 2 pounds.

**Answers**



Notebook Paper

- A. 1 kilogram
- B. 3 grams
- C. 500 grams
- D. 85 grams




Skateboard

- A. 20 grams
- B. 15 kilograms
- C. 2 kilograms
- D. 200 grams



Broom

- A. 500 grams
- B. 10 kilograms
- C. 10 grams
- D. 200 kilograms



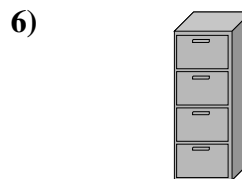
Pear

- A. 2 kilograms
- B. 170 kilograms
- C. 170 grams
- D. 2 grams




Lawn Mower

- A. 500 grams
- B. 100 kilograms
- C. 200 grams
- D. 22 kilograms



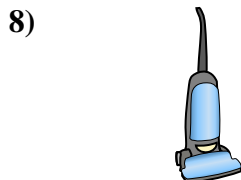
File Cabinet

- A. 55 kilograms
- B. 1 gram
- C. 300 grams
- D. 1 kilogram




Wrist Watch

- A. 1 gram
- B. 90 grams
- C. 1 kilogram
- D. 500 kilograms



Vacuum

- A. 20 kilograms
- B. 90 grams
- C. 500 kilograms
- D. 50 grams



Apple

- A. 5 grams
- B. 200 kilograms
- C. 200 grams
- D. 5 kilograms

- 1.   **B**
- 2.   **C**
- 3.   **A**
- 4.   **C**
- 5.   **D**
- 6.   **A**
- 7.   **B**
- 8.   **A**
- 9.   **C**



Determine which letter best represents the weight.

**Gram (g)**

A gram is about the weight of a paperclip.



**Kilogram (kg)**

A kilogram is about the weight of a thick book.



**Remember:**

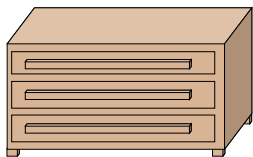
Kilo means 1,000. So a kilogram is 1,000 grams.

1 Kilogram is also about the same weight as 2 pounds.

**Answers**

1. \_\_\_\_\_
2. \_\_\_\_\_
3. \_\_\_\_\_
4. \_\_\_\_\_
5. \_\_\_\_\_
6. \_\_\_\_\_
7. \_\_\_\_\_
8. \_\_\_\_\_
9. \_\_\_\_\_

1)



Dresser

- A. 500 kilograms
- B. 70 kilograms
- C. 20 grams
- D. 350 grams

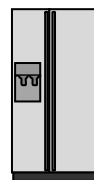
2)



Stove

- A. 70 kilograms
- B. 15 grams
- C. 70 grams
- D. 15 kilograms


3)



Refrigerator

- A. 10 kilograms
- B. 40 grams
- C. 90 kilograms
- D. 200 grams

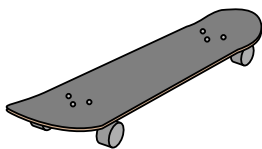
4)



Pear

- A. 170 kilograms
- B. 2 kilograms
- C. 170 grams
- D. 2 grams

5)



Skateboard

- A. 20 grams
- B. 200 grams
- C. 2 kilograms
- D. 15 kilograms

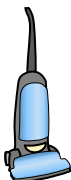
6)



Monitor

- A. 8 kilograms
- B. 500 grams
- C. 500 kilograms
- D. 8 grams


7)



Vacuum

- A. 20 kilograms
- B. 90 grams
- C. 500 kilograms
- D. 50 grams

8)



Recliner

- A. 90 grams
- B. 150 grams
- C. 1 kilogram
- D. 35 kilograms

9)



Wrist Watch

- A. 500 kilograms
- B. 1 kilogram
- C. 1 gram
- D. 90 grams



Determine which letter best represents the weight.


**Gram (g)**

A gram is about the weight of a paperclip.



**Kilogram (kg)**

A kilogram is about the weight of a thick book.

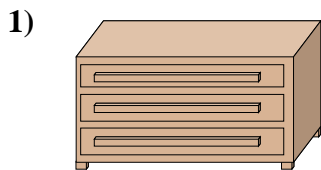


**Remember:**

Kilo means 1,000. So a kilogram is 1,000 grams.

1 Kilogram is also about the same weight as 2 pounds.

**Answers**



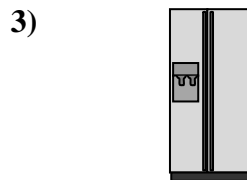
Dresser

- A. 500 kilograms
- B. 70 kilograms
- C. 20 grams
- D. 350 grams




Stove

- A. 70 kilograms
- B. 15 grams
- C. 70 grams
- D. 15 kilograms



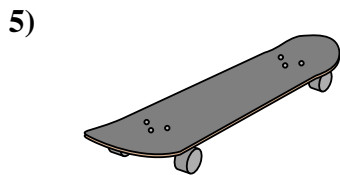
Refrigerator

- A. 10 kilograms
- B. 40 grams
- C. 90 kilograms
- D. 200 grams



Pear

- A. 170 kilograms
- B. 2 kilograms
- C. 170 grams
- D. 2 grams



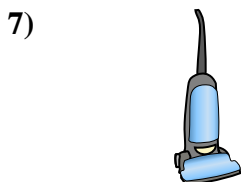
Skateboard

- A. 20 grams
- B. 200 grams
- C. 2 kilograms
- D. 15 kilograms




Monitor

- A. 8 kilograms
- B. 500 grams
- C. 500 kilograms
- D. 8 grams



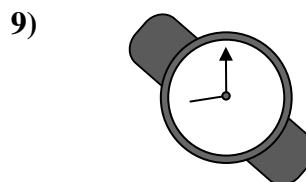
Vacuum

- A. 20 kilograms
- B. 90 grams
- C. 500 kilograms
- D. 50 grams



Recliner

- A. 90 grams
- B. 150 grams
- C. 1 kilogram
- D. 35 kilograms



Wrist Watch

- A. 500 kilograms
- B. 1 kilogram
- C. 1 gram
- D. 90 grams

- 1.   **B**
- 2.   **A**
- 3.   **C**
- 4.   **C**
- 5.   **C**
- 6.   **A**
- 7.   **A**
- 8.   **D**
- 9.   **D**





Determine which letter best represents the weight.

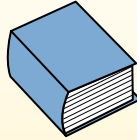
**Gram (g)**

A gram is about the weight of a paperclip.



**Kilogram (kg)**

A kilogram is about the weight of a thick book.



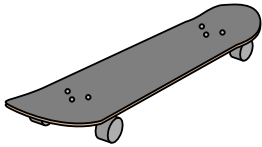
**Remember:**

Kilo means 1,000. So a kilogram is 1,000 grams.  
1 Kilogram is also about the same weight as 2 pounds.

**Answers**

1. \_\_\_\_\_
2. \_\_\_\_\_
3. \_\_\_\_\_
4. \_\_\_\_\_
5. \_\_\_\_\_
6. \_\_\_\_\_
7. \_\_\_\_\_
8. \_\_\_\_\_
9. \_\_\_\_\_

1)



Skateboard

- A. 20 grams
- B. 200 grams
- C. 15 kilograms
- D. 2 kilograms

2)



Shovel

- A. 1 gram
- B. 5 kilograms
- C. 10 grams
- D. 30 kilograms


3)



Candle

- A. 4 grams
- B. 10 kilograms
- C. 500 grams
- D. 2 kilograms

4)



Beetle

- A. 500 grams
- B. 1 gram
- C. 2 kilograms
- D. 5000 grams

5)



Spider

- A. 1 gram
- B. 15 grams
- C. 500 grams
- D. 1 kilogram

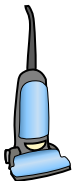
6)



Glue Stick

- A. 1 gram
- B. 500 grams
- C. 1 kilogram
- D. 62 grams

7)



Vacuum

- A. 500 kilograms
- B. 50 grams
- C. 90 grams
- D. 20 kilograms


8)



Recliner

- A. 90 grams
- B. 1 kilogram
- C. 150 grams
- D. 35 kilograms

9)



Battery

- A. 15 grams
- B. 10 kilograms
- C. 1 gram
- D. 90 kilograms



Determine which letter best represents the weight.

**Gram (g)**

A gram is about the weight of a paperclip.



**Kilogram (kg)**

A kilogram is about the weight of a thick book.



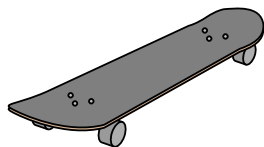
**Remember:**

Kilo means 1,000. So a kilogram is 1,000 grams.

1 Kilogram is also about the same weight as 2 pounds.

**Answers**

1)



Skateboard

- A. 20 grams
- B. 200 grams
- C. 15 kilograms
- D. 2 kilograms

2)



Shovel

- A. 1 gram
- B. 5 kilograms
- C. 10 grams
- D. 30 kilograms


3)



Candle

- A. 4 grams
- B. 10 kilograms
- C. 500 grams
- D. 2 kilograms

4)



Beetle

- A. 500 grams
- B. 1 gram
- C. 2 kilograms
- D. 5000 grams

5)



Spider

- A. 1 gram
- B. 15 grams
- C. 500 grams
- D. 1 kilogram

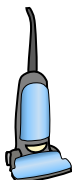
6)



Glue Stick

- A. 1 gram
- B. 500 grams
- C. 1 kilogram
- D. 62 grams


7)



Vacuum

- A. 500 kilograms
- B. 50 grams
- C. 90 grams
- D. 20 kilograms

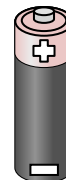
8)



Recliner

- A. 90 grams
- B. 1 kilogram
- C. 150 grams
- D. 35 kilograms

9)



Battery

- A. 15 grams
- B. 10 kilograms
- C. 1 gram
- D. 90 kilograms

- 1.   **D**
- 2.   **B**
- 3.   **A**
- 4.   **B**
- 5.   **A**
- 6.   **D**
- 7.   **D**
- 8.   **D**
- 9.   **A**



Determine which letter best represents the weight.

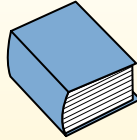
**Gram (g)**

A gram is about the weight of a paperclip.



**Kilogram (kg)**

A kilogram is about the weight of a thick book.




**Remember:**

Kilo means 1,000. So a kilogram is 1,000 grams.  
1 Kilogram is also about the same weight as 2 pounds.

**Answers**


1)



Notebook Paper

- A. 3 grams
- B. 85 grams
- C. 1 kilogram
- D. 500 grams

2)



Beetle

- A. 2 kilograms
- B. 5000 grams
- C. 500 grams
- D. 1 gram

3)



Toothbrush

- A. 15 kilograms
- B. 30 grams
- C. 500 kilograms
- D. 1 gram


4)



Pen

- A. 5 kilograms
- B. 5 grams
- C. 5000 grams
- D. 500 grams

5)



Car

- A. 2000 kilograms
- B. 15 grams
- C. 6000 grams
- D. 2 kilograms

6)



Cereal Box

- A. 5 grams
- B. 425 kilograms
- C. 425 grams
- D. 5 kilograms

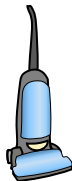
7)



Bug

- A. 50 grams
- B. 50 kilograms
- C. 1 kilogram
- D. 1 gram

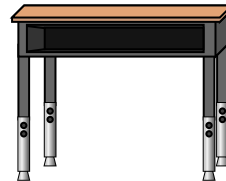
8)



Vacuum

- A. 500 kilograms
- B. 50 grams
- C. 20 kilograms
- D. 90 grams

9)



Desk

- A. 300 kilograms
- B. 15 kilograms
- C. 15 grams
- D. 300 grams

- 1. \_\_\_\_\_
- 2. \_\_\_\_\_
- 3. \_\_\_\_\_
- 4. \_\_\_\_\_
- 5. \_\_\_\_\_
- 6. \_\_\_\_\_
- 7. \_\_\_\_\_
- 8. \_\_\_\_\_
- 9. \_\_\_\_\_



Determine which letter best represents the weight.

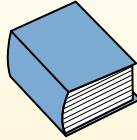
**Gram (g)**

A gram is about the weight of a paperclip.



**Kilogram (kg)**


A kilogram is about the weight of a thick book.



**Remember:**

Kilo means 1,000. So a kilogram is 1,000 grams.  
1 Kilogram is also about the same weight as 2 pounds.


1)



Notebook Paper

- A. 3 grams
- B. 85 grams
- C. 1 kilogram
- D. 500 grams

2)



Beetle

- A. 2 kilograms
- B. 5000 grams
- C. 500 grams
- D. 1 gram

3)



Toothbrush

- A. 15 kilograms
- B. 30 grams
- C. 500 kilograms
- D. 1 gram


4)



Pen

- A. 5 kilograms
- B. 5 grams
- C. 5000 grams
- D. 500 grams

5)



Car

- A. 2000 kilograms
- B. 15 grams
- C. 6000 grams
- D. 2 kilograms

6)



Cereal Box

- A. 5 grams
- B. 425 kilograms
- C. 425 grams
- D. 5 kilograms

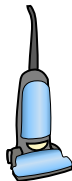
7)



Bug

- A. 50 grams
- B. 50 kilograms
- C. 1 kilogram
- D. 1 gram

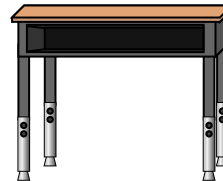
8)



Vacuum

- A. 500 kilograms
- B. 50 grams
- C. 20 kilograms
- D. 90 grams

9)



Desk

- A. 300 kilograms
- B. 15 kilograms
- C. 15 grams
- D. 300 grams

**Answers**

- 1. **A**
- 2. **D**
- 3. **B**
- 4. **B**
- 5. **A**
- 6. **C**
- 7. **D**
- 8. **C**
- 9. **B**



Determine which letter best represents the weight.

**Gram (g)**

A gram is about the weight of a paperclip.



**Kilogram (kg)**

A kilogram is about the weight of a thick book.



**Remember:**

Kilo means 1,000. So a kilogram is 1,000 grams.

1 Kilogram is also about the same weight as 2 pounds.

**Answers**

1. \_\_\_\_\_
2. \_\_\_\_\_
3. \_\_\_\_\_
4. \_\_\_\_\_
5. \_\_\_\_\_
6. \_\_\_\_\_
7. \_\_\_\_\_
8. \_\_\_\_\_
9. \_\_\_\_\_

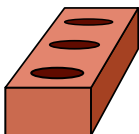
1)



Candle

- A. 10 kilograms
- B. 500 grams
- C. 4 grams
- D. 2 kilograms


2)



Brick

- A. 2 kilograms
- B. 500 kilograms
- C. 3 grams
- D. 500 grams

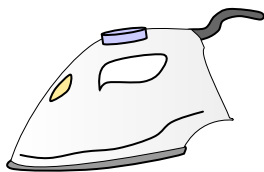
3)



Feather

- A. 200 grams
- B. 200 kilograms
- C. 1 kilogram
- D. 1 gram

4)



Clothes Iron

- A. 15 grams
- B. 100 grams
- C. 15 kilograms
- D. 2 kilograms

5)



Shovel

- A. 30 kilograms
- B. 5 kilograms
- C. 10 grams
- D. 1 gram

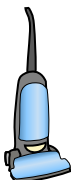
6)



File Cabinet

- A. 1 gram
- B. 1 kilogram
- C. 55 kilograms
- D. 300 grams

7)



Vacuum

- A. 20 kilograms
- B. 500 kilograms
- C. 90 grams
- D. 50 grams


8)



Flash Drive

- A. 10 grams
- B. 90 kilograms
- C. 10 kilograms
- D. 1 kilogram

9)



Adult Horse

- A. 30 kilograms
- B. 400 kilograms
- C. 400 grams
- D. 30 grams



Determine which letter best represents the weight.


**Gram (g)**

A gram is about the weight of a paperclip.



**Kilogram (kg)**

A kilogram is about the weight of a thick book.



**Remember:**

Kilo means 1,000. So a kilogram is 1,000 grams.

1 Kilogram is also about the same weight as 2 pounds.

**Answers**

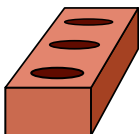
1)



Candle

- A. 10 kilograms
- B. 500 grams
- C. 4 grams
- D. 2 kilograms


2)



Brick

- A. 2 kilograms
- B. 500 kilograms
- C. 3 grams
- D. 500 grams

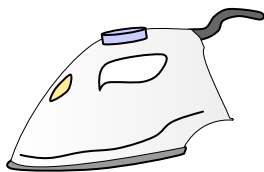
3)



Feather

- A. 200 grams
- B. 200 kilograms
- C. 1 kilogram
- D. 1 gram

4)



Clothes Iron

- A. 15 grams
- B. 100 grams
- C. 15 kilograms
- D. 2 kilograms

5)



Shovel

- A. 30 kilograms
- B. 5 kilograms
- C. 10 grams
- D. 1 gram

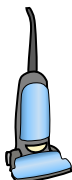
6)



File Cabinet

- A. 1 gram
- B. 1 kilogram
- C. 55 kilograms
- D. 300 grams

7)



Vacuum

- A. 20 kilograms
- B. 500 kilograms
- C. 90 grams
- D. 50 grams


8)



Flash Drive

- A. 10 grams
- B. 90 kilograms
- C. 10 kilograms
- D. 1 kilogram

9)



Adult Horse

- A. 30 kilograms
- B. 400 kilograms
- C. 400 grams
- D. 30 grams

- 1.   **C**
- 2.   **A**
- 3.   **D**
- 4.   **D**
- 5.   **B**
- 6.   **C**
- 7.   **A**
- 8.   **A**
- 9.   **B**



Determine which letter best represents the weight.

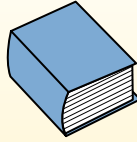
**Gram (g)**

A gram is about the weight of a paperclip.



**Kilogram (kg)**

A kilogram is about the weight of a thick book.



**Remember:**

Kilo means 1,000. So a kilogram is 1,000 grams.  
1 Kilogram is also about the same weight as 2 pounds.

**Answers**

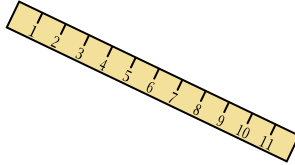
1)



Tennis Ball

- A. 1 gram
- B. 15 kilograms
- C. 1 kilogram
- D. 50 grams

2)



Ruler

- A. 999 grams
- B. 30 kilograms
- C. 20 grams
- D. 1 gram

3)



Candle

- A. 4 grams
- B. 10 kilograms
- C. 500 grams
- D. 2 kilograms


4)



Weight Set

- A. 200 grams
- B. 1 kilogram
- C. 100 kilograms
- D. 100 grams

5)



Popcorn

- A. 1 kilogram
- B. 100 grams
- C. 100 kilograms
- D. 1 gram

6)



Stove

- A. 15 kilograms
- B. 15 grams
- C. 70 grams
- D. 70 kilograms

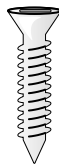
7)



Nail

- A. 3 grams
- B. 500 grams
- C. 3 kilograms
- D. 2 kilograms

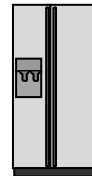
8)



Screw

- A. 1 gram
- B. 500 kilograms
- C. 500 grams
- D. 1 kilogram

9)



Refrigerator

- A. 40 grams
- B. 200 grams
- C. 10 kilograms
- D. 90 kilograms

- 1. \_\_\_\_\_
- 2. \_\_\_\_\_
- 3. \_\_\_\_\_
- 4. \_\_\_\_\_
- 5. \_\_\_\_\_
- 6. \_\_\_\_\_
- 7. \_\_\_\_\_
- 8. \_\_\_\_\_
- 9. \_\_\_\_\_



Determine which letter best represents the weight.

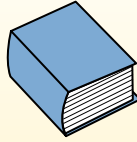
**Gram (g)**

A gram is about the weight of a paperclip.



**Kilogram (kg)**

A kilogram is about the weight of a thick book.



**Remember:**

Kilo means 1,000. So a kilogram is 1,000 grams.  
1 Kilogram is also about the same weight as 2 pounds.

**Answers**

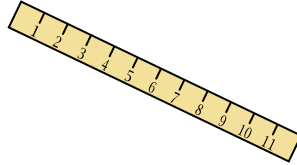
1)



Tennis Ball

- A. 1 gram
- B. 15 kilograms
- C. 1 kilogram
- D. 50 grams

2)



Ruler

- A. 999 grams
- B. 30 kilograms
- C. 20 grams
- D. 1 gram

3)



Candle

- A. 4 grams
- B. 10 kilograms
- C. 500 grams
- D. 2 kilograms

4)



Weight Set

- A. 200 grams
- B. 1 kilogram
- C. 100 kilograms
- D. 100 grams

5)



Popcorn

- A. 1 kilogram
- B. 100 grams
- C. 100 kilograms
- D. 1 gram

6)



Stove

- A. 15 kilograms
- B. 15 grams
- C. 70 grams
- D. 70 kilograms

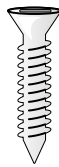
7)



Nail

- A. 3 grams
- B. 500 grams
- C. 3 kilograms
- D. 2 kilograms

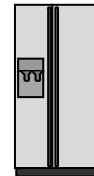
8)



Screw

- A. 1 gram
- B. 500 kilograms
- C. 500 grams
- D. 1 kilogram

9)



Refrigerator

- A. 40 grams
- B. 200 grams
- C. 10 kilograms
- D. 90 kilograms

- 1.   **D**
- 2.   **C**
- 3.   **A**
- 4.   **C**
- 5.   **D**
- 6.   **D**
- 7.   **A**
- 8.   **A**
- 9.   **D**





Determine which letter best represents the weight.

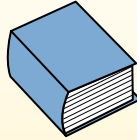
**Gram (g)**

A gram is about the weight of a paperclip.



**Kilogram (kg)**

A kilogram is about the weight of a thick book.



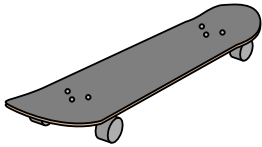
**Remember:**

Kilo means 1,000. So a kilogram is 1,000 grams.  
1 Kilogram is also about the same weight as 2 pounds.

**Answers**

1. \_\_\_\_\_
2. \_\_\_\_\_
3. \_\_\_\_\_
4. \_\_\_\_\_
5. \_\_\_\_\_
6. \_\_\_\_\_
7. \_\_\_\_\_
8. \_\_\_\_\_
9. \_\_\_\_\_

1)



Skateboard

- A. 15 kilograms
- B. 2 kilograms
- C. 20 grams
- D. 200 grams

2)



Big Screen TV

- A. 20 kilograms
- B. 1000 kilograms
- C. 100 grams
- D. 20 grams

3)



2 Liter of Soda

- A. 100 grams
- B. 3 grams
- C. 2 kilograms
- D. 50 grams


4)



Pen

- A. 5 kilograms
- B. 5000 grams
- C. 500 grams
- D. 5 grams

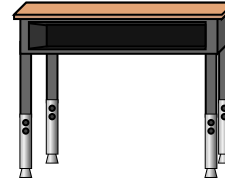
5)



Beetle

- A. 1 gram
- B. 500 grams
- C. 5000 grams
- D. 2 kilograms

6)



Desk

- A. 300 grams
- B. 15 kilograms
- C. 300 kilograms
- D. 15 grams

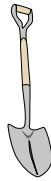
7)



Broom

- A. 200 kilograms
- B. 10 grams
- C. 10 kilograms
- D. 500 grams


8)



Shovel

- A. 30 kilograms
- B. 5 kilograms
- C. 1 gram
- D. 10 grams

9)



Elephant

- A. 30 kilograms
- B. 90 grams
- C. 5000 grams
- D. 5000 kilograms



Determine which letter best represents the weight.

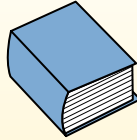
**Gram (g)**

A gram is about the weight of a paperclip.



**Kilogram (kg)**

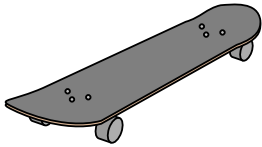
A kilogram is about the weight of a thick book.



**Remember:**

Kilo means 1,000. So a kilogram is 1,000 grams.  
1 Kilogram is also about the same weight as 2 pounds.

1)



Skateboard

- A. 15 kilograms
- B. 2 kilograms
- C. 20 grams
- D. 200 grams

2)



Big Screen TV

- A. 20 kilograms
- B. 1000 kilograms
- C. 100 grams
- D. 20 grams

3)



2 Liter of Soda

- A. 100 grams
- B. 3 grams
- C. 2 kilograms
- D. 50 grams


4)



Pen

- A. 5 kilograms
- B. 5000 grams
- C. 500 grams
- D. 5 grams

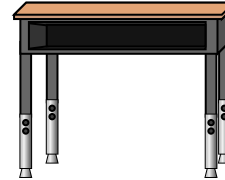
5)



Beetle

- A. 1 gram
- B. 500 grams
- C. 5000 grams
- D. 2 kilograms

6)



Desk

- A. 300 grams
- B. 15 kilograms
- C. 300 kilograms
- D. 15 grams

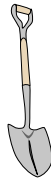
7)



Broom

- A. 200 kilograms
- B. 10 grams
- C. 10 kilograms
- D. 500 grams


8)



Shovel

- A. 30 kilograms
- B. 5 kilograms
- C. 1 gram
- D. 10 grams

9)



Elephant

- A. 30 kilograms
- B. 90 grams
- C. 5000 grams
- D. 5000 kilograms

**Answers**

- 1. **B**
- 2. **A**
- 3. **C**
- 4. **D**
- 5. **A**
- 6. **B**
- 7. **D**
- 8. **B**
- 9. **D**



Determine which letter best represents the weight.

**Gram (g)**

A gram is about the weight of a paperclip.



**Kilogram (kg)**

A kilogram is about the weight of a thick book.



**Remember:**


Kilo means 1,000. So a kilogram is 1,000 grams.

1 Kilogram is also about the same weight as 2 pounds.

**Answers**

1. \_\_\_\_\_
2. \_\_\_\_\_
3. \_\_\_\_\_
4. \_\_\_\_\_
5. \_\_\_\_\_
6. \_\_\_\_\_
7. \_\_\_\_\_
8. \_\_\_\_\_
9. \_\_\_\_\_

1)



Apple

- A. 200 grams
- B. 5 grams
- C. 5 kilograms
- D. 200 kilograms

2)



Flash Drive

- A. 10 kilograms
- B. 10 grams
- C. 1 kilogram
- D. 90 kilograms

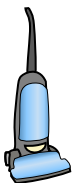
3)



Wrist Watch

- A. 500 kilograms
- B. 1 gram
- C. 90 grams
- D. 1 kilogram

4)



Vacuum

- A. 500 kilograms
- B. 90 grams
- C. 20 kilograms
- D. 50 grams

5)



Battery

- A. 10 kilograms
- B. 90 kilograms
- C. 15 grams
- D. 1 gram

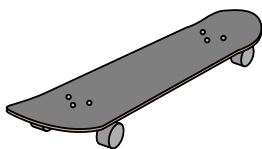
6)



Toothbrush

- A. 30 grams
- B. 500 kilograms
- C. 1 gram
- D. 15 kilograms

7)



Skateboard

- A. 20 grams
- B. 200 grams
- C. 15 kilograms
- D. 2 kilograms


8)



Tennis Ball

- A. 15 kilograms
- B. 1 kilogram
- C. 1 gram
- D. 50 grams

9)



Pear

- A. 170 kilograms
- B. 2 kilograms
- C. 170 grams
- D. 2 grams



Determine which letter best represents the weight.


**Gram (g)**

A gram is about the weight of a paperclip.



**Kilogram (kg)**

A kilogram is about the weight of a thick book.




**Remember:**


Kilo means 1,000. So a kilogram is 1,000 grams.

1 Kilogram is also about the same weight as 2 pounds.

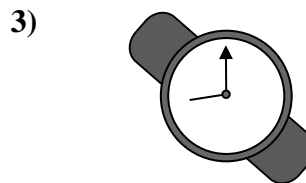
**Answers**



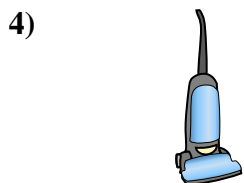
- Apple  
A. 200 grams  
B. 5 grams  
C. 5 kilograms  
D. 200 kilograms



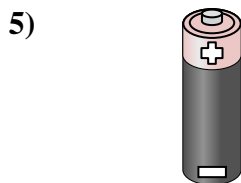
- Flash Drive  
A. 10 kilograms  
B. 10 grams  
C. 1 kilogram  
D. 90 kilograms




- Wrist Watch  
A. 500 kilograms  
B. 1 gram  
C. 90 grams  
D. 1 kilogram



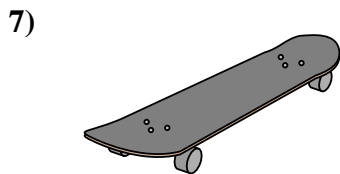
- Vacuum  
A. 500 kilograms  
B. 90 grams  
C. 20 kilograms  
D. 50 grams



- Battery  
A. 10 kilograms  
B. 90 kilograms  
C. 15 grams  
D. 1 gram



- Toothbrush  
A. 30 grams  
B. 500 kilograms  
C. 1 gram  
D. 15 kilograms



- Skateboard  
A. 20 grams  
B. 200 grams  
C. 15 kilograms  
D. 2 kilograms



- Tennis Ball  
A. 15 kilograms  
B. 1 kilogram  
C. 1 gram  
D. 50 grams



- Pear  
A. 170 kilograms  
B. 2 kilograms  
C. 170 grams  
D. 2 grams

1.   **A**    
2.   **B**    
3.   **C**    
4.   **C**    
5.   **C**    
6.   **A**    
7.   **D**    
8.   **D**    
9.   **C**