




Determine which letter best represents the weight.

Ounce (oz)

An ounce is about the weight of a slice of bread.



Pound (lb)

A pound is about the weight of a can of vegetables.



Remember:

There are 16 ounces in 1 pound.

Answers

1. _____
2. _____
3. _____
4. _____
5. _____
6. _____
7. _____
8. _____
9. _____

1)



Candle

- A. 1 pound
- B. 0.2 ounces
- C. 16 ounces
- D. 20 pounds

2)



Bicycle

- A. 4 ounces
- B. 30 pounds
- C. 0.53 ounces
- D. 220 pounds


3)



DVD

- A. 16 ounces
- B. 0.6 pounds
- C. 2.5 pounds
- D. 1 pound

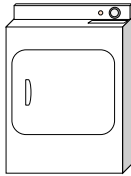
4)



Notebook Paper

- A. 2 pounds
- B. 0.1 ounces
- C. 3 ounces
- D. 10 ounces

5)



Clothes Dryer

- A. 160 ounces
- B. 7 pounds
- C. 110 pounds
- D. 1 ounce

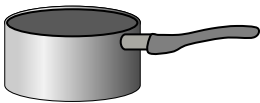
6)



Bug

- A. 2 pounds
- B. 110 pounds
- C. 0.04 ounces
- D. 2 ounces


7)



Cooking Pot

- A. 1.7 ounces
- B. 5 ounces
- C. 4 pounds
- D. 0.01 ounces

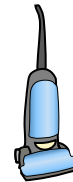
8)



Elephant

- A. 15 ounces
- B. 11000 pounds
- C. 4000 ounces
- D. 300 pounds

9)



Vacuum

- A. 3 ounces
- B. 2 ounces
- C. 1100 pounds
- D. 35 pounds




Determine which letter best represents the weight.

Ounce (oz)

Pound (lb)

An ounce is about the weight of a slice of bread.

A pound is about the weight of a can of vegetables.



Remember:

There are 16 ounces in 1 pound.

1)



Candle

- A. 1 pound
- B. 0.2 ounces
- C. 16 ounces
- D. 20 pounds

2)



Bicycle

- A. 4 ounces
- B. 30 pounds
- C. 0.53 ounces
- D. 220 pounds


3)



DVD

- A. 16 ounces
- B. 0.6 pounds
- C. 2.5 pounds
- D. 1 pound

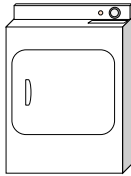
4)



Notebook Paper

- A. 2 pounds
- B. 0.1 ounces
- C. 3 ounces
- D. 10 ounces

5)



Clothes Dryer

- A. 160 ounces
- B. 7 pounds
- C. 110 pounds
- D. 1 ounce

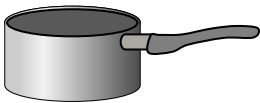
6)



Bug

- A. 2 pounds
- B. 110 pounds
- C. 0.04 ounces
- D. 2 ounces


7)



Cooking Pot

- A. 1.7 ounces
- B. 5 ounces
- C. 4 pounds
- D. 0.01 ounces

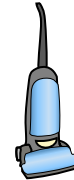
8)



Elephant

- A. 15 ounces
- B. 11000 pounds
- C. 4000 ounces
- D. 300 pounds

9)



Vacuum

- A. 3 ounces
- B. 2 ounces
- C. 1100 pounds
- D. 35 pounds

Answers


- 1. **B**
- 2. **B**
- 3. **B**
- 4. **B**
- 5. **C**
- 6. **C**
- 7. **C**
- 8. **B**
- 9. **D**



Determine which letter best represents the weight.

Ounce (oz)

An ounce is about the weight of a slice of bread.



Pound (lb)

A pound is about the weight of a can of vegetables.



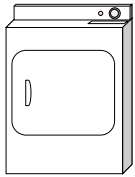
Remember:

There are 16 ounces in 1 pound.

Answers

1. _____
2. _____
3. _____
4. _____
5. _____
6. _____
7. _____
8. _____
9. _____


1)



Clothes Dryer

- A. 7 pounds
- B. 110 pounds
- C. 1 ounce
- D. 160 ounces

2)



Adult Horse

- A. 1 ounce
- B. 900 pounds
- C. 14 ounces
- D. 100 pounds

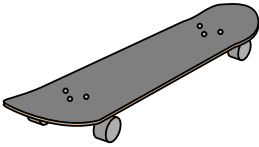
3)



File Cabinet

- A. 120 pounds
- B. 160 ounces
- C. 11 ounces
- D. 2 pounds

4)



Skateboard

- A. 33 pounds
- B. 0.71 ounces
- C. 4 pounds
- D. 7 ounces

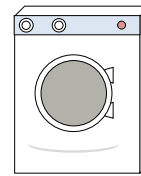
5)



Broom

- A. 440 pounds
- B. 20 pounds
- C. 2 pounds
- D. 4 ounces


6)



Washing Machine

- A. 3 tons
- B. 16 pounds
- C. 165 pounds
- D. 0.2 ounces

7)



Elephant

- A. 15 ounces
- B. 11000 pounds
- C. 300 pounds
- D. 4000 ounces

8)



Frog

- A. 17 ounces
- B. 2 ounces
- C. 2 pounds
- D. 11000 pounds

9)



Can of Soda


- A. 9 ounces
- B. 100 pounds
- C. 4 pounds
- D. 0.04 ounces



Determine which letter best represents the weight.

Ounce (oz)

An ounce is about the weight of a slice of bread.



Pound (lb)

A pound is about the weight of a can of vegetables.

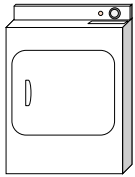


Remember:

There are 16 ounces in 1 pound.

Answers


1)



Clothes Dryer

- A. 7 pounds
- B. 110 pounds
- C. 1 ounce
- D. 160 ounces

2)



Adult Horse

- A. 1 ounce
- B. 900 pounds
- C. 14 ounces
- D. 100 pounds

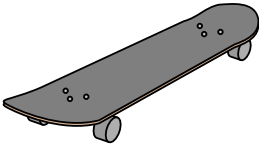
3)



File Cabinet

- A. 120 pounds
- B. 160 ounces
- C. 11 ounces
- D. 2 pounds

4)



Skateboard

- A. 33 pounds
- B. 0.71 ounces
- C. 4 pounds
- D. 7 ounces

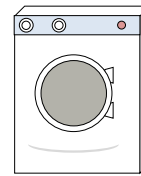
5)



Broom

- A. 440 pounds
- B. 20 pounds
- C. 2 pounds
- D. 4 ounces


6)



Washing Machine

- A. 3 tons
- B. 16 pounds
- C. 165 pounds
- D. 0.2 ounces

7)



Elephant

- A. 15 ounces
- B. 11000 pounds
- C. 300 pounds
- D. 4000 ounces

8)



Frog

- A. 17 ounces
- B. 2 ounces
- C. 2 pounds
- D. 11000 pounds

9)



Can of Soda

- A. 9 ounces
- B. 100 pounds
- C. 4 pounds
- D. 0.04 ounces

- 1. **B**
- 2. **B**
- 3. **A**
- 4. **C**
- 5. **C**
- 6. **C**
- 7. **B**
- 8. **B**
- 9. **A**



Determine which letter best represents the weight.

Ounce (oz)


An ounce is about the weight of a slice of bread.

Pound (lb)

A pound is about the weight of a can of vegetables.

Remember:


There are 16 ounces in 1 pound.



Answers

1. _____
2. _____
3. _____
4. _____
5. _____
6. _____
7. _____
8. _____
9. _____

1)



Apple

- A. 5 pounds
- B. 7 ounces
- C. 10 pounds
- D. 0.1 ounces

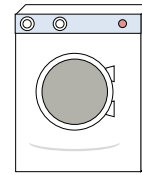
2)



Spoon

- A. 10 pounds
- B. 7 pounds
- C. 0.8 ounces
- D. 0.11 ounces


3)



Washing Machine

- A. 165 pounds
- B. 16 pounds
- C. 0.2 ounces
- D. 3 tons


4)



Notebook Paper

- A. 10 ounces
- B. 3 ounces
- C. 0.1 ounces
- D. 2 pounds

5)



Popcorn

- A. 0.3 pounds
- B. 2 pounds
- C. 10 ounces
- D. 0.04 ounces

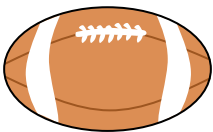
6)



Pencil

- A. 1 ounce
- B. 2 pounds
- C. 0.01 ounces
- D. 44 pounds

7)



Football

- A. 0.9 ounces
- B. 1 pound
- C. 65 pounds
- D. 13 pounds

8)



Candle

- A. 0.2 ounces
- B. 20 pounds
- C. 1 pound
- D. 16 ounces

9)



Strawberry

- A. 11 ounces
- B. 0.5 pounds
- C. 0.5 ounces
- D. 1 pound



Determine which letter best represents the weight.

Ounce (oz)


An ounce is about the weight of a slice of bread.

Pound (lb)


A pound is about the weight of a can of vegetables.

Remember:

There are 16 ounces in 1 pound.



1)



Apple

- A. 5 pounds
- B. 7 ounces
- C. 10 pounds
- D. 0.1 ounces

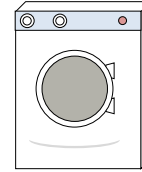
2)



Spoon

- A. 10 pounds
- B. 7 pounds
- C. 0.8 ounces
- D. 0.11 ounces


3)



Washing Machine

- A. 165 pounds
- B. 16 pounds
- C. 0.2 ounces
- D. 3 tons


4)



Notebook Paper

- A. 10 ounces
- B. 3 ounces
- C. 0.1 ounces
- D. 2 pounds

5)



Popcorn

- A. 0.3 pounds
- B. 2 pounds
- C. 10 ounces
- D. 0.04 ounces


6)



Pencil

- A. 1 ounce
- B. 2 pounds
- C. 0.01 ounces
- D. 44 pounds

7)



Football

- A. 0.9 ounces
- B. 1 pound
- C. 65 pounds
- D. 13 pounds

8)



Candle

- A. 0.2 ounces
- B. 20 pounds
- C. 1 pound
- D. 16 ounces

9)



Strawberry

- A. 11 ounces
- B. 0.5 pounds
- C. 0.5 ounces
- D. 1 pound

Answers

1. **B**

2. **C**

3. **A**

4. **C**

5. **D**

6. **A**

7. **B**

8. **A**


9. **C**



Determine which letter best represents the weight.

Ounce (oz)

An ounce is about the weight of a slice of bread.



Pound (lb)

A pound is about the weight of a can of vegetables.



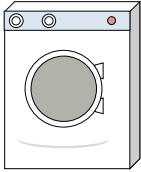
Remember:

There are 16 ounces in 1 pound.

Answers

1. _____
2. _____
3. _____
4. _____
5. _____
6. _____
7. _____
8. _____
9. _____


1)



Washing Machine

- A. 3 tons
- B. 165 pounds
- C. 16 pounds
- D. 0.2 ounces

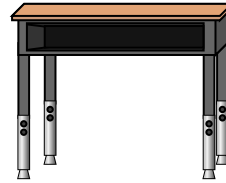
2)



Car

- A. 2000 pounds
- B. 5200 ounces
- C. 15 ounces
- D. 500 pounds

3)



Desk

- A. 11 ounces
- B. 1 ounce
- C. 30 pounds
- D. 660 pounds

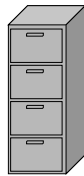
4)



Flash Drive

- A. 10 ounces
- B. 20 pounds
- C. 1 ounce
- D. 19 pounds

5)



File Cabinet

- A. 2 pounds
- B. 11 ounces
- C. 120 pounds
- D. 160 ounces

6)



Gallon of Milk

- A. 6 pounds
- B. 6 ounces
- C. 60 pounds
- D. 0.6 ounces

7)



Frog

- A. 2 ounces
- B. 11000 pounds
- C. 17 ounces
- D. 2 pounds

8)



Nail

- A. 7 pounds
- B. 4 pounds
- C. 16 ounces
- D. 0.1 ounces

9)



Wrist Watch


- A. 12 pounds
- B. 2 pounds
- C. 16 ounces
- D. 3 ounces



Determine which letter best represents the weight.

Ounce (oz)

An ounce is about the weight of a slice of bread.



Pound (lb)

A pound is about the weight of a can of vegetables.

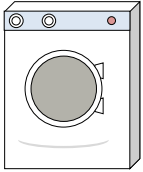


Remember:

There are 16 ounces in 1 pound.

Answers


1)



Washing Machine

- A. 3 tons
- B. 165 pounds
- C. 16 pounds
- D. 0.2 ounces

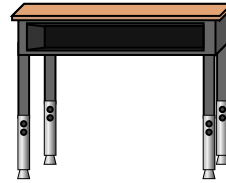
2)



Car

- A. 2000 pounds
- B. 5200 ounces
- C. 15 ounces
- D. 500 pounds

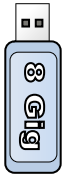
3)



Desk

- A. 11 ounces
- B. 1 ounce
- C. 30 pounds
- D. 660 pounds

4)



Flash Drive

- A. 10 ounces
- B. 20 pounds
- C. 1 ounce
- D. 19 pounds

5)



File Cabinet

- A. 2 pounds
- B. 11 ounces
- C. 120 pounds
- D. 160 ounces

6)



Gallon of Milk

- A. 6 pounds
- B. 6 ounces
- C. 60 pounds
- D. 0.6 ounces

7)



Frog

- A. 2 ounces
- B. 11000 pounds
- C. 17 ounces
- D. 2 pounds

8)



Nail

- A. 7 pounds
- B. 4 pounds
- C. 16 ounces
- D. 0.1 ounces

9)



Wrist Watch

- A. 12 pounds
- B. 2 pounds
- C. 16 ounces
- D. 3 ounces


- 1. **B**
- 2. **A**
- 3. **C**
- 4. **C**
- 5. **C**
- 6. **A**
- 7. **A**
- 8. **D**
- 9. **D**



Determine which letter best represents the weight.

Ounce (oz)

An ounce is about the weight of a slice of bread.



Pound (lb)

A pound is about the weight of a can of vegetables.



Remember:

There are 16 ounces in 1 pound.

Answers

1. _____
2. _____
3. _____
4. _____
5. _____
6. _____
7. _____
8. _____
9. _____

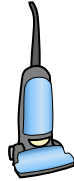
1)



File Cabinet

- A. 2 pounds
- B. 11 ounces
- C. 160 ounces
- D. 120 pounds

2)



Vacuum


- A. 1100 pounds
- B. 35 pounds
- C. 2 ounces
- D. 3 ounces

3)

Screw

- A. 0.04 ounces
- B. 2 pounds
- C. 10 ounces
- D. 1 pound

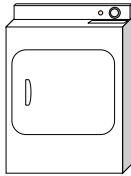
4)



Adult Horse

- A. 14 ounces
- B. 900 pounds
- C. 1 ounce
- D. 100 pounds


5)



Clothes Dryer

- A. 110 pounds
- B. 1 ounce
- C. 160 ounces
- D. 7 pounds

6)



Notebook Paper


- A. 3 ounces
- B. 10 ounces
- C. 2 pounds
- D. 0.1 ounces

7)

Big Screen TV

- A. 2000 pounds
- B. 160 ounces
- C. 1.25 ounces
- D. 40 pounds

8)



Lawn Mower

- A. 100 ounces
- B. 200 ounces
- C. 200 pounds
- D. 50 pounds

9)



Candle


- A. 0.2 ounces
- B. 16 ounces
- C. 1 pound
- D. 20 pounds



Determine which letter best represents the weight.

Ounce (oz)

An ounce is about the weight of a slice of bread.



Pound (lb)

A pound is about the weight of a can of vegetables.



Remember:
There are 16 ounces in 1 pound.

Answers

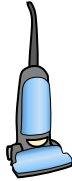
1)



File Cabinet

- A. 2 pounds
- B. 11 ounces
- C. 160 ounces
- D. 120 pounds

2)



Vacuum


- A. 1100 pounds
- B. 35 pounds
- C. 2 ounces
- D. 3 ounces

3)

Screw

- A. 0.04 ounces
- B. 2 pounds
- C. 10 ounces
- D. 1 pound

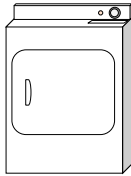
4)



Adult Horse

- A. 14 ounces
- B. 900 pounds
- C. 1 ounce
- D. 100 pounds


5)



Clothes Dryer

- A. 110 pounds
- B. 1 ounce
- C. 160 ounces
- D. 7 pounds

6)



Notebook Paper


- A. 3 ounces
- B. 10 ounces
- C. 2 pounds
- D. 0.1 ounces

7)

Big Screen TV

- A. 2000 pounds
- B. 160 ounces
- C. 1.25 ounces
- D. 40 pounds

8)



Lawn Mower

- A. 100 ounces
- B. 200 ounces
- C. 200 pounds
- D. 50 pounds

9)



Candle

- A. 0.2 ounces
- B. 16 ounces
- C. 1 pound
- D. 20 pounds


- 1. **D**
- 2. **B**
- 3. **A**
- 4. **B**
- 5. **A**
- 6. **D**
- 7. **D**
- 8. **D**
- 9. **A**



Determine which letter best represents the weight.

Ounce (oz)

An ounce is about the weight of a slice of bread.



Pound (lb)

A pound is about the weight of a can of vegetables.



Remember:

There are 16 ounces in 1 pound.

Answers

1. _____
2. _____
3. _____
4. _____
5. _____
6. _____
7. _____
8. _____
9. _____

1)



Baseball Cap

- A. 3 ounces
- B. 1 ounce
- C. 440 pounds
- D. 11 pounds

2)



Monitor

- A. 1000 pounds
- B. 20 ounces
- C. 0.2 ounces
- D. 20 pounds

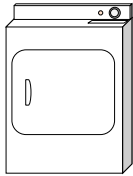
3)



Can of Soda

- A. 0.04 ounces
- B. 9 ounces
- C. 4 pounds
- D. 100 pounds

4)



Clothes Dryer

- A. 1 ounce
- B. 110 pounds
- C. 160 ounces
- D. 7 pounds


5)



Toothbrush

- A. 1 ounce
- B. 1100 pounds
- C. 16 ounces
- D. 30 pounds

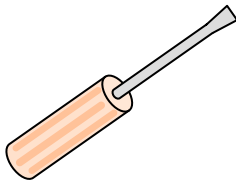
6)



Hammer

- A. 10 pounds
- B. 16 ounces
- C. 3 pounds
- D. 1 ounce

7)



Screw Driver

- A. 0.1 ounces
- B. 15 ounces
- C. 29 pounds
- D. 2 ounces

8)



Recliner

- A. 3 ounces
- B. 5 ounces
- C. 70 pounds
- D. 2 pounds

9)



Cereal Box

- A. 90 pounds
- B. 15 ounces
- C. 1.1 ounces
- D. 15 pounds




Determine which letter best represents the weight.

Ounce (oz)

Pound (lb)

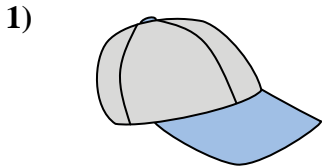
An ounce is about the weight of a slice of bread.

A pound is about the weight of a can of vegetables.



Remember:
There are 16 ounces in 1 pound.

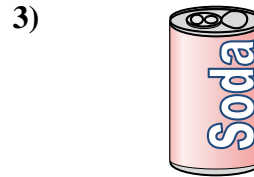
Answers



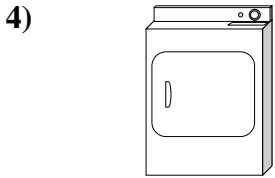
- Baseball Cap
- A. 3 ounces
 - B. 1 ounce
 - C. 440 pounds
 - D. 11 pounds




- Monitor
- A. 1000 pounds
 - B. 20 ounces
 - C. 0.2 ounces
 - D. 20 pounds




- Can of Soda
- A. 0.04 ounces
 - B. 9 ounces
 - C. 4 pounds
 - D. 100 pounds




- Clothes Dryer
- A. 1 ounce
 - B. 110 pounds
 - C. 160 ounces
 - D. 7 pounds




- Toothbrush
- A. 1 ounce
 - B. 1100 pounds
 - C. 16 ounces
 - D. 30 pounds



- Hammer
- A. 10 pounds
 - B. 16 ounces
 - C. 3 pounds
 - D. 1 ounce



- Screw Driver
- A. 0.1 ounces
 - B. 15 ounces
 - C. 29 pounds
 - D. 2 ounces



- Recliner
- A. 3 ounces
 - B. 5 ounces
 - C. 70 pounds
 - D. 2 pounds



- Cereal Box
- A. 90 pounds
 - B. 15 ounces
 - C. 1.1 ounces
 - D. 15 pounds

- 1. **A**
- 2. **D**
- 3. **B**
- 4. **B**
- 5. **A**
- 6. **C**
- 7. **D**
- 8. **C**
- 9. **B**




Determine which letter best represents the weight.

Ounce (oz)

Pound (lb)

An ounce is about the weight of a slice of bread.

A pound is about the weight of a can of vegetables.




Remember:

There are 16 ounces in 1 pound.

Answers

1. _____
2. _____
3. _____
4. _____
5. _____
6. _____
7. _____
8. _____
9. _____

1)



Lollipop

- A. 44 pounds
- B. 7 ounces
- C. 0.7 ounces
- D. 10 pounds


2)



Bicycle

- A. 30 pounds
- B. 220 pounds
- C. 4 ounces
- D. 0.53 ounces

3)



Battery

- A. 20 pounds
- B. 100 pounds
- C. 10 ounces
- D. 0.5 ounces

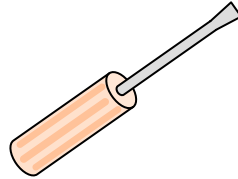
4)



File Cabinet

- A. 11 ounces
- B. 160 ounces
- C. 2 pounds
- D. 120 pounds

5)



Screw Driver

- A. 15 ounces
- B. 2 ounces
- C. 29 pounds
- D. 0.1 ounces

6)



Glue Stick

- A. 15 ounces
- B. 2 pounds
- C. 2.2 ounces
- D. 1 pound


7)



Recliner

- A. 70 pounds
- B. 3 ounces
- C. 2 pounds
- D. 5 ounces

8)



Elephant

- A. 11000 pounds
- B. 4000 ounces
- C. 15 ounces
- D. 300 pounds

9)



Phone

- A. 10 pounds
- B. 1 pound
- C. 0.2 ounces
- D. 5 pounds




Determine which letter best represents the weight.

Ounce (oz)

Pound (lb)

An ounce is about the weight of a slice of bread.


A pound is about the weight of a can of vegetables.



Remember:
There are 16 ounces in 1 pound.

Answers

1)



Lollipop

- A. 44 pounds
- B. 7 ounces
- C. 0.7 ounces
- D. 10 pounds

2)



Bicycle

- A. 30 pounds
- B. 220 pounds
- C. 4 ounces
- D. 0.53 ounces

3)



Battery

- A. 20 pounds
- B. 100 pounds
- C. 10 ounces
- D. 0.5 ounces

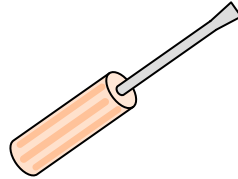
4)



File Cabinet

- A. 11 ounces
- B. 160 ounces
- C. 2 pounds
- D. 120 pounds

5)



Screw Driver

- A. 15 ounces
- B. 2 ounces
- C. 29 pounds
- D. 0.1 ounces

6)



Glue Stick

- A. 15 ounces
- B. 2 pounds
- C. 2.2 ounces
- D. 1 pound


7)



Recliner

- A. 70 pounds
- B. 3 ounces
- C. 2 pounds
- D. 5 ounces

8)



Elephant

- A. 11000 pounds
- B. 4000 ounces
- C. 15 ounces
- D. 300 pounds

9)



Phone

- A. 10 pounds
- B. 1 pound
- C. 0.2 ounces
- D. 5 pounds


- 1. **C**
- 2. **A**
- 3. **D**
- 4. **D**
- 5. **B**
- 6. **C**
- 7. **A**
- 8. **A**
- 9. **B**



Determine which letter best represents the weight.

Ounce (oz)

An ounce is about the weight of a slice of bread.



Pound (lb)

A pound is about the weight of a can of vegetables.



Remember:

There are 16 ounces in 1 pound.

Answers

1. _____
2. _____
3. _____
4. _____
5. _____
6. _____
7. _____
8. _____
9. _____

1)



Stove

- A. 16 ounces
- B. 30 pounds
- C. 160 ounces
- D. 130 pounds

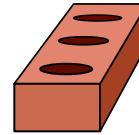
2)



Spider

- A. 4 ounces
- B. 16 ounces
- C. 0.04 ounces
- D. 0.3 pounds

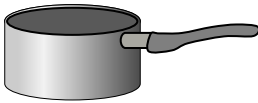
3)



Brick

- A. 4 pounds
- B. 100 pounds
- C. 15 ounces
- D. 5 ounces

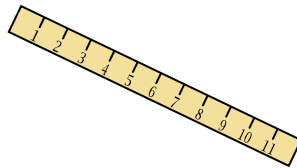
4)



Cooking Pot

- A. 0.01 ounces
- B. 5 ounces
- C. 4 pounds
- D. 1.7 ounces

5)



Ruler

- A. 35 ounces
- B. 0.04 ounces
- C. 6 pounds
- D. 1 ounce


6)



Bicycle

- A. 0.53 ounces
- B. 220 pounds
- C. 4 ounces
- D. 30 pounds


7)



Can of Soda

- A. 9 ounces
- B. 4 pounds
- C. 100 pounds
- D. 0.04 ounces

8)



Lollipop

- A. 0.7 ounces
- B. 10 pounds
- C. 7 ounces
- D. 44 pounds

9)



DVD

- A. 1 pound
- B. 2.5 pounds
- C. 16 ounces
- D. 0.6 pounds




Determine which letter best represents the weight.

Ounce (oz)

Pound (lb)

An ounce is about the weight of a slice of bread.

A pound is about the weight of a can of vegetables.



Remember:
There are 16 ounces in 1 pound.

Answers

1)



Stove

- A. 16 ounces
- B. 30 pounds
- C. 160 ounces
- D. 130 pounds

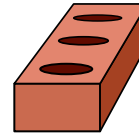
2)



Spider

- A. 4 ounces
- B. 16 ounces
- C. 0.04 ounces
- D. 0.3 pounds

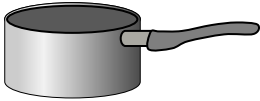
3)



Brick

- A. 4 pounds
- B. 100 pounds
- C. 15 ounces
- D. 5 ounces

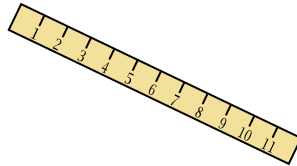
4)



Cooking Pot

- A. 0.01 ounces
- B. 5 ounces
- C. 4 pounds
- D. 1.7 ounces

5)



Ruler

- A. 35 ounces
- B. 0.04 ounces
- C. 6 pounds
- D. 1 ounce


6)



Bicycle

- A. 0.53 ounces
- B. 220 pounds
- C. 4 ounces
- D. 30 pounds


7)



Can of Soda

- A. 9 ounces
- B. 4 pounds
- C. 100 pounds
- D. 0.04 ounces

8)



Lollipop

- A. 0.7 ounces
- B. 10 pounds
- C. 7 ounces
- D. 44 pounds

9)



DVD

- A. 1 pound
- B. 2.5 pounds
- C. 16 ounces
- D. 0.6 pounds


- 1. **D**
- 2. **C**
- 3. **A**
- 4. **C**
- 5. **D**
- 6. **D**
- 7. **A**
- 8. **A**
- 9. **D**



Determine which letter best represents the weight.

Ounce (oz)

An ounce is about the weight of a slice of bread.



Pound (lb)

A pound is about the weight of a can of vegetables.



Remember:

There are 16 ounces in 1 pound.

Answers

1. _____
2. _____
3. _____
4. _____
5. _____
6. _____
7. _____
8. _____
9. _____


1)



Stove

- A. 30 pounds
- B. 130 pounds
- C. 160 ounces
- D. 16 ounces


2)



Car

- A. 2000 pounds
- B. 5200 ounces
- C. 500 pounds
- D. 15 ounces


3)



Elephant

- A. 15 ounces
- B. 4000 ounces
- C. 11000 pounds
- D. 300 pounds


4)



Notebook Paper

- A. 3 ounces
- B. 10 ounces
- C. 2 pounds
- D. 0.1 ounces

5)



DVD

- A. 0.6 pounds
- B. 1 pound
- C. 2.5 pounds
- D. 16 ounces


6)



Popcorn

- A. 0.3 pounds
- B. 0.04 ounces
- C. 2 pounds
- D. 10 ounces

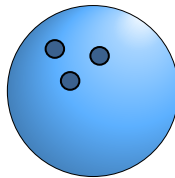
7)



Beetle

- A. 8 ounces
- B. 16 ounces
- C. 4 pounds
- D. 0.04 ounces

8)



Bowling Ball

- A. 198 pounds
- B. 13 pounds
- C. 7 ounces
- D. 110 pounds

9)



Spoon


- A. 0.11 ounces
- B. 10 pounds
- C. 7 pounds
- D. 0.8 ounces



Determine which letter best represents the weight.

Ounce (oz)

An ounce is about the weight of a slice of bread.



Pound (lb)

A pound is about the weight of a can of vegetables.



Remember:

There are 16 ounces in 1 pound.

Answers


1)



Stove

- A. 30 pounds
- B. 130 pounds
- C. 160 ounces
- D. 16 ounces


2)



Car

- A. 2000 pounds
- B. 5200 ounces
- C. 500 pounds
- D. 15 ounces


3)



Elephant

- A. 15 ounces
- B. 4000 ounces
- C. 11000 pounds
- D. 300 pounds


4)



Notebook Paper

- A. 3 ounces
- B. 10 ounces
- C. 2 pounds
- D. 0.1 ounces

5)



DVD

- A. 0.6 pounds
- B. 1 pound
- C. 2.5 pounds
- D. 16 ounces


6)



Popcorn

- A. 0.3 pounds
- B. 0.04 ounces
- C. 2 pounds
- D. 10 ounces

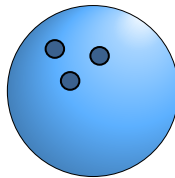
7)



Beetle

- A. 8 ounces
- B. 16 ounces
- C. 4 pounds
- D. 0.04 ounces

8)



Bowling Ball

- A. 198 pounds
- B. 13 pounds
- C. 7 ounces
- D. 110 pounds

9)



Spoon

- A. 0.11 ounces
- B. 10 pounds
- C. 7 pounds
- D. 0.8 ounces


- 1. **B**
- 2. **A**
- 3. **C**
- 4. **D**
- 5. **A**
- 6. **B**
- 7. **D**
- 8. **B**
- 9. **D**



Determine which letter best represents the weight.

Ounce (oz)

An ounce is about the weight of a slice of bread.



Pound (lb)

A pound is about the weight of a can of vegetables.



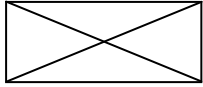
Remember:

There are 16 ounces in 1 pound.

Answers

1. _____
2. _____
3. _____
4. _____
5. _____
6. _____
7. _____
8. _____
9. _____

1)



Envelope

- A. 1 ounce
- B. 440 pounds
- C. 11 pounds
- D. 24 ounces

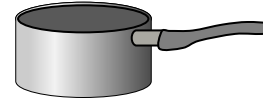
2)



Monitor

- A. 20 ounces
- B. 20 pounds
- C. 0.2 ounces
- D. 1000 pounds

3)



Cooking Pot

- A. 0.01 ounces
- B. 1.7 ounces
- C. 4 pounds
- D. 5 ounces

4)



Glue Stick

- A. 1 pound
- B. 2 pounds
- C. 2.2 ounces
- D. 15 ounces

5)



Frog

- A. 2 pounds
- B. 11000 pounds
- C. 2 ounces
- D. 17 ounces

6)



Phone

- A. 1 pound
- B. 5 pounds
- C. 0.2 ounces
- D. 10 pounds

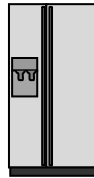
7)



Toothbrush

- A. 1100 pounds
- B. 16 ounces
- C. 30 pounds
- D. 1 ounce

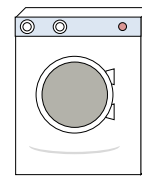
8)



Refrigerator

- A. 20 pounds
- B. 7 ounces
- C. 1 ounce
- D. 250 pounds

9)



Washing Machine


- A. 0.2 ounces
- B. 3 tons
- C. 165 pounds
- D. 16 pounds



Determine which letter best represents the weight.

Ounce (oz)

An ounce is about the weight of a slice of bread.



Pound (lb)

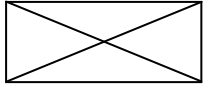
A pound is about the weight of a can of vegetables.



Remember:
There are 16 ounces in 1 pound.

Answers

1)



Envelope

- A. 1 ounce
- B. 440 pounds
- C. 11 pounds
- D. 24 ounces

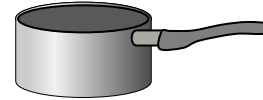
2)



Monitor

- A. 20 ounces
- B. 20 pounds
- C. 0.2 ounces
- D. 1000 pounds

3)



Cooking Pot

- A. 0.01 ounces
- B. 1.7 ounces
- C. 4 pounds
- D. 5 ounces

4)



Glue Stick

- A. 1 pound
- B. 2 pounds
- C. 2.2 ounces
- D. 15 ounces

5)



Frog

- A. 2 pounds
- B. 11000 pounds
- C. 2 ounces
- D. 17 ounces

6)



Phone

- A. 1 pound
- B. 5 pounds
- C. 0.2 ounces
- D. 10 pounds

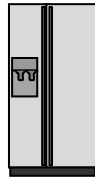
7)



Toothbrush

- A. 1100 pounds
- B. 16 ounces
- C. 30 pounds
- D. 1 ounce

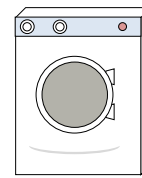
8)



Refrigerator

- A. 20 pounds
- B. 7 ounces
- C. 1 ounce
- D. 250 pounds

9)



Washing Machine

- A. 0.2 ounces
- B. 3 tons
- C. 165 pounds
- D. 16 pounds

- 1. **A**
- 2. **B**
- 3. **C**
- 4. **C**
- 5. **C**
- 6. **A**
- 7. **D**
- 8. **D**
- 9. **C**