

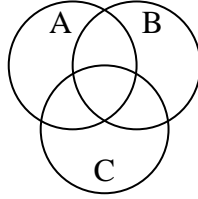


Shade the region shown.

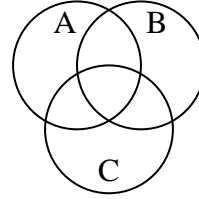
1) $B \cup A$



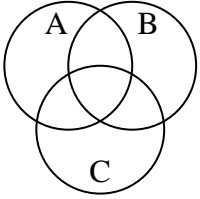
2) $A - (B \cap C)$



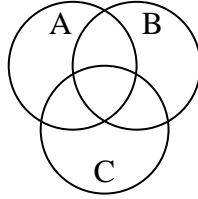
3) $A - (C \cup B)$



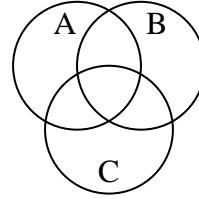
4) $C \cup A$



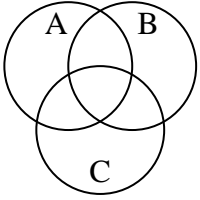
5) $B - (C \cup A)$



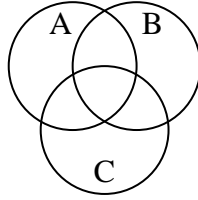
6) $(C \cup B) - A$



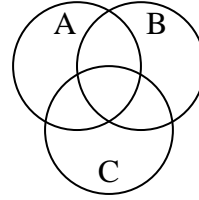
7) $(B \cup A) - C$



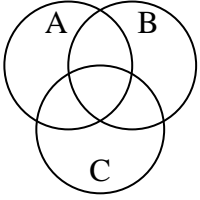
8) $B - (C \cap A)$



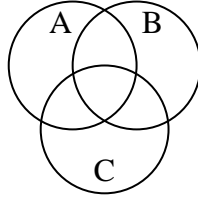
9) $B \cup (A - C)$



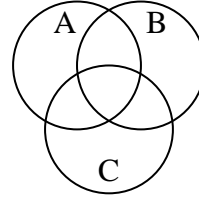
10) $A \cap (C - B)$



11) $B \cup A \cup C$



12) $(A \cup C) - B$



Answers

1. _____

2. _____

3. _____

4. _____

5. _____

6. _____

7. _____

8. _____

9. _____

10. _____

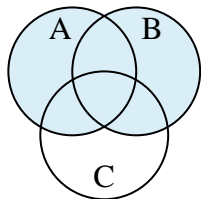
11. _____

12. _____

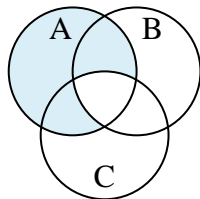


Shade the region shown.

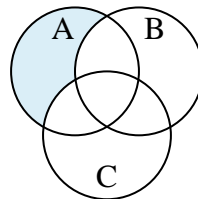
1) $B \cup A$



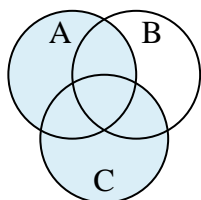
2) $A - (B \cap C)$



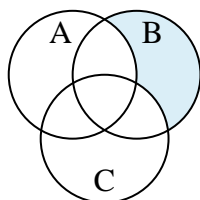
3) $A - (C \cup B)$



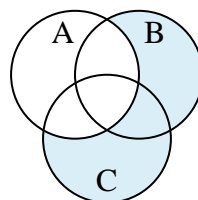
4) $C \cup A$



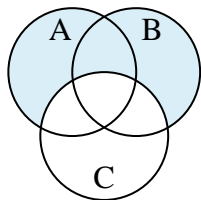
5) $B - (C \cup A)$



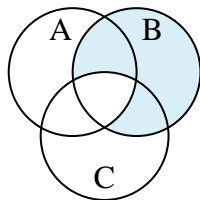
6) $(C \cup B) - A$



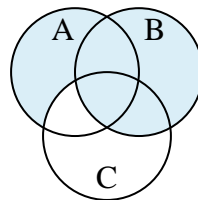
7) $(B \cup A) - C$



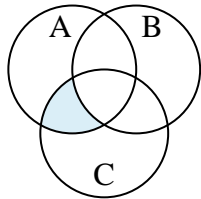
8) $B - (C \cap A)$



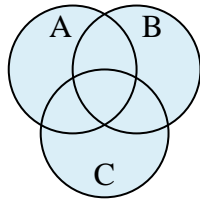
9) $B \cup (A - C)$



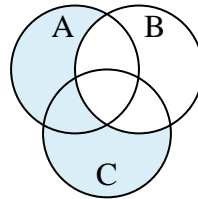
10) $A \cap (C - B)$



11) $B \cup A \cup C$



12) $(A \cup C) - B$



Answers

1. $B \cup A$

2. $A - (B \cap C)$

3. $A - (C \cup B)$

4. $C \cup A$

5. $B - (C \cup A)$

6. $(C \cup B) - A$

7. $(B \cup A) - C$

8. $B - (C \cap A)$

9. $B \cup (A - C)$

10. $A \cap (C - B)$

11. $B \cup A \cup C$

12. $(A \cup C) - B$