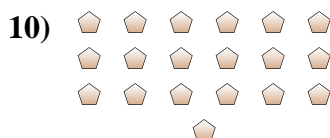
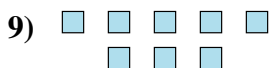
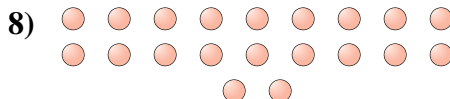
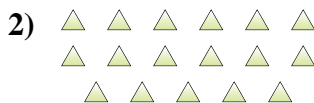
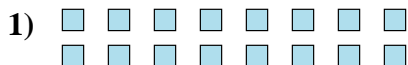




Determine if the number of shapes is even or odd.



Answers

1. _____

2. _____

3. _____

4. _____

5. _____

6. _____

7. _____

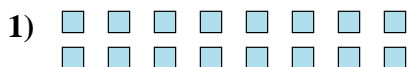
8. _____

9. _____

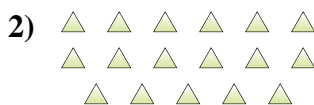
10. _____



Determine if the number of shapes is even or odd.



16



17



5



6



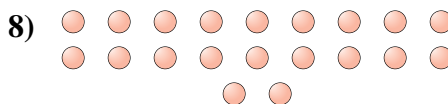
13



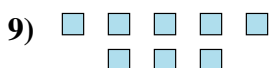
15



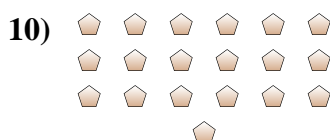
8



20



8



19

Answers

1. even

2. odd

3. odd

4. even

5. odd

6. odd

7. even

8. even

9. even

10. odd