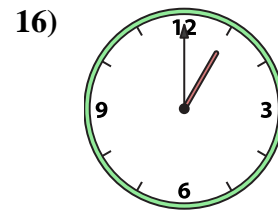
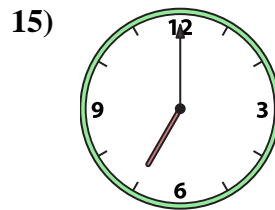
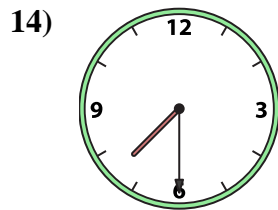
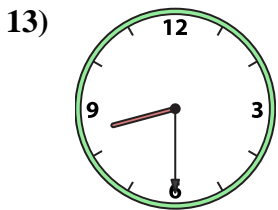
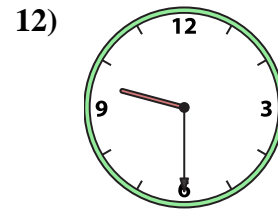
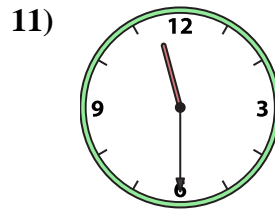
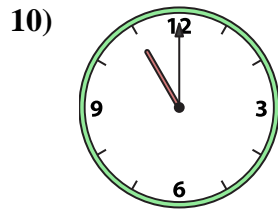
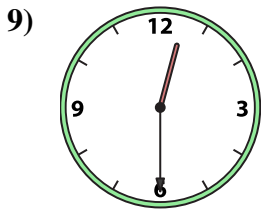
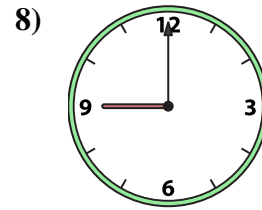
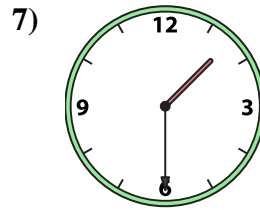
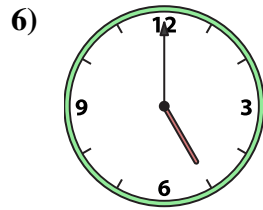
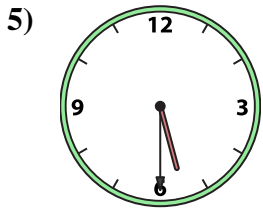
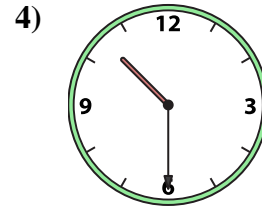
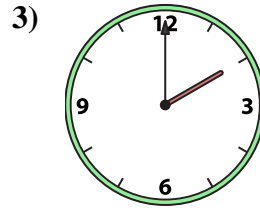
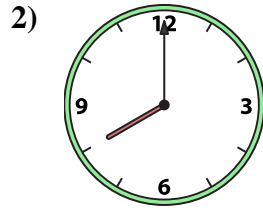
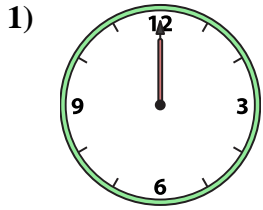




Match the analog clock to the digital clock.



A. 11:30

B. 7:00

C. 12:30

D. 8:30

E. 5:30

F. 8:00

G. 11:00

H. 9:30

I. 1:00

J. 12:00

K. 2:00

L. 1:30

M. 7:30

N. 9:00

O. 5:00

P. 10:30

Answers

1. _____

2. _____

3. _____

4. _____

5. _____

6. _____

7. _____

8. _____

9. _____

10. _____

11. _____

12. _____

13. _____

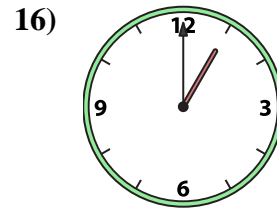
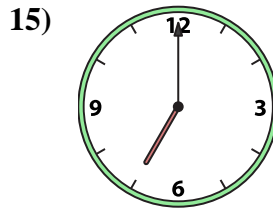
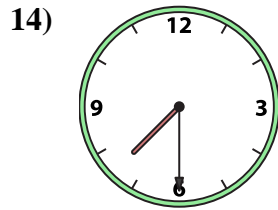
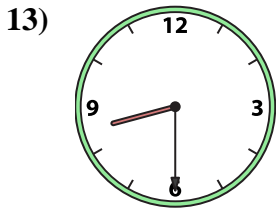
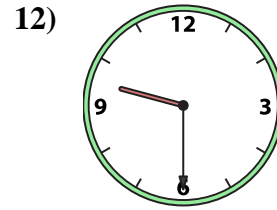
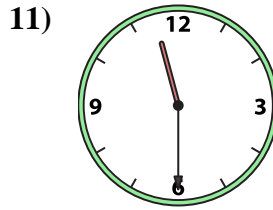
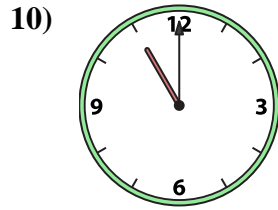
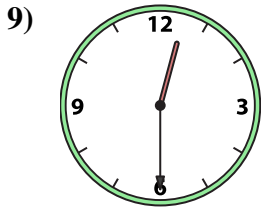
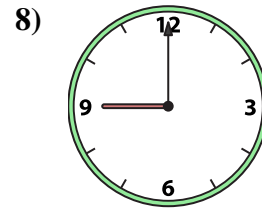
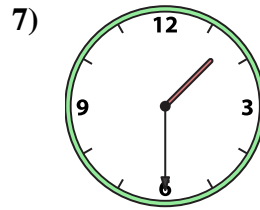
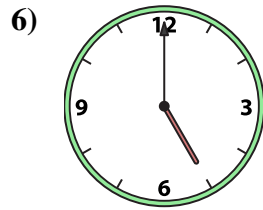
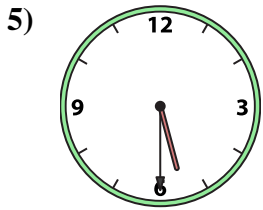
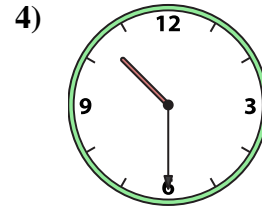
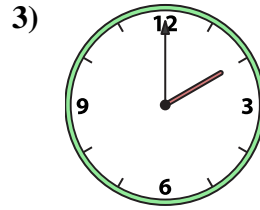
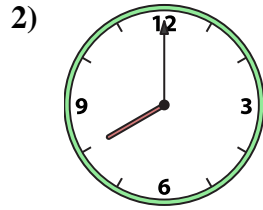
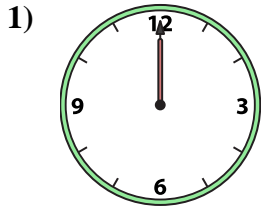
14. _____

15. _____

16. _____



Match the analog clock to the digital clock.



A. **11:30**

B. **7:00**

C. **12:30**

D. **8:30**

E. **5:30**

F. **8:00**

G. **11:00**

H. **9:30**

I. **1:00**

J. **12:00**

K. **2:00**

L. **1:30**

M. **7:30**

N. **9:00**

O. **5:00**

P. **10:30**

Answers

1. **J**

2. **F**

3. **K**

4. **P**

5. **E**

6. **O**

7. **L**

8. **N**

9. **C**

10. **G**

11. **A**

12. **H**

13. **D**

14. **M**

15. **B**

16. **I**