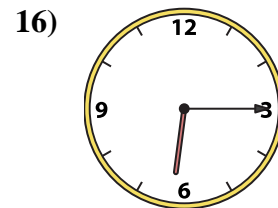
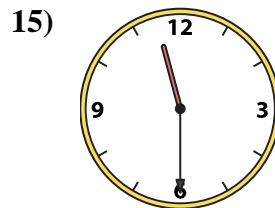
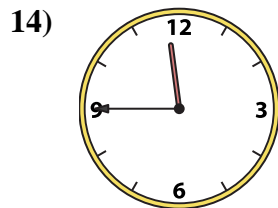
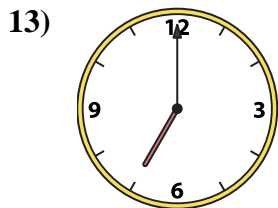
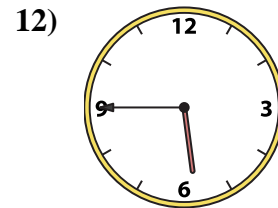
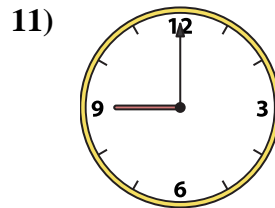
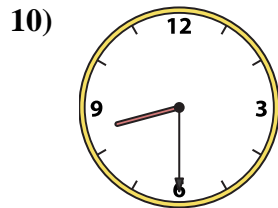
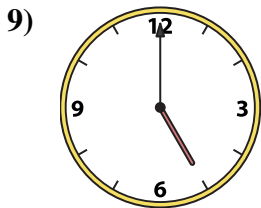
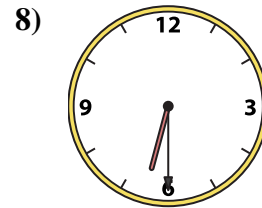
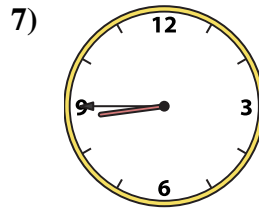
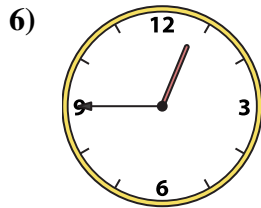

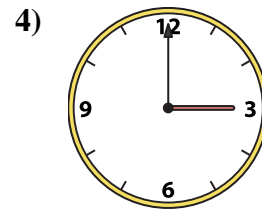
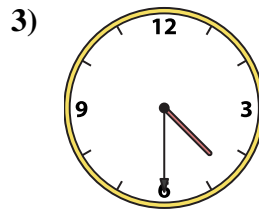
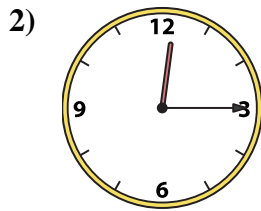
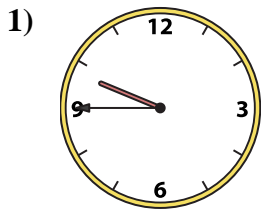




Match the analog clock to the digital clock.

Answers

A.

B.

C.

D.

E.

F.

G.

H.

I.

J.

K.

L.

M.

N.

O.

P.

1. _____

2. _____

3. _____

4. _____

5. _____

6. _____

7. _____

8. _____

9. _____

10. _____

11. _____

12. _____

13. _____

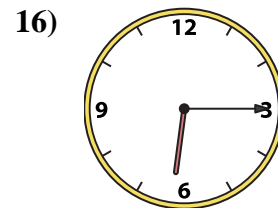
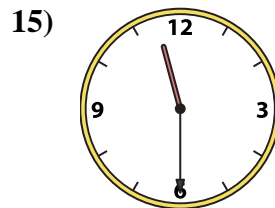
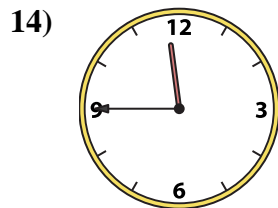
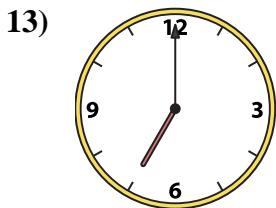
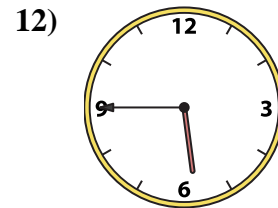
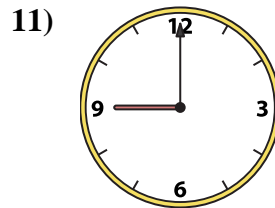
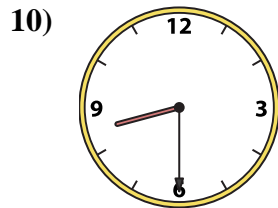
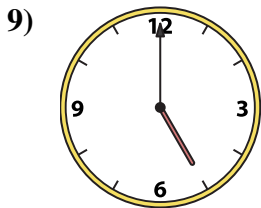
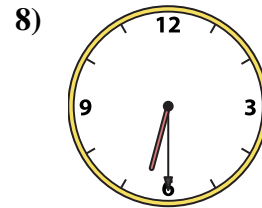
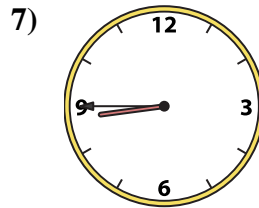
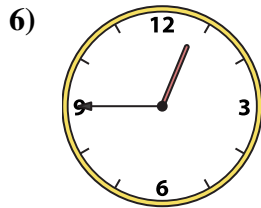

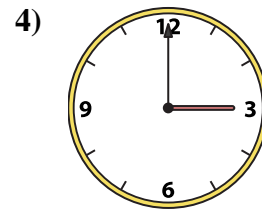
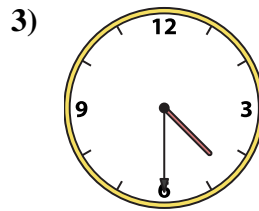
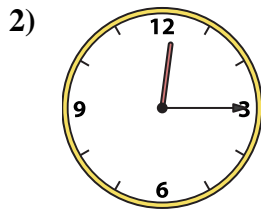
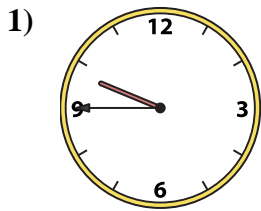
14. _____

15. _____

16. _____



Match the analog clock to the digital clock.

Answers

A. **9:45**

B. **11:30**

C. **5:45**

D. **5:00**

E. **4:30**

F. **7:00**

G. **11:45**

H. **3:00**

I. **8:30**

J. **1:15**

K. **12:15**

L. **8:45**

M. **6:15**

N. **6:30**

O. **12:45**

P. **9:00**

1. **A**

2. **K**

3. **E**

4. **H**

5. **J**

6. **O**

7. **L**

8. **N**

9. **D**

10. **I**

11. **P**

12. **C**

13. **F**

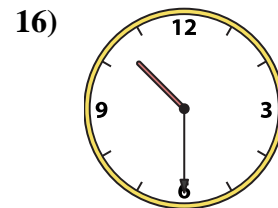
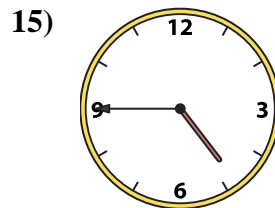
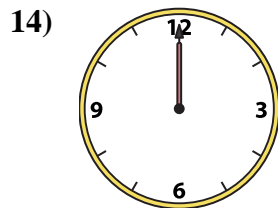
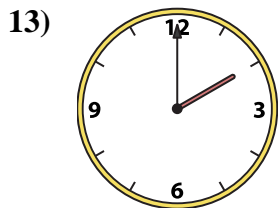
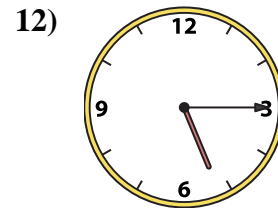
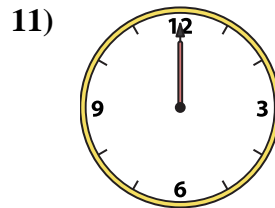
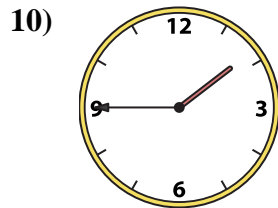
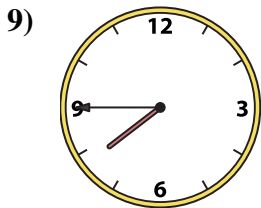
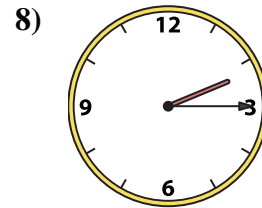
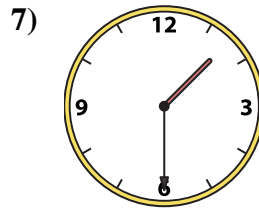
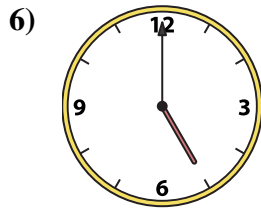
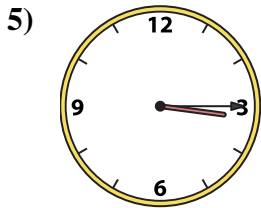
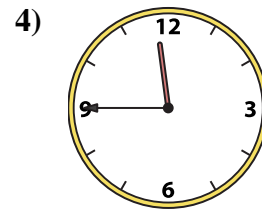
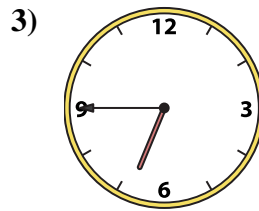
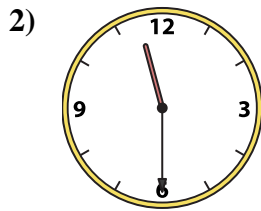
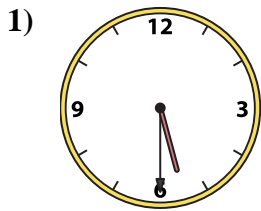
14. **G**

15. **B**

16. **M**



Match the analog clock to the digital clock.

Answers

A.

B.

C.

D.

E.

F.

G.

H.

I.

J.

K.

L.

M.

N.

O.

P.

1. _____

2. _____

3. _____

4. _____

5. _____

6. _____

7. _____

8. _____

9. _____

10. _____

11. _____

12. _____

13. _____

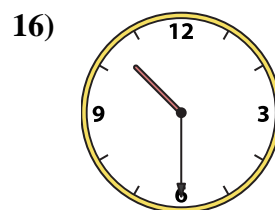
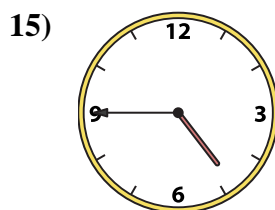
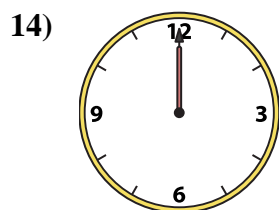
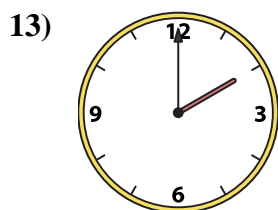
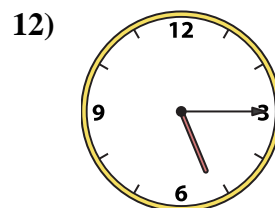
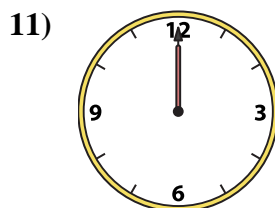
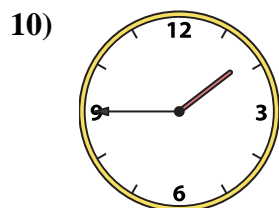
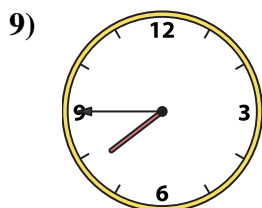

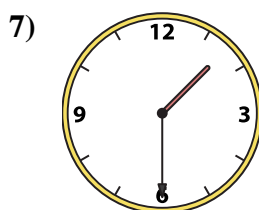
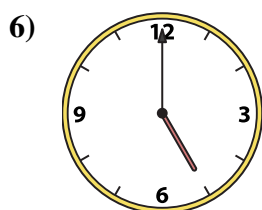
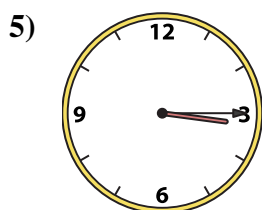
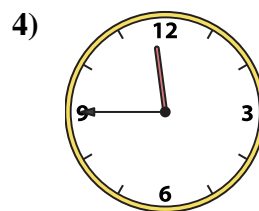
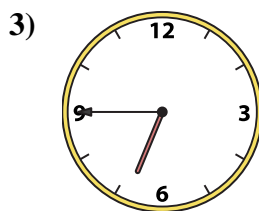
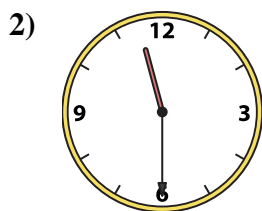
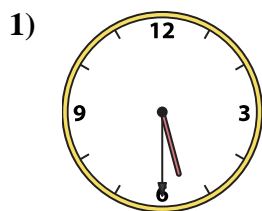
14. _____

15. _____

16. _____



Match the analog clock to the digital clock.

Answers

A. **2:00**

B. **4:45**

C. **10:30**

D. **5:30**

E. **7:45**

F. **12:00**

G. **6:45**

H. **11:30**

I. **3:15**

J. **11:45**

K. **5:15**

L. **2:15**

M. **1:45**

N. **1:30**

O. **12:00**

P. **5:00**

1. **D**

2. **H**

3. **G**

4. **J**

5. **I**

6. **P**

7. **N**

8. **L**

9. **E**

10. **M**

11. **O**

12. **K**

13. **A**

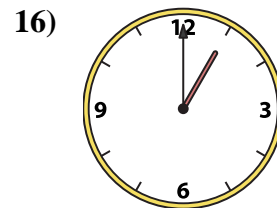
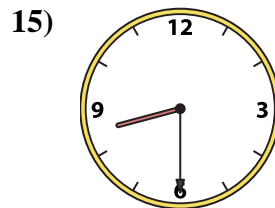
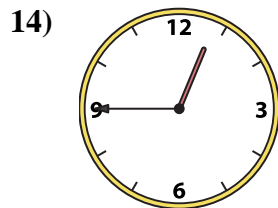
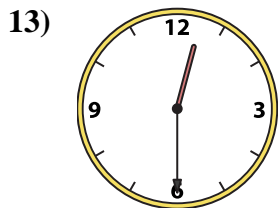
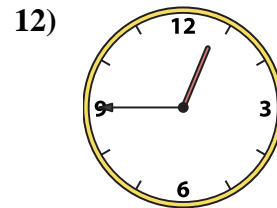
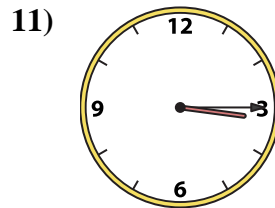
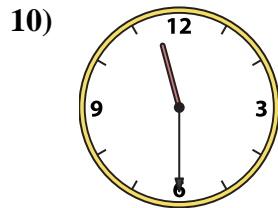
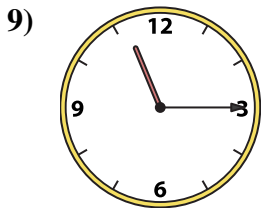
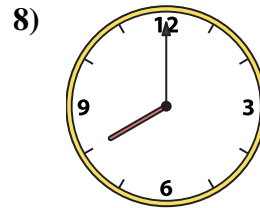
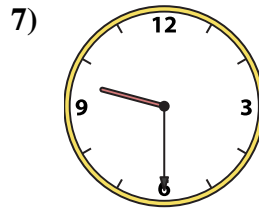
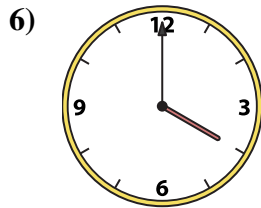
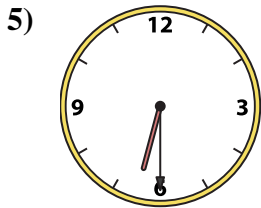
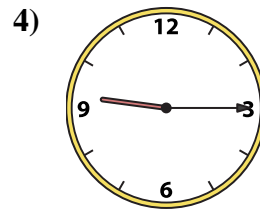
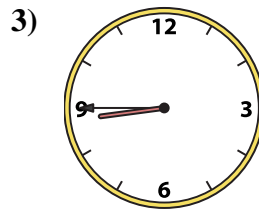
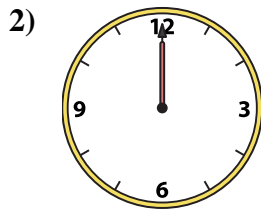
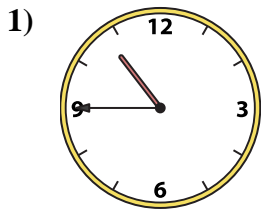
14. **F**

15. **B**

16. **C**



Match the analog clock to the digital clock.

Answers

A.

B.

C.

D.

E.

F.

G.

H.

I.

J.

K.

L.

M.

N.

O.

P.

1. _____

2. _____

3. _____

4. _____

5. _____

6. _____

7. _____

8. _____

9. _____

10. _____

11. _____

12. _____

13. _____

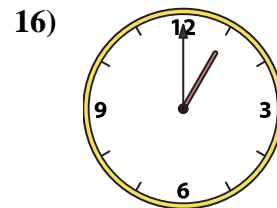
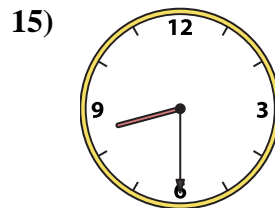
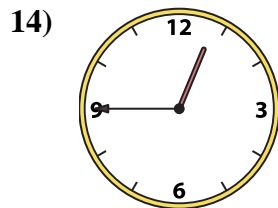
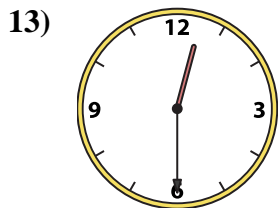
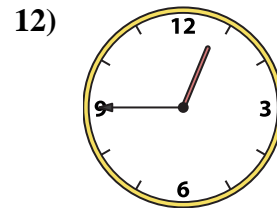
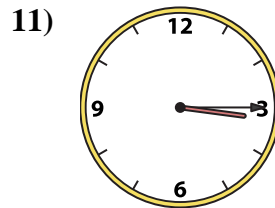
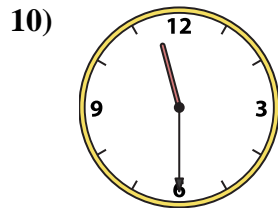
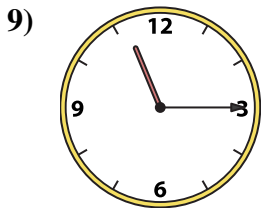
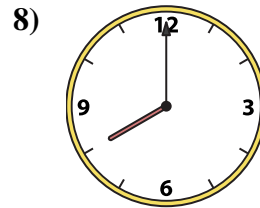
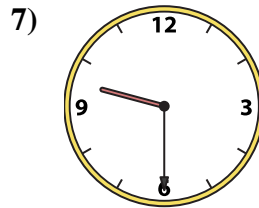
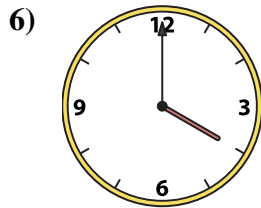
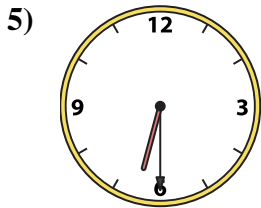
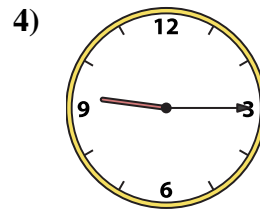
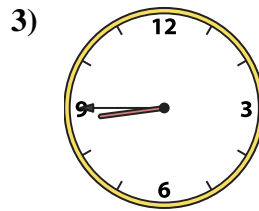
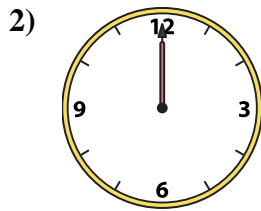
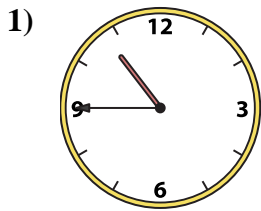
14. _____

15. _____

16. _____



Match the analog clock to the digital clock.

Answers

A. **3:15**

B. **12:45**

C. **9:15**

D. **1:00**

E. **8:45**

F. **12:00**

G. **4:00**

H. **12:30**

I. **6:30**

J. **10:45**

K. **12:45**

L. **8:00**

M. **8:30**

N. **9:30**

O. **11:30**

P. **11:15**

1. **J**

2. **F**

3. **E**

4. **C**

5. **I**

6. **G**

7. **N**

8. **L**

9. **P**

10. **O**

11. **A**

12. **B**

13. **H**

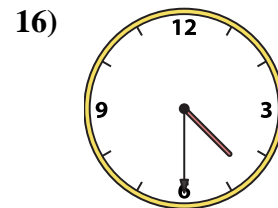
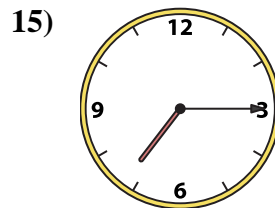
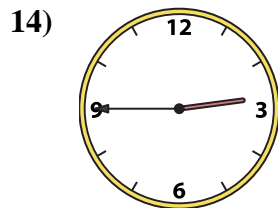
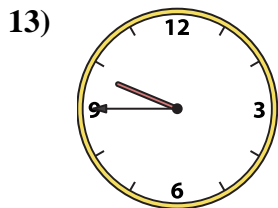
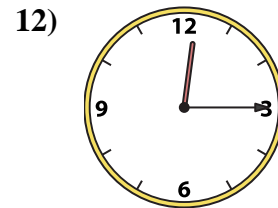
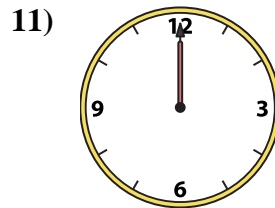
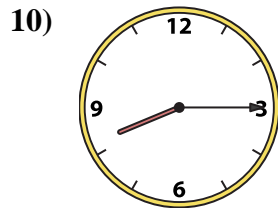
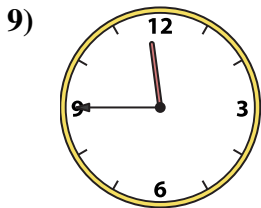
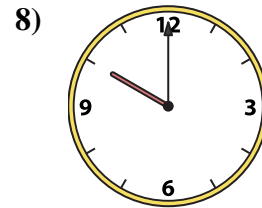
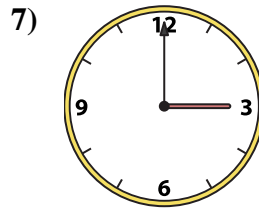
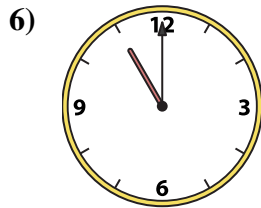
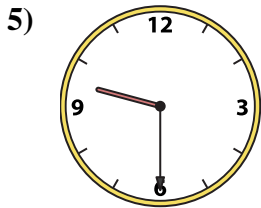
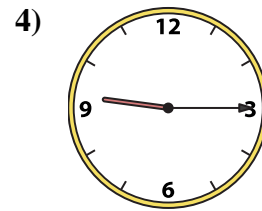
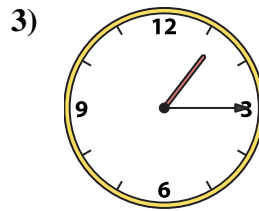
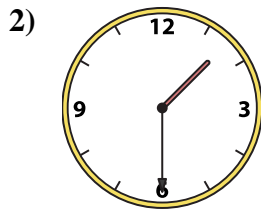
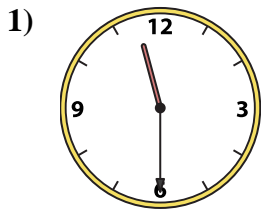
14. **K**

15. **M**

16. **D**



Match the analog clock to the digital clock.

Answers

A.

B.

C.

D.

E.

F.

G.

H.

I.

J.

K.

L.

M.

N.

O.

P.

1. _____

2. _____

3. _____

4. _____

5. _____

6. _____

7. _____

8. _____

9. _____

10. _____

11. _____

12. _____

13. _____

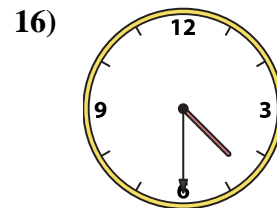
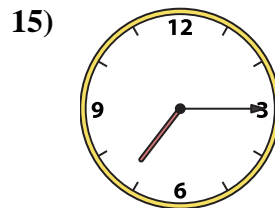
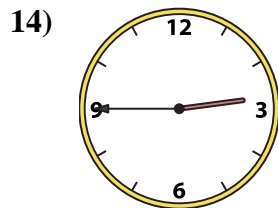
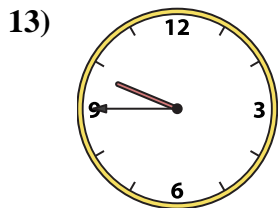
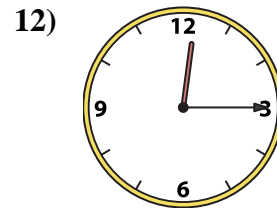
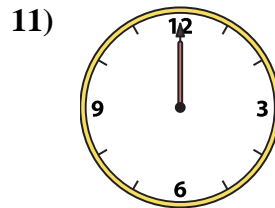
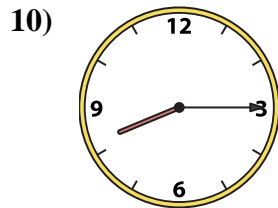
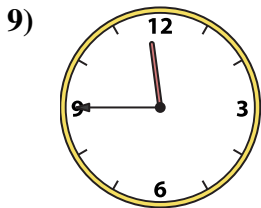
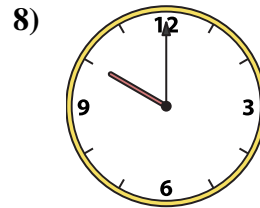
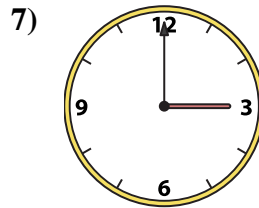
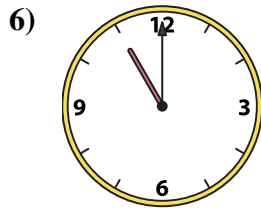
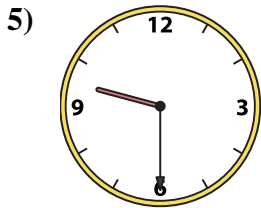
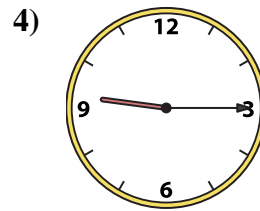
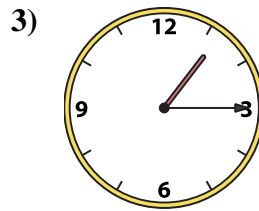
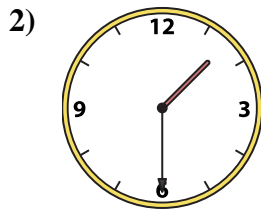
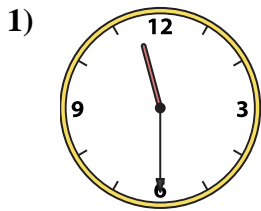
14. _____

15. _____

16. _____



Match the analog clock to the digital clock.

Answers

A. **11:30**

B. **3:00**

C. **9:30**

D. **1:30**

E. **11:45**

F. **9:45**

G. **10:00**

H. **12:00**

I. **8:15**

J. **1:15**

K. **9:15**

L. **11:00**

M. **7:15**

N. **2:45**

O. **4:30**

P. **12:15**

1. **A**

2. **D**

3. **J**

4. **K**

5. **C**

6. **L**

7. **B**

8. **G**

9. **E**

10. **I**

11. **H**

12. **P**

13. **F**

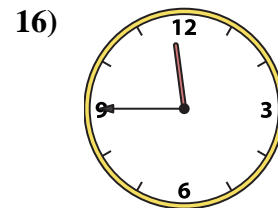
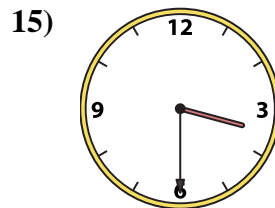
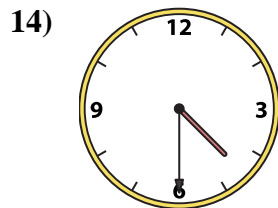
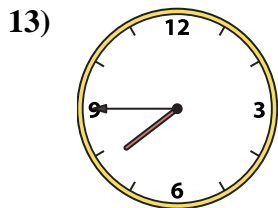
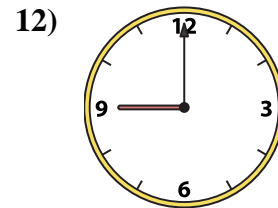
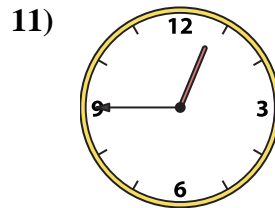
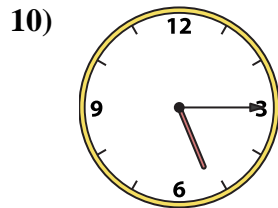
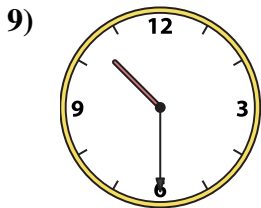
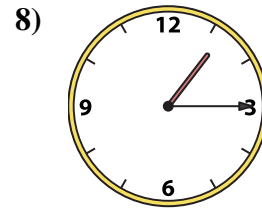
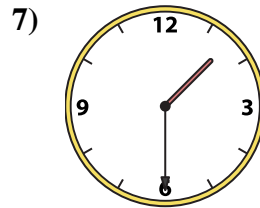
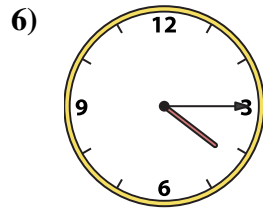
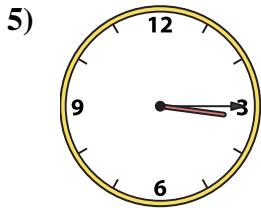
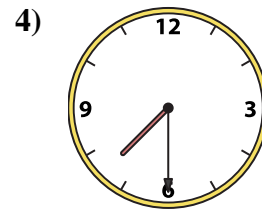
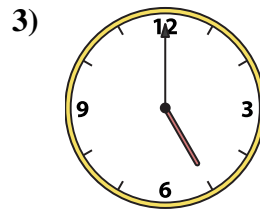
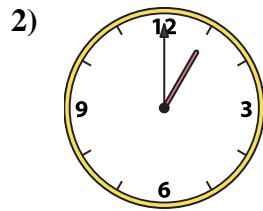
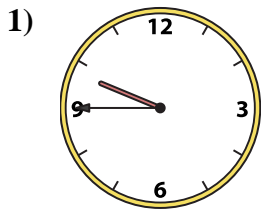
14. **N**

15. **M**

16. **O**



Match the analog clock to the digital clock.

Answers

A.

B.

C.

D.

E.

F.

G.

H.

I.

J.

K.

L.

M.

N.

O.

P.

1. _____

2. _____

3. _____

4. _____

5. _____

6. _____

7. _____

8. _____

9. _____

10. _____

11. _____

12. _____

13. _____

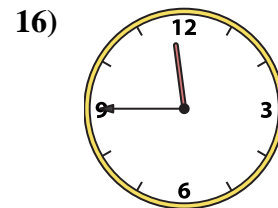
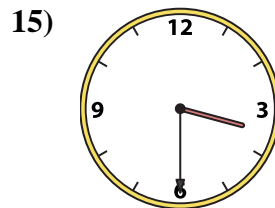
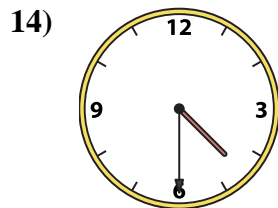
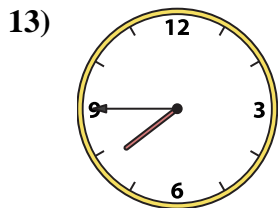
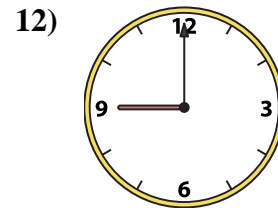
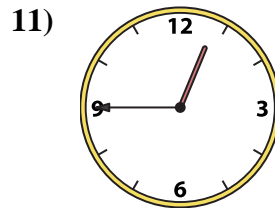
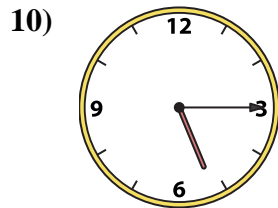
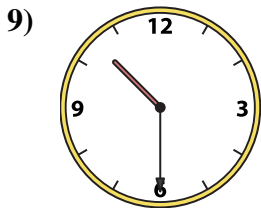
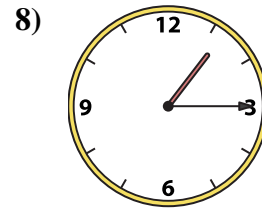
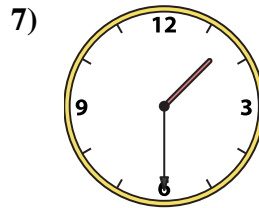
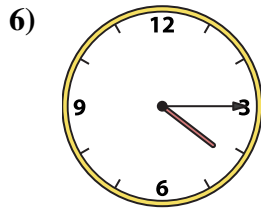
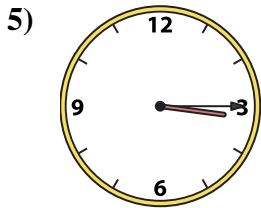
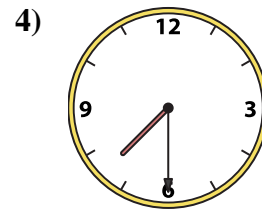
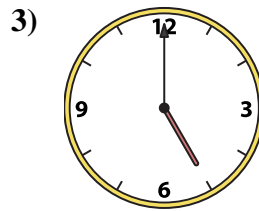
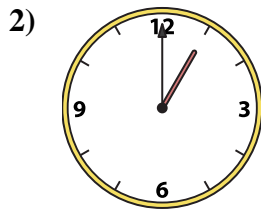
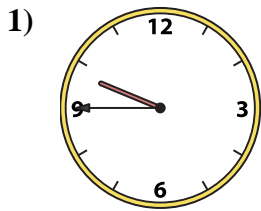
14. _____

15. _____

16. _____



Match the analog clock to the digital clock.

Answers

A. **11:45**

B. **10:30**

C. **1:00**

D. **7:45**

E. **5:00**

F. **4:30**

G. **4:15**

H. **5:15**

I. **3:15**

J. **3:30**

K. **9:00**

L. **7:30**

M. **1:30**

N. **9:45**

O. **1:15**

P. **12:45**

1. **N**

2. **C**

3. **E**

4. **L**

5. **I**

6. **G**

7. **M**

8. **O**

9. **B**

10. **H**

11. **P**

12. **K**

13. **D**

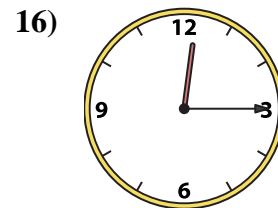
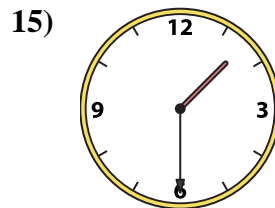
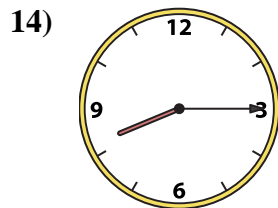
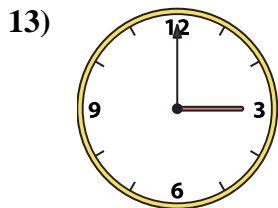
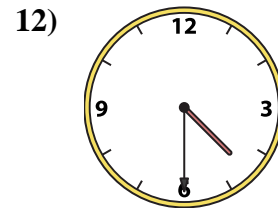
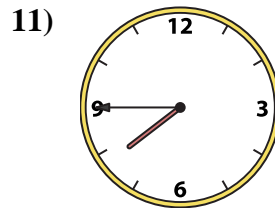
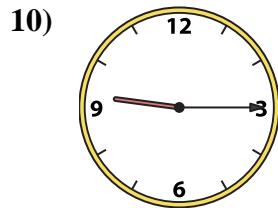
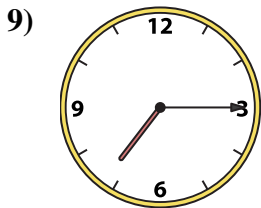
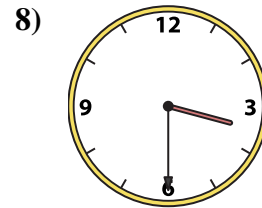
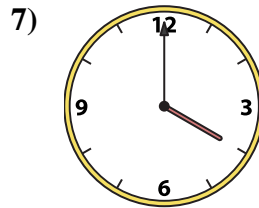
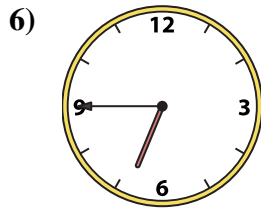
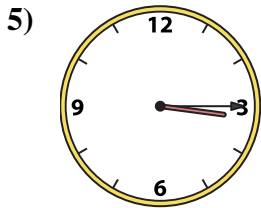
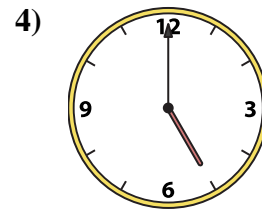
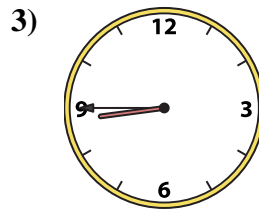
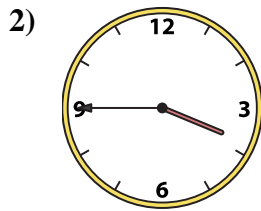
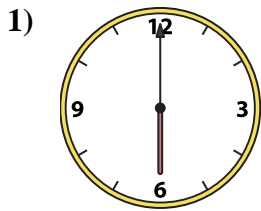
14. **F**

15. **J**

16. **A**



Match the analog clock to the digital clock.

Answers

A.

B.

C.

D.

E.

F.

G.

H.

I.

J.

K.

L.

M.

N.

O.

P.

1. _____

2. _____

3. _____

4. _____

5. _____

6. _____

7. _____

8. _____

9. _____

10. _____

11. _____

12. _____

13. _____

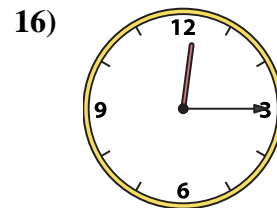
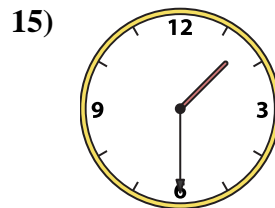
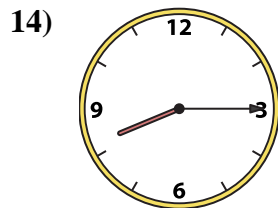
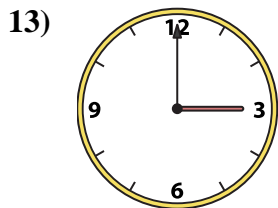
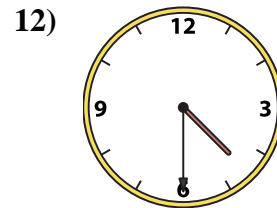
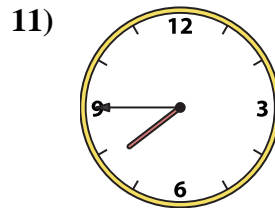
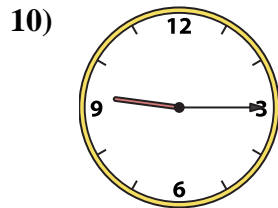
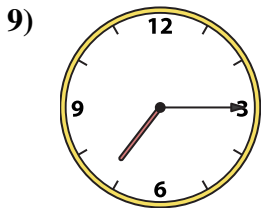
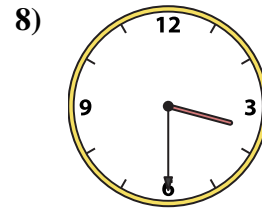
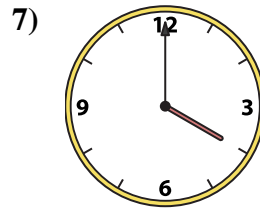
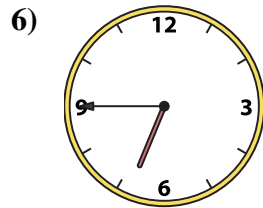
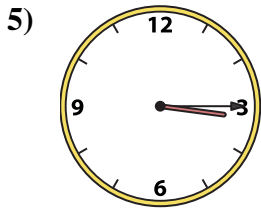
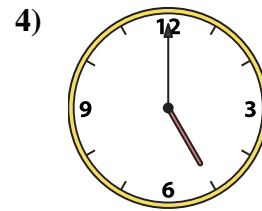
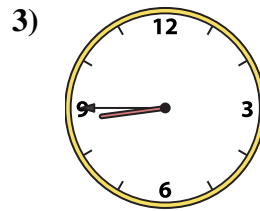
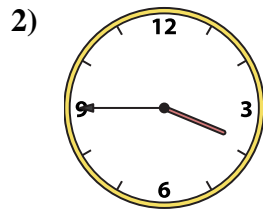
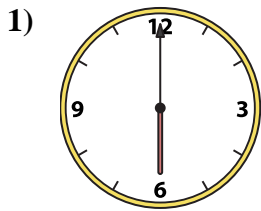
14. _____

15. _____

16. _____



Match the analog clock to the digital clock.

Answers

A. **5:00**

B. **8:45**

C. **3:15**

D. **3:30**

E. **3:00**

F. **7:45**

G. **12:15**

H. **1:30**

I. **3:45**

J. **6:45**

K. **4:00**

L. **7:15**

M. **8:15**

N. **9:15**

O. **6:00**

P. **4:30**

1. **O**

2. **I**

3. **B**

4. **A**

5. **C**

6. **J**

7. **K**

8. **D**

9. **L**

10. **N**

11. **F**

12. **P**

13. **E**

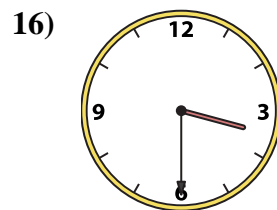
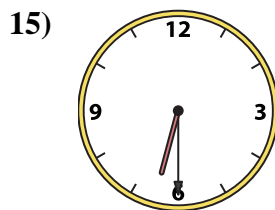
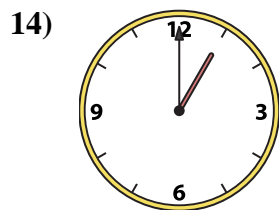
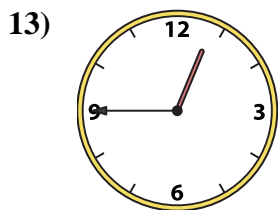
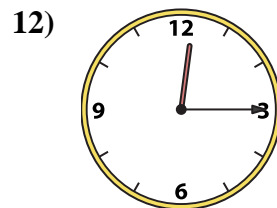
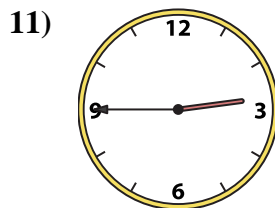
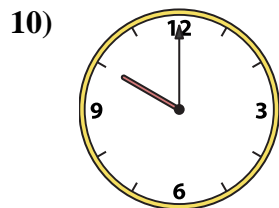
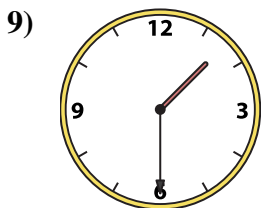
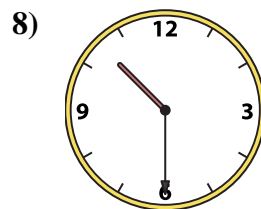
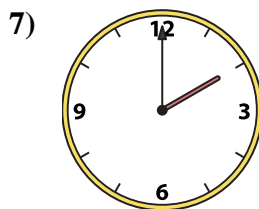
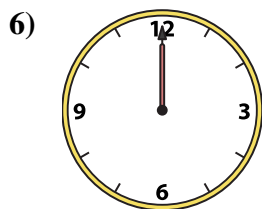
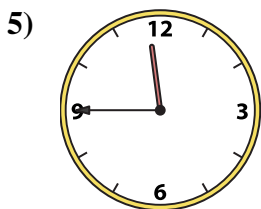
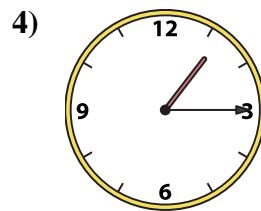
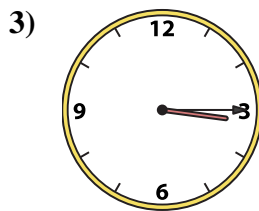
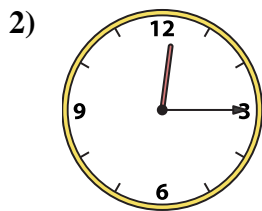
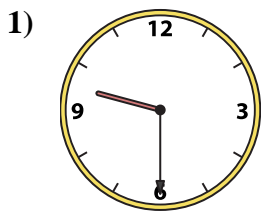
14. **M**

15. **H**

16. **G**



Match the analog clock to the digital clock.

Answers

A.

B.

C.

D.

E.

F.

G.

H.

I.

J.

K.

L.

M.

N.

O.

P.

1. _____

2. _____

3. _____

4. _____

5. _____

6. _____

7. _____

8. _____

9. _____

10. _____

11. _____

12. _____

13. _____

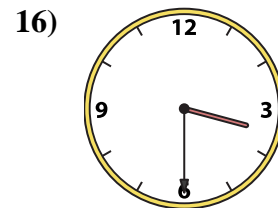
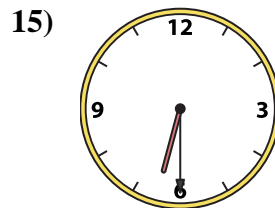
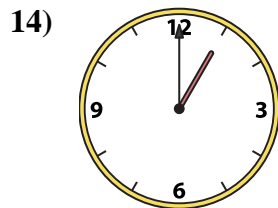
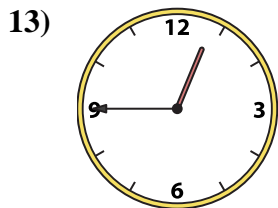
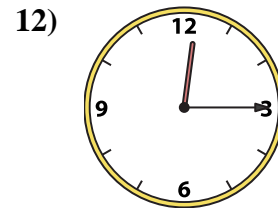
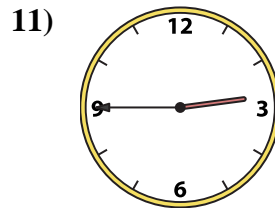
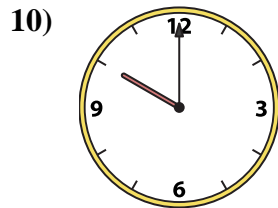
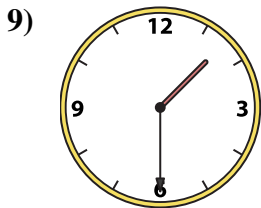
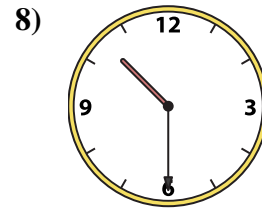
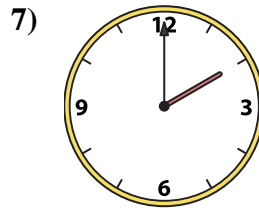
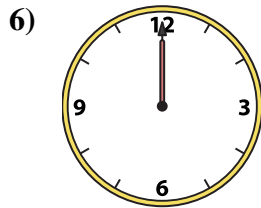
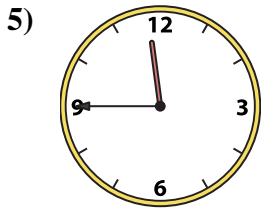
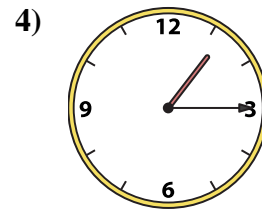
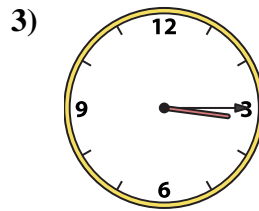
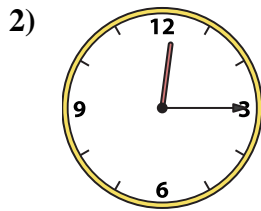
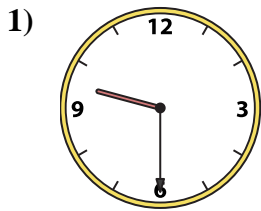
14. _____

15. _____

16. _____



Match the analog clock to the digital clock.

Answers

A. **10:00**

B. **6:30**

C. **3:30**

D. **2:00**

E. **1:30**

F. **12:15**

G. **12:45**

H. **9:30**

I. **1:15**

J. **10:30**

K. **12:15**

L. **12:00**

M. **3:15**

N. **2:45**

O. **1:00**

P. **11:45**

1. **H**

2. **K**

3. **M**

4. **I**

5. **P**

6. **L**

7. **D**

8. **J**

9. **E**

10. **A**

11. **N**

12. **F**

13. **G**

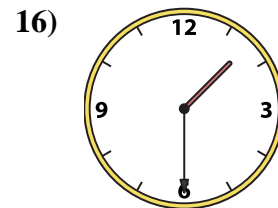
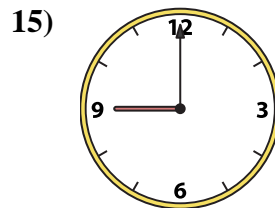
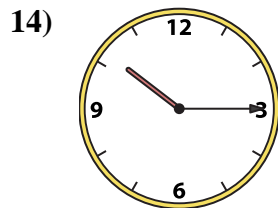
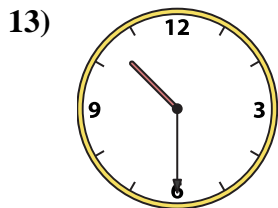
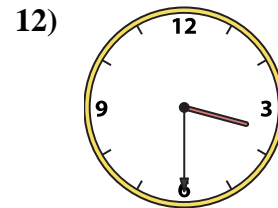
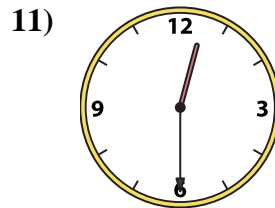
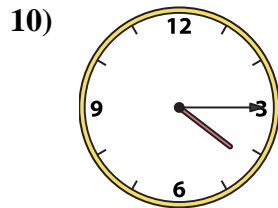
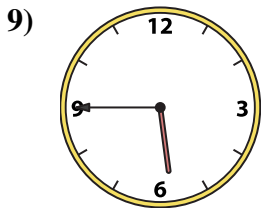
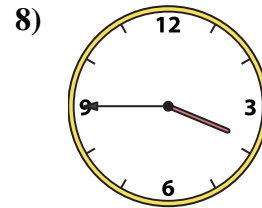
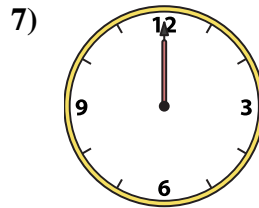
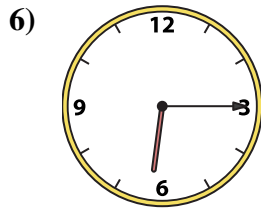
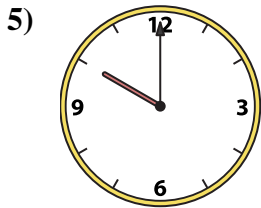
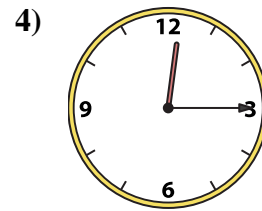
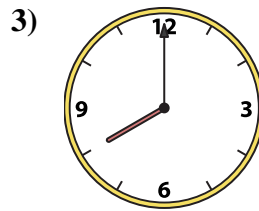
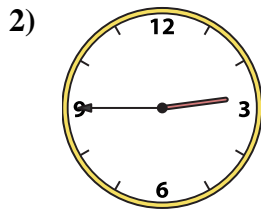
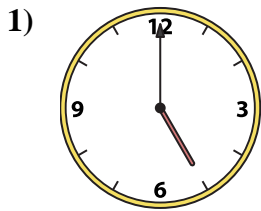
14. **O**

15. **B**

16. **C**



Match the analog clock to the digital clock.

Answers

A.

B.

C.

D.

E.

F.

G.

H.

I.

J.

K.

L.

M.

N.

O.

P.

1. _____

2. _____

3. _____

4. _____

5. _____

6. _____

7. _____

8. _____

9. _____

10. _____

11. _____

12. _____

13. _____


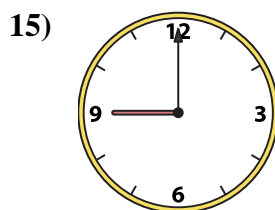
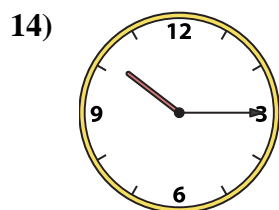
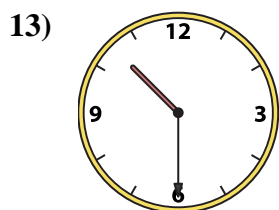
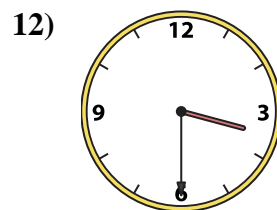
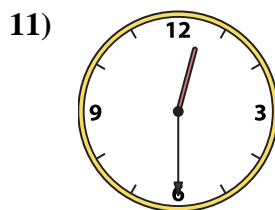
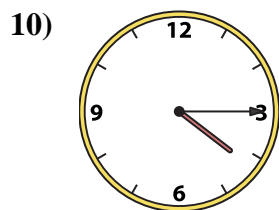
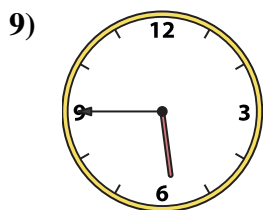
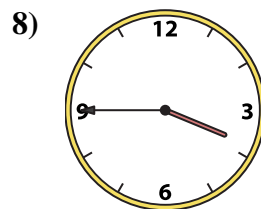
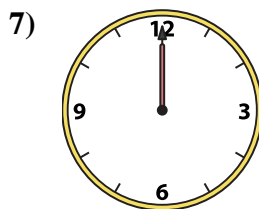
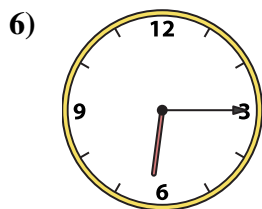

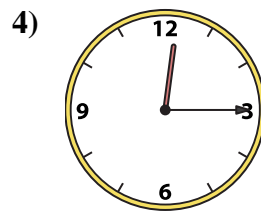
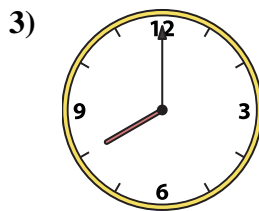
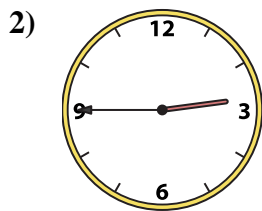
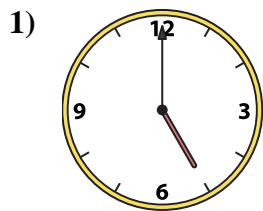
14. _____

15. _____

16. _____



Match the analog clock to the digital clock.



A. **12:00**

B. **4:15**

C. **8:00**

D. **9:00**

E. **1:30**

F. **12:30**

G. **3:30**

H. **2:45**

I. **3:45**

J. **10:15**

K. **5:45**

L. **6:15**

M. **12:15**

N. **10:00**

O. **10:30**

P. **5:00**

Answers

1. **P**

2. **H**

3. **C**

4. **M**

5. **N**

6. **L**

7. **A**

8. **I**

9. **K**

10. **B**

11. **F**

12. **G**

13. **O**

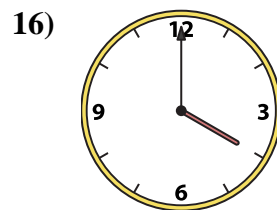
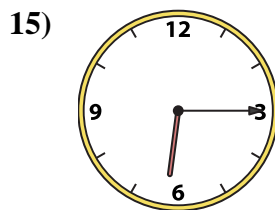
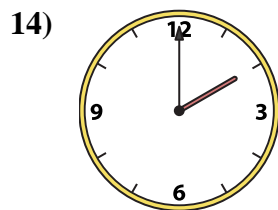
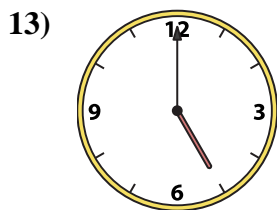
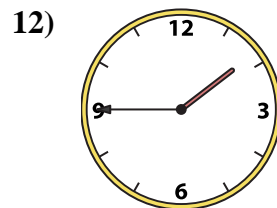
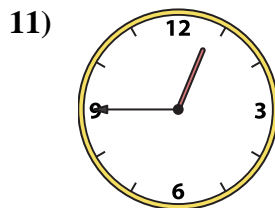
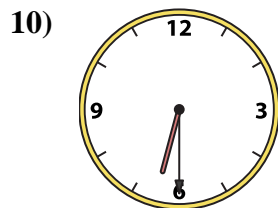
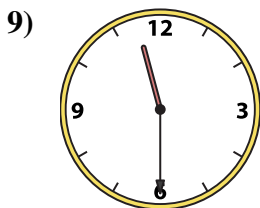
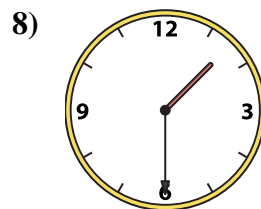
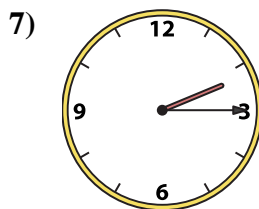
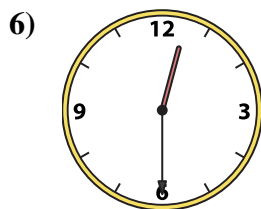
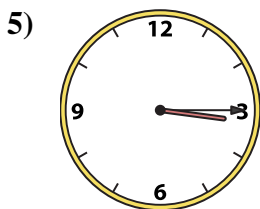
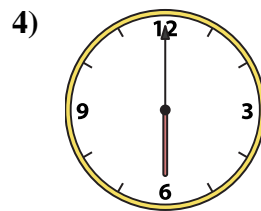
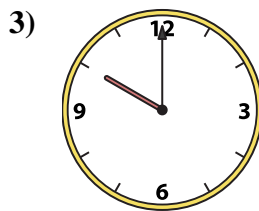
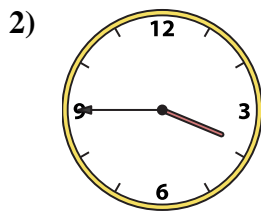
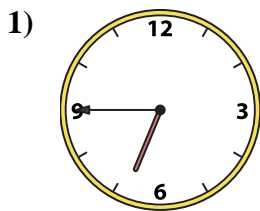
14. **J**

15. **D**

16. **E**



Match the analog clock to the digital clock.

Answers

A.

B.

C.

D.

E.

F.

G.

H.

I.

J.

K.

L.

M.

N.

O.

P.

1. _____

2. _____

3. _____

4. _____

5. _____

6. _____

7. _____

8. _____

9. _____

10. _____

11. _____

12. _____

13. _____

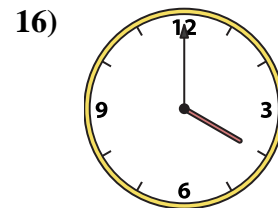
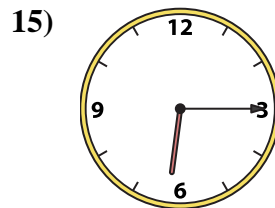
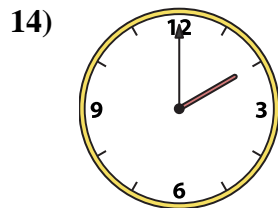
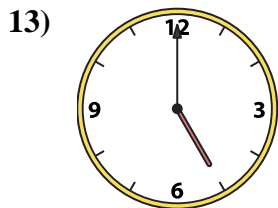
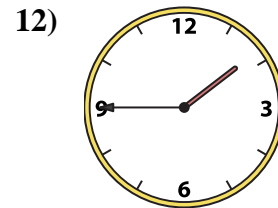
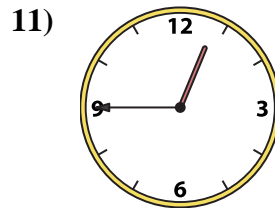
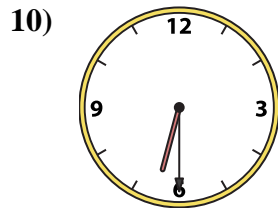
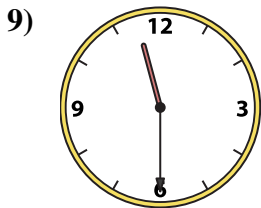
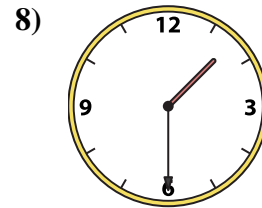
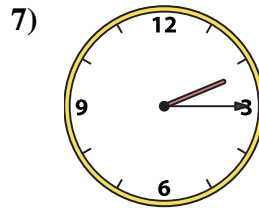
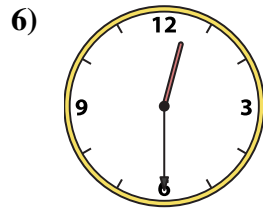
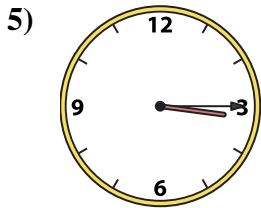
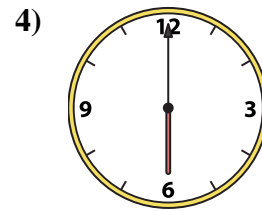
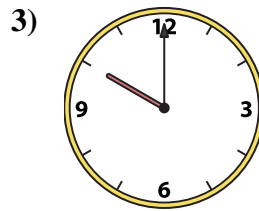
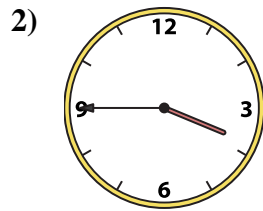
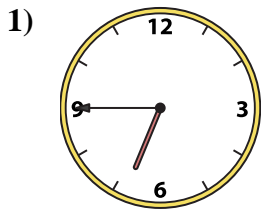
14. _____

15. _____

16. _____



Match the analog clock to the digital clock.

Answers

A. **6:30**

B. **6:15**

C. **1:30**

D. **5:00**

E. **6:00**

F. **6:45**

G. **2:15**

H. **12:45**

I. **11:30**

J. **2:00**

K. **3:45**

L. **12:30**

M. **4:00**

N. **10:00**

O. **3:15**

P. **1:45**

1. **F**

2. **K**

3. **N**

4. **E**

5. **O**

6. **L**

7. **G**

8. **C**

9. **I**

10. **A**

11. **H**

12. **P**

13. **D**

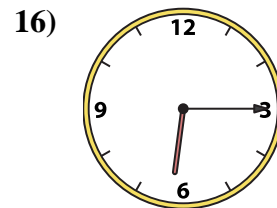
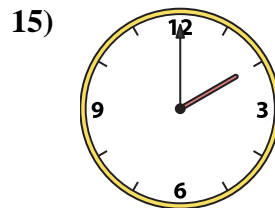
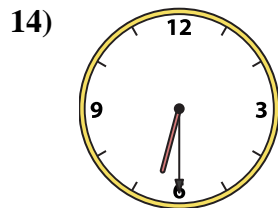
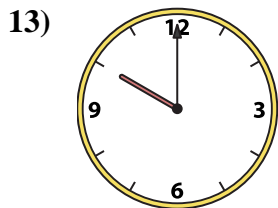
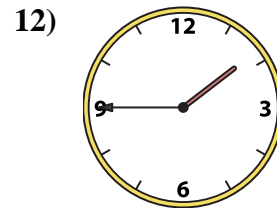
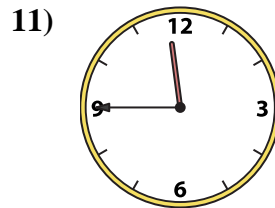
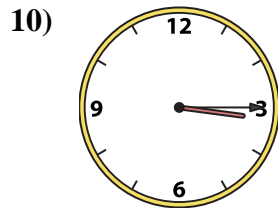
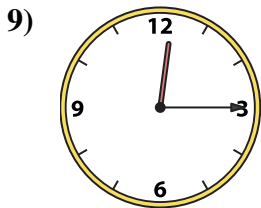
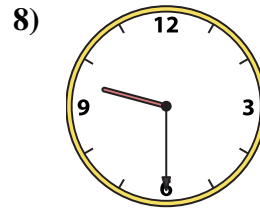
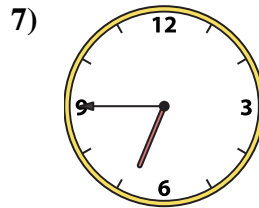
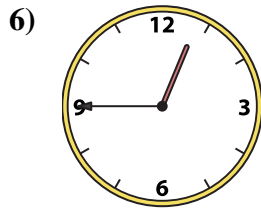
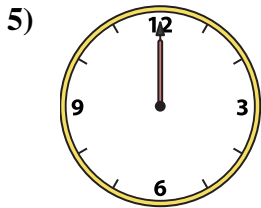
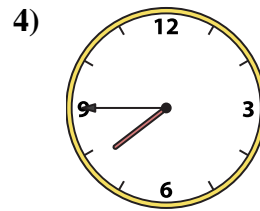
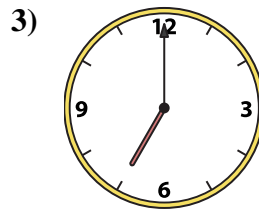
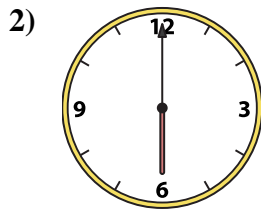
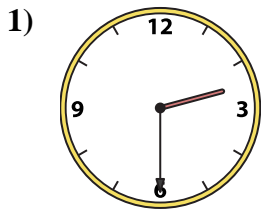
14. **J**

15. **B**

16. **M**



Match the analog clock to the digital clock.

Answers

A. 10:00

B. 2:30

C. 2:00

D. 3:15

E. 7:45

F. 7:00

G. 12:00

H. 12:15

I. 6:00

J. 11:45

K. 1:45

L. 9:30

M. 12:45

N. 6:30

O. 6:45

P. 6:15

1. _____

2. _____

3. _____

4. _____

5. _____

6. _____

7. _____

8. _____

9. _____

10. _____

11. _____

12. _____

13. _____

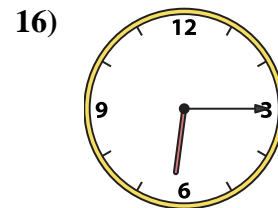
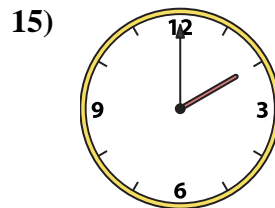
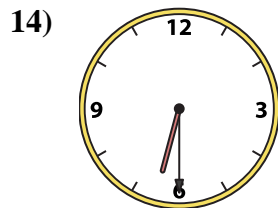
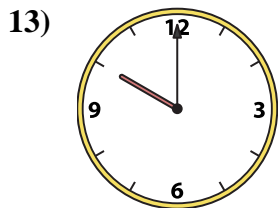
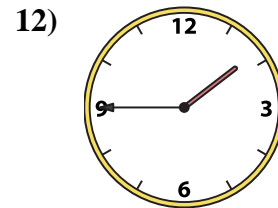
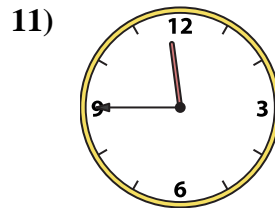
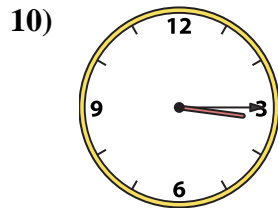
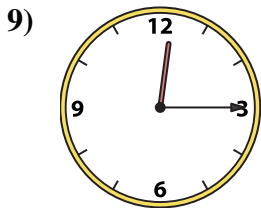
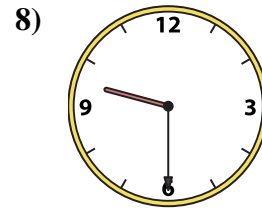
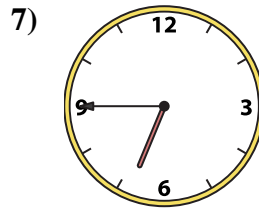
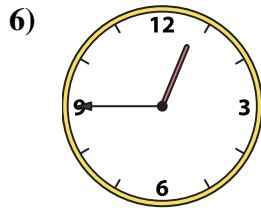
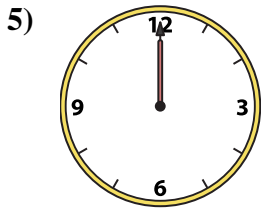
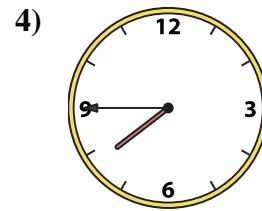
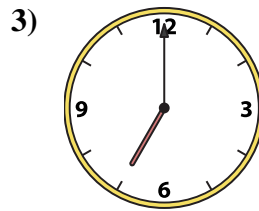
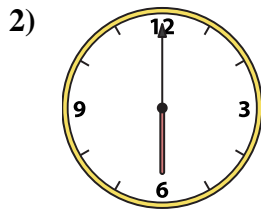
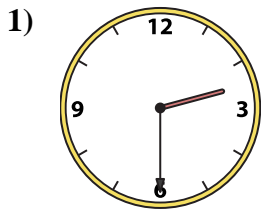
14. _____

15. _____

16. _____



Match the analog clock to the digital clock.

Answers

A. **10:00**

B. **2:30**

C. **2:00**

D. **3:15**

E. **7:45**

F. **7:00**

G. **12:00**

H. **12:15**

I. **6:00**

J. **11:45**

K. **1:45**

L. **9:30**

M. **12:45**

N. **6:30**

O. **6:45**

P. **6:15**

1. **B**

2. **I**

3. **F**

4. **E**

5. **G**

6. **M**

7. **O**

8. **L**

9. **H**

10. **D**

11. **J**

12. **K**

13. **A**

14. **N**

15. **C**

16. **P**