

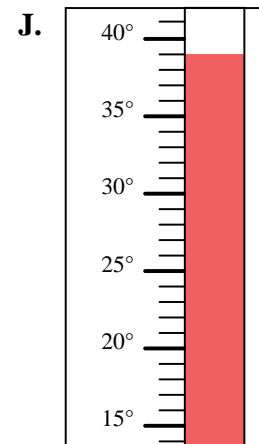
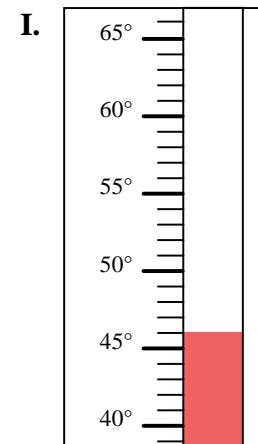
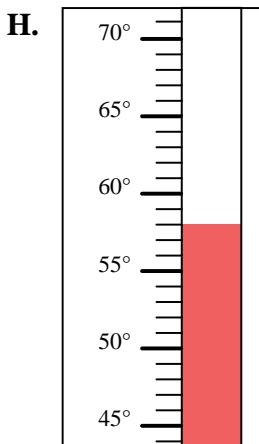
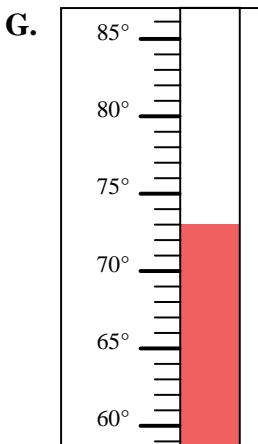
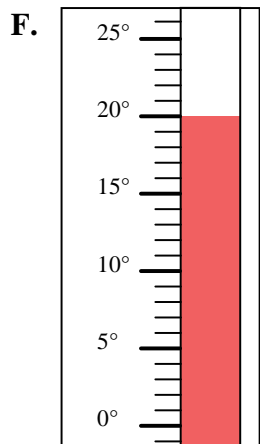
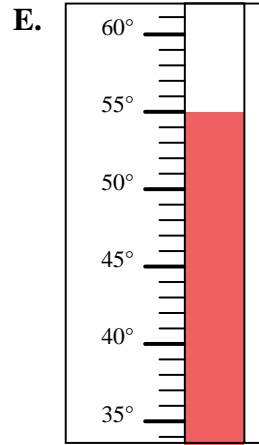
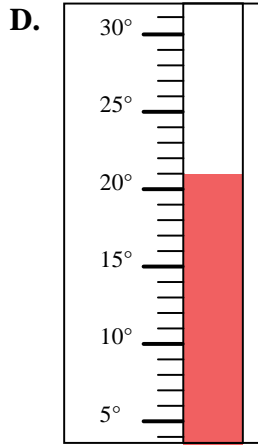
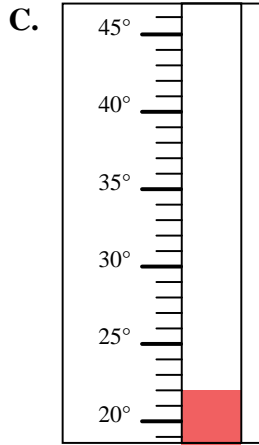
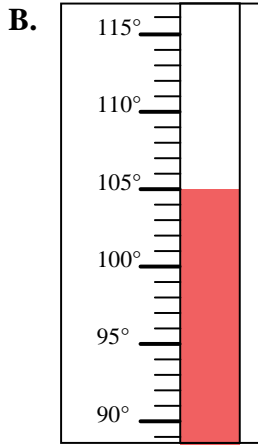
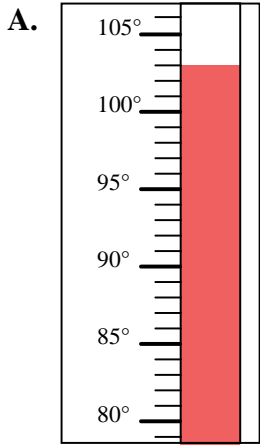


Determine which letter best answers each question.

**Answers**

- 1) Which thermometer best represents the temperature  $103^{\circ}$ ?
- 2) Which thermometer best represents the temperature  $73^{\circ}$ ?
- 3) Which thermometer best represents the temperature  $22^{\circ}$ ?
- 4) Which thermometer best represents the temperature  $21^{\circ}$ ?
- 5) Which thermometer best represents the temperature  $46^{\circ}$ ?
- 6) Which thermometer best represents the temperature  $20^{\circ}$ ?
- 7) Which thermometer best represents the temperature  $39^{\circ}$ ?
- 8) Which thermometer best represents the temperature  $55^{\circ}$ ?
- 9) Which thermometer best represents the temperature  $105^{\circ}$ ?
- 10) Which thermometer best represents the temperature  $58^{\circ}$ ?

1. \_\_\_\_\_
2. \_\_\_\_\_
3. \_\_\_\_\_
4. \_\_\_\_\_
5. \_\_\_\_\_
6. \_\_\_\_\_
7. \_\_\_\_\_
8. \_\_\_\_\_
9. \_\_\_\_\_
10. \_\_\_\_\_





Determine which letter best answers each question.

- 1) Which thermometer best represents the temperature  $103^{\circ}$ ?
- 2) Which thermometer best represents the temperature  $73^{\circ}$ ?
- 3) Which thermometer best represents the temperature  $22^{\circ}$ ?
- 4) Which thermometer best represents the temperature  $21^{\circ}$ ?
- 5) Which thermometer best represents the temperature  $46^{\circ}$ ?
- 6) Which thermometer best represents the temperature  $20^{\circ}$ ?
- 7) Which thermometer best represents the temperature  $39^{\circ}$ ?
- 8) Which thermometer best represents the temperature  $55^{\circ}$ ?
- 9) Which thermometer best represents the temperature  $105^{\circ}$ ?
- 10) Which thermometer best represents the temperature  $58^{\circ}$ ?

**Answers**

1.   **A**
2.   **G**
3.   **C**
4.   **D**
5.   **I**
6.   **F**
7.   **J**
8.   **E**
9.   **B**
10.   **H**

