



Determine the value of each set of tally marks.

Answers

1)

1. \_\_\_\_\_

2)

2. \_\_\_\_\_

3)

3. \_\_\_\_\_

4)

4. \_\_\_\_\_

5)

5. \_\_\_\_\_

6)

6. \_\_\_\_\_

7)

7. \_\_\_\_\_

8)

8. \_\_\_\_\_

9)

9. \_\_\_\_\_

10)

10. \_\_\_\_\_

11)

11. \_\_\_\_\_

12)

12. \_\_\_\_\_

13)

13. \_\_\_\_\_

14)

14. \_\_\_\_\_

15)

15. \_\_\_\_\_

16)

16. \_\_\_\_\_

17)

17. \_\_\_\_\_

18)

18. \_\_\_\_\_



Determine the value of each set of tally marks.

Answers

- |     |               |
|-----|---------------|
| 1)  | 1. <u>38</u>  |
| 2)  | 2. <u>24</u>  |
| 3)  | 3. <u>35</u>  |
| 4)  | 4. <u>25</u>  |
| 5)  | 5. <u>7</u>   |
| 6)  | 6. <u>50</u>  |
| 7)  | 7. <u>26</u>  |
| 8)  | 8. <u>39</u>  |
| 9)  | 9. <u>46</u>  |
| 10) | 10. <u>33</u> |
| 11) | 11. <u>18</u> |
| 12) | 12. <u>43</u> |
| 13) | 13. <u>14</u> |
| 14) | 14. <u>49</u> |
| 15) | 15. <u>29</u> |
| 16) | 16. <u>19</u> |
| 17) | 17. <u>13</u> |
| 18) | 18. <u>11</u> |



Determine the value of each set of tally marks.

Answers

1)

1. \_\_\_\_\_

2)

2. \_\_\_\_\_

3)

3. \_\_\_\_\_

4)

4. \_\_\_\_\_

5)

5. \_\_\_\_\_

6)

6. \_\_\_\_\_

7)

7. \_\_\_\_\_

8)

8. \_\_\_\_\_

9)

9. \_\_\_\_\_

10)

10. \_\_\_\_\_

11)

11. \_\_\_\_\_

12)

12. \_\_\_\_\_

13)

13. \_\_\_\_\_

14)

14. \_\_\_\_\_

15)

15. \_\_\_\_\_

16)

16. \_\_\_\_\_

17)

17. \_\_\_\_\_

18)

18. \_\_\_\_\_



Determine the value of each set of tally marks.

Answers

- |     |               |
|-----|---------------|
| 1)  | 1. <u>17</u>  |
| 2)  | 2. <u>28</u>  |
| 3)  | 3. <u>44</u>  |
| 4)  | 4. <u>40</u>  |
| 5)  | 5. <u>49</u>  |
| 6)  | 6. <u>16</u>  |
| 7)  | 7. <u>37</u>  |
| 8)  | 8. <u>33</u>  |
| 9)  | 9. <u>14</u>  |
| 10) | 10. <u>35</u> |
| 11) | 11. <u>32</u> |
| 12) | 12. <u>7</u>  |
| 13) | 13. <u>6</u>  |
| 14) | 14. <u>47</u> |
| 15) | 15. <u>24</u> |
| 16) | 16. <u>48</u> |
| 17) | 17. <u>8</u>  |
| 18) | 18. <u>29</u> |



Determine the value of each set of tally marks.

Answers

1)

1. \_\_\_\_\_

2)

2. \_\_\_\_\_

3)

3. \_\_\_\_\_

4)

4. \_\_\_\_\_

5)

5. \_\_\_\_\_

6)

6. \_\_\_\_\_

7)

7. \_\_\_\_\_

8)

8. \_\_\_\_\_

9)

9. \_\_\_\_\_

10)

10. \_\_\_\_\_

11)

11. \_\_\_\_\_

12)

12. \_\_\_\_\_

13)

13. \_\_\_\_\_

14)

14. \_\_\_\_\_

15)

15. \_\_\_\_\_

16)

16. \_\_\_\_\_

17)

17. \_\_\_\_\_



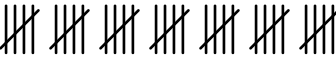


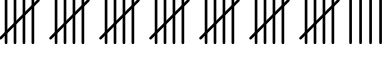

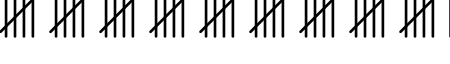
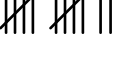


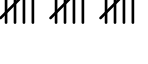


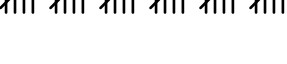



18)

18. \_\_\_\_\_



Determine the value of each set of tally marks.

Answers

- |   |               |
|---|---------------|
| 1)     | 1. <u>21</u>  |
| 2)     | 2. <u>18</u>  |
| 3)     | 3. <u>35</u>  |
| 4)     | 4. <u>10</u>  |
| 5)     | 5. <u>24</u>  |
| 6)     | 6. <u>39</u>  |
| 7)     | 7. <u>29</u>  |
| 8)     | 8. <u>46</u>  |
| 9)    | 9. <u>12</u>  |
| 10)  | 10. <u>32</u> |
| 11)  | 11. <u>19</u> |
| 12)  | 12. <u>16</u> |
| 13)  | 13. <u>6</u>  |
| 14)  | 14. <u>9</u>  |
| 15)  | 15. <u>30</u> |
| 16)  | 16. <u>7</u>  |
| 17)  | 17. <u>11</u> |
| 18)  | 18. <u>13</u> |



Determine the value of each set of tally marks.

Answers

1)

1. \_\_\_\_\_

2)

2. \_\_\_\_\_

3)

3. \_\_\_\_\_

4)

4. \_\_\_\_\_

5)

5. \_\_\_\_\_

6)

6. \_\_\_\_\_

7)

7. \_\_\_\_\_

8)

8. \_\_\_\_\_

9)

9. \_\_\_\_\_

10)

10. \_\_\_\_\_

11)

11. \_\_\_\_\_

12)

12. \_\_\_\_\_

13)

13. \_\_\_\_\_

14)

14. \_\_\_\_\_

15)

15. \_\_\_\_\_

16)

16. \_\_\_\_\_

17)

17. \_\_\_\_\_

18)

18. \_\_\_\_\_



Determine the value of each set of tally marks.

Answers

- |     |               |
|-----|---------------|
| 1)  | 1. <u>24</u>  |
| 2)  | 2. <u>27</u>  |
| 3)  | 3. <u>22</u>  |
| 4)  | 4. <u>40</u>  |
| 5)  | 5. <u>21</u>  |
| 6)  | 6. <u>13</u>  |
| 7)  | 7. <u>45</u>  |
| 8)  | 8. <u>6</u>   |
| 9)  | 9. <u>16</u>  |
| 10) | 10. <u>12</u> |
| 11) | 11. <u>19</u> |
| 12) | 12. <u>49</u> |
| 13) | 13. <u>34</u> |
| 14) | 14. <u>9</u>  |
| 15) | 15. <u>41</u> |
| 16) | 16. <u>29</u> |
| 17) | 17. <u>23</u> |
| 18) | 18. <u>28</u> |





Determine the value of each set of tally marks.

Answers

1)

1. \_\_\_\_\_

2)

2. \_\_\_\_\_

3)

3. \_\_\_\_\_

4)

4. \_\_\_\_\_

5)

5. \_\_\_\_\_

6)

6. \_\_\_\_\_

7)

7. \_\_\_\_\_

8)

8. \_\_\_\_\_

9)

9. \_\_\_\_\_

10)

10. \_\_\_\_\_

11)

11. \_\_\_\_\_

12)

12. \_\_\_\_\_

13)

13. \_\_\_\_\_

14)

14. \_\_\_\_\_

15)

15. \_\_\_\_\_

16)

16. \_\_\_\_\_

17)

17. \_\_\_\_\_

18)

18. \_\_\_\_\_



Determine the value of each set of tally marks.

Answers

- |     |               |
|-----|---------------|
| 1)  | 1. <u>9</u>   |
| 2)  | 2. <u>37</u>  |
| 3)  | 3. <u>36</u>  |
| 4)  | 4. <u>26</u>  |
| 5)  | 5. <u>47</u>  |
| 6)  | 6. <u>20</u>  |
| 7)  | 7. <u>15</u>  |
| 8)  | 8. <u>25</u>  |
| 9)  | 9. <u>43</u>  |
| 10) | 10. <u>21</u> |
| 11) | 11. <u>18</u> |
| 12) | 12. <u>44</u> |
| 13) | 13. <u>14</u> |
| 14) | 14. <u>38</u> |
| 15) | 15. <u>40</u> |
| 16) | 16. <u>33</u> |
| 17) | 17. <u>13</u> |
| 18) | 18. <u>50</u> |



Determine the value of each set of tally marks.

Answers

1)

1. \_\_\_\_\_

2)

2. \_\_\_\_\_

3)

3. \_\_\_\_\_

4)

4. \_\_\_\_\_

5)

5. \_\_\_\_\_

6)

6. \_\_\_\_\_

7)

7. \_\_\_\_\_

8)

8. \_\_\_\_\_

9)

9. \_\_\_\_\_

10)

10. \_\_\_\_\_

11)

11. \_\_\_\_\_

12)

12. \_\_\_\_\_

13)

13. \_\_\_\_\_

14)

14. \_\_\_\_\_

15)

15. \_\_\_\_\_

16)

16. \_\_\_\_\_

17)

17. \_\_\_\_\_






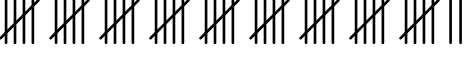
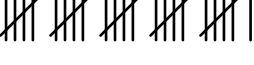

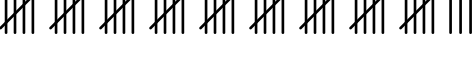

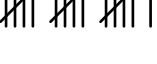
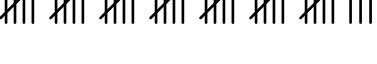
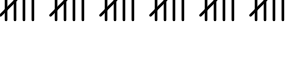
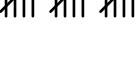
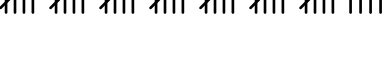
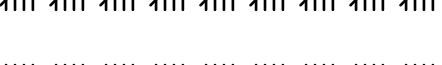


18)

18. \_\_\_\_\_



Determine the value of each set of tally marks.

Answers

- |   |               |
|---|---------------|
| 1)     | 1. <u>13</u>  |
| 2)     | 2. <u>18</u>  |
| 3)     | 3. <u>44</u>  |
| 4)     | 4. <u>20</u>  |
| 5)     | 5. <u>23</u>  |
| 6)     | 6. <u>47</u>  |
| 7)     | 7. <u>26</u>  |
| 8)     | 8. <u>9</u>   |
| 9)    | 9. <u>48</u>  |
| 10)  | 10. <u>10</u> |
| 11)  | 11. <u>16</u> |
| 12)  | 12. <u>38</u> |
| 13)  | 13. <u>30</u> |
| 14)  | 14. <u>15</u> |
| 15)  | 15. <u>39</u> |
| 16)  | 16. <u>45</u> |
| 17)  | 17. <u>49</u> |
| 18)  | 18. <u>22</u> |



Determine the value of each set of tally marks.

Answers

1)

1. \_\_\_\_\_

2)

2. \_\_\_\_\_

3)

3. \_\_\_\_\_

4)

4. \_\_\_\_\_

5)

5. \_\_\_\_\_

6)

6. \_\_\_\_\_

7)

7. \_\_\_\_\_

8)

8. \_\_\_\_\_

9)

9. \_\_\_\_\_

10)

10. \_\_\_\_\_

11)

11. \_\_\_\_\_

12)

12. \_\_\_\_\_

13)

13. \_\_\_\_\_

14)

14. \_\_\_\_\_

15)

15. \_\_\_\_\_

16)

16. \_\_\_\_\_

17)

17. \_\_\_\_\_

18)

18. \_\_\_\_\_



Determine the value of each set of tally marks.

Answers

- |     |               |
|-----|---------------|
| 1)  | 1. <u>10</u>  |
| 2)  | 2. <u>33</u>  |
| 3)  | 3. <u>45</u>  |
| 4)  | 4. <u>20</u>  |
| 5)  | 5. <u>42</u>  |
| 6)  | 6. <u>26</u>  |
| 7)  | 7. <u>39</u>  |
| 8)  | 8. <u>15</u>  |
| 9)  | 9. <u>11</u>  |
| 10) | 10. <u>34</u> |
| 11) | 11. <u>13</u> |
| 12) | 12. <u>8</u>  |
| 13) | 13. <u>41</u> |
| 14) | 14. <u>44</u> |
| 15) | 15. <u>25</u> |
| 16) | 16. <u>49</u> |
| 17) | 17. <u>12</u> |
| 18) | 18. <u>21</u> |



Determine the value of each set of tally marks.

Answers

1)

1. \_\_\_\_\_

2)

2. \_\_\_\_\_

3)

3. \_\_\_\_\_

4)

4. \_\_\_\_\_

5)

5. \_\_\_\_\_

6)

6. \_\_\_\_\_

7)

7. \_\_\_\_\_

8)

8. \_\_\_\_\_

9)

9. \_\_\_\_\_

10)

10. \_\_\_\_\_

11)

11. \_\_\_\_\_

12)

12. \_\_\_\_\_

13)

13. \_\_\_\_\_

14)

14. \_\_\_\_\_

15)

15. \_\_\_\_\_

16)

16. \_\_\_\_\_

17)

17. \_\_\_\_\_

18)

18. \_\_\_\_\_



Determine the value of each set of tally marks.

Answers

1)

1. 15

2)

2. 48

3)

3. 21

4)

4. 17

5)

5. 8

6)

6. 11

7)

7. 43

8)

8. 33

9)

9. 37

10)

10. 16

11)

11. 46

12)

12. 9

13)

13. 7

14)

14. 41

15)

15. 38

16)

16. 47

17)

17. 27

18)

18. 26





Determine the value of each set of tally marks.

Answers

1) 

1. \_\_\_\_\_

2) 

2. \_\_\_\_\_

3) 

3. \_\_\_\_\_

4) 

4. \_\_\_\_\_

5) 

5. \_\_\_\_\_

6) 

6. \_\_\_\_\_

7) 

7. \_\_\_\_\_

8) 

8. \_\_\_\_\_

9) 

9. \_\_\_\_\_

10) 

10. \_\_\_\_\_

11) 

11. \_\_\_\_\_

12) 

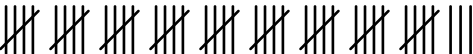
12. \_\_\_\_\_

13) 

13. \_\_\_\_\_

14) 

14. \_\_\_\_\_

15) 

15. \_\_\_\_\_

16) 

16. \_\_\_\_\_

17) 

17. \_\_\_\_\_



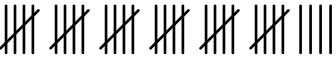


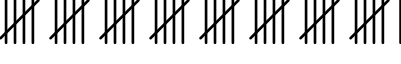

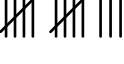

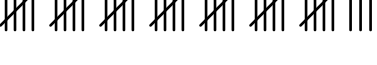

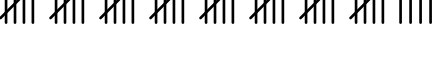
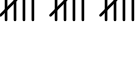
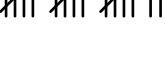
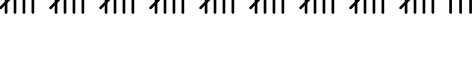



18) 

18. \_\_\_\_\_



Determine the value of each set of tally marks.

Answers

- |   |               |
|---|---------------|
| 1)     | 1. <u>19</u>  |
| 2)     | 2. <u>31</u>  |
| 3)     | 3. <u>34</u>  |
| 4)     | 4. <u>36</u>  |
| 5)     | 5. <u>16</u>  |
| 6)     | 6. <u>41</u>  |
| 7)     | 7. <u>20</u>  |
| 8)     | 8. <u>13</u>  |
| 9)    | 9. <u>7</u>   |
| 10)  | 10. <u>38</u> |
| 11)  | 11. <u>50</u> |
| 12)  | 12. <u>44</u> |
| 13)  | 13. <u>15</u> |
| 14)  | 14. <u>17</u> |
| 15)  | 15. <u>48</u> |
| 16)  | 16. <u>28</u> |
| 17)  | 17. <u>27</u> |
| 18)  | 18. <u>42</u> |



Determine the value of each set of tally marks.

Answers

1)

1. \_\_\_\_\_

2)

2. \_\_\_\_\_

3)

3. \_\_\_\_\_

4)

4. \_\_\_\_\_

5)

5. \_\_\_\_\_

6)

6. \_\_\_\_\_

7)

7. \_\_\_\_\_

8)

8. \_\_\_\_\_

9)

9. \_\_\_\_\_

10)

10. \_\_\_\_\_

11)

11. \_\_\_\_\_

12)

12. \_\_\_\_\_

13)

13. \_\_\_\_\_

14)

14. \_\_\_\_\_

15)

15. \_\_\_\_\_

16)

16. \_\_\_\_\_

17)

17. \_\_\_\_\_

18)

18. \_\_\_\_\_



Determine the value of each set of tally marks.

Answers

1)

1. 49

2)

2. 7

3)

3. 31

4)

4. 44

5)

5. 23

6)

6. 19

7)

7. 17

8)

8. 35

9)

9. 32

10)

10. 50

11)

11. 40

12)

12. 12

13)

13. 9

14)

14. 13

15)

15. 30

16)

16. 15

17)

17. 47

18)

18. 6