



Use the numberlines to round each number to the nearest 100.

Ex)

26,615



Answers

Ex. 26,600

1)

2,525



1. _____

2)

29,397



2. _____

3)

931



3. _____

4)

42,838



4. _____

5)

311



5. _____

6)

903



6. _____

7)

189



7. _____

8)

1,351



8. _____

9)

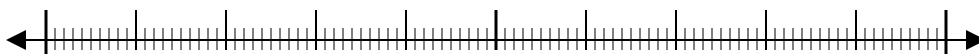
6,617



9. _____

10)

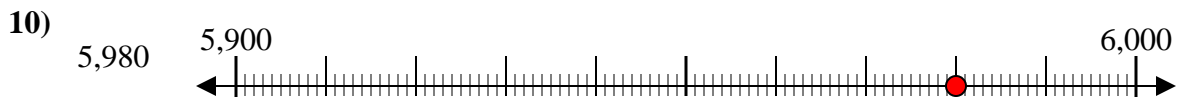
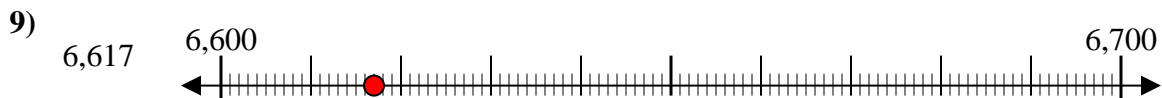
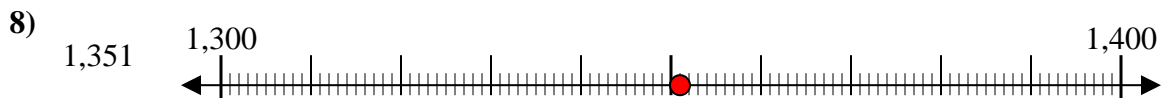
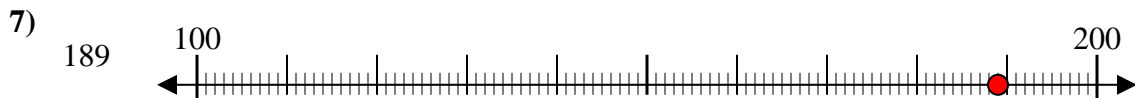
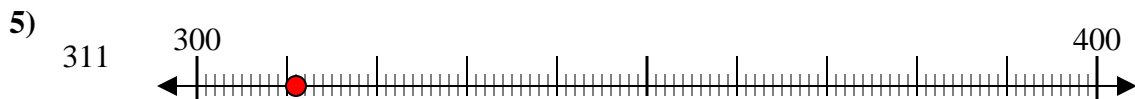
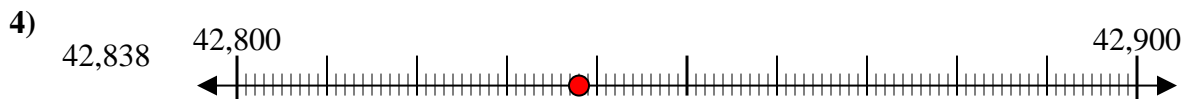
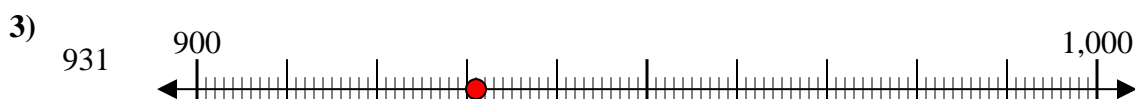
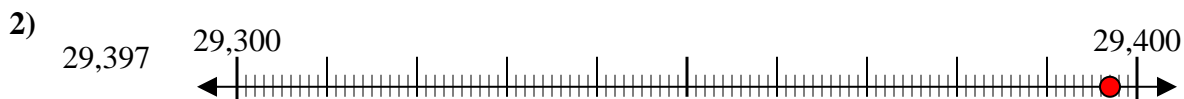
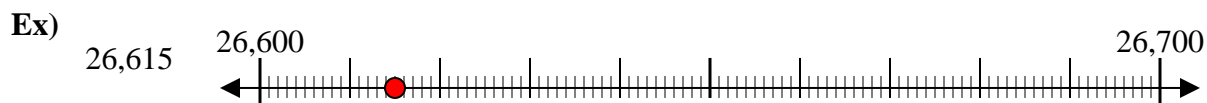
5,980



10. _____



Use the numberlines to round each number to the nearest 100.



Answers

Ex. 26,600

1. 2,500

2. 29,400

3. 900

4. 42,800

5. 300

6. 900

7. 200

8. 1,400

9. 6,600

10. 6,000