



Use the numberlines to round each number to the nearest 100.

Ex)

22,128



Answers

Ex. 22,100

1)

7,798



1. \_\_\_\_\_

2)

73,791



2. \_\_\_\_\_

3)

48,807



3. \_\_\_\_\_

4)

1,381



4. \_\_\_\_\_

5)

746



5. \_\_\_\_\_

6)

140



6. \_\_\_\_\_

7)

904



7. \_\_\_\_\_

8)

93,445



8. \_\_\_\_\_

9)

4,176



9. \_\_\_\_\_

10)

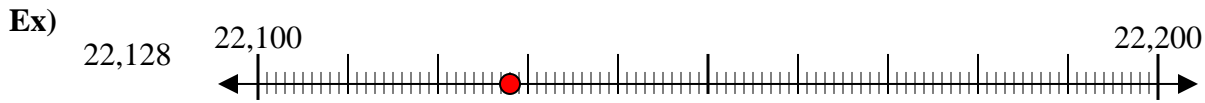
369



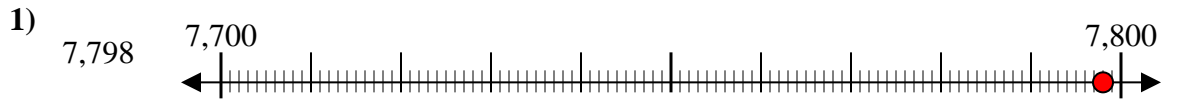
10. \_\_\_\_\_



Use the numberlines to round each number to the nearest 100.



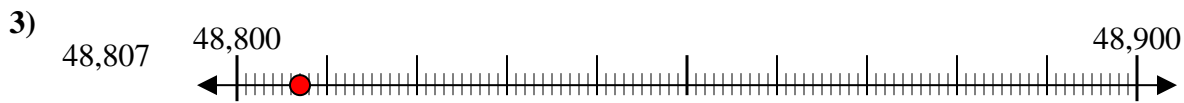
Answers  
Ex. 22,100



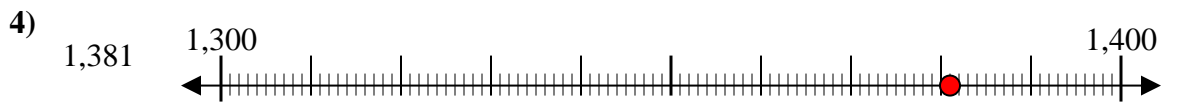
1. 7,800



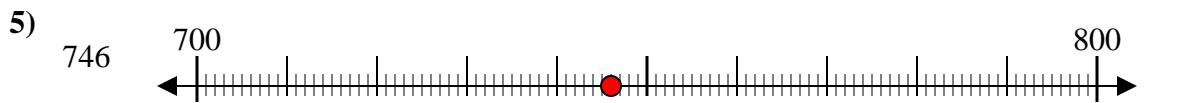
2. 73,800



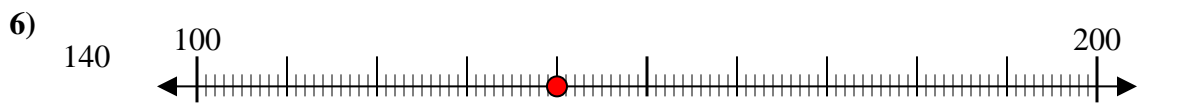
3. 48,800



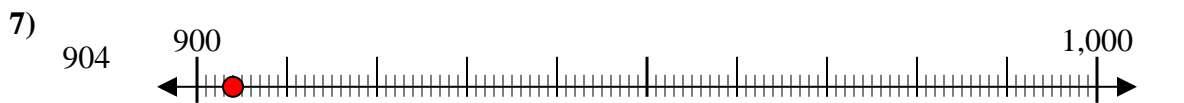
4. 1,400



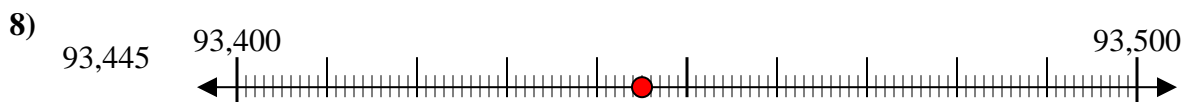
5. 700



6. 100



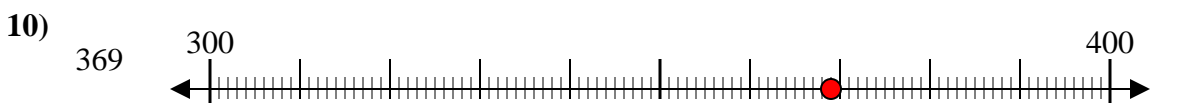
7. 900



8. 93,400



9. 4,200



10. 400