



Use the numberlines to round each number to the nearest 100.

Ex)

25,932



Ex. 25,900

1)

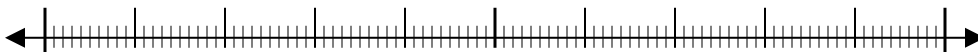
28,551



1. _____

2)

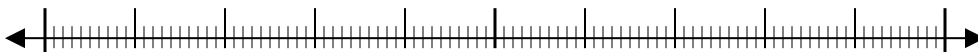
854



2. _____

3)

831



3. _____

4)

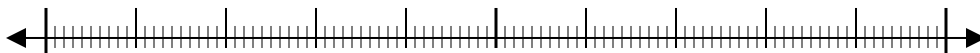
274



4. _____

5)

12,793



5. _____

6)

5,558



6. _____

7)

5,688



7. _____

8)

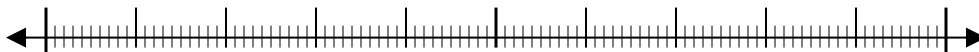
134



8. _____

9)

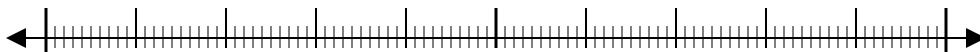
9,335



9. _____

10)

36,045

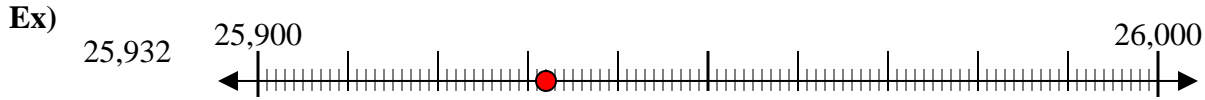


10. _____

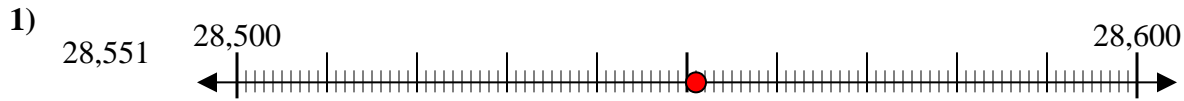
Answers



Use the numberlines to round each number to the nearest 100.



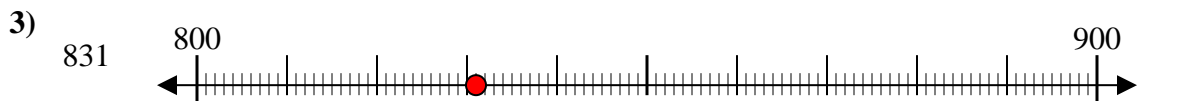
Answers
Ex. 25,900



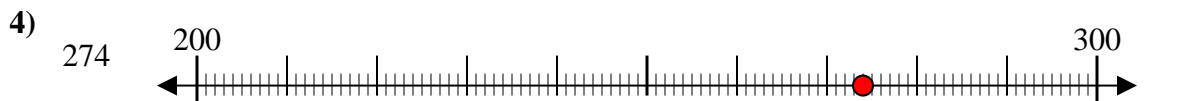
1. 28,600



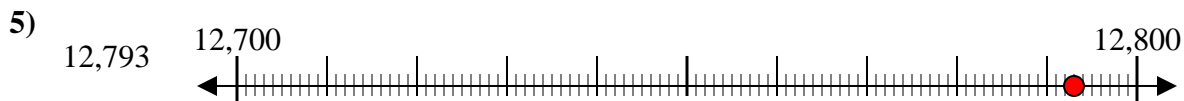
2. 900



3. 800



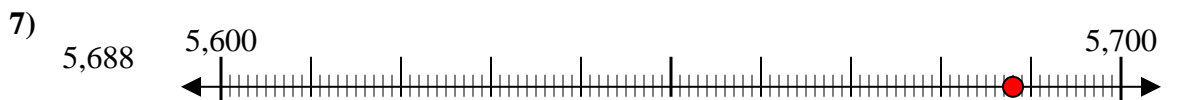
4. 300



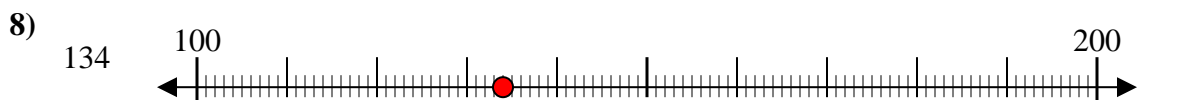
5. 12,800



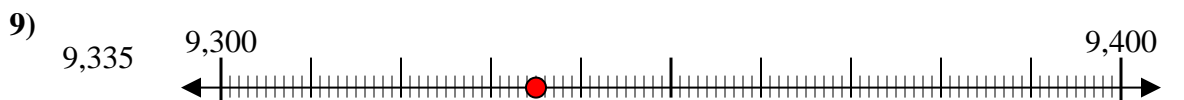
6. 5,600



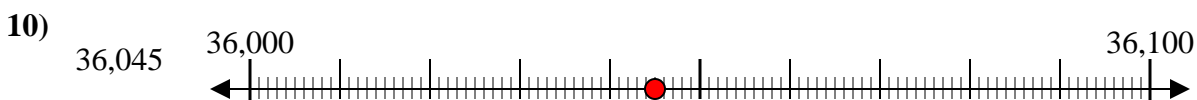
7. 5,700



8. 100



9. 9,300



10. 36,000