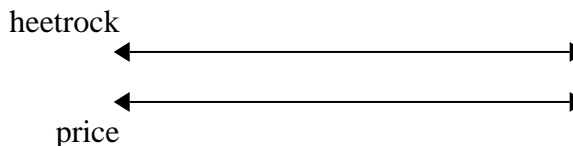




Use the double numberline to solve the problems.

Answers

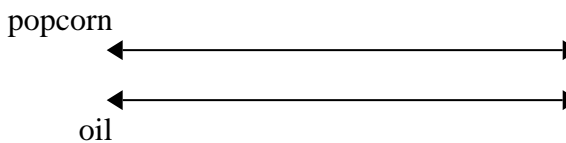
1) A builder could get 2 sheets of sheetrock for \$5. If he bought 14 sheets, how much money would he have spent?



1. _____

2. _____

2) A movie theater put 9 cups of oil for every 4 batches of popcorn they made. After they had made 36 batches of popcorn, how much oil would they have used?

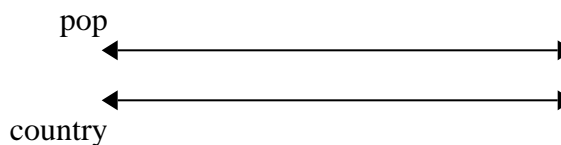


3. _____

4. _____

5. _____


3) On her MP3 player for every 2 pop song Katie had she also had 3 country song. If she has 14 pop songs on her MP3 player, how many country songs does she have?



6. _____


7. _____

4) A sloppy joe restaurant gave 3 napkins for every 7 items ordered. If someone bought 63 items, how many napkins should they get?

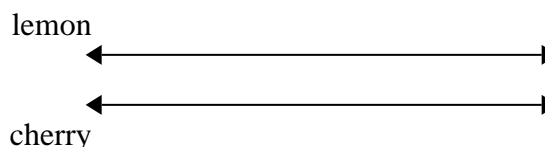


8. _____

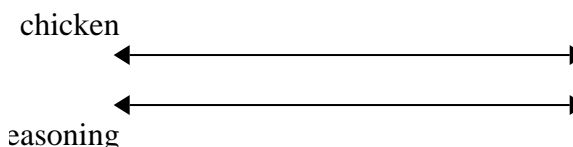
5) In a video game for every 2 enemies defeat, you earned 3 points. If you defeated 8 enemies, how many points would you have earned?



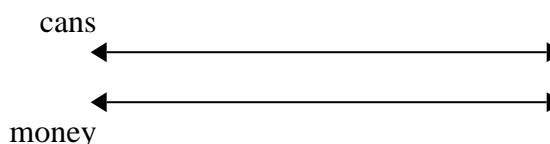
6) A box of candy had 9 cherry pieces for every 6 lemon pieces. If the box had 60 lemon pieces, how many cherry pieces would there be?



7) A recipe call for 9 teaspoons of seasoning for every 5 batches of chicken. If you have 45 batches of chicken, how many teaspoons of seasoning will you need?



8) For every 2 cans Cody collected for recycling he earned 5 cents. After he collected 20 cans, how much money would he have earned?



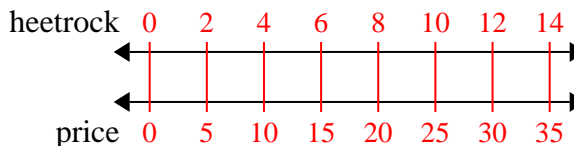


Use the double numberline to solve the problems.

Answers

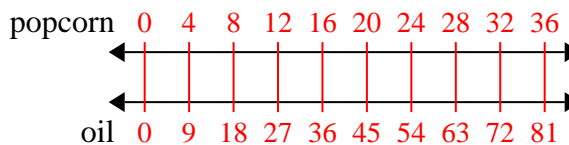
1)

A builder could get 2 sheets of sheetrock for \$5. If he bought 14 sheets, how much money would he have spent?

1. 35

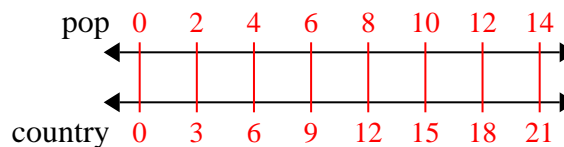
2)

A movie theater put 9 cups of oil for every 4 batches of popcorn they made. After they had made 36 batches of popcorn, how much oil would they have used?

2. 81

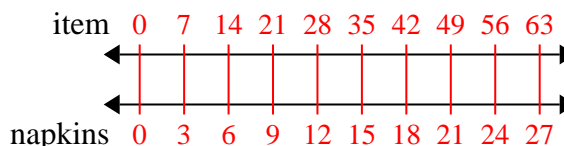
3)

On her MP3 player for every 2 pop song Katie had she also had 3 country song. If she has 14 pop songs on her MP3 player, how many country songs does she have?

3. 21

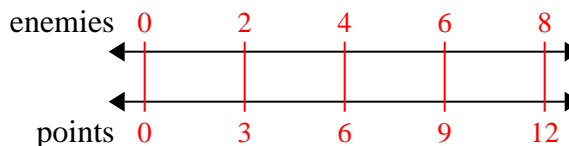
4)

A sloppy joe restaurant gave 3 napkins for every 7 items ordered. If someone bought 63 items, how many napkins should they get?

4. 27

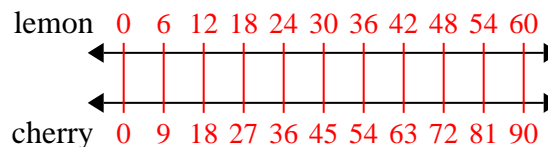
5)

In a video game for every 2 enemies defeat, you earned 3 points. If you defeated 8 enemies, how many points would you have earned?

5. 12

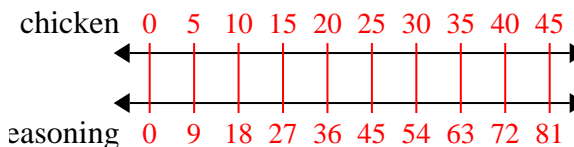
6)

A box of candy had 9 cherry pieces for every 6 lemon pieces. If the box had 60 lemon pieces, how many cherry pieces would there be?

6. 90

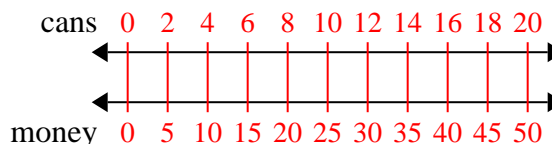
7)

A recipe call for 9 teaspoons of seasoning for every 5 batches of chicken. If you have 45 batches of chicken, how many teaspoons of seasoning will you need?

7. 81

8)

For every 2 cans Cody collected for recycling he earned 5 cents. After he collected 20 cans, how much money would he have earned?

8. 50