



Solve each problem.

- 1) For every enemy defeated 5 points are earned.

Create a table showing the points earned for destroying up to 5 enemies, then plot the values on the coordinate plane.

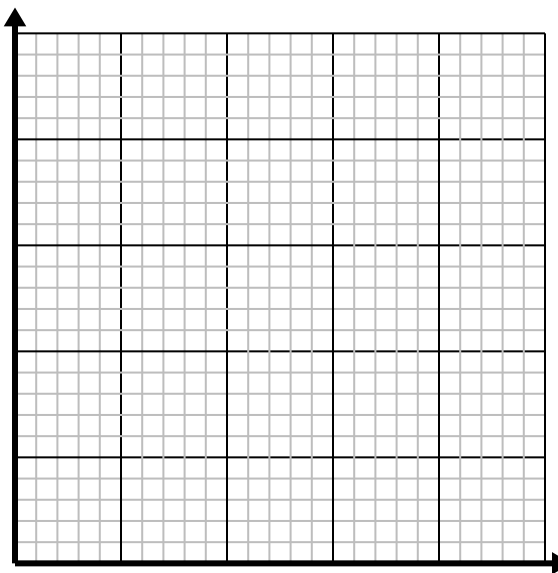
| | | | | | |
|--|--|--|--|--|--|
| | | | | | |
| | | | | | |



- 2) For every shirts made 4 buttons are used.

Create a table showing the buttons needed for making up to 5 shirts, then plot the values on the coordinate plane.

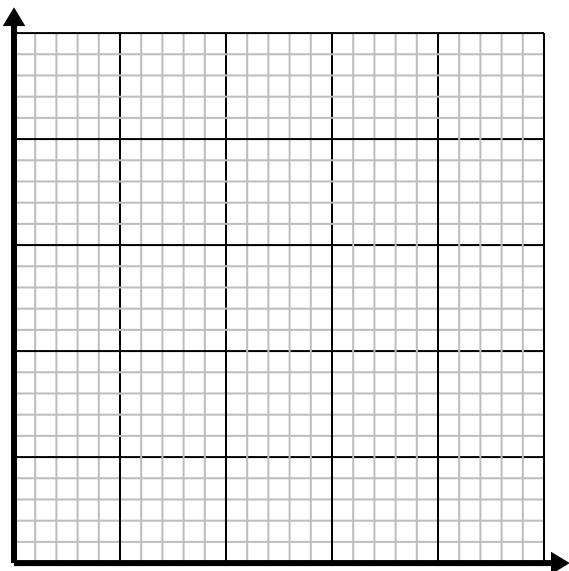
| | | | | | |
|--|--|--|--|--|--|
| | | | | | |
| | | | | | |



- 3) Every piece of chicken costs \$2.

Create a table showing the price for up to 5 pieces of chicken, then plot the values on the coordinate plane.

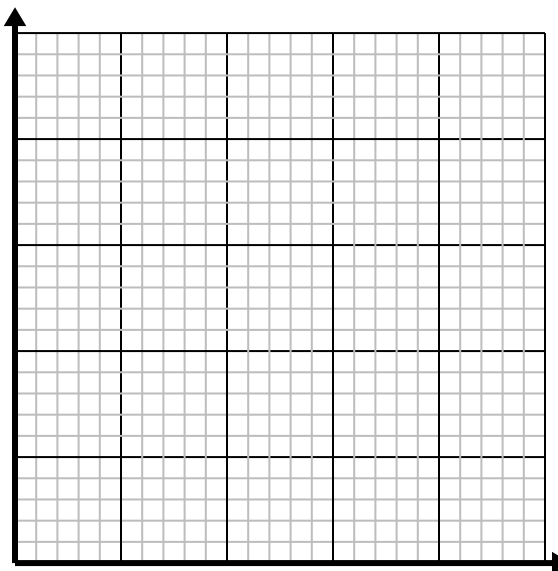
| | | | | | |
|--|--|--|--|--|--|
| | | | | | |
| | | | | | |



- 4) Every hour Dave walks 4 miles.

Create a table showing the miles travelled over the course of 5 hours, then plot the values on the coordinate plane.

| | | | | | |
|--|--|--|--|--|--|
| | | | | | |
| | | | | | |



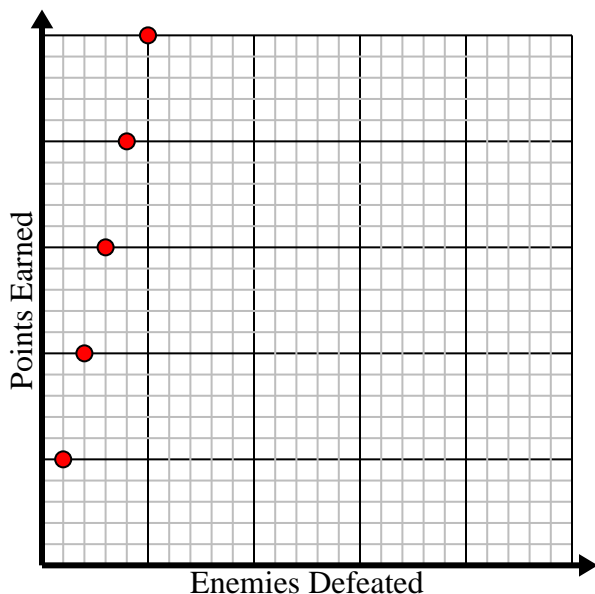


Solve each problem.

- 1) For every enemy defeated 5 points are earned.

Create a table showing the points earned for destroying up to 5 enemies, then plot the values on the coordinate plane.

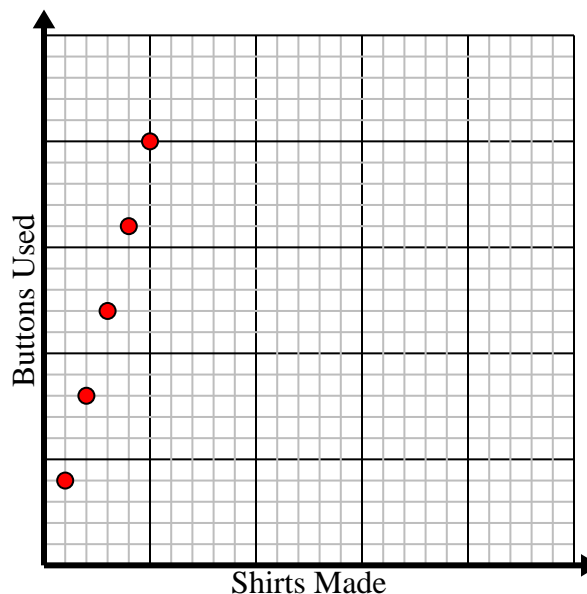
| | | | | | |
|------------------|---|----|----|----|----|
| Enemies Defeated | 1 | 2 | 3 | 4 | 5 |
| Points Earned | 5 | 10 | 15 | 20 | 25 |



- 2) For every shirts made 4 buttons are used.

Create a table showing the buttons needed for making up to 5 shirts, then plot the values on the coordinate plane.

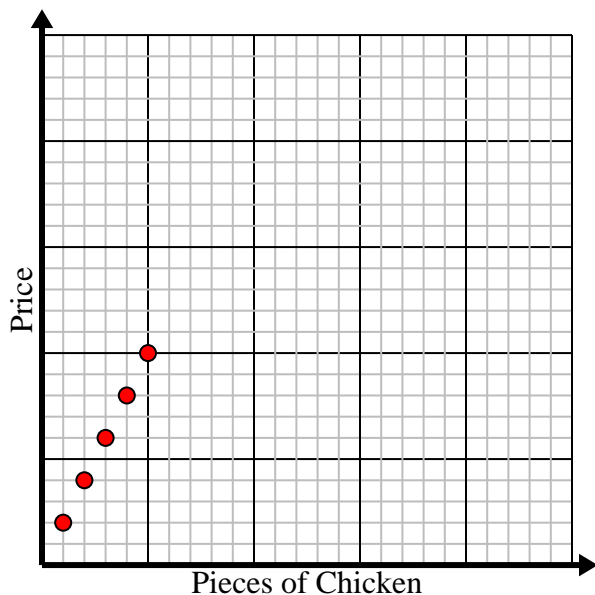
| | | | | | |
|--------------|---|---|----|----|----|
| Shirts Made | 1 | 2 | 3 | 4 | 5 |
| Buttons Used | 4 | 8 | 12 | 16 | 20 |



- 3) Every piece of chicken costs \$2.

Create a table showing the price for up to 5 pieces of chicken, then plot the values on the coordinate plane.

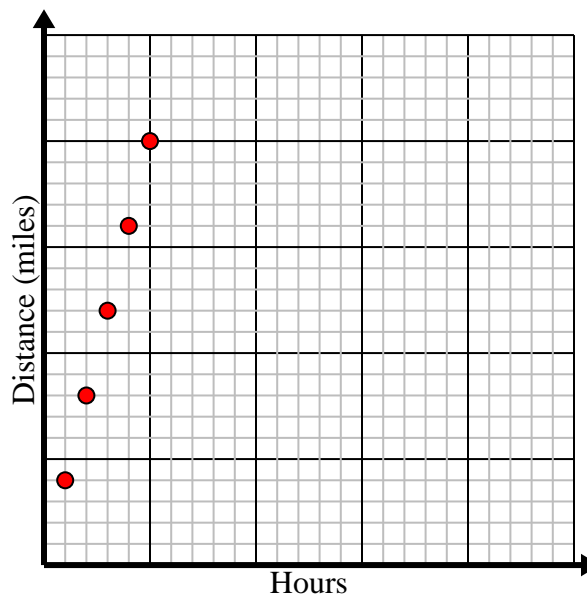
| | | | | | |
|-------------------|---|---|---|---|----|
| Pieces of Chicken | 1 | 2 | 3 | 4 | 5 |
| Price | 2 | 4 | 6 | 8 | 10 |



- 4) Every hour Dave walks 4 miles.

Create a table showing the miles travelled over the course of 5 hours, then plot the values on the coordinate plane.

| | | | | | |
|------------------|---|---|----|----|----|
| Hours | 1 | 2 | 3 | 4 | 5 |
| Distance (miles) | 4 | 8 | 12 | 16 | 20 |



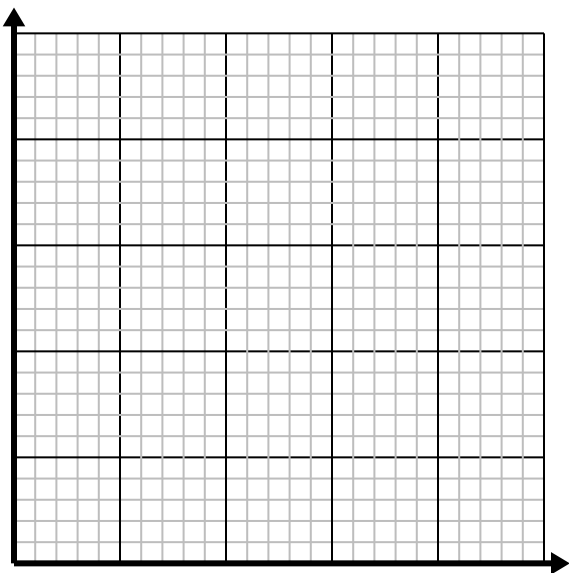


Solve each problem.

- 1) For every shirts made 3 buttons are used.

Create a table showing the buttons needed for making up to 5 shirts, then plot the values on the coordinate plane.

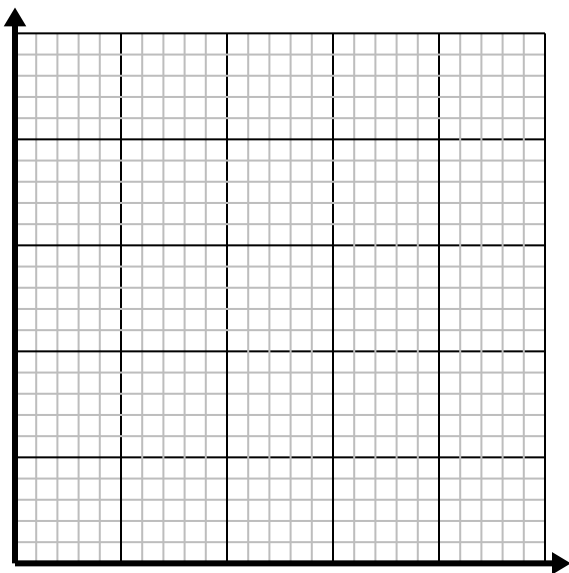
| | | | | | |
|--|--|--|--|--|--|
| | | | | | |
| | | | | | |



- 2) For every lawn mowed \$2 are earned.

Create a table showing the money earned for mowing up to 5 lawns, then plot the values on the coordinate plane.

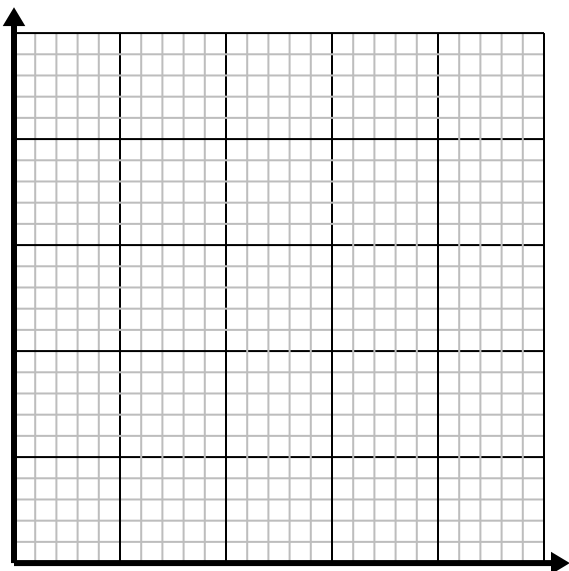
| | | | | | |
|--|--|--|--|--|--|
| | | | | | |
| | | | | | |



- 3) Every box of candy has 3 pieces of candy.

Create a table showing the pieces of candy in up to 5 boxes, then plot the values on the coordinate plane.

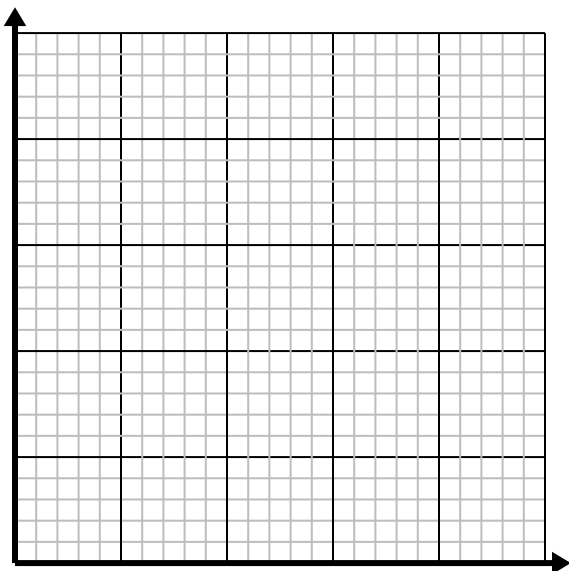
| | | | | | |
|--|--|--|--|--|--|
| | | | | | |
| | | | | | |



- 4) Every minute 2 books are printed.

Create a table showing the books printed over the course of 5 minutes, then plot the values on the coordinate plane.

| | | | | | |
|--|--|--|--|--|--|
| | | | | | |
| | | | | | |



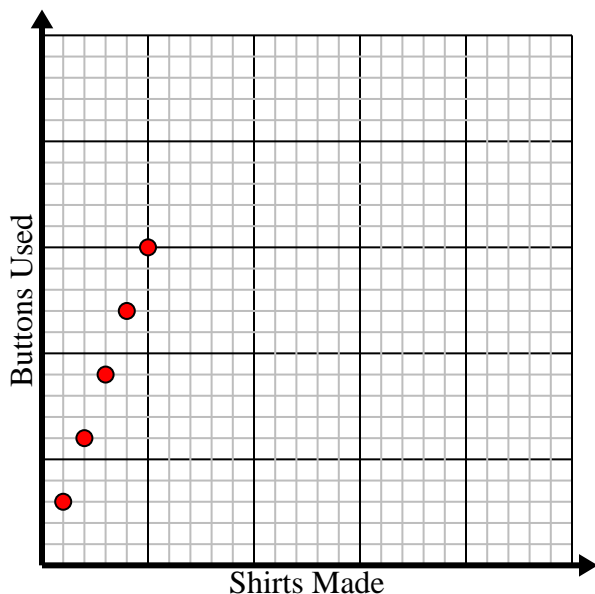


Solve each problem.

- 1) For every shirts made 3 buttons are used.

Create a table showing the buttons needed for making up to 5 shirts, then plot the values on the coordinate plane.

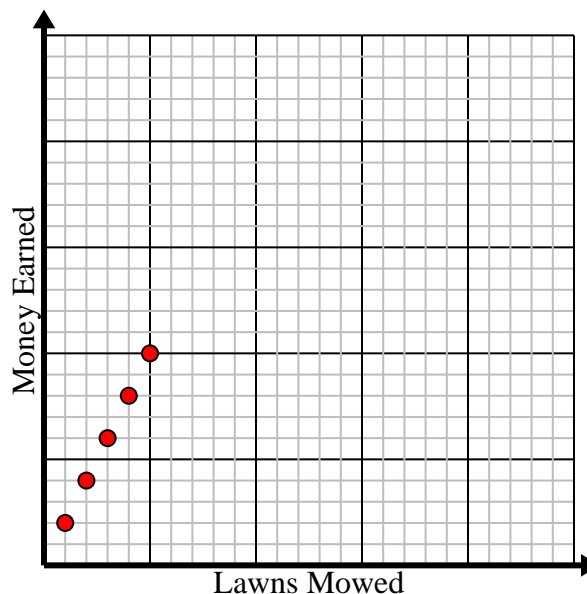
| | | | | | |
|--------------|---|---|---|----|----|
| Shirts Made | 1 | 2 | 3 | 4 | 5 |
| Buttons Used | 3 | 6 | 9 | 12 | 15 |



- 2) For every lawn mowed \$2 are earned.

Create a table showing the money earned for mowing up to 5 lawns, then plot the values on the coordinate plane.

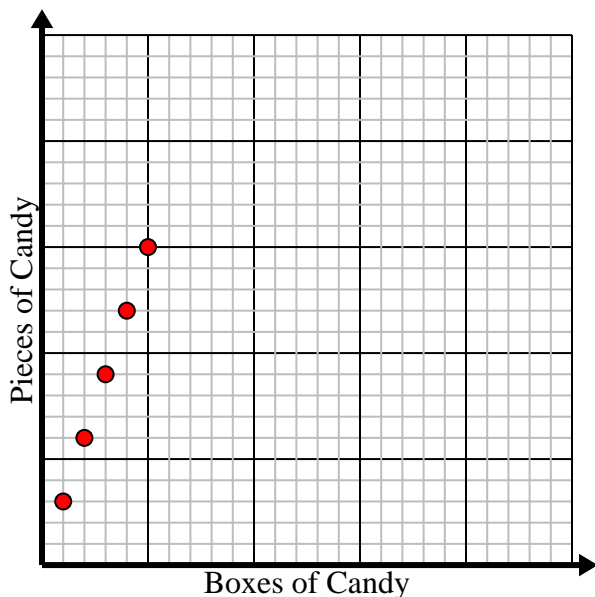
| | | | | | |
|--------------|---|---|---|---|----|
| Lawns Mowed | 1 | 2 | 3 | 4 | 5 |
| Money Earned | 2 | 4 | 6 | 8 | 10 |



- 3) Every box of candy has 3 pieces of candy.

Create a table showing the pieces of candy in up to 5 boxes, then plot the values on the coordinate plane.

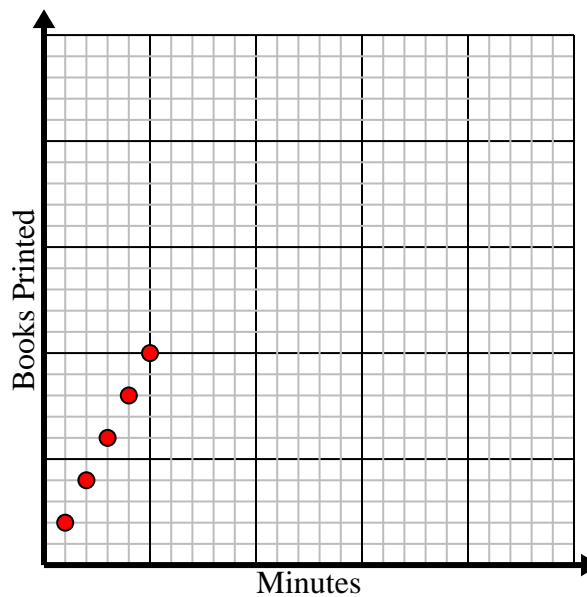
| | | | | | |
|-----------------|---|---|---|----|----|
| Boxes of Candy | 1 | 2 | 3 | 4 | 5 |
| Pieces of Candy | 3 | 6 | 9 | 12 | 15 |



- 4) Every minute 2 books are printed.

Create a table showing the books printed over the course of 5 minutes, then plot the values on the coordinate plane.

| | | | | | |
|---------------|---|---|---|---|----|
| Minutes | 1 | 2 | 3 | 4 | 5 |
| Books Printed | 2 | 4 | 6 | 8 | 10 |



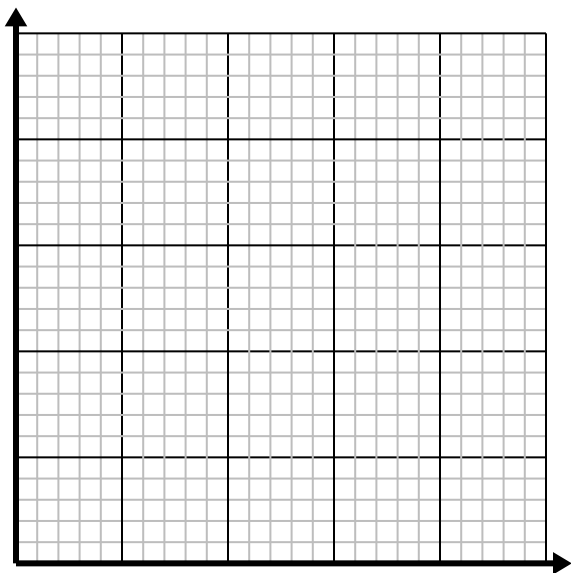


Solve each problem.

- 1) Every pound of meat costs \$5.25.

Create a table showing the price for up to 5 pounds of meat, then plot the values on the coordinate plane.

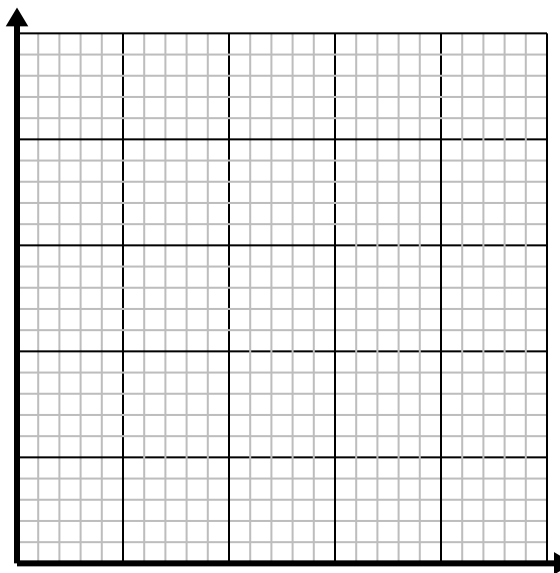
| | | | | | |
|--|--|--|--|--|--|
| | | | | | |
| | | | | | |



- 2) Every glass of lemonade requires 6 lemons.

Create a table showing the glasses of lemonade made using up to 5 lemons, then plot the values on the coordinate plane.

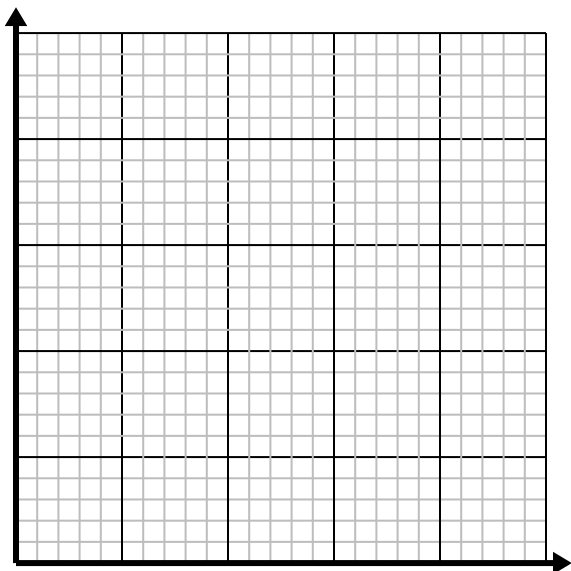
| | | | | | |
|--|--|--|--|--|--|
| | | | | | |
| | | | | | |



- 3) Every box of candy has 6 pieces of candy.

Create a table showing the pieces of candy in up to 5 boxes, then plot the values on the coordinate plane.

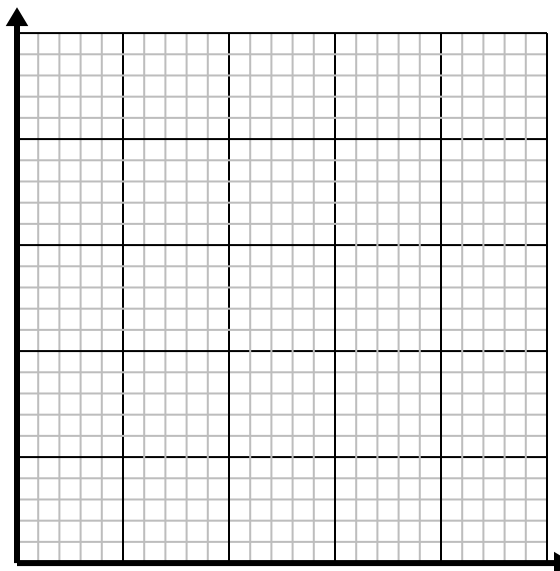
| | | | | | |
|--|--|--|--|--|--|
| | | | | | |
| | | | | | |



- 4) Every minute 2 books are printed.

Create a table showing the books printed over the course of 5 minutes, then plot the values on the coordinate plane.

| | | | | | |
|--|--|--|--|--|--|
| | | | | | |
| | | | | | |



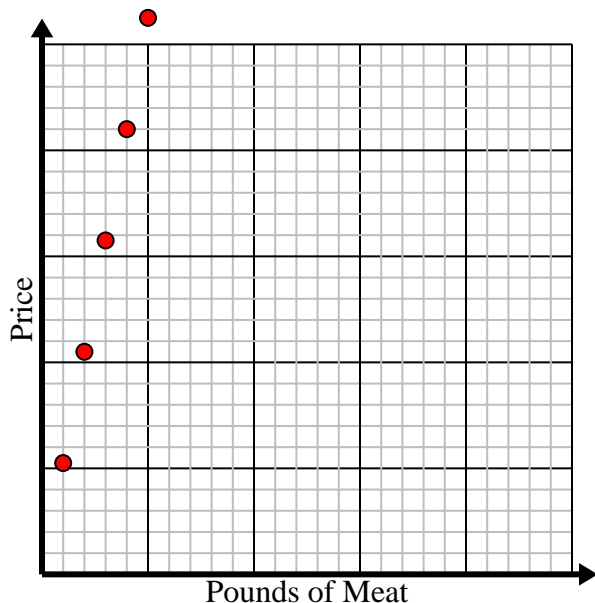


Solve each problem.

- 1) Every pound of meat costs \$5.25.

Create a table showing the price for up to 5 pounds of meat, then plot the values on the coordinate plane.

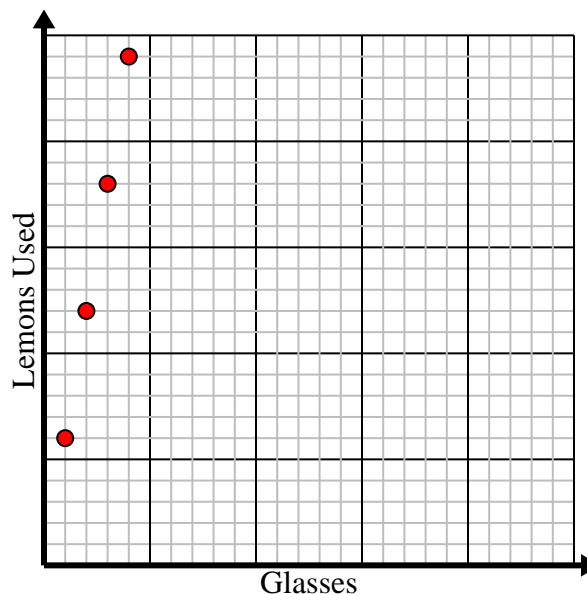
| | | | | | |
|----------------|------|------|-------|----|-------|
| Pounds of Meat | 1 | 2 | 3 | 4 | 5 |
| Price | 5.25 | 10.5 | 15.75 | 21 | 26.25 |



- 2) Every glass of lemonade requires 6 lemons.

Create a table showing the glasses of lemonade made using up to 5 lemons, then plot the values on the coordinate plane.

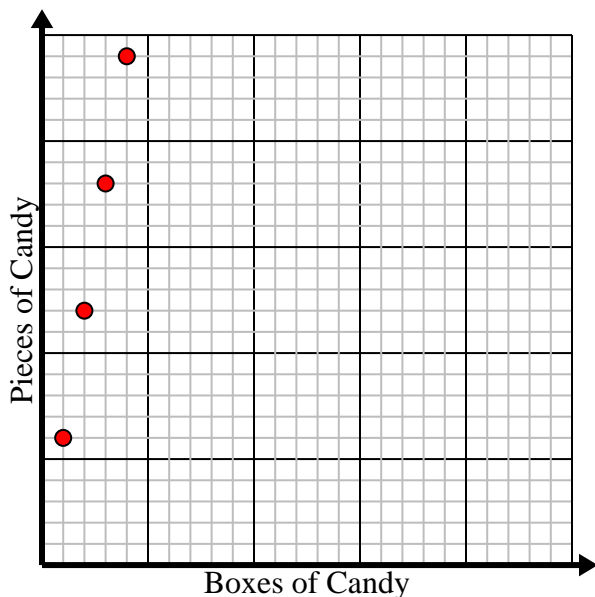
| | | | | | |
|-------------|---|----|----|----|----|
| Glasses | 1 | 2 | 3 | 4 | 5 |
| Lemons Used | 6 | 12 | 18 | 24 | 30 |



- 3) Every box of candy has 6 pieces of candy.

Create a table showing the pieces of candy in up to 5 boxes, then plot the values on the coordinate plane.

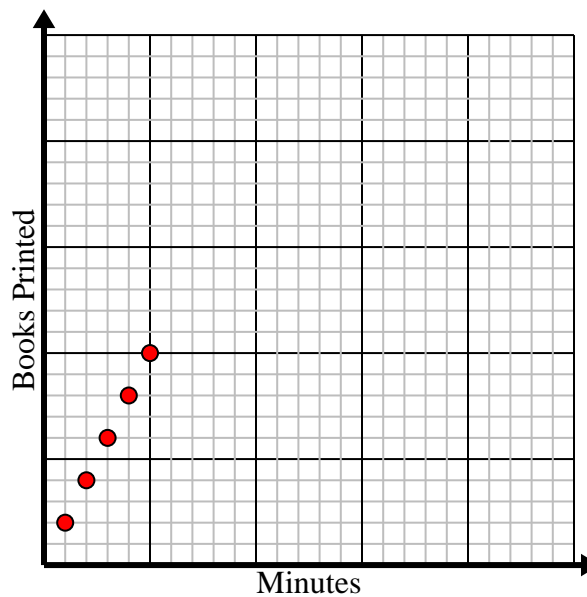
| | | | | | |
|-----------------|---|----|----|----|----|
| Boxes of Candy | 1 | 2 | 3 | 4 | 5 |
| Pieces of Candy | 6 | 12 | 18 | 24 | 30 |



- 4) Every minute 2 books are printed.

Create a table showing the books printed over the course of 5 minutes, then plot the values on the coordinate plane.

| | | | | | |
|---------------|---|---|---|---|----|
| Minutes | 1 | 2 | 3 | 4 | 5 |
| Books Printed | 2 | 4 | 6 | 8 | 10 |



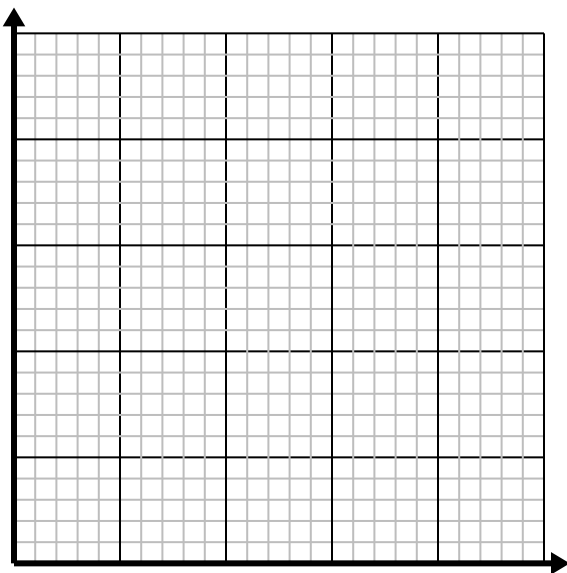


Solve each problem.

- 1) Every hour Kaleb walks 4 miles.

Create a table showing the miles travelled over the course of 5 hours, then plot the values on the coordinate plane.

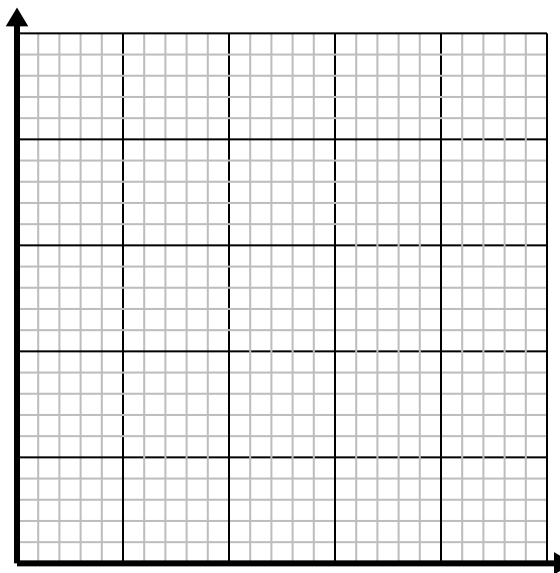
| | | | | | |
|--|--|--|--|--|--|
| | | | | | |
| | | | | | |



- 2) For every enemy defeated 2 points are earned.

Create a table showing the points earned for destroying up to 5 enemies, then plot the values on the coordinate plane.

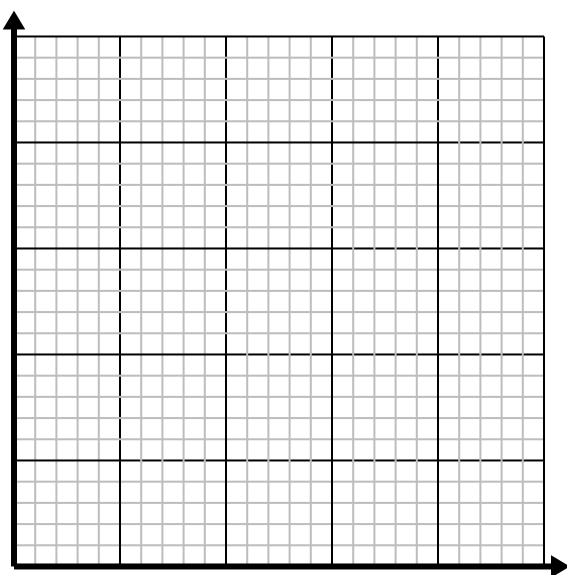
| | | | | | |
|--|--|--|--|--|--|
| | | | | | |
| | | | | | |



- 3) For every cup of flour 5 batches of cookies can be made.

Create a table showing the batches of cookies that can be made with up to 5 cups of flour, then plot the values on the coordinate plane.

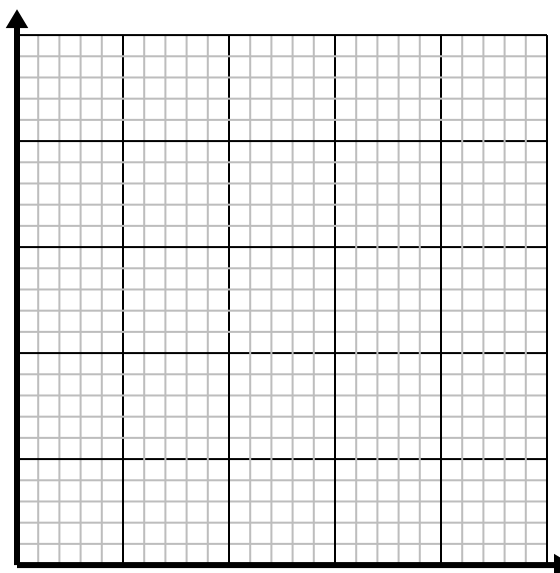
| | | | | | |
|--|--|--|--|--|--|
| | | | | | |
| | | | | | |



- 4) For every shirts made 6 buttons are used.

Create a table showing the buttons needed for making up to 5 shirts, then plot the values on the coordinate plane.

| | | | | | |
|--|--|--|--|--|--|
| | | | | | |
| | | | | | |



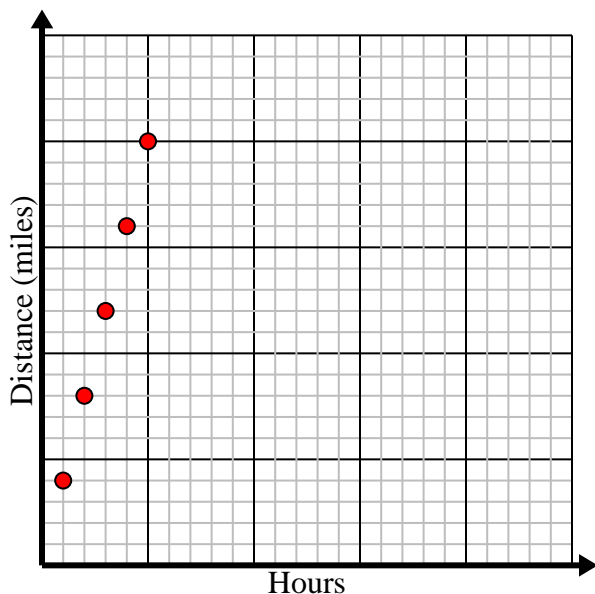


Solve each problem.

- 1) Every hour Kaleb walks 4 miles.

Create a table showing the miles travelled over the course of 5 hours, then plot the values on the coordinate plane.

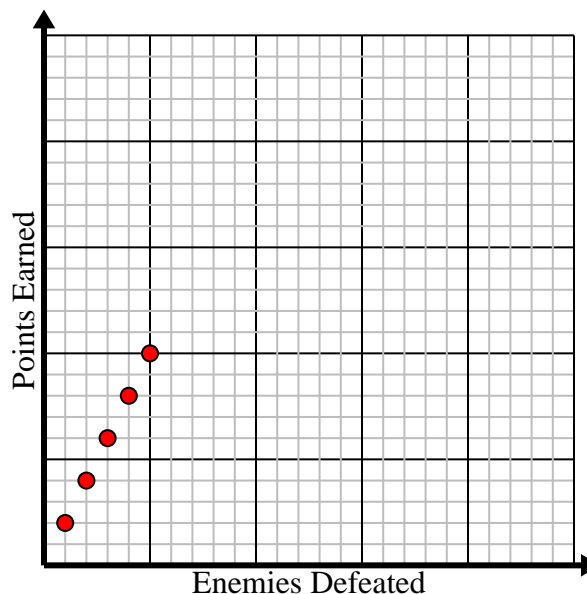
| | | | | | |
|------------------|---|---|----|----|----|
| Hours | 1 | 2 | 3 | 4 | 5 |
| Distance (miles) | 4 | 8 | 12 | 16 | 20 |



- 2) For every enemy defeated 2 points are earned.

Create a table showing the points earned for destroying up to 5 enemies, then plot the values on the coordinate plane.

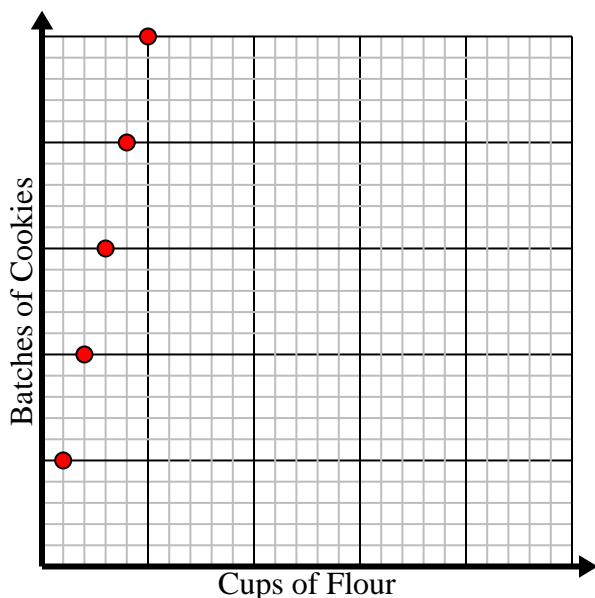
| | | | | | |
|------------------|---|---|---|---|----|
| Enemies Defeated | 1 | 2 | 3 | 4 | 5 |
| Points Earned | 2 | 4 | 6 | 8 | 10 |



- 3) For every cup of flour 5 batches of cookies can be made.

Create a table showing the batches of cookies that can be made with up to 5 cups of flour, then plot the values on the coordinate plane.

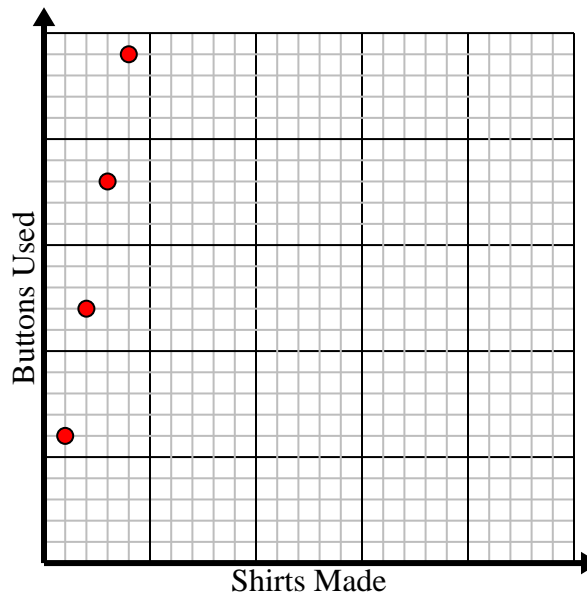
| | | | | | |
|--------------------|---|----|----|----|----|
| Cups of Flour | 1 | 2 | 3 | 4 | 5 |
| Batches of Cookies | 5 | 10 | 15 | 20 | 25 |



- 4) For every shirts made 6 buttons are used.

Create a table showing the buttons needed for making up to 5 shirts, then plot the values on the coordinate plane.

| | | | | | |
|--------------|---|----|----|----|----|
| Shirts Made | 1 | 2 | 3 | 4 | 5 |
| Buttons Used | 6 | 12 | 18 | 24 | 30 |





Solve each problem.

- 1) Every hour Dave walks 5 miles.

Create a table showing the miles travelled over the course of 5 hours, then plot the values on the coordinate plane.

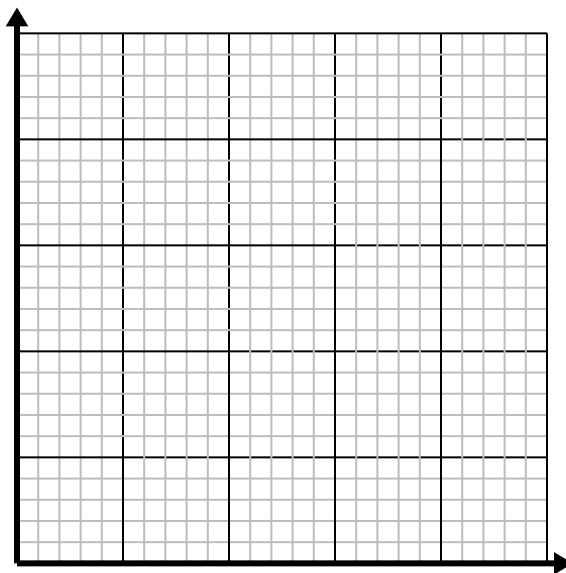
| | | | | | |
|--|--|--|--|--|--|
| | | | | | |
| | | | | | |



- 2) Every box of candy has 4 pieces of candy.

Create a table showing the pieces of candy in up to 5 boxes, then plot the values on the coordinate plane.

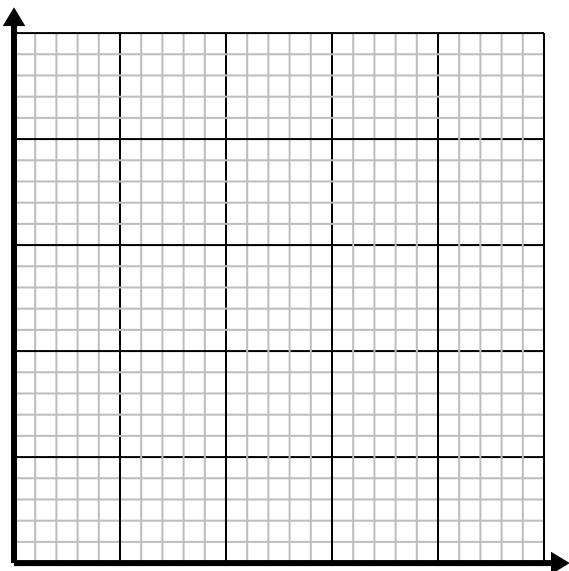
| | | | | | |
|--|--|--|--|--|--|
| | | | | | |
| | | | | | |



- 3) For every enemy defeated 5 points are earned.

Create a table showing the points earned for destroying up to 5 enemies, then plot the values on the coordinate plane.

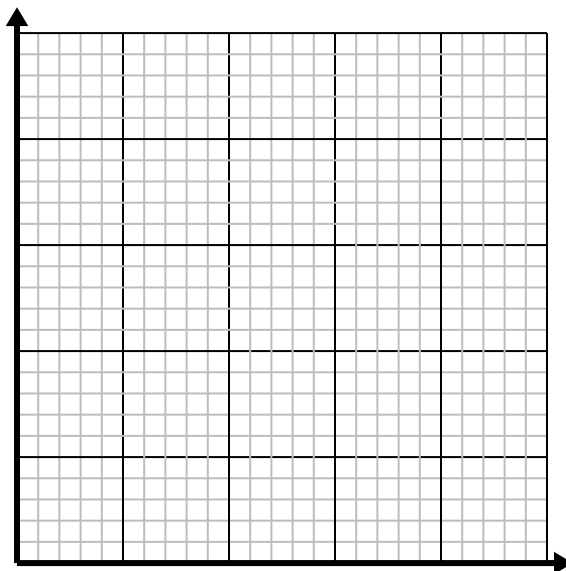
| | | | | | |
|--|--|--|--|--|--|
| | | | | | |
| | | | | | |



- 4) Every glass of lemonade requires 3 lemons.

Create a table showing the glasses of lemonade made using up to 5 lemons, then plot the values on the coordinate plane.

| | | | | | |
|--|--|--|--|--|--|
| | | | | | |
| | | | | | |



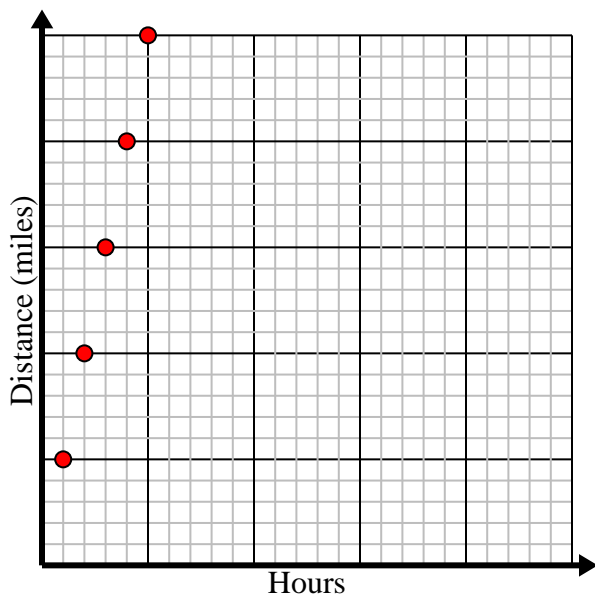


Solve each problem.

- 1) Every hour Dave walks 5 miles.

Create a table showing the miles travelled over the course of 5 hours, then plot the values on the coordinate plane.

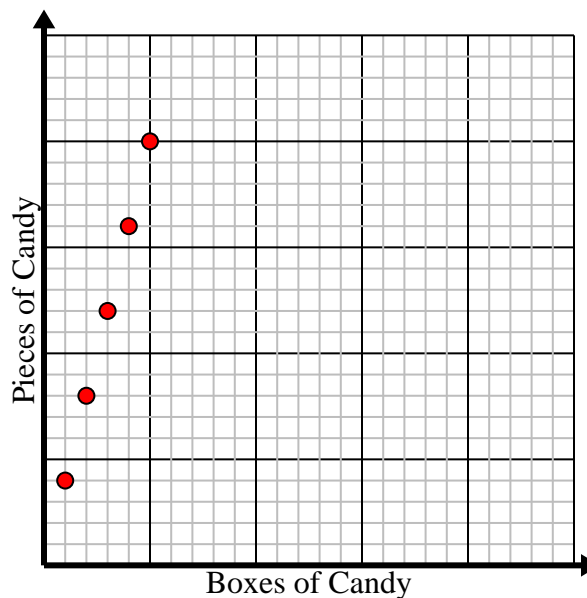
| | | | | | |
|------------------|---|----|----|----|----|
| Hours | 1 | 2 | 3 | 4 | 5 |
| Distance (miles) | 5 | 10 | 15 | 20 | 25 |



- 2) Every box of candy has 4 pieces of candy.

Create a table showing the pieces of candy in up to 5 boxes, then plot the values on the coordinate plane.

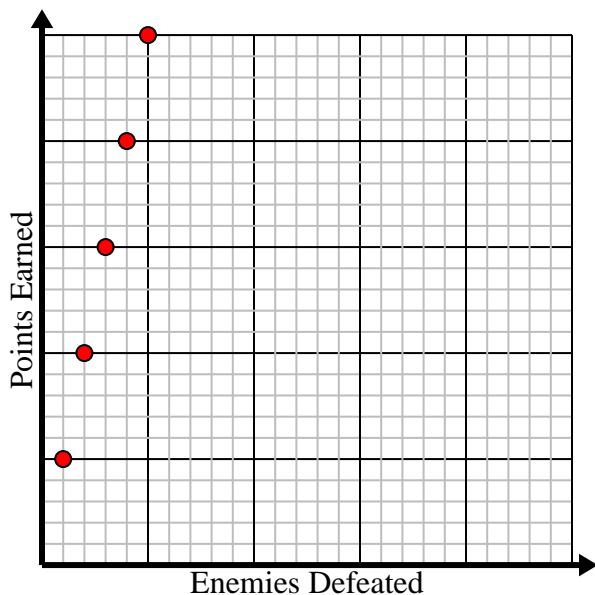
| | | | | | |
|-----------------|---|---|----|----|----|
| Boxes of Candy | 1 | 2 | 3 | 4 | 5 |
| Pieces of Candy | 4 | 8 | 12 | 16 | 20 |



- 3) For every enemy defeated 5 points are earned.

Create a table showing the points earned for destroying up to 5 enemies, then plot the values on the coordinate plane.

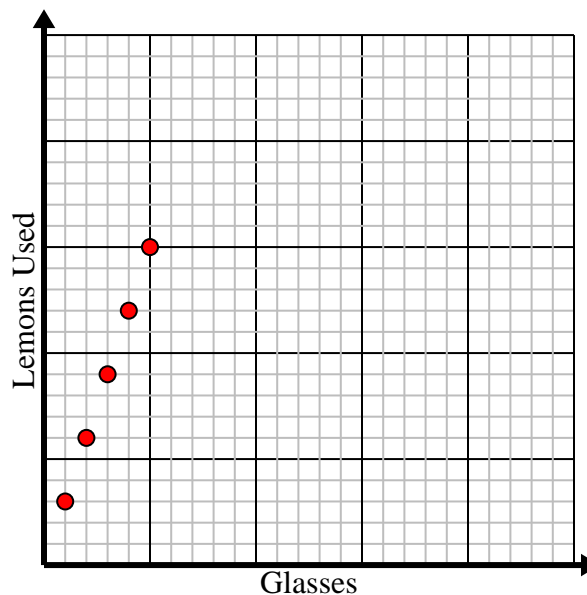
| | | | | | |
|------------------|---|----|----|----|----|
| Enemies Defeated | 1 | 2 | 3 | 4 | 5 |
| Points Earned | 5 | 10 | 15 | 20 | 25 |



- 4) Every glass of lemonade requires 3 lemons.

Create a table showing the glasses of lemonade made using up to 5 lemons, then plot the values on the coordinate plane.

| | | | | | |
|-------------|---|---|---|----|----|
| Glasses | 1 | 2 | 3 | 4 | 5 |
| Lemons Used | 3 | 6 | 9 | 12 | 15 |



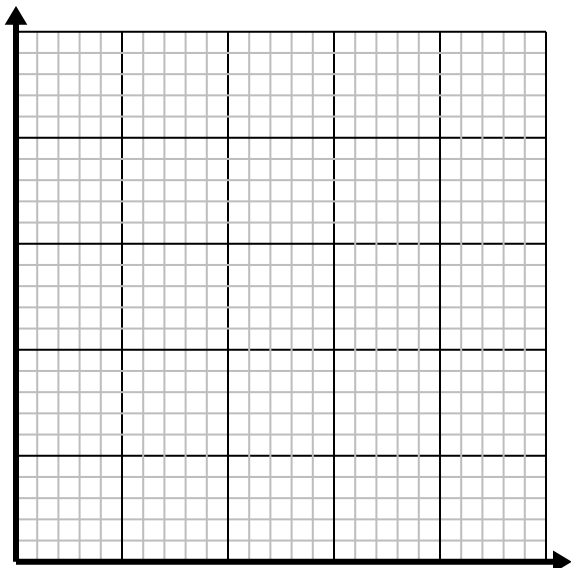


Solve each problem.

- 1) For every cup of flour 4 batches of cookies can be made.

Create a table showing the batches of cookies that can be made with up to 5 cups of flour, then plot the values on the coordinate plane.

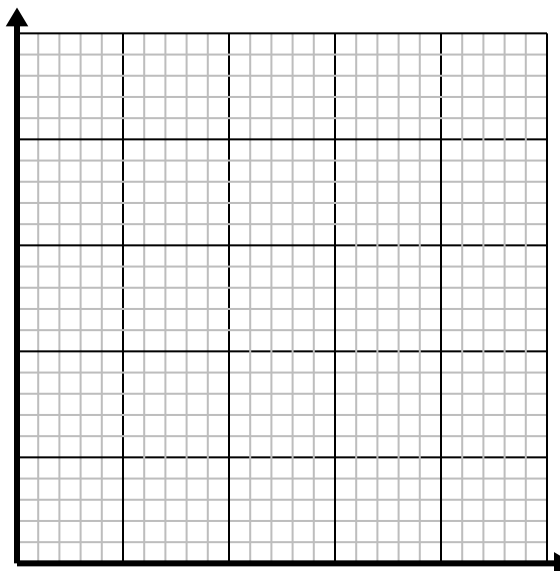
| | | | | | |
|--|--|--|--|--|--|
| | | | | | |
| | | | | | |



- 2) Every glass of lemonade requires 4 lemons.

Create a table showing the glasses of lemonade made using up to 5 lemons, then plot the values on the coordinate plane.

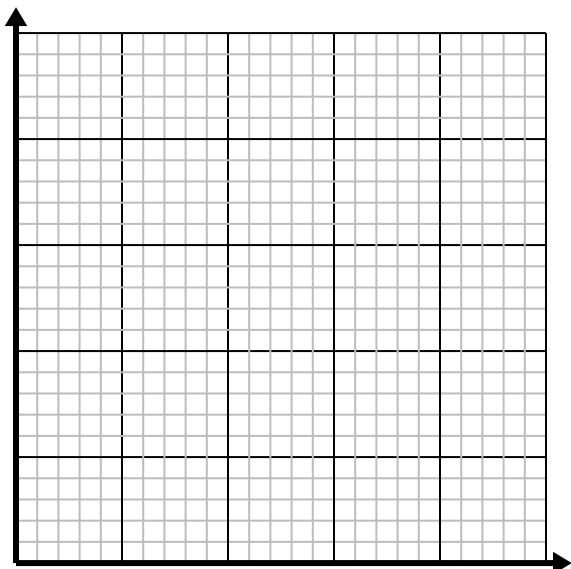
| | | | | | |
|--|--|--|--|--|--|
| | | | | | |
| | | | | | |



- 3) Every minute 2 books are printed.

Create a table showing the books printed over the course of 5 minutes, then plot the values on the coordinate plane.

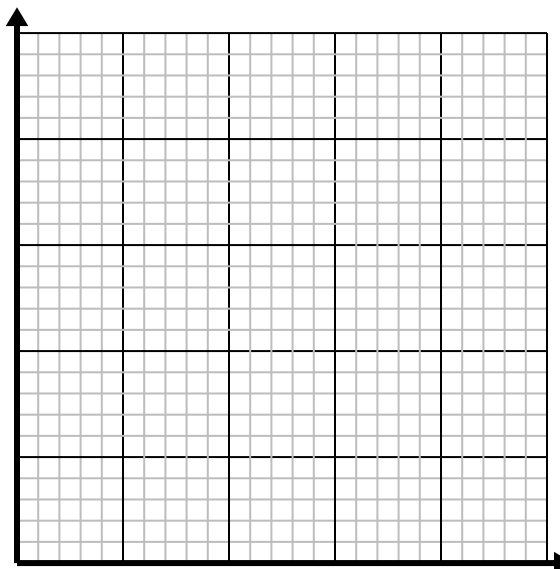
| | | | | | |
|--|--|--|--|--|--|
| | | | | | |
| | | | | | |



- 4) For every lawn mowed \$5 are earned.

Create a table showing the money earned for mowing up to 5 lawns, then plot the values on the coordinate plane.

| | | | | | |
|--|--|--|--|--|--|
| | | | | | |
| | | | | | |



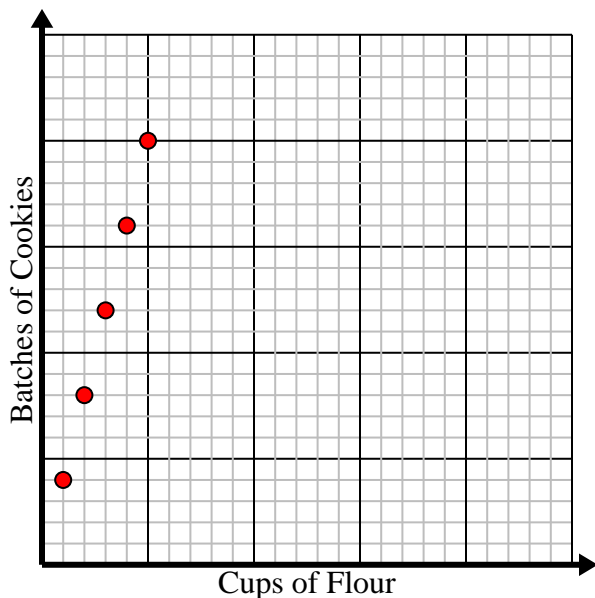


Solve each problem.

- 1) For every cup of flour 4 batches of cookies can be made.

Create a table showing the batches of cookies that can be made with up to 5 cups of flour, then plot the values on the coordinate plane.

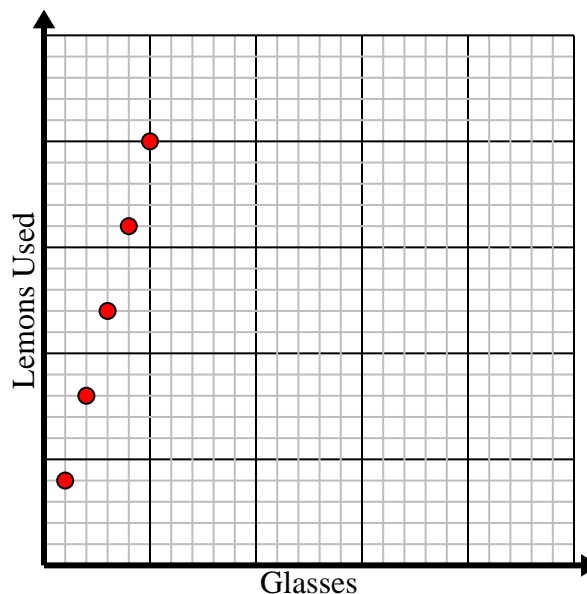
| | | | | | |
|--------------------|---|---|----|----|----|
| Cups of Flour | 1 | 2 | 3 | 4 | 5 |
| Batches of Cookies | 4 | 8 | 12 | 16 | 20 |



- 2) Every glass of lemonade requires 4 lemons.

Create a table showing the glasses of lemonade made using up to 5 lemons, then plot the values on the coordinate plane.

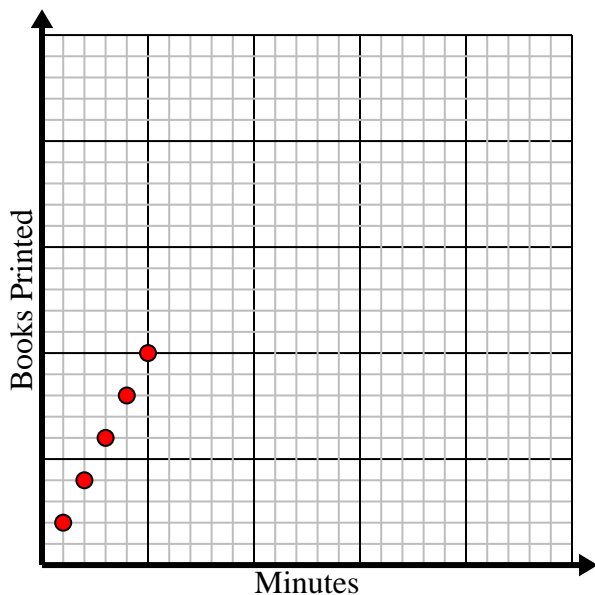
| | | | | | |
|-------------|---|---|----|----|----|
| Glasses | 1 | 2 | 3 | 4 | 5 |
| Lemons Used | 4 | 8 | 12 | 16 | 20 |



- 3) Every minute 2 books are printed.

Create a table showing the books printed over the course of 5 minutes, then plot the values on the coordinate plane.

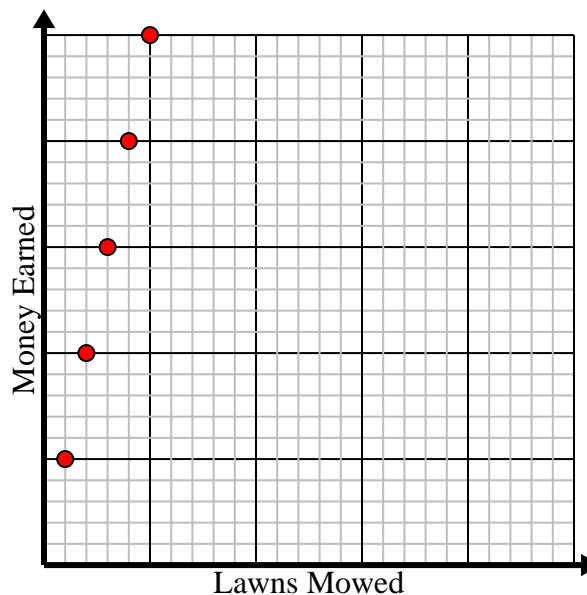
| | | | | | |
|---------------|---|---|---|---|----|
| Minutes | 1 | 2 | 3 | 4 | 5 |
| Books Printed | 2 | 4 | 6 | 8 | 10 |



- 4) For every lawn mowed \$5 are earned.

Create a table showing the money earned for mowing up to 5 lawns, then plot the values on the coordinate plane.

| | | | | | |
|--------------|---|----|----|----|----|
| Lawns Mowed | 1 | 2 | 3 | 4 | 5 |
| Money Earned | 5 | 10 | 15 | 20 | 25 |



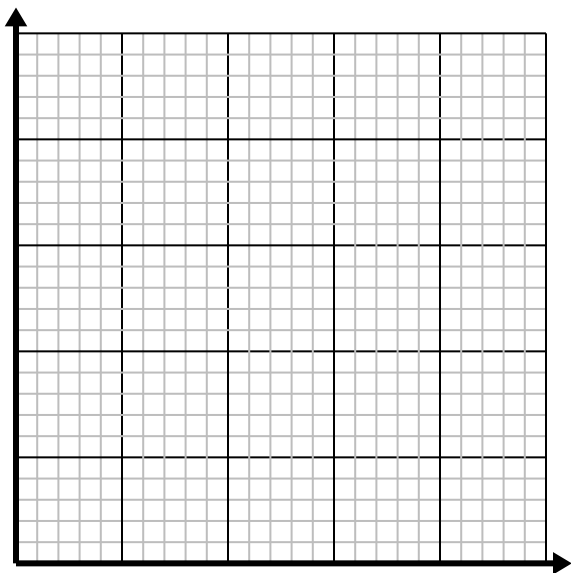


Solve each problem.

- 1) For every lawn mowed \$3 are earned.

Create a table showing the money earned for mowing up to 5 lawns, then plot the values on the coordinate plane.

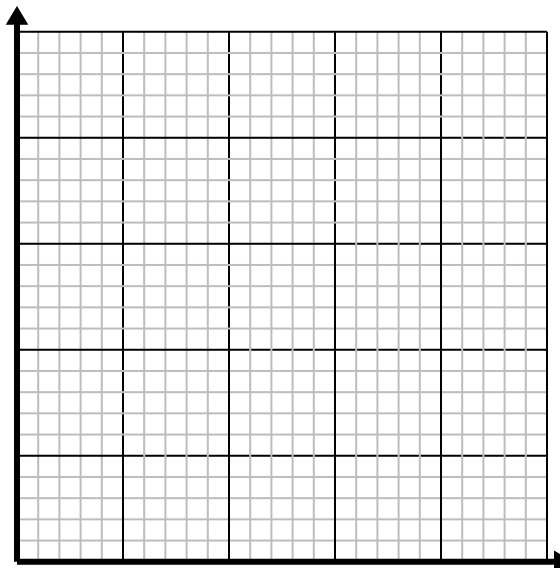
| | | | | | |
|--|--|--|--|--|--|
| | | | | | |
| | | | | | |



- 2) For every cup of flour 5 batches of cookies can be made.

Create a table showing the batches of cookies that can be made with up to 5 cups of flour, then plot the values on the coordinate plane.

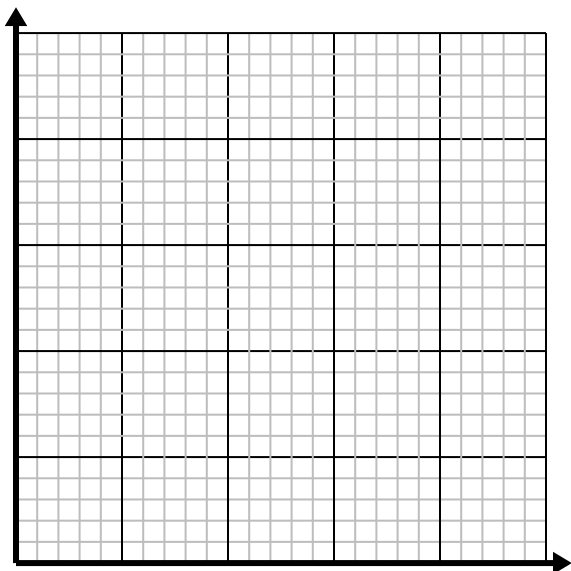
| | | | | | |
|--|--|--|--|--|--|
| | | | | | |
| | | | | | |



- 3) Every pound of meat costs \$6.66.

Create a table showing the price for up to 5 pounds of meat, then plot the values on the coordinate plane.

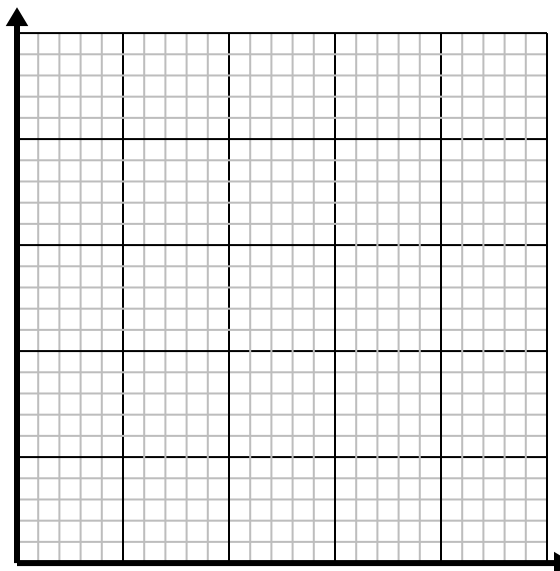
| | | | | | |
|--|--|--|--|--|--|
| | | | | | |
| | | | | | |



- 4) Every glass of lemonade requires 3 lemons.

Create a table showing the glasses of lemonade made using up to 5 lemons, then plot the values on the coordinate plane.

| | | | | | |
|--|--|--|--|--|--|
| | | | | | |
| | | | | | |



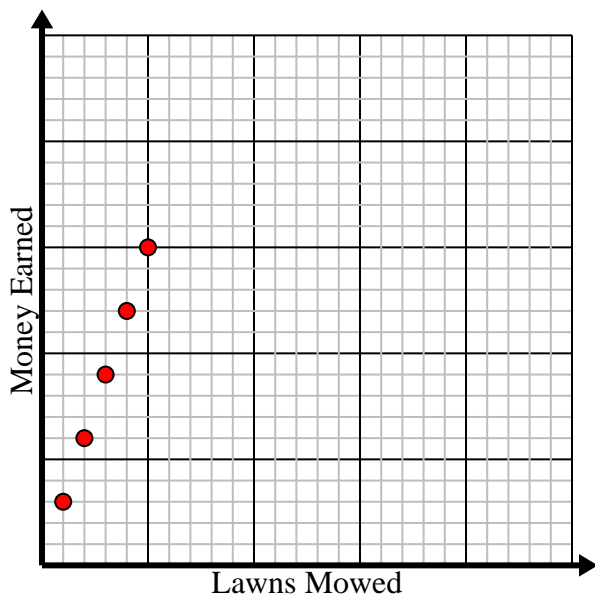


Solve each problem.

- 1) For every lawn mowed \$3 are earned.

Create a table showing the money earned for mowing up to 5 lawns, then plot the values on the coordinate plane.

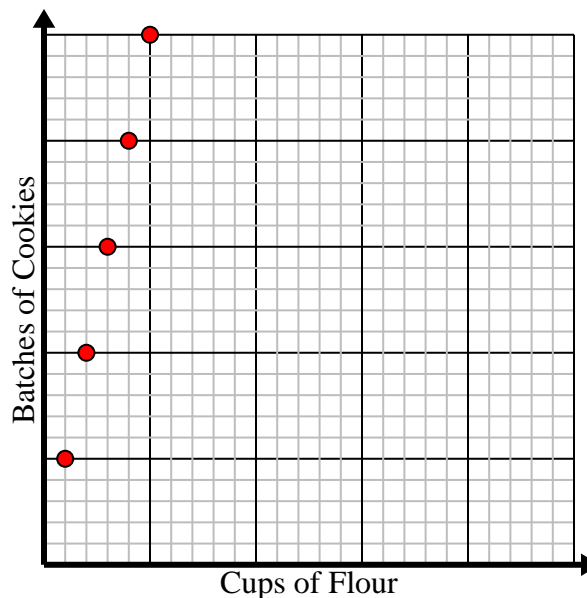
| | | | | | |
|--------------|---|---|---|----|----|
| Lawns Mowed | 1 | 2 | 3 | 4 | 5 |
| Money Earned | 3 | 6 | 9 | 12 | 15 |



- 2) For every cup of flour 5 batches of cookies can be made.

Create a table showing the batches of cookies that can be made with up to 5 cups of flour, then plot the values on the coordinate plane.

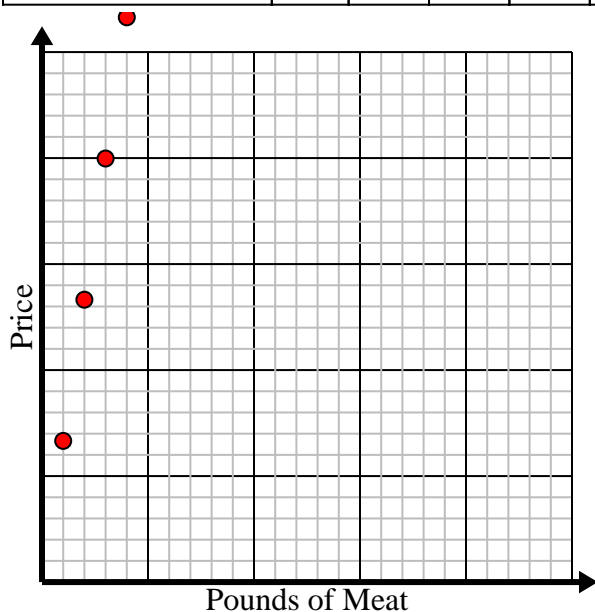
| | | | | | |
|--------------------|---|----|----|----|----|
| Cups of Flour | 1 | 2 | 3 | 4 | 5 |
| Batches of Cookies | 5 | 10 | 15 | 20 | 25 |



- 3) Every pound of meat costs \$6.66.

Create a table showing the price for up to 5 pounds of meat, then plot the values on the coordinate plane.

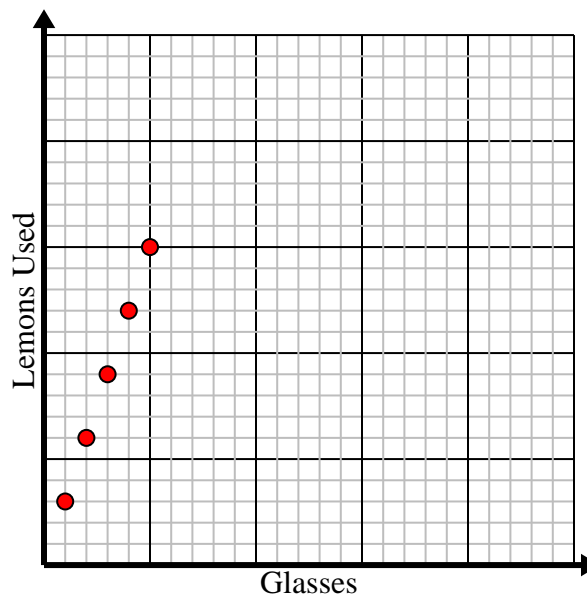
| | | | | | |
|----------------|------|-------|-------|-------|------|
| Pounds of Meat | 1 | 2 | 3 | 4 | 5 |
| Price | 6.66 | 13.32 | 19.98 | 26.64 | 33.3 |



- 4) Every glass of lemonade requires 3 lemons.

Create a table showing the glasses of lemonade made using up to 5 lemons, then plot the values on the coordinate plane.

| | | | | | |
|-------------|---|---|---|----|----|
| Glasses | 1 | 2 | 3 | 4 | 5 |
| Lemons Used | 3 | 6 | 9 | 12 | 15 |



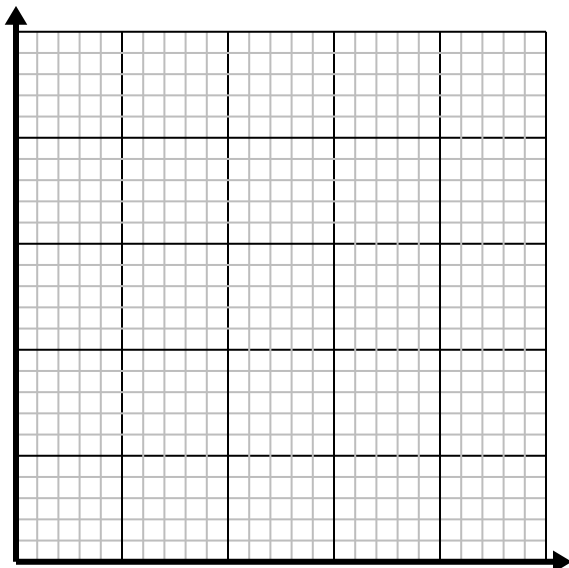


Solve each problem.

- 1) For every cup of flour 4 batches of cookies can be made.

Create a table showing the batches of cookies that can be made with up to 5 cups of flour, then plot the values on the coordinate plane.

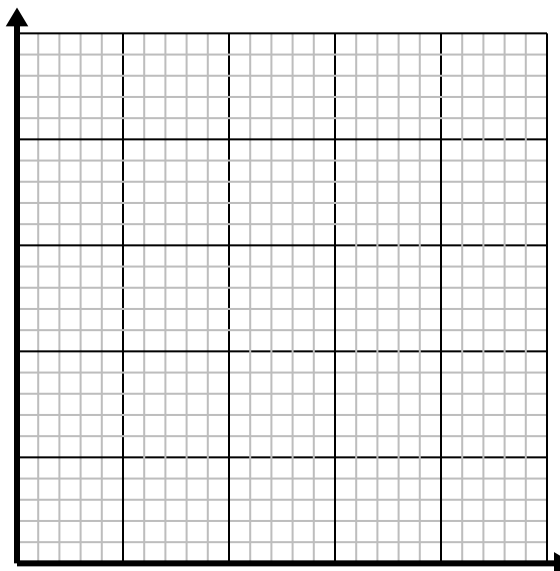
| | | | | | |
|--|--|--|--|--|--|
| | | | | | |
| | | | | | |



- 2) Every hour Edward walks 4 miles.

Create a table showing the miles travelled over the course of 5 hours, then plot the values on the coordinate plane.

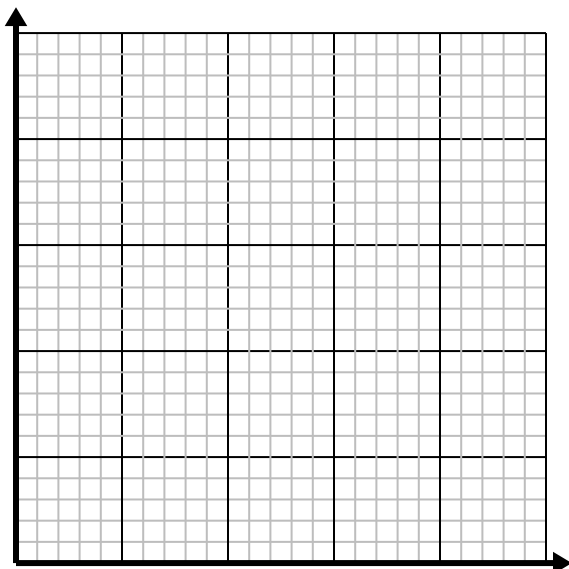
| | | | | | |
|--|--|--|--|--|--|
| | | | | | |
| | | | | | |



- 3) For every enemy defeated 2 points are earned.

Create a table showing the points earned for destroying up to 5 enemies, then plot the values on the coordinate plane.

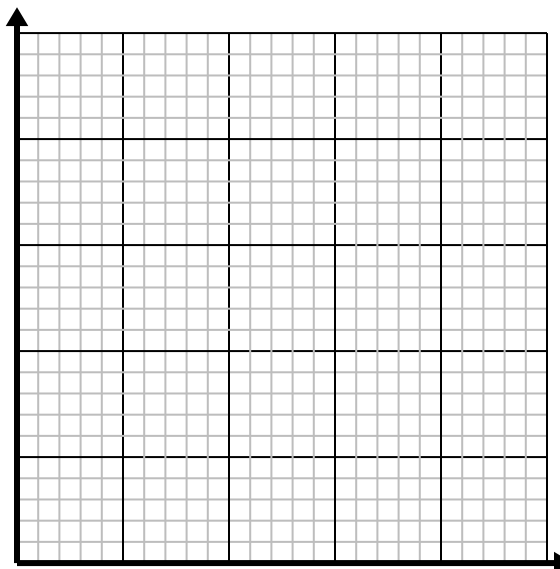
| | | | | | |
|--|--|--|--|--|--|
| | | | | | |
| | | | | | |



- 4) Every box of candy has 4 pieces of candy.

Create a table showing the pieces of candy in up to 5 boxes, then plot the values on the coordinate plane.

| | | | | | |
|--|--|--|--|--|--|
| | | | | | |
| | | | | | |



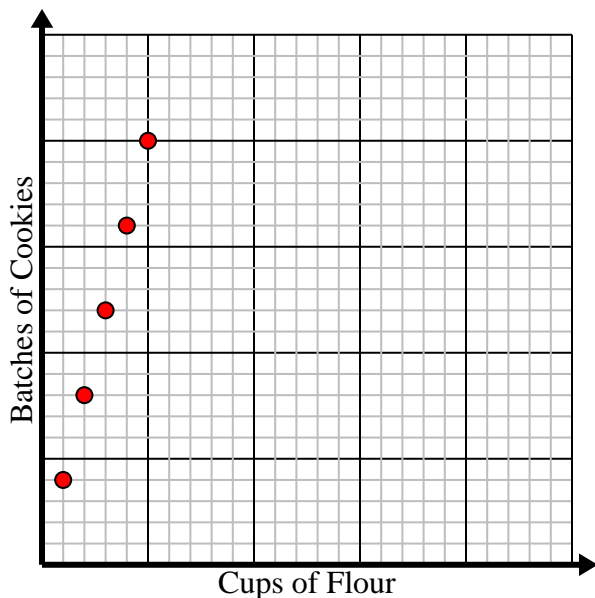


Solve each problem.

- 1) For every cup of flour 4 batches of cookies can be made.

Create a table showing the batches of cookies that can be made with up to 5 cups of flour, then plot the values on the coordinate plane.

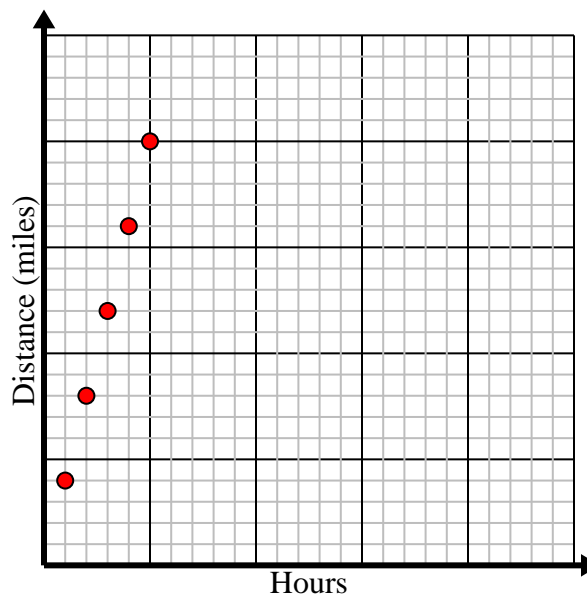
| | | | | | |
|--------------------|---|---|----|----|----|
| Cups of Flour | 1 | 2 | 3 | 4 | 5 |
| Batches of Cookies | 4 | 8 | 12 | 16 | 20 |



- 2) Every hour Edward walks 4 miles.

Create a table showing the miles travelled over the course of 5 hours, then plot the values on the coordinate plane.

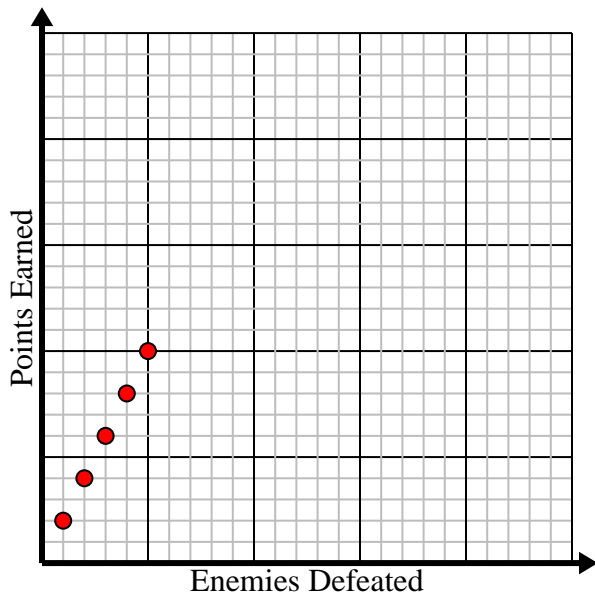
| | | | | | |
|------------------|---|---|----|----|----|
| Hours | 1 | 2 | 3 | 4 | 5 |
| Distance (miles) | 4 | 8 | 12 | 16 | 20 |



- 3) For every enemy defeated 2 points are earned.

Create a table showing the points earned for destroying up to 5 enemies, then plot the values on the coordinate plane.

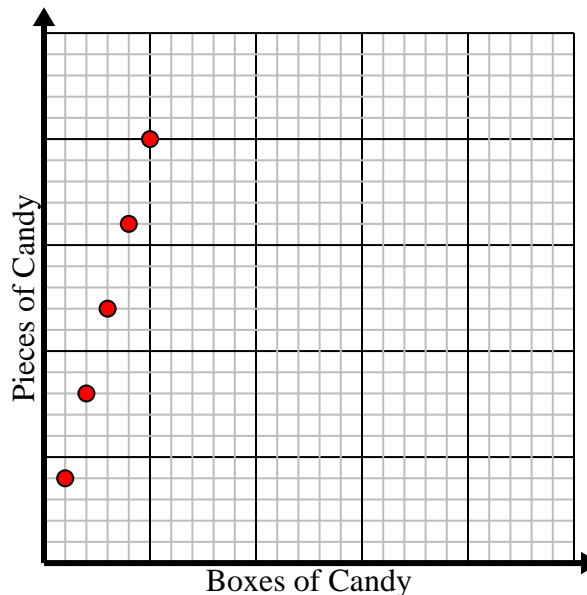
| | | | | | |
|------------------|---|---|---|---|----|
| Enemies Defeated | 1 | 2 | 3 | 4 | 5 |
| Points Earned | 2 | 4 | 6 | 8 | 10 |



- 4) Every box of candy has 4 pieces of candy.

Create a table showing the pieces of candy in up to 5 boxes, then plot the values on the coordinate plane.

| | | | | | |
|-----------------|---|---|----|----|----|
| Boxes of Candy | 1 | 2 | 3 | 4 | 5 |
| Pieces of Candy | 4 | 8 | 12 | 16 | 20 |



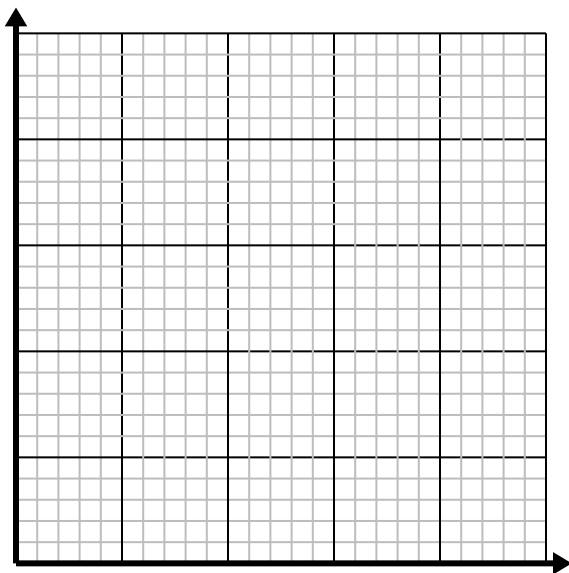


Solve each problem.

- 1) For every enemy defeated 2 points are earned.

Create a table showing the points earned for destroying up to 5 enemies, then plot the values on the coordinate plane.

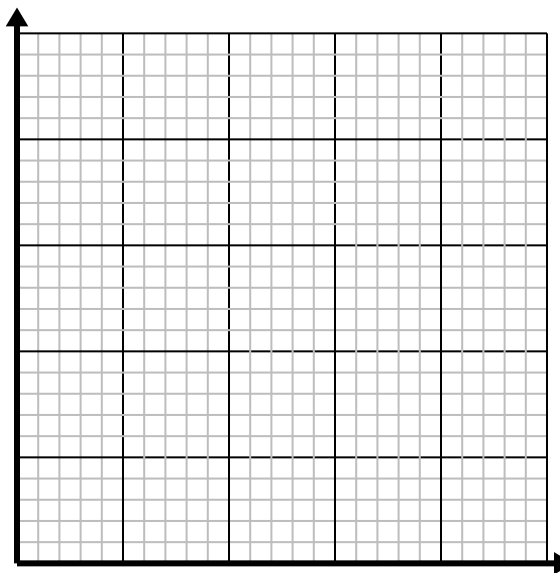
| | | | | | |
|--|--|--|--|--|--|
| | | | | | |
| | | | | | |



- 2) Every pound of meat costs \$2.63.

Create a table showing the price for up to 5 pounds of meat, then plot the values on the coordinate plane.

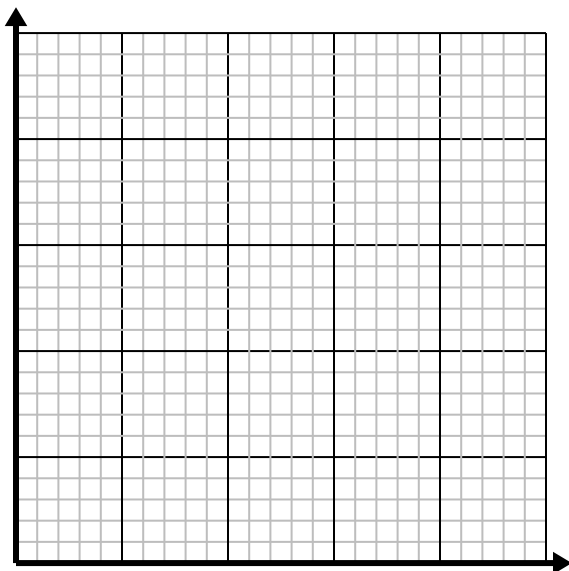
| | | | | | |
|--|--|--|--|--|--|
| | | | | | |
| | | | | | |



- 3) Every hour Jerry walks 5 miles.

Create a table showing the miles travelled over the course of 5 hours, then plot the values on the coordinate plane.

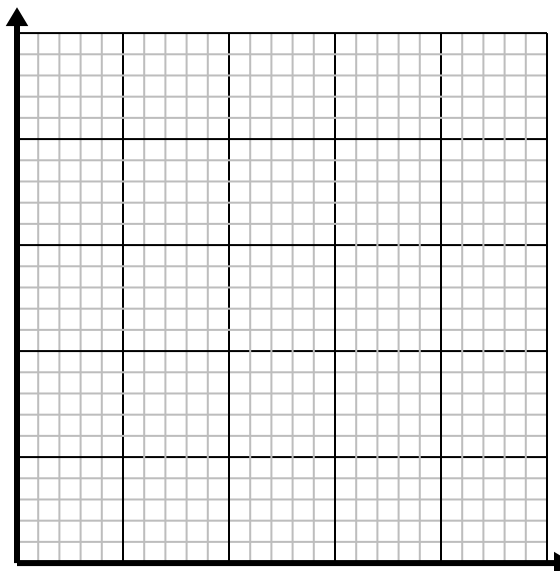
| | | | | | |
|--|--|--|--|--|--|
| | | | | | |
| | | | | | |



- 4) Every minute 3 books are printed.

Create a table showing the books printed over the course of 5 minutes, then plot the values on the coordinate plane.

| | | | | | |
|--|--|--|--|--|--|
| | | | | | |
| | | | | | |



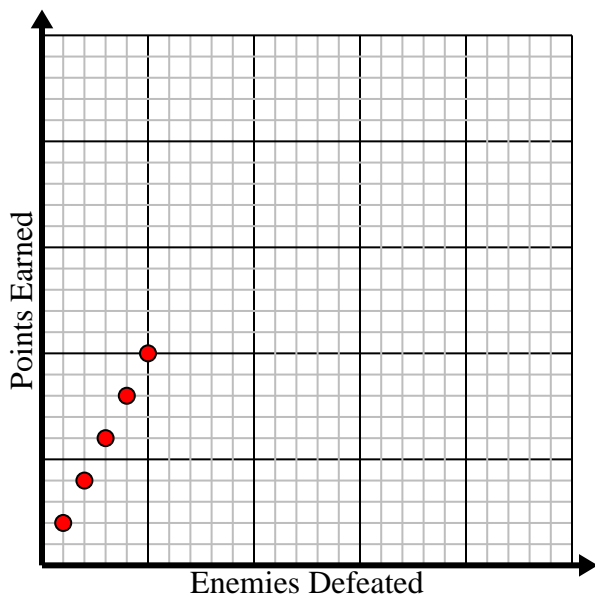


Solve each problem.

- 1) For every enemy defeated 2 points are earned.

Create a table showing the points earned for destroying up to 5 enemies, then plot the values on the coordinate plane.

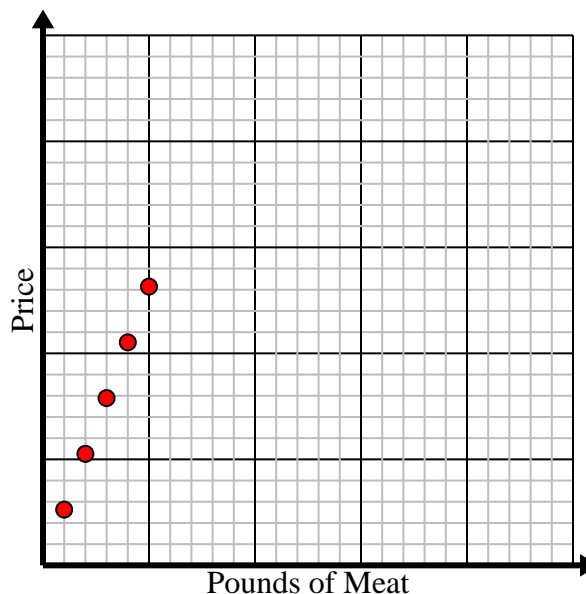
| | | | | | |
|------------------|---|---|---|---|----|
| Enemies Defeated | 1 | 2 | 3 | 4 | 5 |
| Points Earned | 2 | 4 | 6 | 8 | 10 |



- 2) Every pound of meat costs \$2.63.

Create a table showing the price for up to 5 pounds of meat, then plot the values on the coordinate plane.

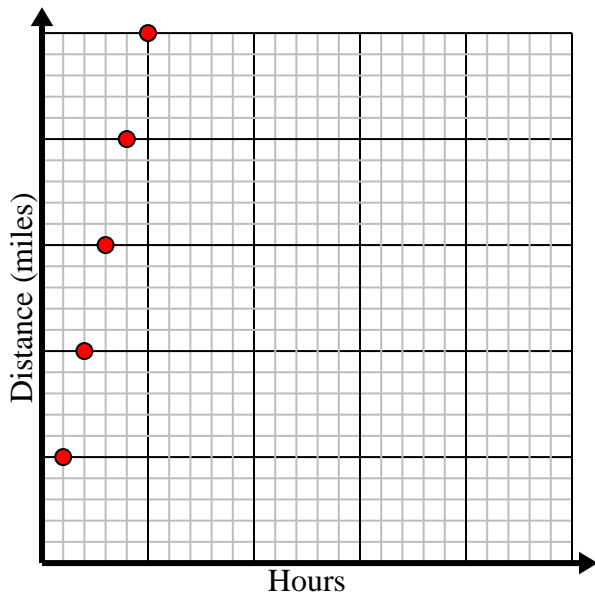
| | | | | | |
|----------------|------|------|------|-------|-------|
| Pounds of Meat | 1 | 2 | 3 | 4 | 5 |
| Price | 2.63 | 5.26 | 7.89 | 10.52 | 13.15 |



- 3) Every hour Jerry walks 5 miles.

Create a table showing the miles travelled over the course of 5 hours, then plot the values on the coordinate plane.

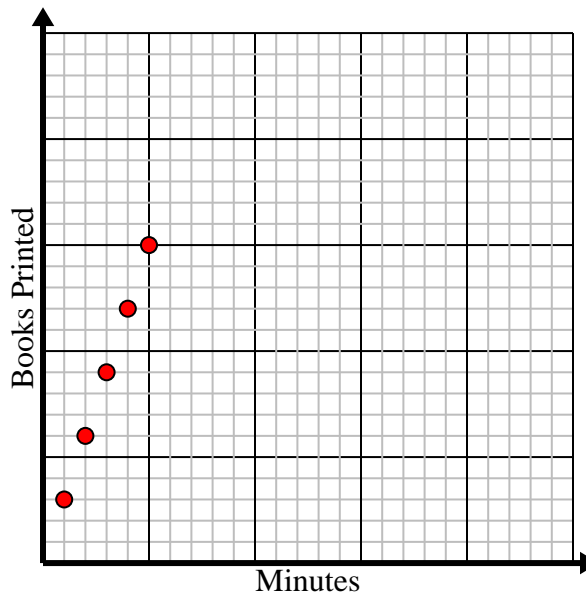
| | | | | | |
|------------------|---|----|----|----|----|
| Hours | 1 | 2 | 3 | 4 | 5 |
| Distance (miles) | 5 | 10 | 15 | 20 | 25 |



- 4) Every minute 3 books are printed.

Create a table showing the books printed over the course of 5 minutes, then plot the values on the coordinate plane.

| | | | | | |
|---------------|---|---|---|----|----|
| Minutes | 1 | 2 | 3 | 4 | 5 |
| Books Printed | 3 | 6 | 9 | 12 | 15 |



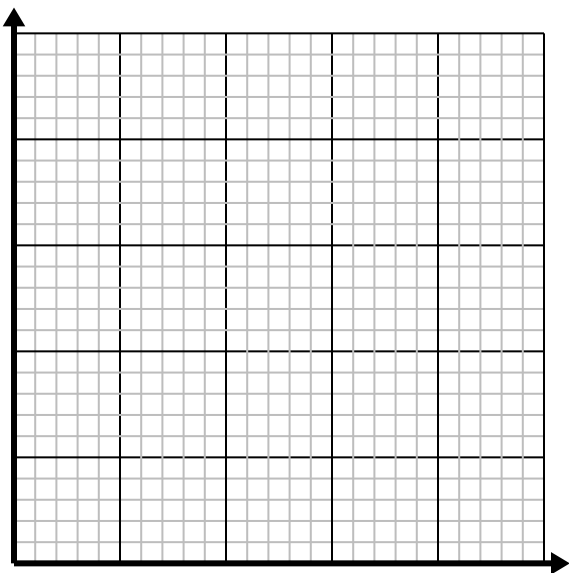


Solve each problem.

- 1) Every glass of lemonade requires 3 lemons.

Create a table showing the glasses of lemonade made using up to 5 lemons, then plot the values on the coordinate plane.

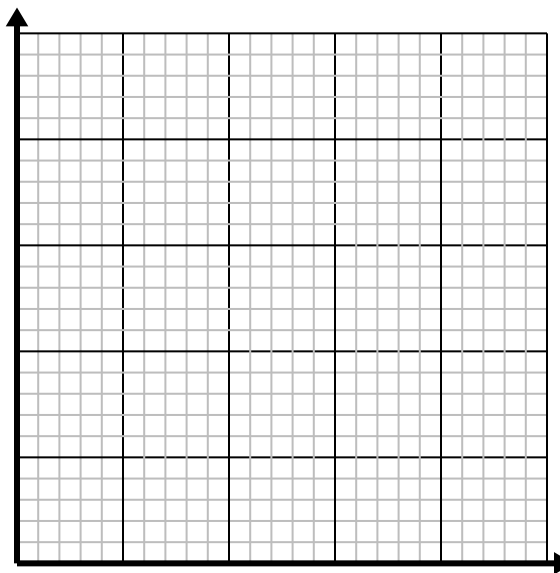
| | | | | | |
|--|--|--|--|--|--|
| | | | | | |
| | | | | | |



- 2) For every enemy defeated 5 points are earned.

Create a table showing the points earned for destroying up to 5 enemies, then plot the values on the coordinate plane.

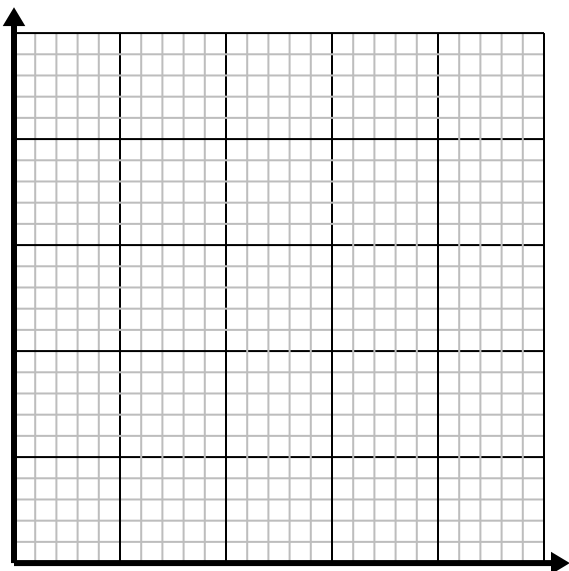
| | | | | | |
|--|--|--|--|--|--|
| | | | | | |
| | | | | | |



- 3) Every pound of meat costs \$4.39.

Create a table showing the price for up to 5 pounds of meat, then plot the values on the coordinate plane.

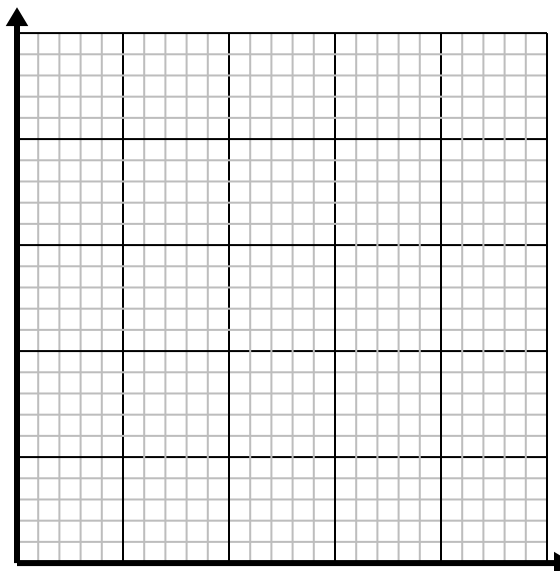
| | | | | | |
|--|--|--|--|--|--|
| | | | | | |
| | | | | | |



- 4) Every box of candy has 6 pieces of candy.

Create a table showing the pieces of candy in up to 5 boxes, then plot the values on the coordinate plane.

| | | | | | |
|--|--|--|--|--|--|
| | | | | | |
| | | | | | |



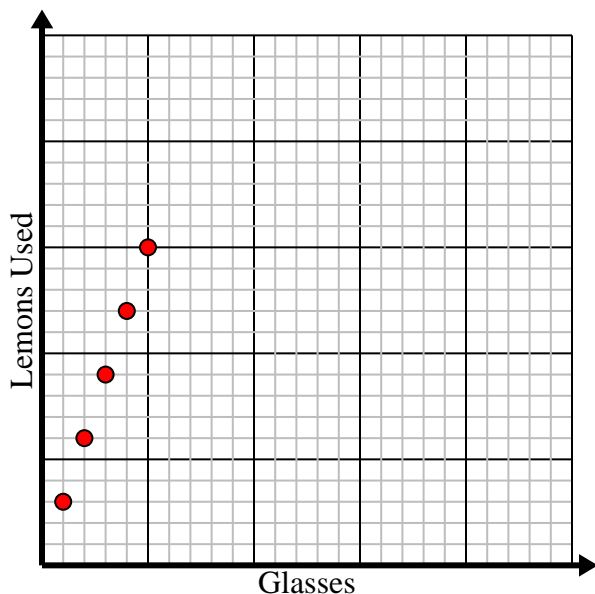


Solve each problem.

- 1) Every glass of lemonade requires 3 lemons.

Create a table showing the glasses of lemonade made using up to 5 lemons, then plot the values on the coordinate plane.

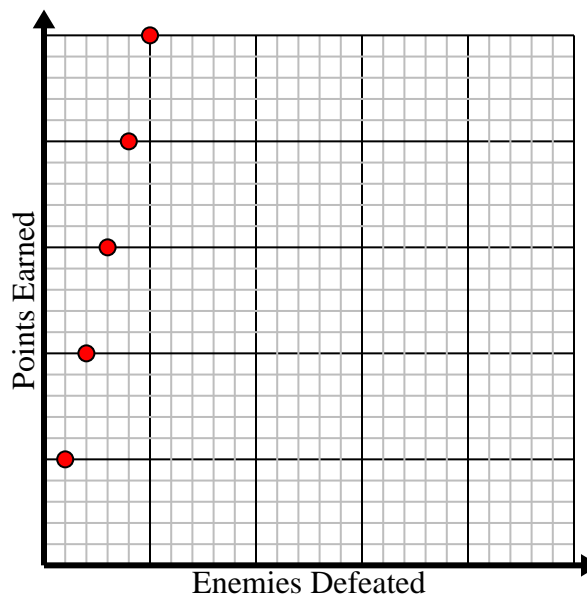
| | | | | | |
|-------------|---|---|---|----|----|
| Glasses | 1 | 2 | 3 | 4 | 5 |
| Lemons Used | 3 | 6 | 9 | 12 | 15 |



- 2) For every enemy defeated 5 points are earned.

Create a table showing the points earned for destroying up to 5 enemies, then plot the values on the coordinate plane.

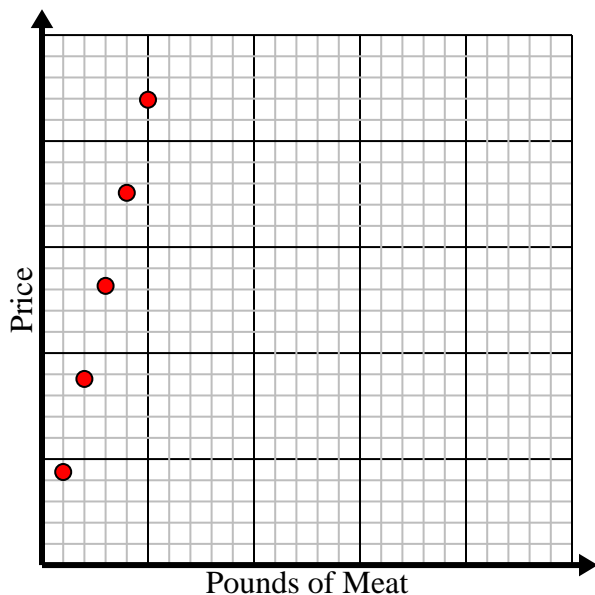
| | | | | | |
|------------------|---|----|----|----|----|
| Enemies Defeated | 1 | 2 | 3 | 4 | 5 |
| Points Earned | 5 | 10 | 15 | 20 | 25 |



- 3) Every pound of meat costs \$4.39.

Create a table showing the price for up to 5 pounds of meat, then plot the values on the coordinate plane.

| | | | | | |
|----------------|------|------|-------|-------|-------|
| Pounds of Meat | 1 | 2 | 3 | 4 | 5 |
| Price | 4.39 | 8.78 | 13.17 | 17.56 | 21.95 |



- 4) Every box of candy has 6 pieces of candy.

Create a table showing the pieces of candy in up to 5 boxes, then plot the values on the coordinate plane.

| | | | | | |
|-----------------|---|----|----|----|----|
| Boxes of Candy | 1 | 2 | 3 | 4 | 5 |
| Pieces of Candy | 6 | 12 | 18 | 24 | 30 |

