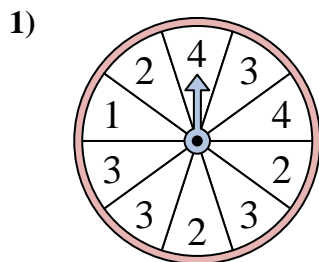


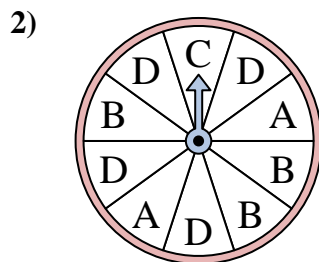


Solve each problem. Round your answer to the nearest tenth.

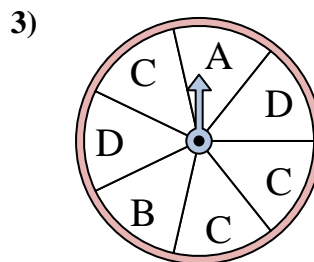
Answers



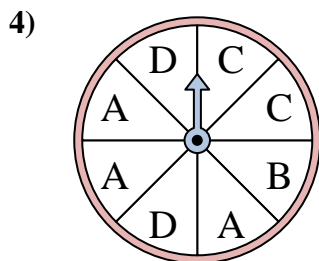
The spinner has a _____% chance of landing on a 2.



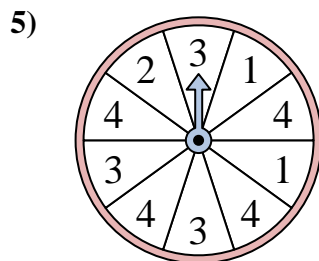
The spinner has a _____% chance of landing on a D.



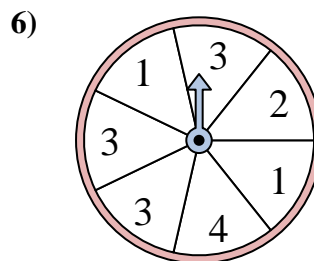
The spinner has a _____% chance of landing on a C.



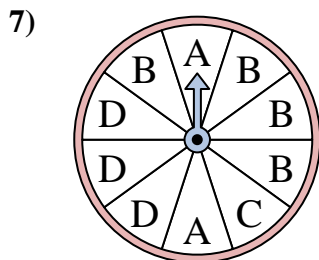
The spinner has a _____% chance of landing on a A.



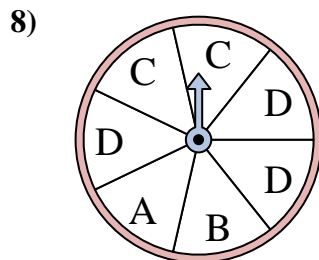
The spinner has a _____% chance of landing on a 2.



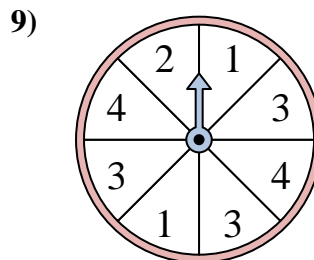
The spinner has a _____% chance of landing on a 2.



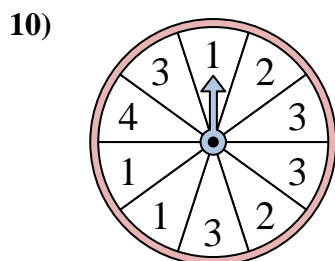
The spinner has a _____% chance of landing on a B.



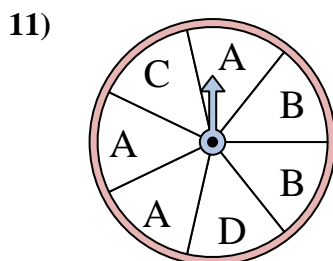
The spinner has a _____% chance of landing on a C.



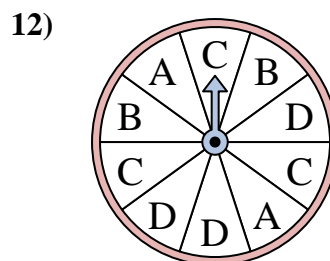
The spinner has a _____% chance of landing on a 1.



The spinner has a _____% chance of landing on a 4.



The spinner has a _____% chance of landing on a D.

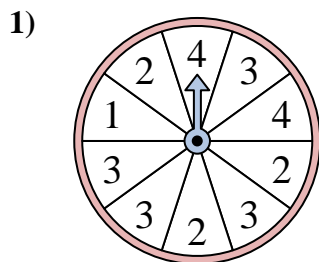


The spinner has a _____% chance of landing on a C.

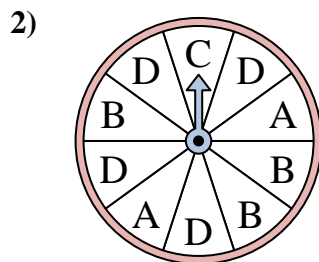
1. _____
2. _____
3. _____
4. _____
5. _____
6. _____
7. _____
8. _____
9. _____
10. _____
11. _____
12. _____



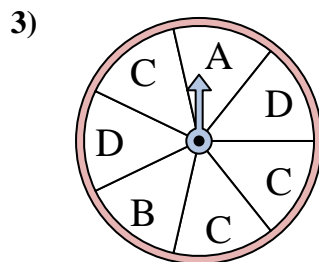
Solve each problem. Round your answer to the nearest tenth.



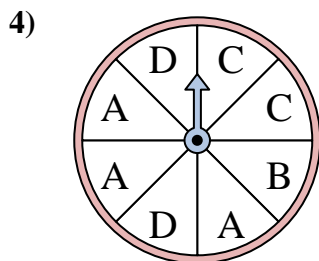
The spinner has a _____% chance of landing on a 2.



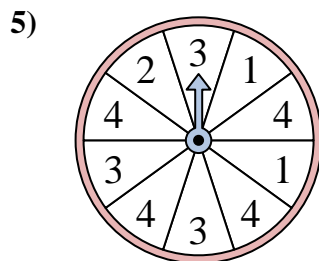
The spinner has a _____% chance of landing on a D.



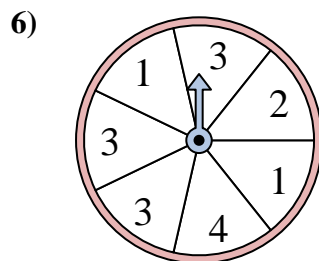
The spinner has a _____% chance of landing on a C.



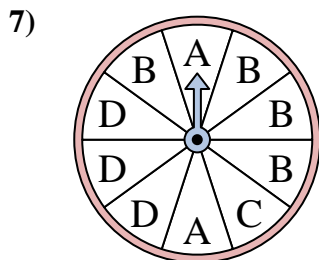
The spinner has a _____% chance of landing on a A.



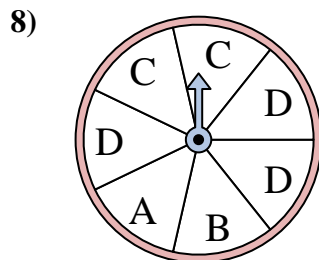
The spinner has a _____% chance of landing on a 2.



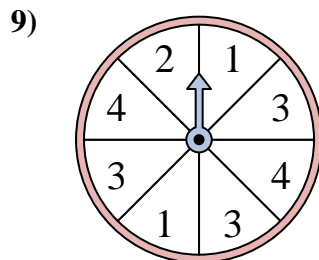
The spinner has a _____% chance of landing on a 2.



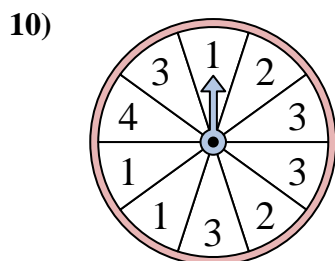
The spinner has a _____% chance of landing on a B.



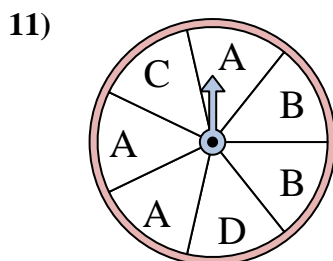
The spinner has a _____% chance of landing on a C.



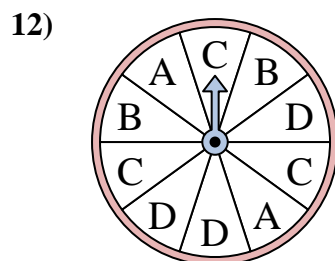
The spinner has a _____% chance of landing on a 1.



The spinner has a _____% chance of landing on a 4.



The spinner has a _____% chance of landing on a D.



The spinner has a _____% chance of landing on a C.

Answers

1. 30
2. 40
3. 42.9
4. 37.5
5. 10
6. 14.3
7. 40
8. 28.6
9. 25
10. 10
11. 14.3
12. 30