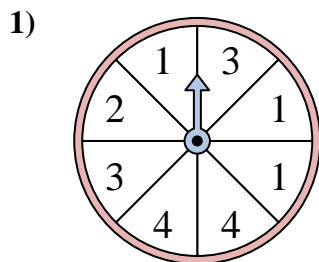
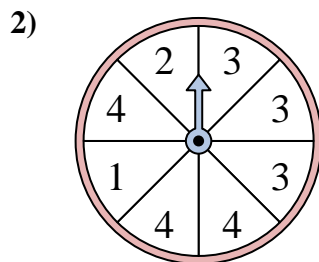




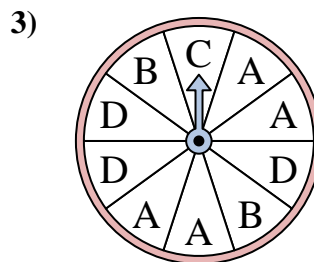
Solve each problem. Round your answer to the nearest tenth.



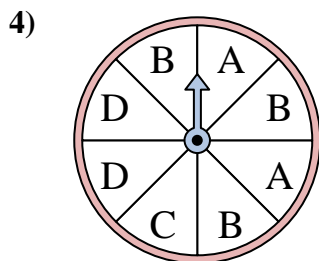
The spinner has a \_\_\_\_\_% chance of landing on a 3.



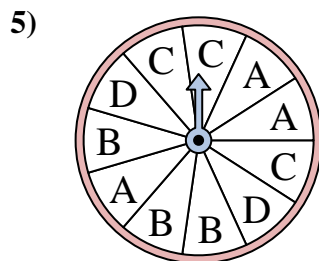
The spinner has a \_\_\_\_\_% chance of landing on a 3.



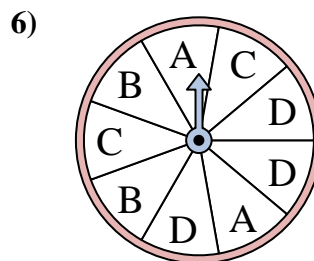
The spinner has a \_\_\_\_\_% chance of landing on a B.



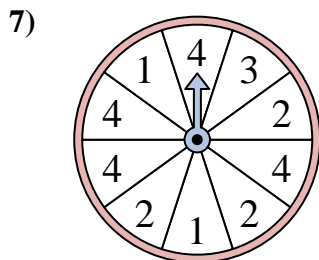
The spinner has a \_\_\_\_\_% chance of landing on a C.



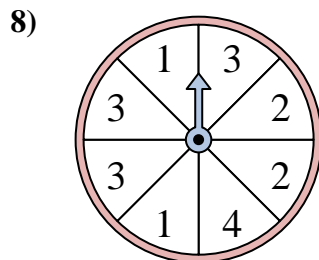
The spinner has a \_\_\_\_\_% chance of landing on a D.



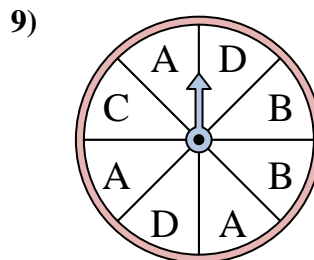
The spinner has a \_\_\_\_\_% chance of landing on a C.



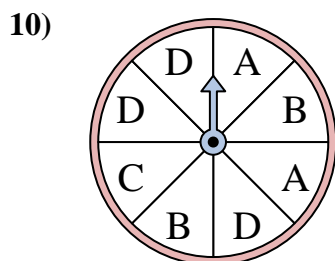
The spinner has a \_\_\_\_\_% chance of landing on a 1.



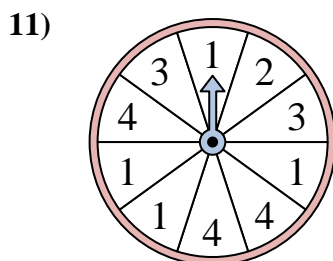
The spinner has a \_\_\_\_\_% chance of landing on a 3.



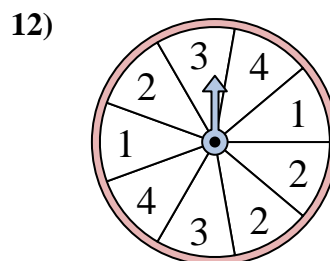
The spinner has a \_\_\_\_\_% chance of landing on a B.



The spinner has a \_\_\_\_\_% chance of landing on a B.



The spinner has a \_\_\_\_\_% chance of landing on a 3.



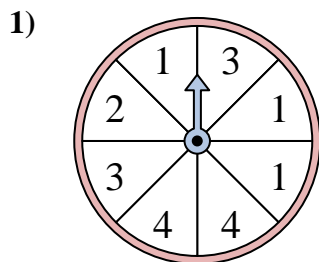
The spinner has a \_\_\_\_\_% chance of landing on a 1.

**Answers**

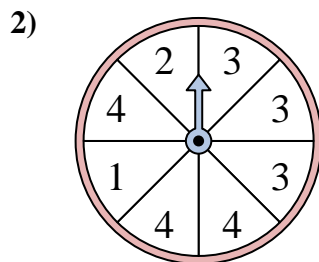
1. \_\_\_\_\_
2. \_\_\_\_\_
3. \_\_\_\_\_
4. \_\_\_\_\_
5. \_\_\_\_\_
6. \_\_\_\_\_
7. \_\_\_\_\_
8. \_\_\_\_\_
9. \_\_\_\_\_
10. \_\_\_\_\_
11. \_\_\_\_\_
12. \_\_\_\_\_



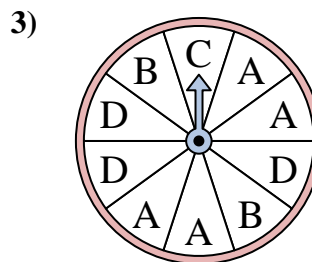
Solve each problem. Round your answer to the nearest tenth.



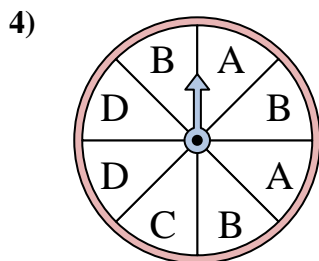
The spinner has a \_\_\_\_\_% chance of landing on a 3.



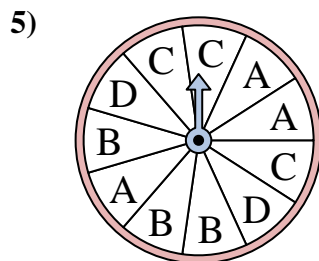
The spinner has a \_\_\_\_\_% chance of landing on a 3.



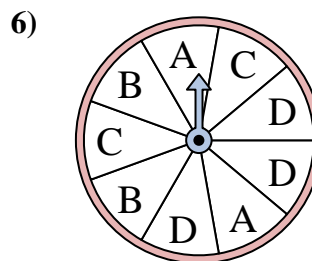
The spinner has a \_\_\_\_\_% chance of landing on a B.



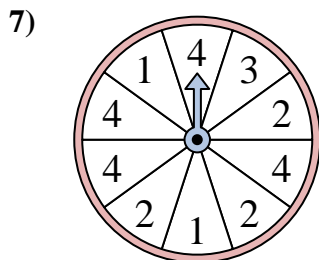
The spinner has a \_\_\_\_\_% chance of landing on a C.



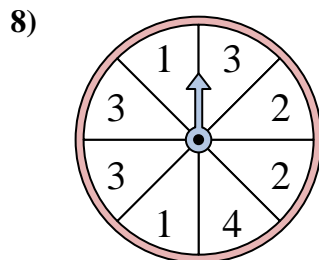
The spinner has a \_\_\_\_\_% chance of landing on a D.



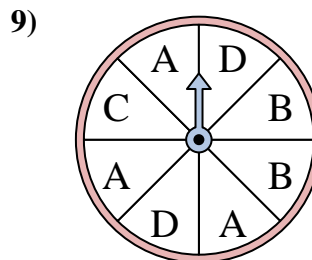
The spinner has a \_\_\_\_\_% chance of landing on a C.



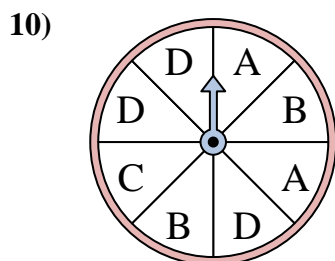
The spinner has a \_\_\_\_\_% chance of landing on a 1.



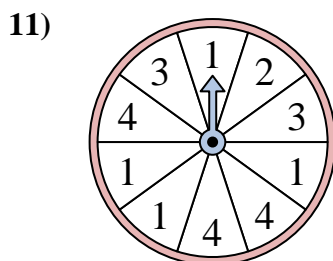
The spinner has a \_\_\_\_\_% chance of landing on a 3.



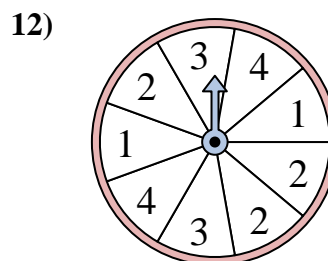
The spinner has a \_\_\_\_\_% chance of landing on a B.



The spinner has a \_\_\_\_\_% chance of landing on a B.



The spinner has a \_\_\_\_\_% chance of landing on a 3.



The spinner has a \_\_\_\_\_% chance of landing on a 1.

Answers

1. 25
2. 37.5
3. 20
4. 12.5
5. 18.2
6. 22.2
7. 20
8. 37.5
9. 25
10. 25
11. 20
12. 22.2