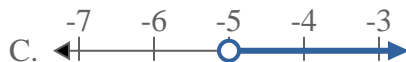


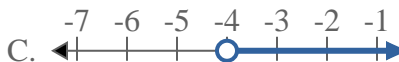
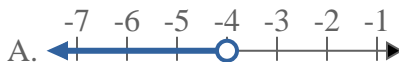


Solve each problem.

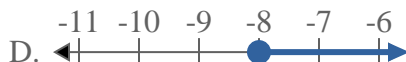
1) Which option best shows  $X < -5$



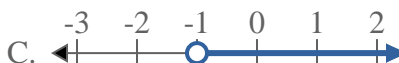
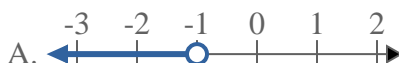
2) Which option best shows  $X < -4$



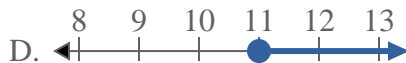
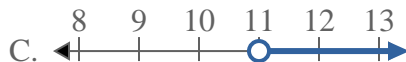
3) Which option best shows  $X < -8$



4) Which option best shows  $X < -1$



5) Which option best shows  $X \geq 11$



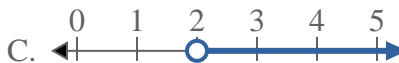
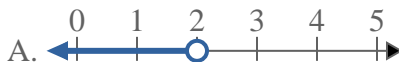
6) Which option best shows  $X \geq 5$



7) Which option best shows  $X \geq 13$



8) Which option best shows  $X < 2$



**Answers**

1. \_\_\_\_\_

2. \_\_\_\_\_

3. \_\_\_\_\_

4. \_\_\_\_\_

5. \_\_\_\_\_

6. \_\_\_\_\_

7. \_\_\_\_\_

8. \_\_\_\_\_

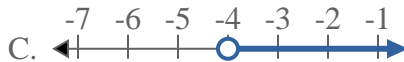


Solve each problem.

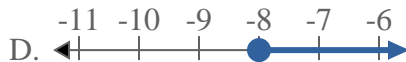
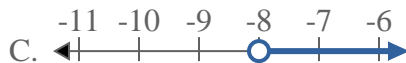
1) Which option best shows  $X < -5$



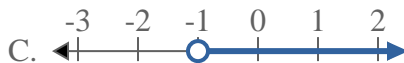
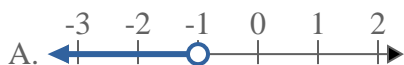
2) Which option best shows  $X < -4$



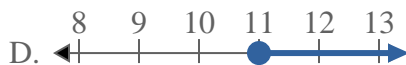
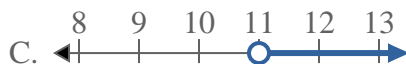
3) Which option best shows  $X < -8$



4) Which option best shows  $X < -1$



5) Which option best shows  $X \geq 11$



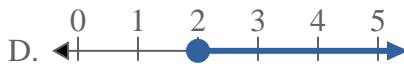
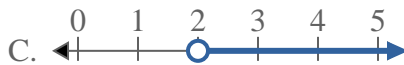
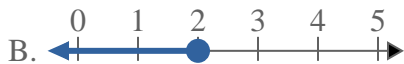
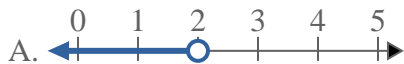
6) Which option best shows  $X \geq 5$



7) Which option best shows  $X \geq 13$



8) Which option best shows  $X < 2$



**Answers**

1.   **A**  

2.   **A**  

3.   **A**  

4.   **A**  

5.   **D**  

6.   **D**  

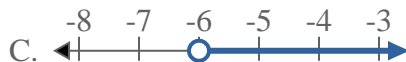
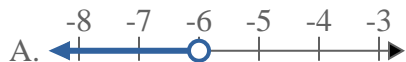
7.   **D**  

8.   **A**

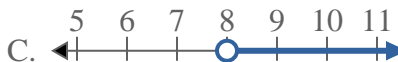


Solve each problem.

1) Which option best shows  $X < -6$



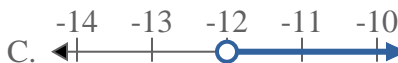
2) Which option best shows  $X < 8$



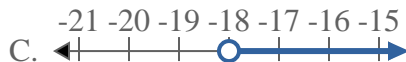
3) Which option best shows  $X \leq 5$



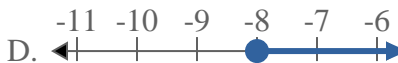
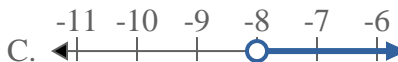
4) Which option best shows  $X \geq -12$



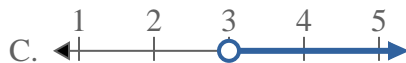
5) Which option best shows  $X \geq -18$



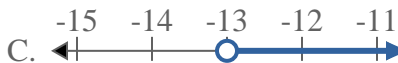
6) Which option best shows  $X \geq -8$



7) Which option best shows  $X < 3$



8) Which option best shows  $X < -13$



**Answers**

1. \_\_\_\_\_

2. \_\_\_\_\_

3. \_\_\_\_\_

4. \_\_\_\_\_

5. \_\_\_\_\_

6. \_\_\_\_\_

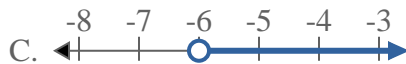
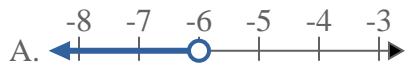
7. \_\_\_\_\_

8. \_\_\_\_\_

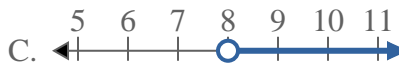


Solve each problem.

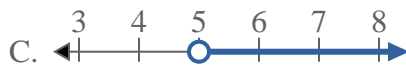
1) Which option best shows  $X < -6$



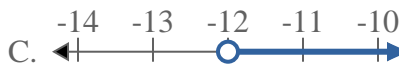
2) Which option best shows  $X < 8$



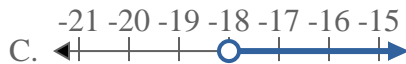
3) Which option best shows  $X \leq 5$



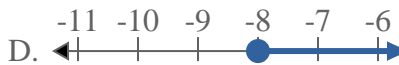
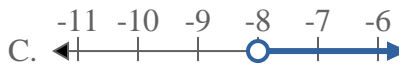
4) Which option best shows  $X \geq -12$



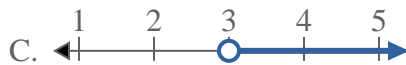
5) Which option best shows  $X \geq -18$



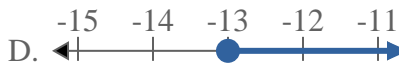
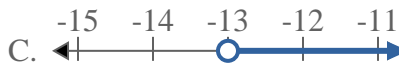
6) Which option best shows  $X \geq -8$



7) Which option best shows  $X < 3$



8) Which option best shows  $X < -13$



**Answers**

1.     **A**    

2.     **A**    

3.     **B**    

4.     **D**    

5.     **D**    

6.     **D**    

7.     **A**    

8.     **A**



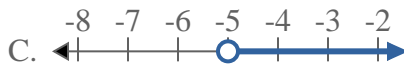
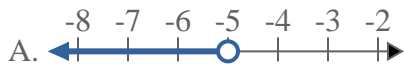
Solve each problem.

**Answers**

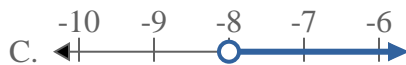
1) Which option best shows  $X < 20$



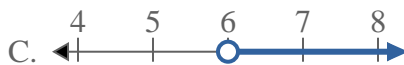
2) Which option best shows  $X \geq -5$



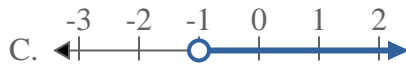
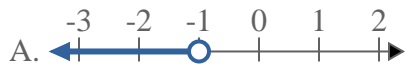
3) Which option best shows  $X \leq -8$



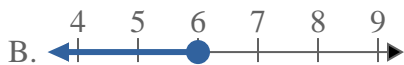
4) Which option best shows  $X \geq 6$



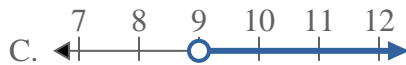
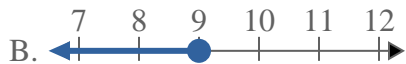
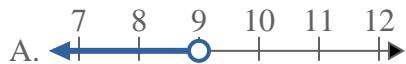
5) Which option best shows  $X > -1$



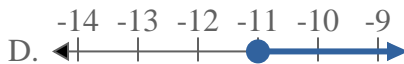
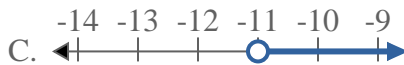
6) Which option best shows  $X \leq 6$



7) Which option best shows  $X < 9$



8) Which option best shows  $X \leq -11$



1. \_\_\_\_\_
2. \_\_\_\_\_
3. \_\_\_\_\_
4. \_\_\_\_\_
5. \_\_\_\_\_
6. \_\_\_\_\_
7. \_\_\_\_\_
8. \_\_\_\_\_

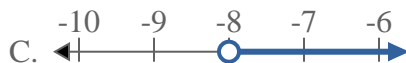


Solve each problem.

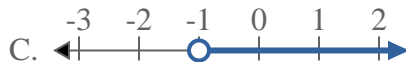
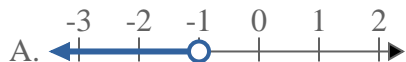
1) Which option best shows  $X < 20$



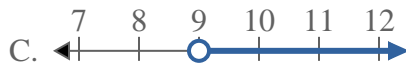
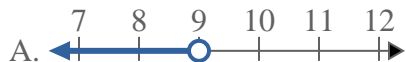
3) Which option best shows  $X \leq -8$



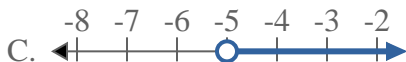
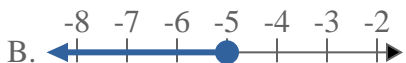
5) Which option best shows  $X > -1$



7) Which option best shows  $X < 9$



2) Which option best shows  $X \geq -5$



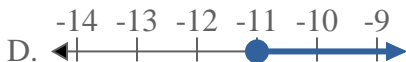
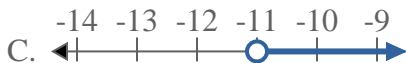
4) Which option best shows  $X \geq 6$



6) Which option best shows  $X \leq 6$



8) Which option best shows  $X \leq -11$



**Answers**

1.   **A**  

2.   **D**  

3.   **B**  

4.   **D**  

5.   **C**  

6.   **B**  

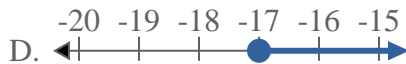
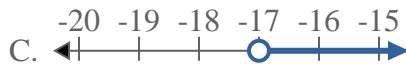
7.   **A**  

8.   **B**



Solve each problem.

1) Which option best shows  $X < -17$



2) Which option best shows  $X \leq 20$



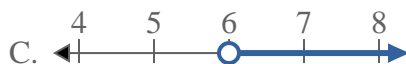
3) Which option best shows  $X \geq 12$



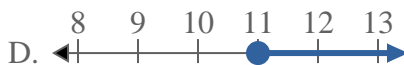
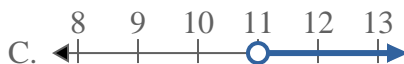
4) Which option best shows  $X \geq -17$



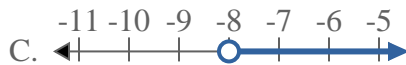
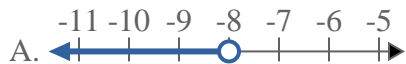
5) Which option best shows  $X \geq 6$



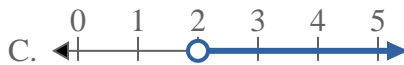
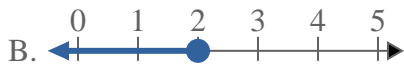
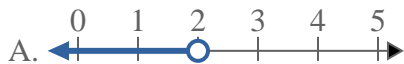
6) Which option best shows  $X \leq 11$



7) Which option best shows  $X \leq -8$



8) Which option best shows  $X > 2$



**Answers**

1. \_\_\_\_\_

2. \_\_\_\_\_

3. \_\_\_\_\_

4. \_\_\_\_\_

5. \_\_\_\_\_

6. \_\_\_\_\_

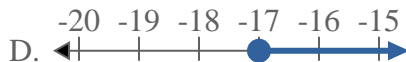
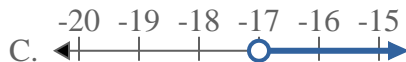
7. \_\_\_\_\_

8. \_\_\_\_\_




Solve each problem.


1) Which option best shows  $X < -17$



2) Which option best shows  $X \leq 20$



3) Which option best shows  $X \geq 12$



4) Which option best shows  $X \geq -17$



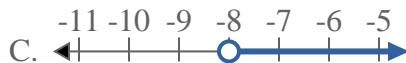
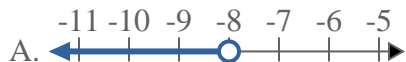
5) Which option best shows  $X \geq 6$



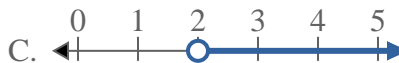
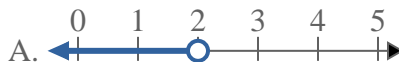
6) Which option best shows  $X \leq 11$



7) Which option best shows  $X \leq -8$



8) Which option best shows  $X > 2$



**Answers**

1. **A**

2. **B**

3. **D**

4. **D**

5. **D**

6. **B**

7. **B**

8. **C**

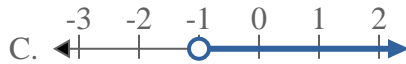
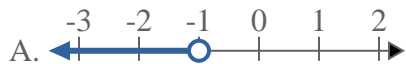




Solve each problem.

**Answers**

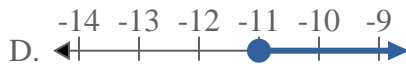
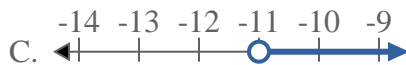
1) Which option best shows  $X > -1$



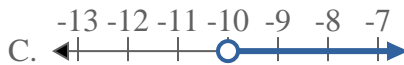
2) Which option best shows  $X < -14$



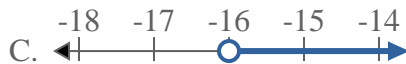
3) Which option best shows  $X \leq -11$



4) Which option best shows  $X < -10$



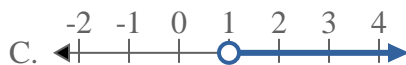
5) Which option best shows  $X \leq -16$



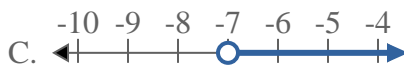
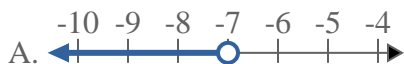
6) Which option best shows  $X > 17$



7) Which option best shows  $X > 1$



8) Which option best shows  $X > -7$

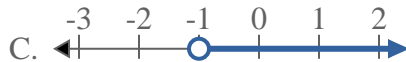
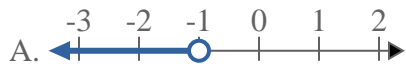


1. \_\_\_\_\_
2. \_\_\_\_\_
3. \_\_\_\_\_
4. \_\_\_\_\_
5. \_\_\_\_\_
6. \_\_\_\_\_
7. \_\_\_\_\_
8. \_\_\_\_\_



Solve each problem.

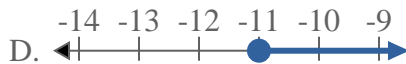
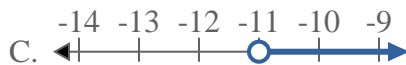
1) Which option best shows  $X > -1$



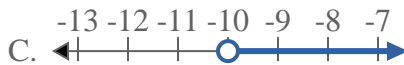
2) Which option best shows  $X < -14$



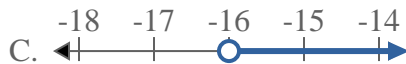
3) Which option best shows  $X \leq -11$



4) Which option best shows  $X < -10$



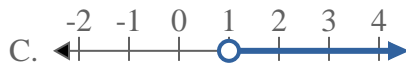
5) Which option best shows  $X \leq -16$



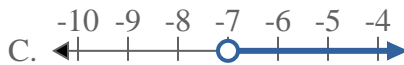
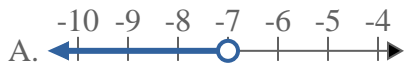
6) Which option best shows  $X > 17$



7) Which option best shows  $X > 1$



8) Which option best shows  $X > -7$



**Answers**

1.     **C**    

2.     **A**    

3.     **B**    

4.     **A**    

5.     **B**    

6.     **C**    

7.     **C**    

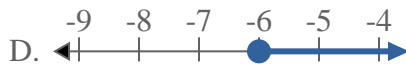
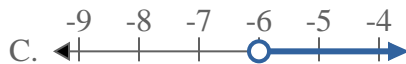
8.     **C**



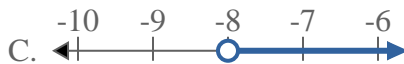
Solve each problem.

**Answers**

1) Which option best shows  $X \leq -6$



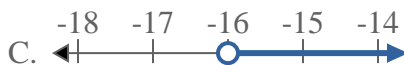
2) Which option best shows  $X > -8$



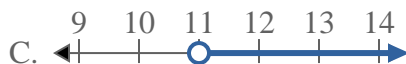
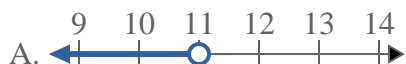
3) Which option best shows  $X < 13$



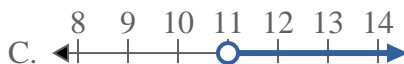
4) Which option best shows  $X < -16$



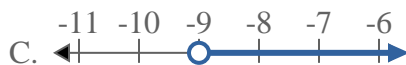
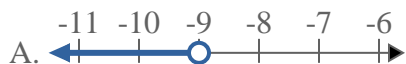
5) Which option best shows  $X \leq 11$



6) Which option best shows  $X \geq 11$



7) Which option best shows  $X > -9$



8) Which option best shows  $X \geq -5$

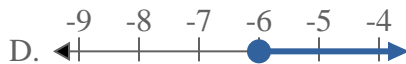
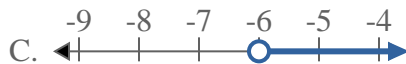


1. \_\_\_\_\_
2. \_\_\_\_\_
3. \_\_\_\_\_
4. \_\_\_\_\_
5. \_\_\_\_\_
6. \_\_\_\_\_
7. \_\_\_\_\_
8. \_\_\_\_\_

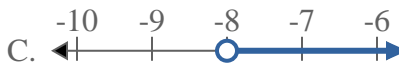


Solve each problem.

1) Which option best shows  $X \leq -6$



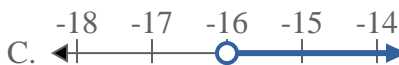
2) Which option best shows  $X > -8$



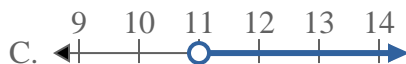
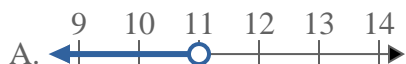
3) Which option best shows  $X < 13$



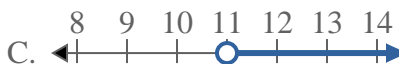
4) Which option best shows  $X < -16$



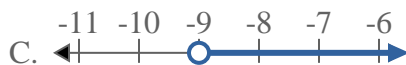
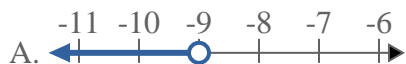
5) Which option best shows  $X \leq 11$



6) Which option best shows  $X \geq 11$



7) Which option best shows  $X > -9$



8) Which option best shows  $X \geq -5$



**Answers**

1. **B**

2. **C**

3. **A**

4. **A**

5. **B**

6. **D**

7. **C**

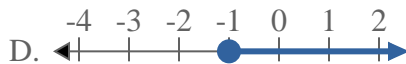
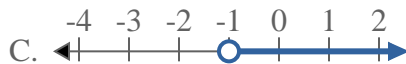
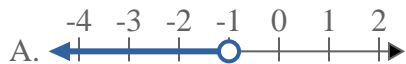
8. **D**



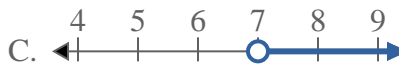
Solve each problem.

**Answers**


1) Which option best shows  $X \geq -1$



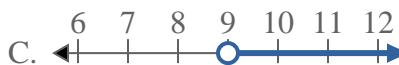
2) Which option best shows  $X \leq 7$



3) Which option best shows  $X > 14$



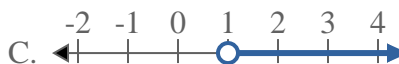
4) Which option best shows  $X > 9$



5) Which option best shows  $X < -14$



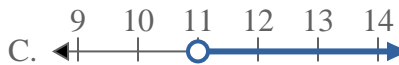
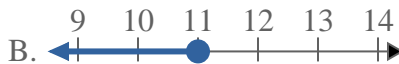
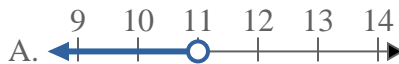
6) Which option best shows  $X \geq 1$



7) Which option best shows  $X \leq 16$



8) Which option best shows  $X \leq 11$

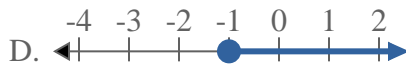
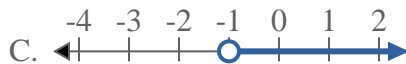
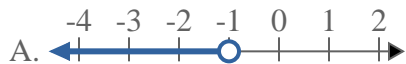


1. \_\_\_\_\_
2. \_\_\_\_\_
3. \_\_\_\_\_
4. \_\_\_\_\_
5. \_\_\_\_\_
6. \_\_\_\_\_
7. \_\_\_\_\_
8. \_\_\_\_\_

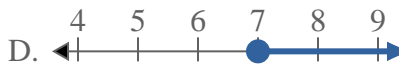


Solve each problem.

1) Which option best shows  $X \geq -1$



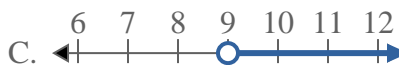
2) Which option best shows  $X \leq 7$



3) Which option best shows  $X > 14$



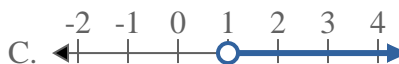
4) Which option best shows  $X > 9$



5) Which option best shows  $X < -14$



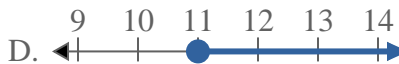
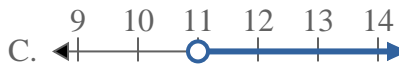
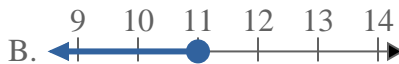
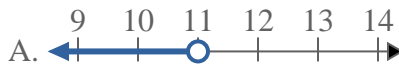
6) Which option best shows  $X \geq 1$



7) Which option best shows  $X \leq 16$



8) Which option best shows  $X \leq 11$



**Answers**

1.     **D**    

2.     **B**    

3.     **C**    

4.     **C**    

5.     **A**    

6.     **D**    

7.     **B**    

8.     **B**



Solve each problem.

1) Which option best shows  $X > -5$



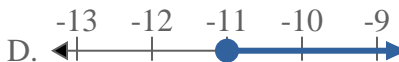
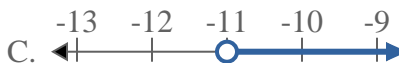
2) Which option best shows  $X \geq 12$



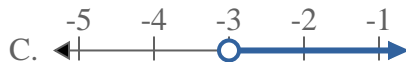
3) Which option best shows  $X \leq 20$



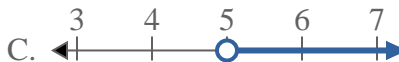
4) Which option best shows  $X \geq -11$



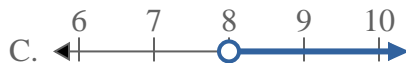
5) Which option best shows  $X > -3$



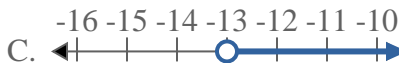
6) Which option best shows  $X > 5$



7) Which option best shows  $X \leq 8$



8) Which option best shows  $X \leq -13$



**Answers**

1. \_\_\_\_\_
2. \_\_\_\_\_
3. \_\_\_\_\_
4. \_\_\_\_\_
5. \_\_\_\_\_
6. \_\_\_\_\_
7. \_\_\_\_\_
8. \_\_\_\_\_



Solve each problem.

1) Which option best shows  $X > -5$



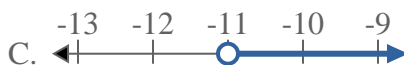
2) Which option best shows  $X \geq 12$



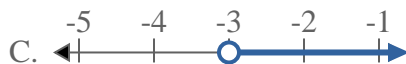
3) Which option best shows  $X \leq 20$



4) Which option best shows  $X \geq -11$



5) Which option best shows  $X > -3$



6) Which option best shows  $X > 5$



7) Which option best shows  $X \leq 8$



8) Which option best shows  $X \leq -13$



**Answers**

1. **C**

2. **D**

3. **B**

4. **D**

5. **C**

6. **C**

7. **B**

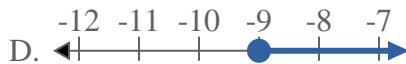
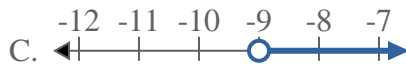
8. **B**



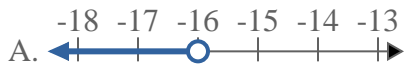


Solve each problem.

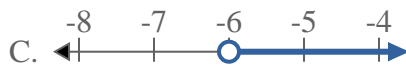
1) Which option best shows  $X < -9$



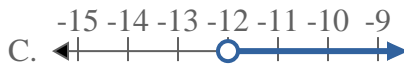
2) Which option best shows  $X \leq -16$



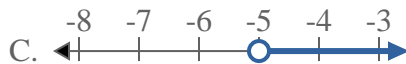
3) Which option best shows  $X \geq -6$



4) Which option best shows  $X > -12$



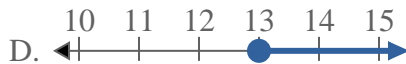
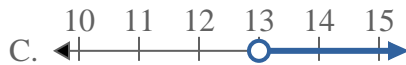
5) Which option best shows  $X \leq -5$



6) Which option best shows  $X < -10$



7) Which option best shows  $X > 13$



8) Which option best shows  $X < 11$



**Answers**

1. \_\_\_\_\_

2. \_\_\_\_\_

3. \_\_\_\_\_

4. \_\_\_\_\_

5. \_\_\_\_\_

6. \_\_\_\_\_

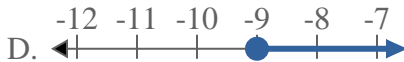
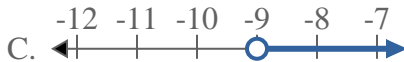
7. \_\_\_\_\_

8. \_\_\_\_\_

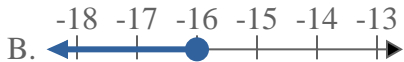
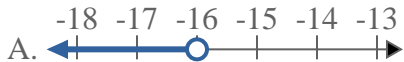


Solve each problem.

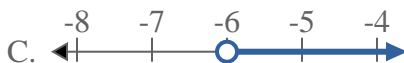
1) Which option best shows  $X < -9$



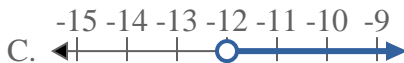
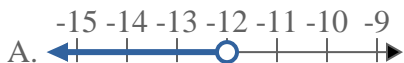
2) Which option best shows  $X \leq -16$



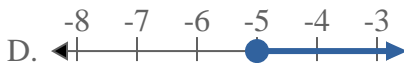
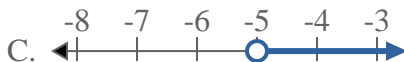
3) Which option best shows  $X \geq -6$



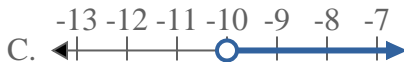
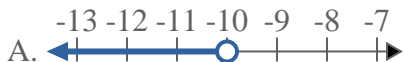
4) Which option best shows  $X > -12$



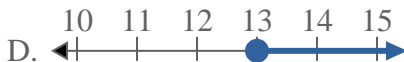
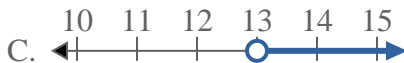
5) Which option best shows  $X \leq -5$



6) Which option best shows  $X < -10$



7) Which option best shows  $X > 13$



8) Which option best shows  $X < 11$



**Answers**

1.   **A**  

2.   **B**  

3.   **D**  

4.   **C**  

5.   **B**  

6.   **A**  

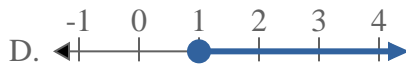
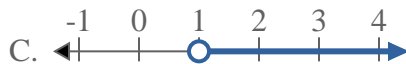
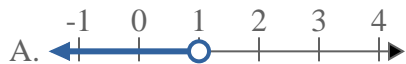
7.   **C**  

8.   **A**

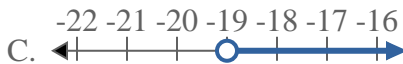


Solve each problem.

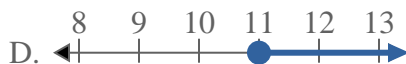
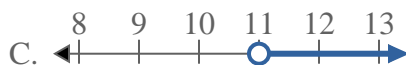
1) Which option best shows  $X \leq 1$



2) Which option best shows  $X < -19$



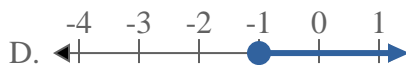
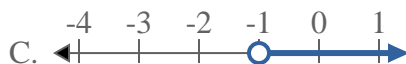
3) Which option best shows  $X \geq 11$



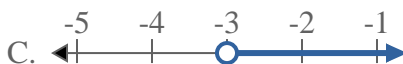
4) Which option best shows  $X \geq -4$



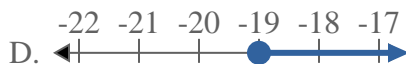
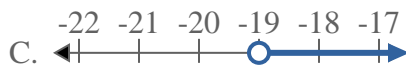
5) Which option best shows  $X \geq -1$



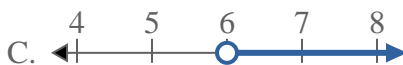
6) Which option best shows  $X \leq -3$



7) Which option best shows  $X > -19$



8) Which option best shows  $X > 6$



**Answers**

1. \_\_\_\_\_

2. \_\_\_\_\_

3. \_\_\_\_\_

4. \_\_\_\_\_

5. \_\_\_\_\_

6. \_\_\_\_\_

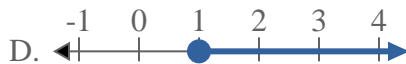
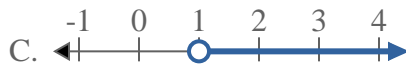
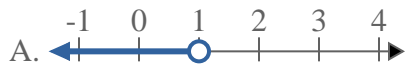
7. \_\_\_\_\_

8. \_\_\_\_\_

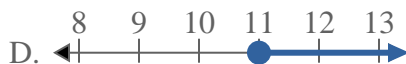
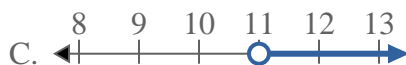


Solve each problem.

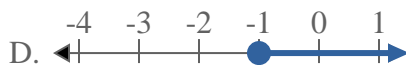
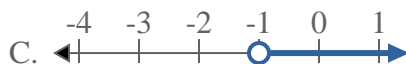
1) Which option best shows  $X \leq 1$



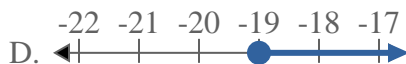
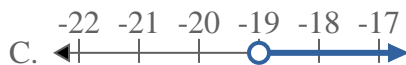
3) Which option best shows  $X \geq 11$



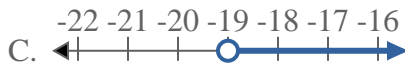
5) Which option best shows  $X \geq -1$



7) Which option best shows  $X > -19$



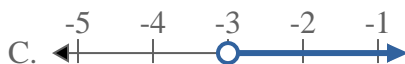
2) Which option best shows  $X < -19$



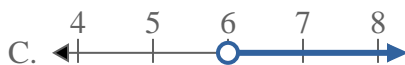
4) Which option best shows  $X \geq -4$



6) Which option best shows  $X \leq -3$



8) Which option best shows  $X > 6$



**Answers**

1. **B**

2. **A**

3. **D**

4. **D**

5. **D**

6. **B**

7. **C**

8. **C**