



Use the numberlines to show each expression and solve.

**Answers****Ex)** Start at -8 and add 18Ex.  $-8 + 18 = 10$ 

1) Start at -6 and add 3



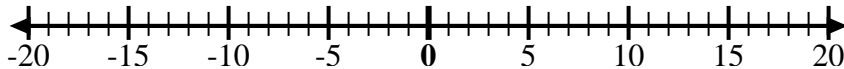
1. \_\_\_\_\_

2) Start at -4 and add -6



2. \_\_\_\_\_

3) Start at -1 and add -8



3. \_\_\_\_\_

4) Start at -4 and add -3



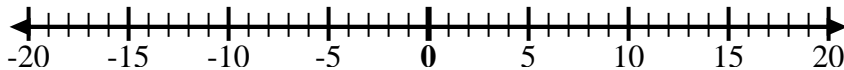
4. \_\_\_\_\_

5) Start at 0 and add -10



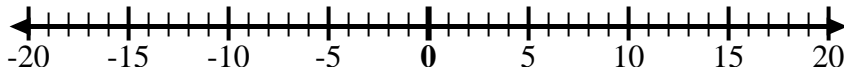
5. \_\_\_\_\_

6) Start at -7 and add 12



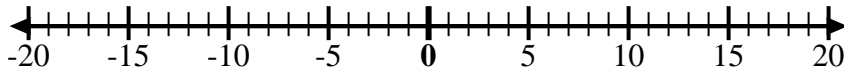
6. \_\_\_\_\_

7) Start at 2 and add -10



7. \_\_\_\_\_

8) Start at -6 and add -2



8. \_\_\_\_\_

9) Start at 1 and add -10



9. \_\_\_\_\_

10) Start at 3 and add -10



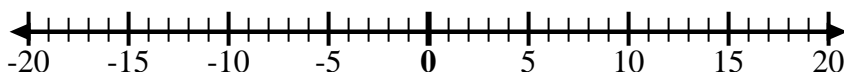
10. \_\_\_\_\_

11) Start at -4 and add -2



11. \_\_\_\_\_

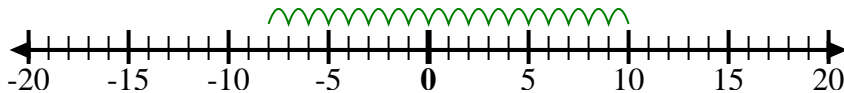
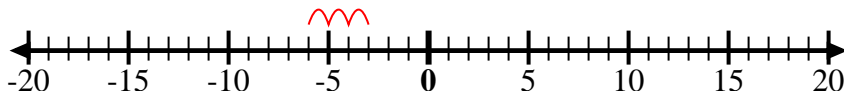
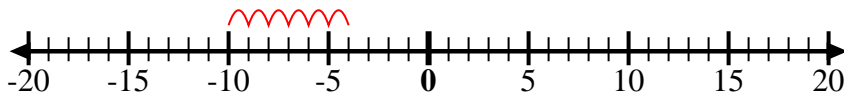
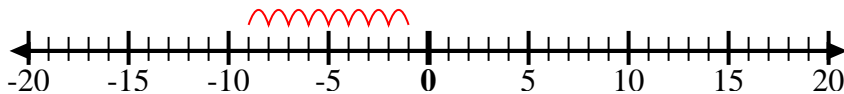
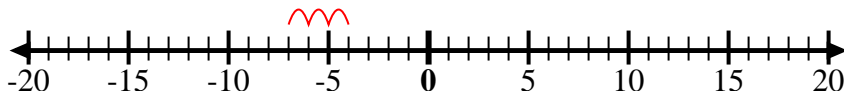
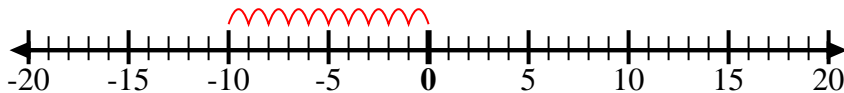
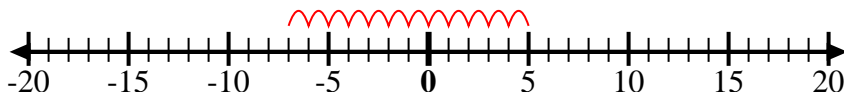
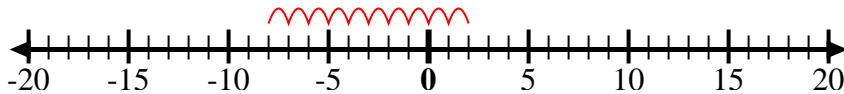
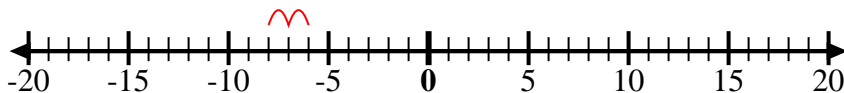
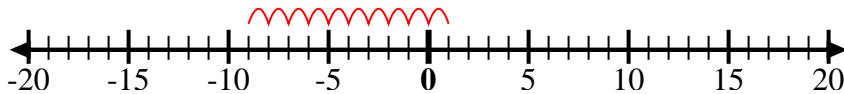
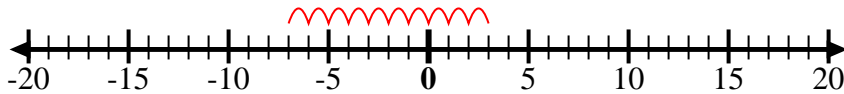
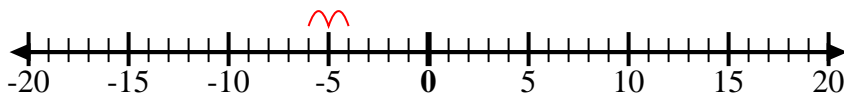
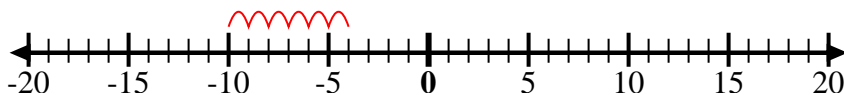
12) Start at -10 and add 6



12. \_\_\_\_\_



Use the numberlines to show each expression and solve.

**Ex)** Start at -8 and add 18**1)** Start at -6 and add 3**2)** Start at -4 and add -6**3)** Start at -1 and add -8**4)** Start at -4 and add -3**5)** Start at 0 and add -10**6)** Start at -7 and add 12**7)** Start at 2 and add -10**8)** Start at -6 and add -2**9)** Start at 1 and add -10**10)** Start at 3 and add -10**11)** Start at -4 and add -2**12)** Start at -10 and add 6**Answers**

Ex.  $-8 + 18 = 10$

1.  $-6 + 3 = -3$

2.  $-4 + -6 = -10$

3.  $-1 + -8 = -9$

4.  $-4 + -3 = -7$

5.  $0 + -10 = -10$

6.  $-7 + 12 = 5$

7.  $2 + -10 = -8$

8.  $-6 + -2 = -8$

9.  $1 + -10 = -9$

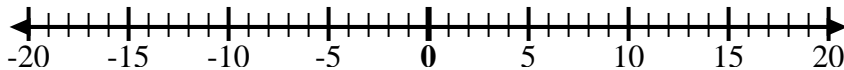
10.  $3 + -10 = -7$

11.  $-4 + -2 = -6$

12.  $-10 + 6 = -4$



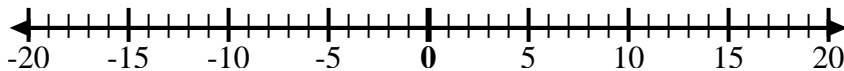
Use the numberlines to show each expression and solve.

**Answers****Ex)** Start at 4 and  
add -8Ex.  $4 + -8 = -4$ **1)** Start at -9 and  
add 5

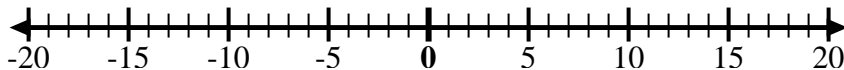
1. \_\_\_\_\_

**2)** Start at -6 and  
add -4

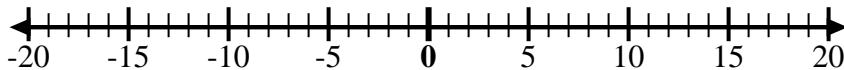
2. \_\_\_\_\_

**3)** Start at -5 and  
add 4

3. \_\_\_\_\_

**4)** Start at -7 and  
add -2

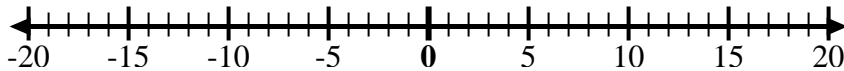
4. \_\_\_\_\_

**5)** Start at 9 and  
add -12

5. \_\_\_\_\_

**6)** Start at 7 and  
add -3

6. \_\_\_\_\_

**7)** Start at 1 and  
add -11

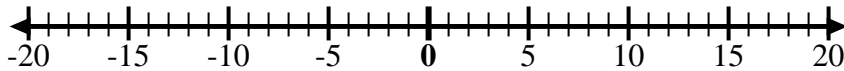
7. \_\_\_\_\_

**8)** Start at -2 and  
add -3

8. \_\_\_\_\_

**9)** Start at -3 and  
add -3

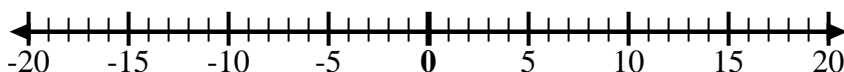
9. \_\_\_\_\_

**10)** Start at -5 and  
add 2

10. \_\_\_\_\_

**11)** Start at -10  
and add 6

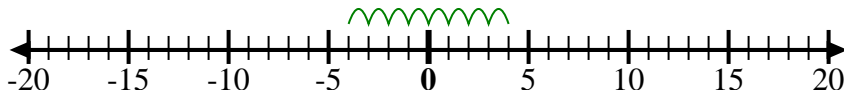
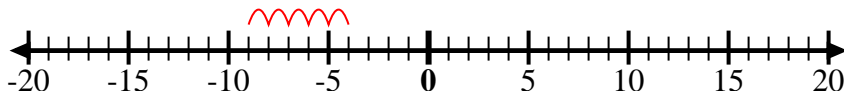
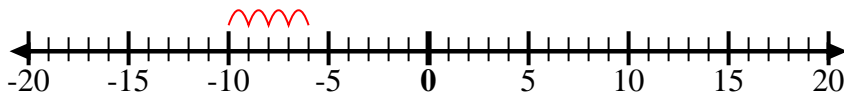
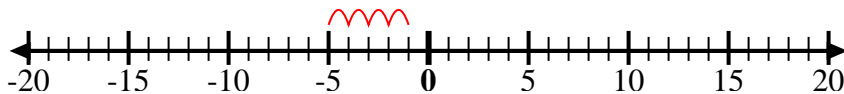
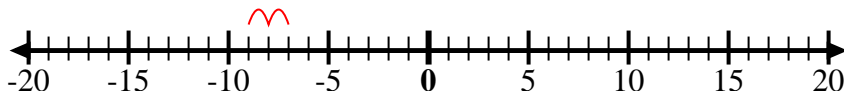
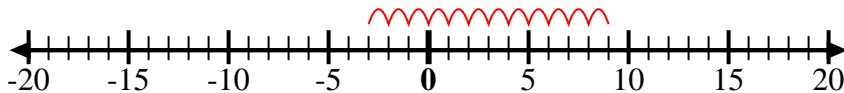
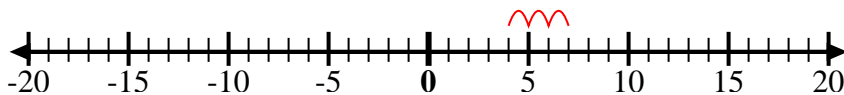
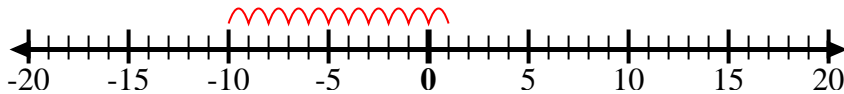
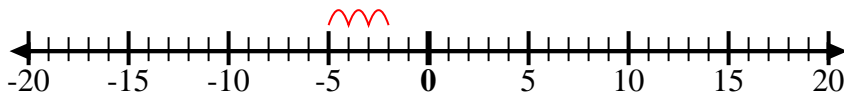
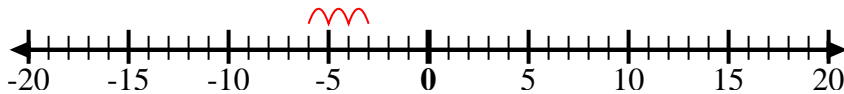
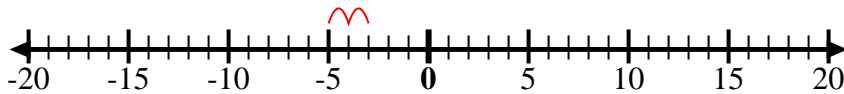
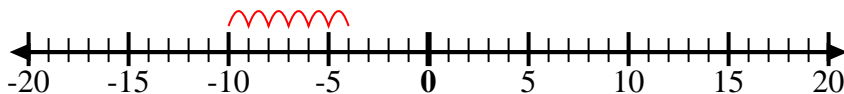
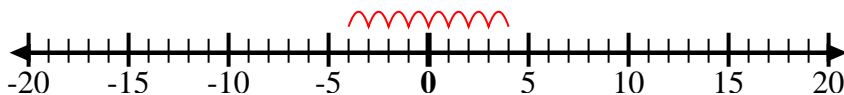
11. \_\_\_\_\_

**12)** Start at -4 and  
add 8

12. \_\_\_\_\_



Use the numberlines to show each expression and solve.

**Ex)** Start at 4 and  
add -8**1)** Start at -9 and  
add 5**2)** Start at -6 and  
add -4**3)** Start at -5 and  
add 4**4)** Start at -7 and  
add -2**5)** Start at 9 and  
add -12**6)** Start at 7 and  
add -3**7)** Start at 1 and  
add -11**8)** Start at -2 and  
add -3**9)** Start at -3 and  
add -3**10)** Start at -5 and  
add 2**11)** Start at -10  
and add 6**12)** Start at -4 and  
add 8**Answers**

Ex.  $4 + -8 = -4$

1.  $-9 + 5 = -4$

2.  $-6 + -4 = -10$

3.  $-5 + 4 = -1$

4.  $-7 + -2 = -9$

5.  $9 + -12 = -3$

6.  $7 + -3 = 4$

7.  $1 + -11 = -10$

8.  $-2 + -3 = -5$

9.  $-3 + -3 = -6$

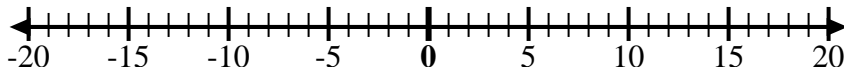
10.  $-5 + 2 = -3$

11.  $-10 + 6 = -4$

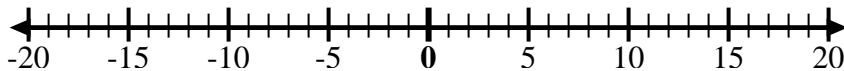
12.  $-4 + 8 = 4$



Use the numberlines to show each expression and solve.

**Answers****Ex)** Start at -4 and add 8Ex.  $-4 + 8 = 4$ 

1) Start at -3 and add 10



1. \_\_\_\_\_

2) Start at 2 and add -12



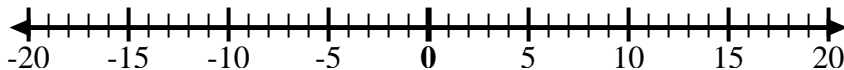
2. \_\_\_\_\_

3) Start at -5 and add 3



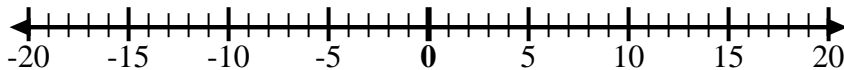
3. \_\_\_\_\_

4) Start at -7 and add 5



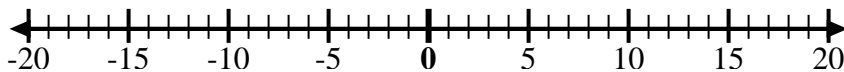
4. \_\_\_\_\_

5) Start at -3 and add -3



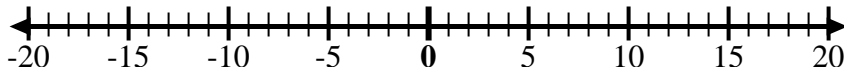
5. \_\_\_\_\_

6) Start at -1 and add -9



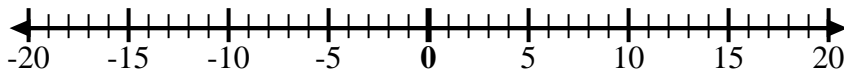
6. \_\_\_\_\_

7) Start at 1 and add -10



7. \_\_\_\_\_

8) Start at -6 and add -2



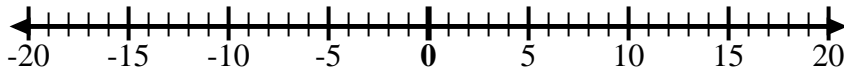
8. \_\_\_\_\_

9) Start at -8 and add 10



9. \_\_\_\_\_

10) Start at 0 and add -10



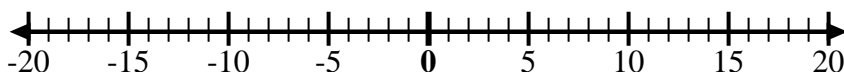
10. \_\_\_\_\_

11) Start at -8 and add -2



11. \_\_\_\_\_

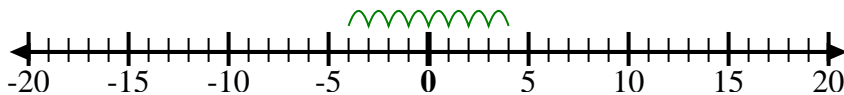
12) Start at 5 and add -13



12. \_\_\_\_\_

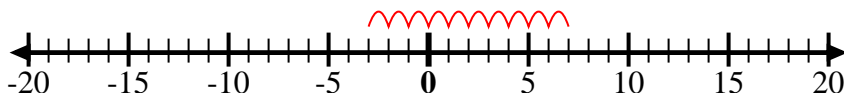


Use the numberlines to show each expression and solve.

**Ex)** Start at -4 and add 8

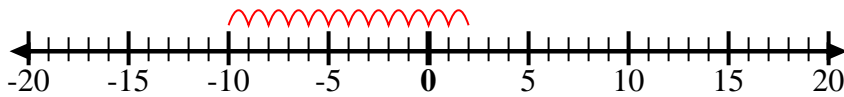
Ex.  $-4 + 8 = 4$

1) Start at -3 and add 10



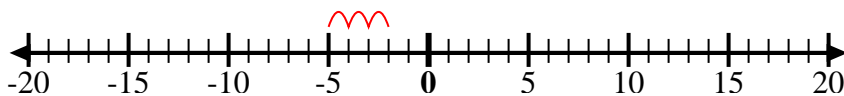
1.  $-3 + 10 = 7$

2) Start at 2 and add -12



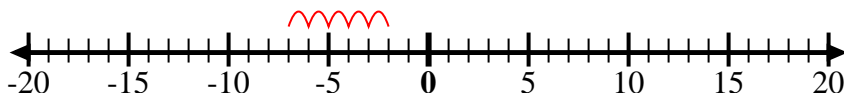
2.  $2 + -12 = -10$

3) Start at -5 and add 3



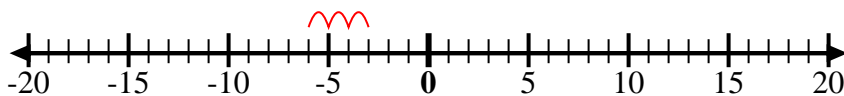
3.  $-5 + 3 = -2$

4) Start at -7 and add 5



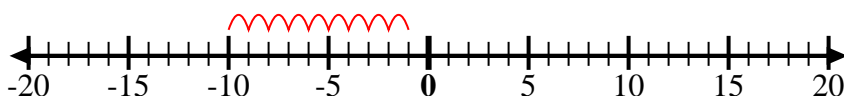
4.  $-7 + 5 = -2$

5) Start at -3 and add -3



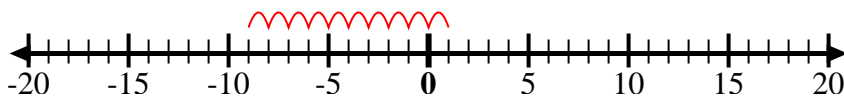
5.  $-3 + -3 = -6$

6) Start at -1 and add -9



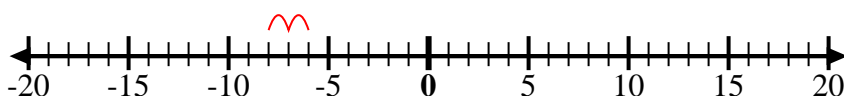
6.  $-1 + -9 = -10$

7) Start at 1 and add -10



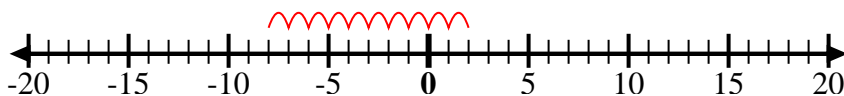
7.  $1 + -10 = -9$

8) Start at -6 and add -2



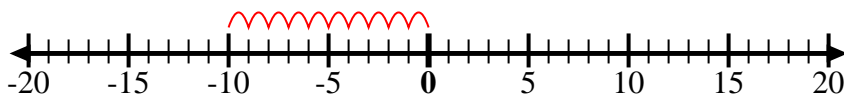
8.  $-6 + -2 = -8$

9) Start at -8 and add 10



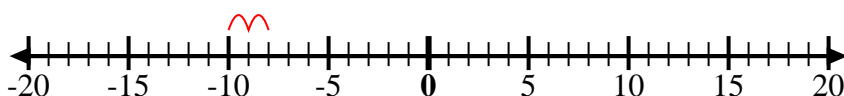
9.  $-8 + 10 = 2$

10) Start at 0 and add -10



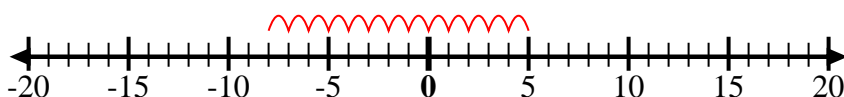
10.  $0 + -10 = -10$

11) Start at -8 and add -2



11.  $-8 + -2 = -10$

12) Start at 5 and add -13

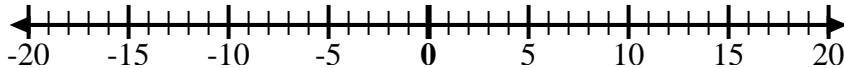


12.  $5 + -13 = -8$

**Answers**



Use the numberlines to show each expression and solve.

**Answers****Ex)** Start at -2 and  
add -8Ex.  $-2 + -8 = -10$ **1)** Start at 8 and  
add -18

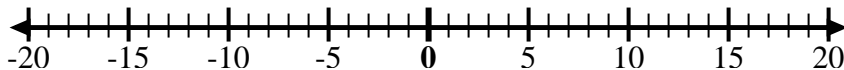
1. \_\_\_\_\_

**2)** Start at 4 and  
add -11

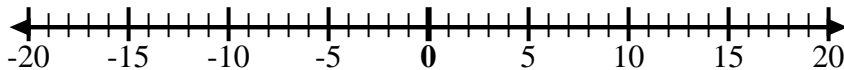
2. \_\_\_\_\_

**3)** Start at -5 and  
add -5

3. \_\_\_\_\_

**4)** Start at -8 and  
add 5

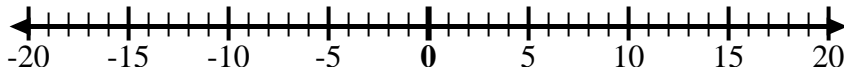
4. \_\_\_\_\_

**5)** Start at -6 and  
add 3

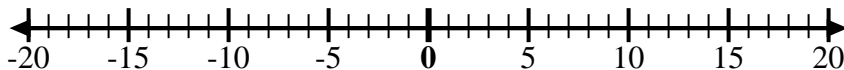
5. \_\_\_\_\_

**6)** Start at -1 and  
add -7

6. \_\_\_\_\_

**7)** Start at -2 and  
add -6

7. \_\_\_\_\_

**8)** Start at -3 and  
add 12

8. \_\_\_\_\_

**9)** Start at -1 and  
add 11

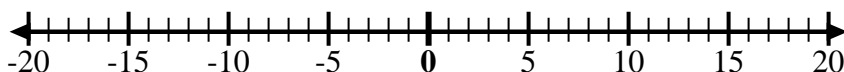
9. \_\_\_\_\_

**10)** Start at 2 and  
add -9

10. \_\_\_\_\_

**11)** Start at -3 and  
add 13

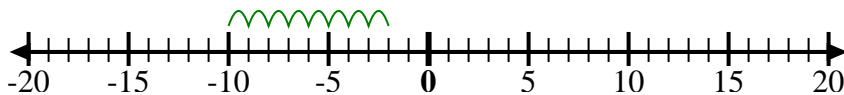
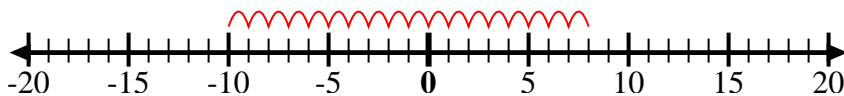
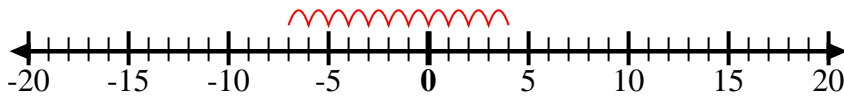
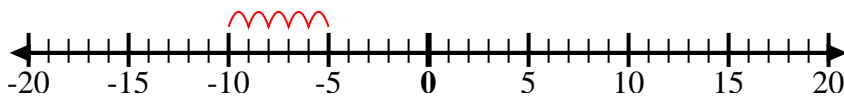
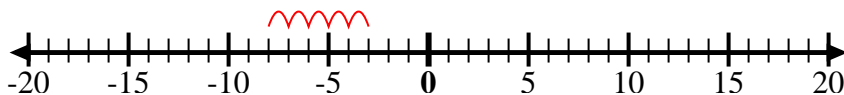
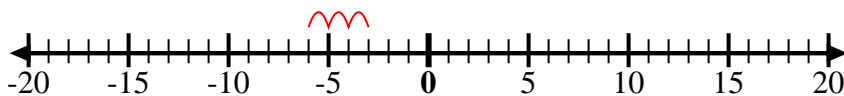
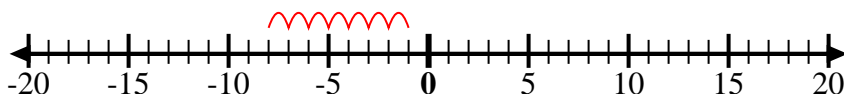
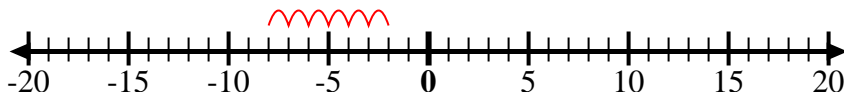
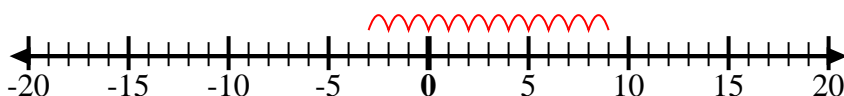
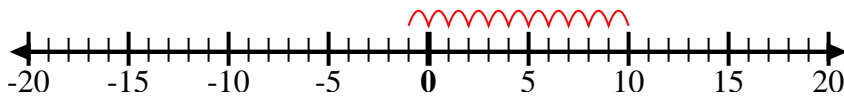
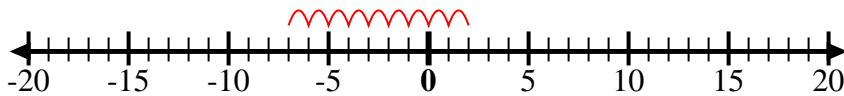
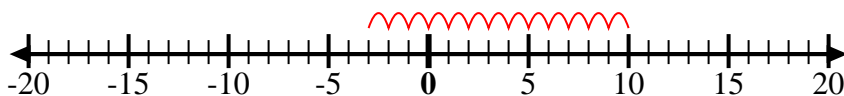
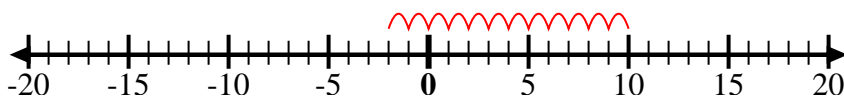
11. \_\_\_\_\_

**12)** Start at 10  
and add -12

12. \_\_\_\_\_



Use the numberlines to show each expression and solve.

**Ex)** Start at -2 and add -8**1)** Start at 8 and add -18**2)** Start at 4 and add -11**3)** Start at -5 and add -5**4)** Start at -8 and add 5**5)** Start at -6 and add 3**6)** Start at -1 and add -7**7)** Start at -2 and add -6**8)** Start at -3 and add 12**9)** Start at -1 and add 11**10)** Start at 2 and add -9**11)** Start at -3 and add 13**12)** Start at 10 and add -12**Answers**

Ex.  $-2 + -8 = -10$

1.  $8 + -18 = -10$

2.  $4 + -11 = -7$

3.  $-5 + -5 = -10$

4.  $-8 + 5 = -3$

5.  $-6 + 3 = -3$

6.  $-1 + -7 = -8$

7.  $-2 + -6 = -8$

8.  $-3 + 12 = 9$

9.  $-1 + 11 = 10$

10.  $2 + -9 = -7$

11.  $-3 + 13 = 10$

12.  $10 + -12 = -2$





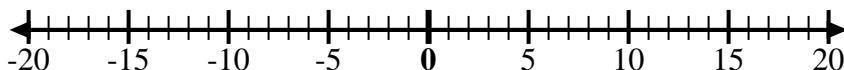
Use the numberlines to show each expression and solve.

Answers**Ex)** Start at 0 and  
add -2Ex.  $0 + -2 = -2$ **1)** Start at 0 and  
add -5

1. \_\_\_\_\_

**2)** Start at 0 and  
add 7

2. \_\_\_\_\_

**3)** Start at -6 and  
add 12

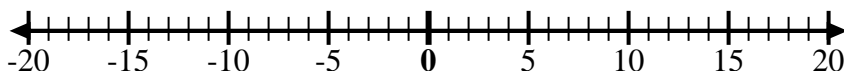
3. \_\_\_\_\_

**4)** Start at -2 and  
add -2

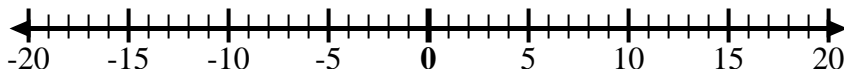
4. \_\_\_\_\_

**5)** Start at 2 and  
add -8

5. \_\_\_\_\_

**6)** Start at 3 and  
add -11

6. \_\_\_\_\_

**7)** Start at -7 and  
add 16

7. \_\_\_\_\_

**8)** Start at -9 and  
add 7

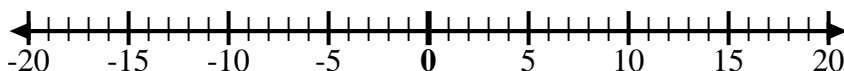
8. \_\_\_\_\_

**9)** Start at -8 and  
add 3

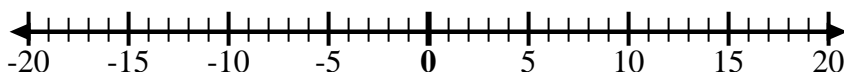
9. \_\_\_\_\_

**10)** Start at 5 and  
add -15

10. \_\_\_\_\_

**11)** Start at -8 and  
add 4

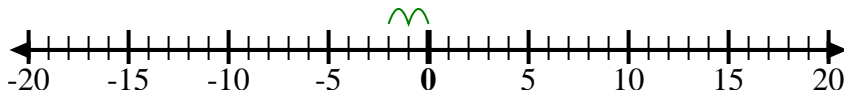
11. \_\_\_\_\_

**12)** Start at 5 and  
add -6

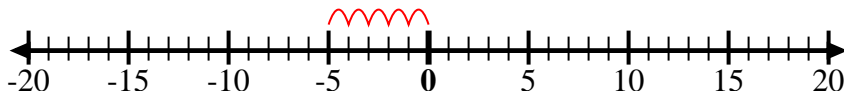
12. \_\_\_\_\_



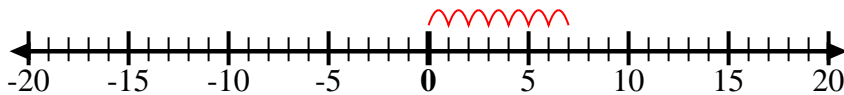
Use the numberlines to show each expression and solve.

**Ex)** Start at 0 and  
add -2

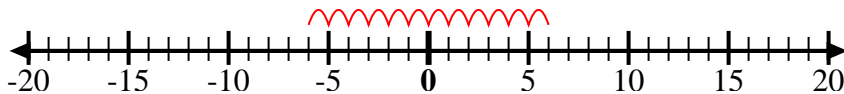
Ex.  $0 + -2 = -2$

**1)** Start at 0 and  
add -5

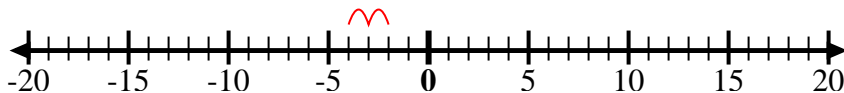
**1.**  $0 + -5 = -5$

**2)** Start at 0 and  
add 7

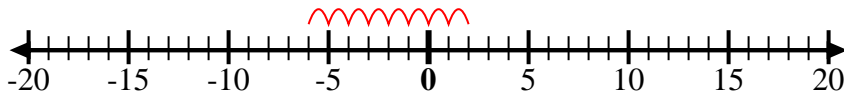
**2.**  $0 + 7 = 7$

**3)** Start at -6 and  
add 12

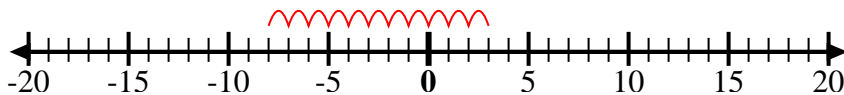
**3.**  $-6 + 12 = 6$

**4)** Start at -2 and  
add -2

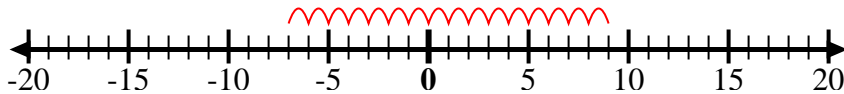
**4.**  $-2 + -2 = -4$

**5)** Start at 2 and  
add -8

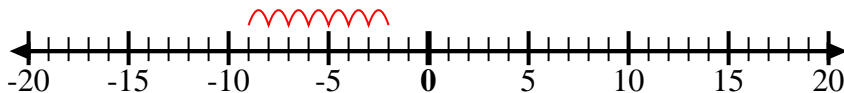
**5.**  $2 + -8 = -6$

**6)** Start at 3 and  
add -11

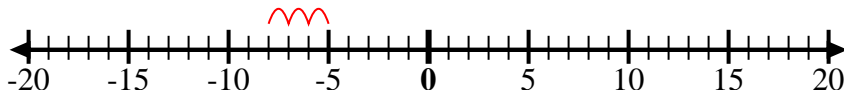
**6.**  $3 + -11 = -8$

**7)** Start at -7 and  
add 16

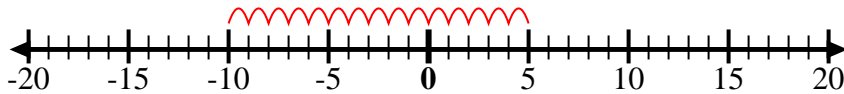
**7.**  $-7 + 16 = 9$

**8)** Start at -9 and  
add 7

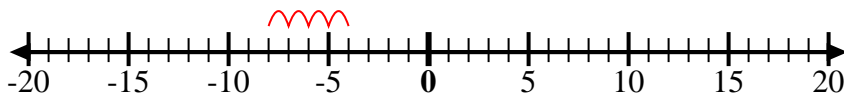
**8.**  $-9 + 7 = -2$

**9)** Start at -8 and  
add 3

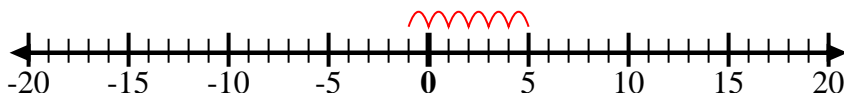
**9.**  $-8 + 3 = -5$

**10)** Start at 5 and  
add -15

**10.**  $5 + -15 = -10$

**11)** Start at -8 and  
add 4

**11.**  $-8 + 4 = -4$

**12)** Start at 5 and  
add -6

**12.**  $5 + -6 = -1$

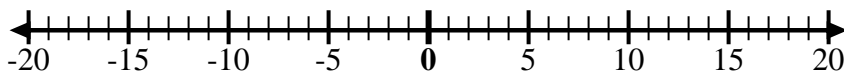
**Answers**



Use the numberlines to show each expression and solve.

Answers**Ex)** Start at -6 and add 15Ex.  $-6 + 15 = 9$ **1)** Start at -3 and add -3

1. \_\_\_\_\_

**2)** Start at 10 and add 0

2. \_\_\_\_\_

**3)** Start at -1 and add 10

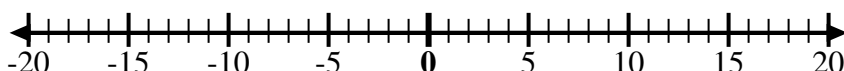
3. \_\_\_\_\_

**4)** Start at 2 and add -11

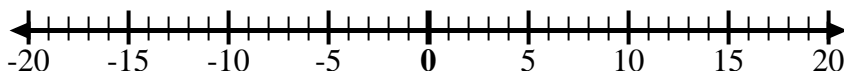
4. \_\_\_\_\_

**5)** Start at 3 and add -12

5. \_\_\_\_\_

**6)** Start at -8 and add 7

6. \_\_\_\_\_

**7)** Start at 0 and add -5

7. \_\_\_\_\_

**8)** Start at -6 and add -2

8. \_\_\_\_\_

**9)** Start at 9 and add -15

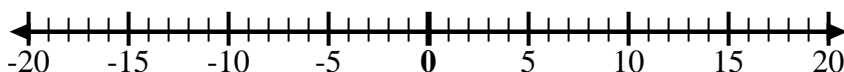
9. \_\_\_\_\_

**10)** Start at 4 and add -9

10. \_\_\_\_\_

**11)** Start at 1 and add -10

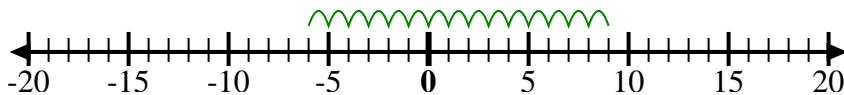
11. \_\_\_\_\_

**12)** Start at -5 and add -3

12. \_\_\_\_\_

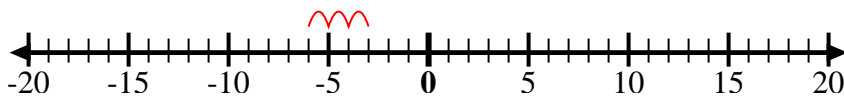


Use the numberlines to show each expression and solve.

**Ex)** Start at -6 and add 15

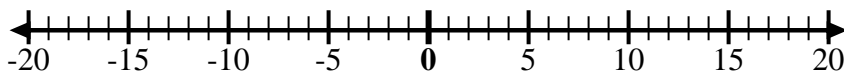
Ex.  $-6 + 15 = 9$

1) Start at -3 and add -3



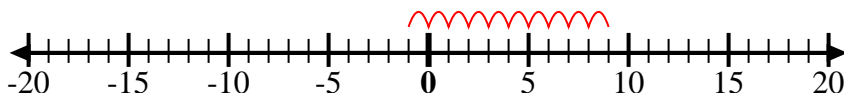
1.  $-3 + -3 = -6$

2) Start at 10 and add 0



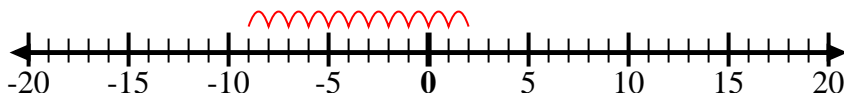
2.  $10 + 0 = 10$

3) Start at -1 and add 10



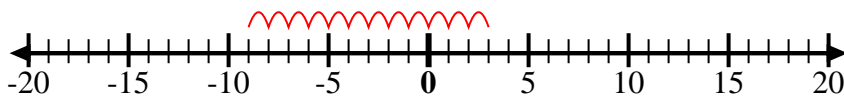
3.  $-1 + 10 = 9$

4) Start at 2 and add -11



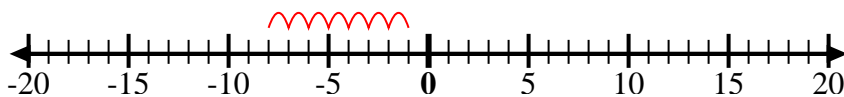
4.  $2 + -11 = -9$

5) Start at 3 and add -12



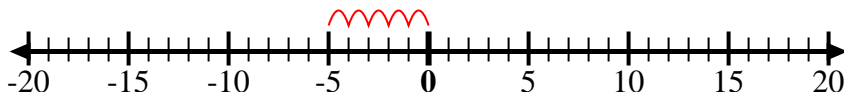
5.  $3 + -12 = -9$

6) Start at -8 and add 7



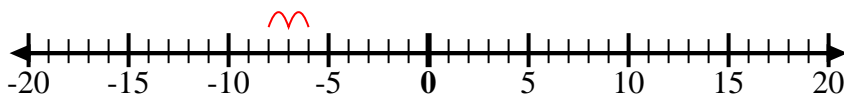
6.  $-8 + 7 = -1$

7) Start at 0 and add -5



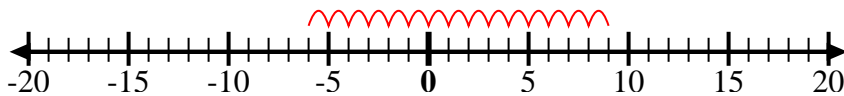
7.  $0 + -5 = -5$

8) Start at -6 and add -2



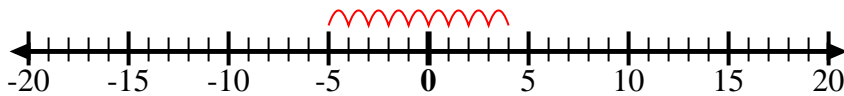
8.  $-6 + -2 = -8$

9) Start at 9 and add -15



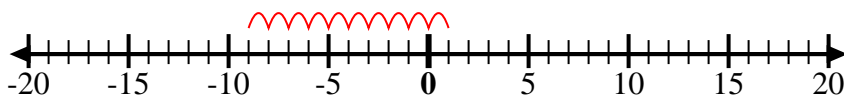
9.  $9 + -15 = -6$

10) Start at 4 and add -9



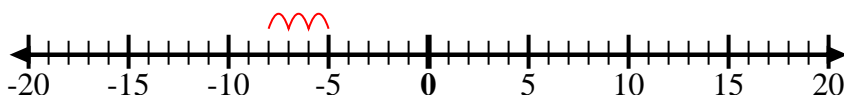
10.  $4 + -9 = -5$

11) Start at 1 and add -10



11.  $1 + -10 = -9$

12) Start at -5 and add -3

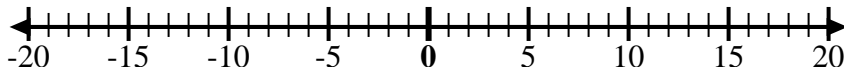


12.  $-5 + -3 = -8$

**Answers**



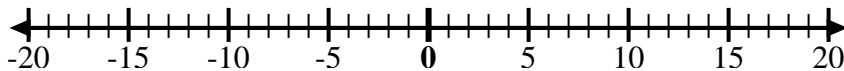
Use the numberlines to show each expression and solve.

**Ex)** Start at 9 and  
add -4Ex.  $9 + -4 = 5$ **1)** Start at 5 and  
add -11

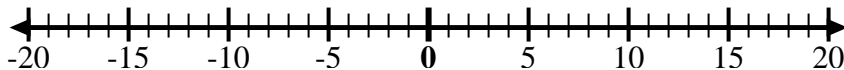
1. \_\_\_\_\_

**2)** Start at 2 and  
add -8

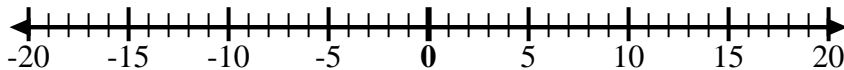
2. \_\_\_\_\_

**3)** Start at -5 and  
add -4

3. \_\_\_\_\_

**4)** Start at 0 and  
add 8

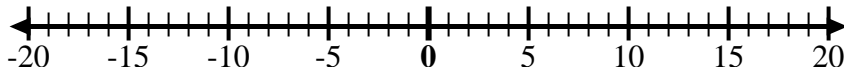
4. \_\_\_\_\_

**5)** Start at 5 and  
add -8

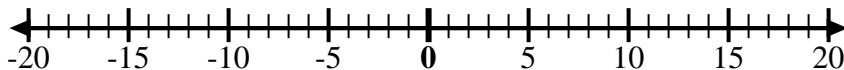
5. \_\_\_\_\_

**6)** Start at -7 and  
add 15

6. \_\_\_\_\_

**7)** Start at -9 and  
add 8

7. \_\_\_\_\_

**8)** Start at -2 and  
add -6

8. \_\_\_\_\_

**9)** Start at -5 and  
add 5

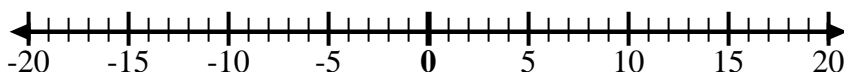
9. \_\_\_\_\_

**10)** Start at -1 and  
add -8

10. \_\_\_\_\_

**11)** Start at -1 and  
add 7

11. \_\_\_\_\_

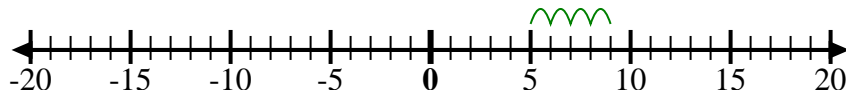
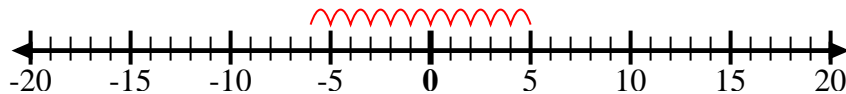
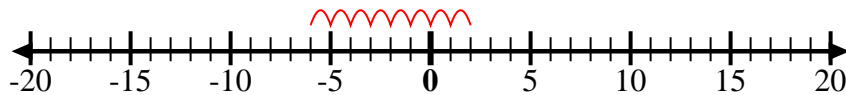
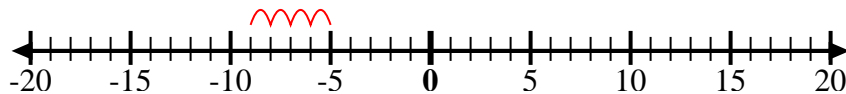
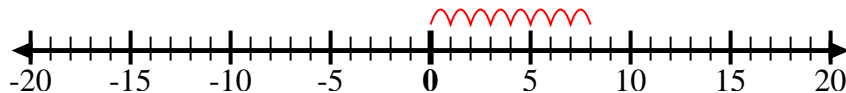
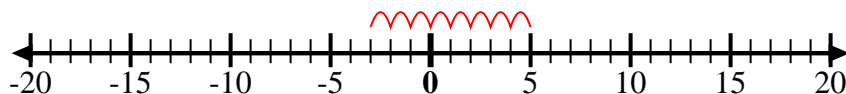
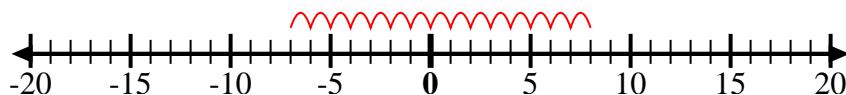
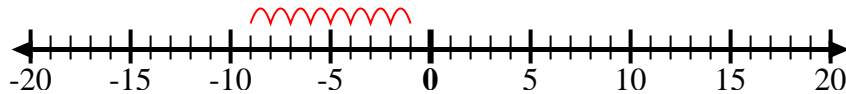
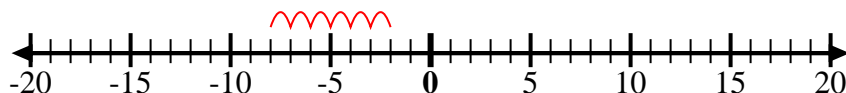
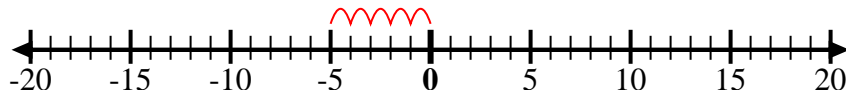
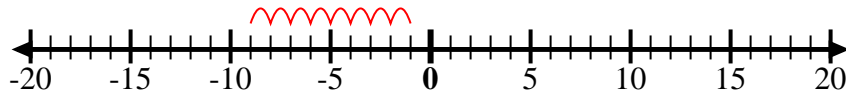
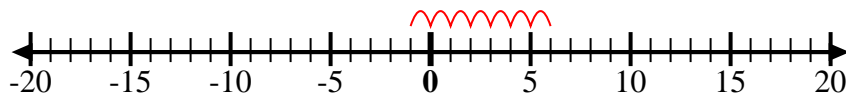
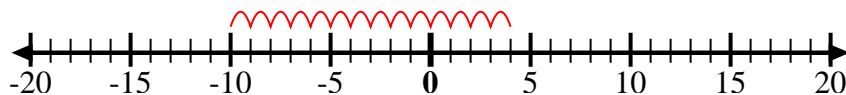
**12)** Start at -10  
and add 14

12. \_\_\_\_\_

**Answers**



Use the numberlines to show each expression and solve.

**Ex)** Start at 9 and  
add -4**1)** Start at 5 and  
add -11**2)** Start at 2 and  
add -8**3)** Start at -5 and  
add -4**4)** Start at 0 and  
add 8**5)** Start at 5 and  
add -8**6)** Start at -7 and  
add 15**7)** Start at -9 and  
add 8**8)** Start at -2 and  
add -6**9)** Start at -5 and  
add 5**10)** Start at -1 and  
add -8**11)** Start at -1 and  
add 7**12)** Start at -10  
and add 14**Answers**

Ex.  $9 + -4 = 5$

1.  $5 + -11 = -6$

2.  $2 + -8 = -6$

3.  $-5 + -4 = -9$

4.  $0 + 8 = 8$

5.  $5 + -8 = -3$

6.  $-7 + 15 = 8$

7.  $-9 + 8 = -1$

8.  $-2 + -6 = -8$

9.  $-5 + 5 = 0$

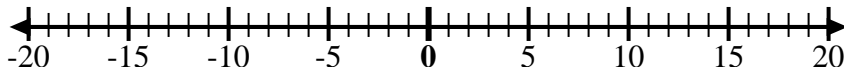
10.  $-1 + -8 = -9$

11.  $-1 + 7 = 6$

12.  $-10 + 14 = 4$



Use the numberlines to show each expression and solve.

Answers**Ex)** Start at 7 and  
add -12Ex.  $7 + -12 = -5$ **1)** Start at -2 and  
add 5

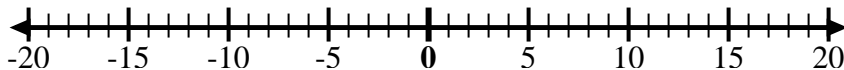
1. \_\_\_\_\_

**2)** Start at 8 and  
add -13

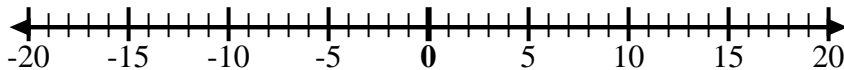
2. \_\_\_\_\_

**3)** Start at -7 and  
add -2

3. \_\_\_\_\_

**4)** Start at -4 and  
add -3

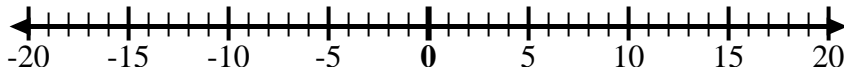
4. \_\_\_\_\_

**5)** Start at -3 and  
add -2

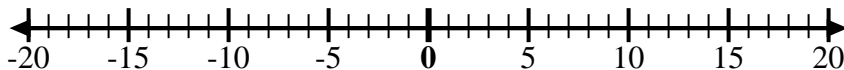
5. \_\_\_\_\_

**6)** Start at -7 and  
add 5

6. \_\_\_\_\_

**7)** Start at -6 and  
add -2

7. \_\_\_\_\_

**8)** Start at 1 and  
add -11

8. \_\_\_\_\_

**9)** Start at -7 and  
add 8

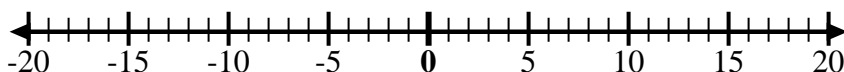
9. \_\_\_\_\_

**10)** Start at 1 and  
add -9

10. \_\_\_\_\_

**11)** Start at -3 and  
add -3

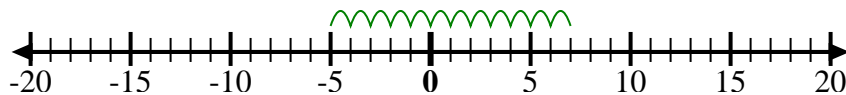
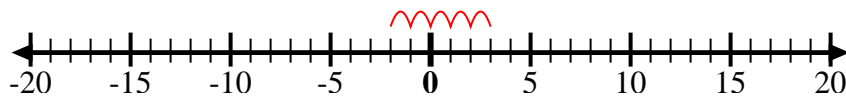
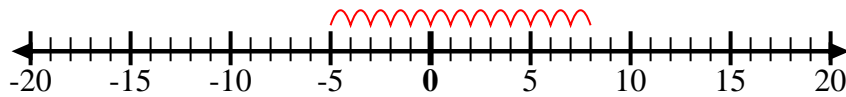
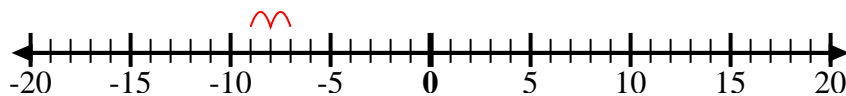
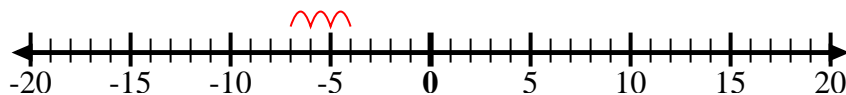
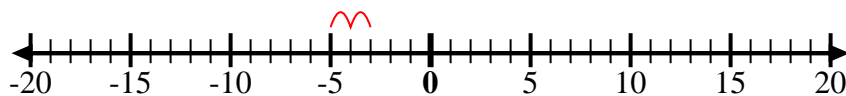
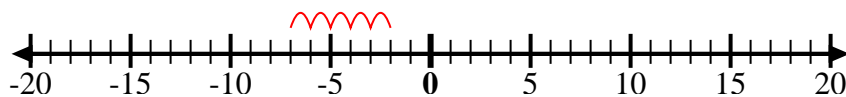
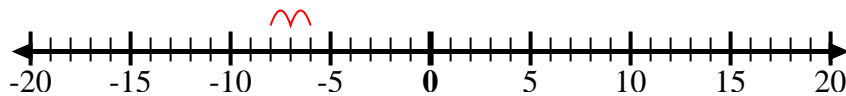
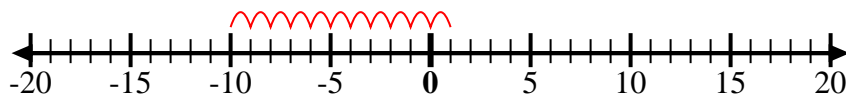
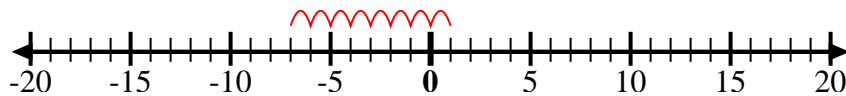
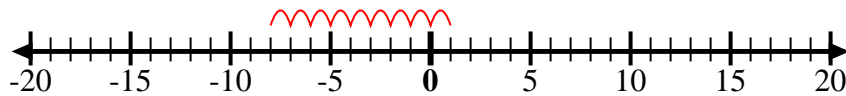
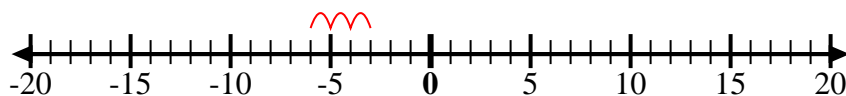
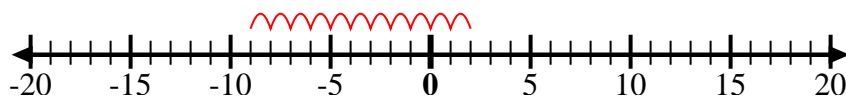
11. \_\_\_\_\_

**12)** Start at 2 and  
add -11

12. \_\_\_\_\_



Use the numberlines to show each expression and solve.

**Ex)** Start at 7 and  
add -12**1)** Start at -2 and  
add 5**2)** Start at 8 and  
add -13**3)** Start at -7 and  
add -2**4)** Start at -4 and  
add -3**5)** Start at -3 and  
add -2**6)** Start at -7 and  
add 5**7)** Start at -6 and  
add -2**8)** Start at 1 and  
add -11**9)** Start at -7 and  
add 8**10)** Start at 1 and  
add -9**11)** Start at -3 and  
add -3**12)** Start at 2 and  
add -11**Answers**

Ex.  $7 + -12 = -5$

1.  $-2 + 5 = 3$

2.  $8 + -13 = -5$

3.  $-7 + -2 = -9$

4.  $-4 + -3 = -7$

5.  $-3 + -2 = -5$

6.  $-7 + 5 = -2$

7.  $-6 + -2 = -8$

8.  $1 + -11 = -10$

9.  $-7 + 8 = 1$

10.  $1 + -9 = -8$

11.  $-3 + -3 = -6$

12.  $2 + -11 = -9$





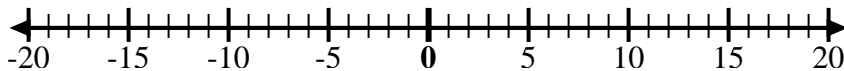
Use the numberlines to show each expression and solve.

**Answers****Ex)** Start at -9 and  
add 5Ex.  $-9 + 5 = -4$ **1)** Start at -10  
and add 14

1. \_\_\_\_\_

**2)** Start at 3 and  
add -10

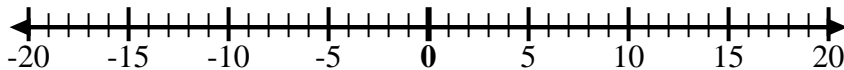
2. \_\_\_\_\_

**3)** Start at 7 and  
add -6

3. \_\_\_\_\_

**4)** Start at -8 and  
add -2

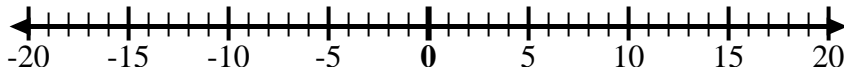
4. \_\_\_\_\_

**5)** Start at 5 and  
add -9

5. \_\_\_\_\_

**6)** Start at -5 and  
add 4

6. \_\_\_\_\_

**7)** Start at -6 and  
add 9

7. \_\_\_\_\_

**8)** Start at -4 and  
add 14

8. \_\_\_\_\_

**9)** Start at -4 and  
add -3

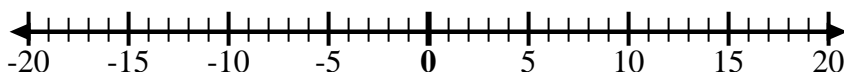
9. \_\_\_\_\_

**10)** Start at -7 and  
add -2

10. \_\_\_\_\_

**11)** Start at 0 and  
add -7

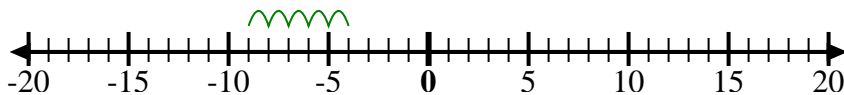
11. \_\_\_\_\_

**12)** Start at -2 and  
add -2

12. \_\_\_\_\_

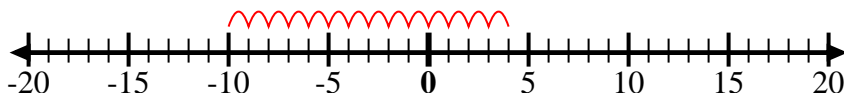


Use the numberlines to show each expression and solve.

**Ex)** Start at -9 and add 5

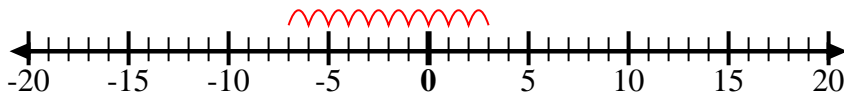
Ex.  $-9 + 5 = -4$

1) Start at -10 and add 14



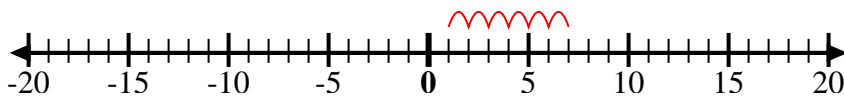
1.  $-10 + 14 = 4$

2) Start at 3 and add -10



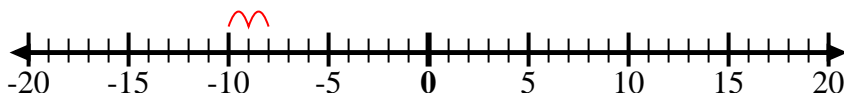
2.  $3 + -10 = -7$

3) Start at 7 and add -6



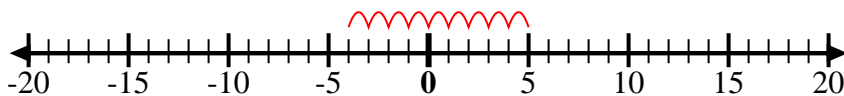
3.  $7 + -6 = 1$

4) Start at -8 and add -2



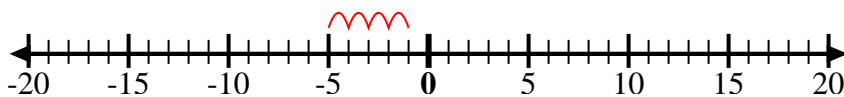
4.  $-8 + -2 = -10$

5) Start at 5 and add -9



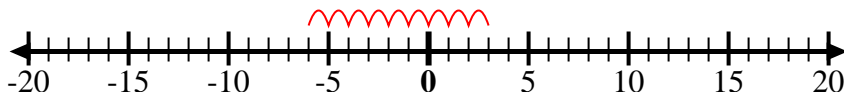
5.  $5 + -9 = -4$

6) Start at -5 and add 4



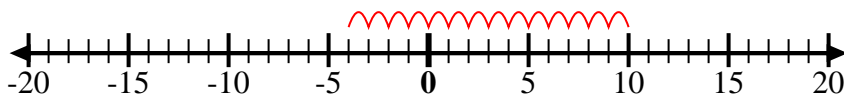
6.  $-5 + 4 = -1$

7) Start at -6 and add 9



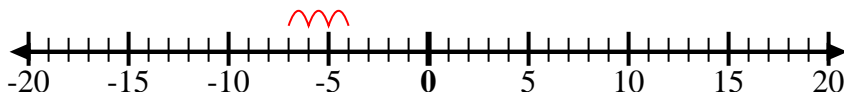
7.  $-6 + 9 = 3$

8) Start at -4 and add 14



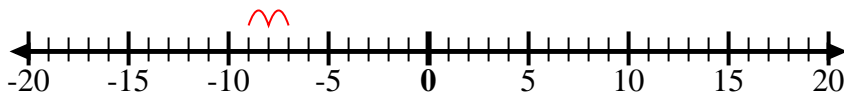
8.  $-4 + 14 = 10$

9) Start at -4 and add -3



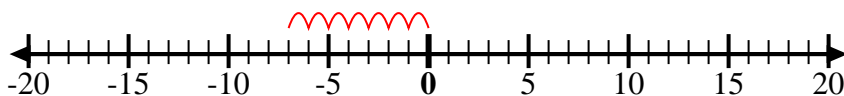
9.  $-4 + -3 = -7$

10) Start at -7 and add -2



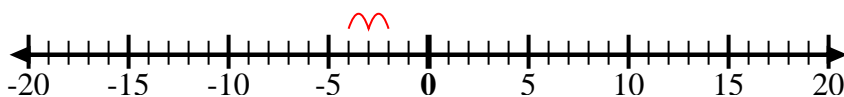
10.  $-7 + -2 = -9$

11) Start at 0 and add -7



11.  $0 + -7 = -7$

12) Start at -2 and add -2



12.  $-2 + -2 = -4$

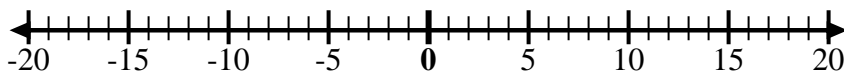
**Answers**



Use the numberlines to show each expression and solve.

**Answers****Ex)** Start at -4 and  
add -6Ex.  $-4 + -6 = -10$ **1)** Start at 7 and  
add -7

1. \_\_\_\_\_

**2)** Start at -4 and  
add 9

2. \_\_\_\_\_

**3)** Start at 4 and  
add -14

3. \_\_\_\_\_

**4)** Start at -2 and  
add -7

4. \_\_\_\_\_

**5)** Start at -3 and  
add 7

5. \_\_\_\_\_

**6)** Start at 1 and  
add -11

6. \_\_\_\_\_

**7)** Start at -6 and  
add -3

7. \_\_\_\_\_

**8)** Start at 10  
and add -1

8. \_\_\_\_\_

**9)** Start at 0 and  
add -5

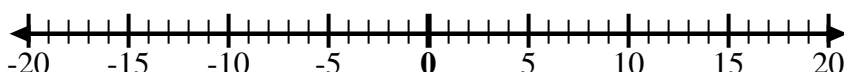
9. \_\_\_\_\_

**10)** Start at 0 and  
add -10

10. \_\_\_\_\_

**11)** Start at 6 and  
add -11

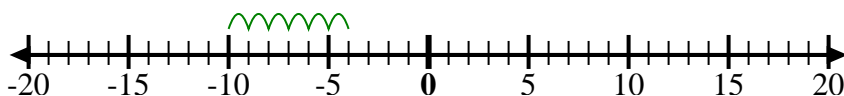
11. \_\_\_\_\_

**12)** Start at -5 and  
add 10

12. \_\_\_\_\_

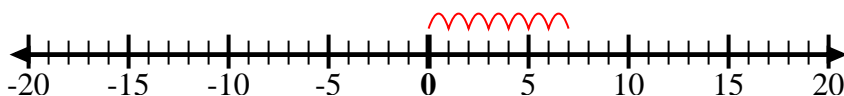


Use the numberlines to show each expression and solve.

**Ex)** Start at -4 and add -6

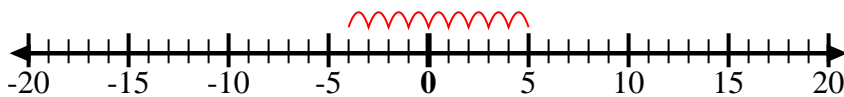
Ex.  $-4 + -6 = -10$

1) Start at 7 and add -7



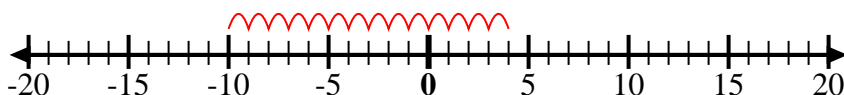
1.  $7 + -7 = 0$

2) Start at -4 and add 9



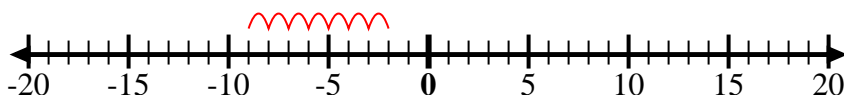
2.  $-4 + 9 = 5$

3) Start at 4 and add -14



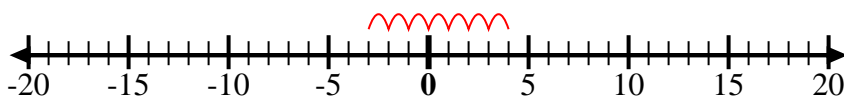
3.  $4 + -14 = -10$

4) Start at -2 and add -7



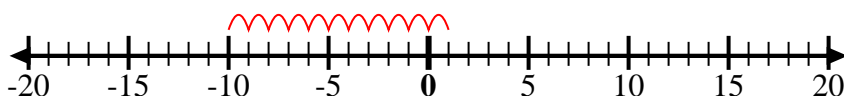
4.  $-2 + -7 = -9$

5) Start at -3 and add 7



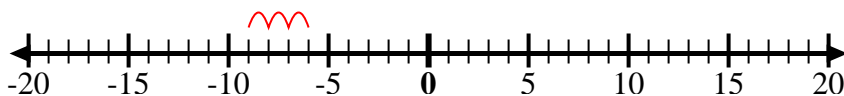
5.  $-3 + 7 = 4$

6) Start at 1 and add -11



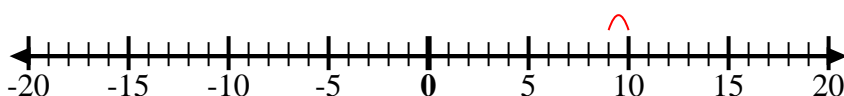
6.  $1 + -11 = -10$

7) Start at -6 and add -3



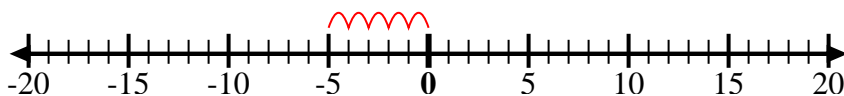
7.  $-6 + -3 = -9$

8) Start at 10 and add -1



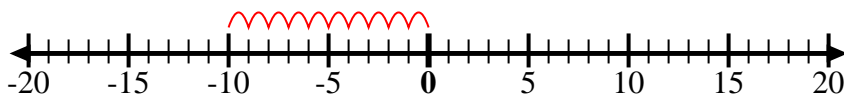
8.  $10 + -1 = 9$

9) Start at 0 and add -5



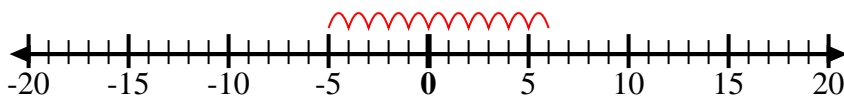
9.  $0 + -5 = -5$

10) Start at 0 and add -10



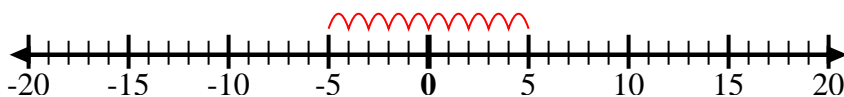
10.  $0 + -10 = -10$

11) Start at 6 and add -11



11.  $6 + -11 = -5$

12) Start at -5 and add 10



12.  $-5 + 10 = 5$

**Answers**