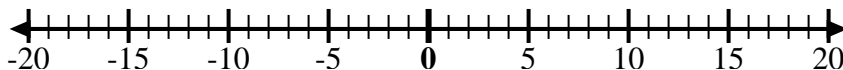




Use the numberlines to show each expression and solve.

Ex) Start at -2 and add -8



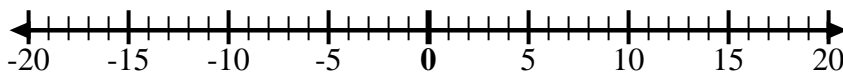
Ex.  $-2 + -8 = -10$

1) Start at 8 and add -18



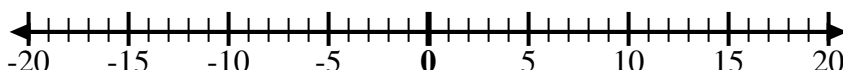
1. \_\_\_\_\_

2) Start at 4 and add -11



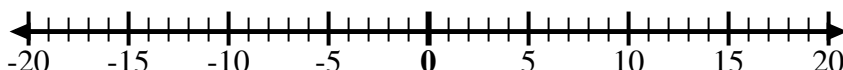
2. \_\_\_\_\_

3) Start at -5 and add -5



3. \_\_\_\_\_

4) Start at -8 and add 5



4. \_\_\_\_\_

5) Start at -6 and add 3



5. \_\_\_\_\_

6) Start at -1 and add -7



6. \_\_\_\_\_

7) Start at -2 and add -6



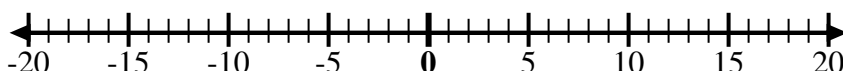
7. \_\_\_\_\_

8) Start at -3 and add 12



8. \_\_\_\_\_

9) Start at -1 and add 11



9. \_\_\_\_\_

10) Start at 2 and add -9



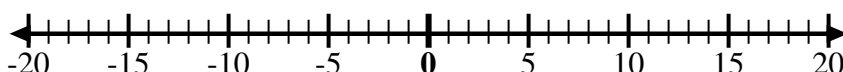
10. \_\_\_\_\_

11) Start at -3 and add 13



11. \_\_\_\_\_

12) Start at 10 and add -12



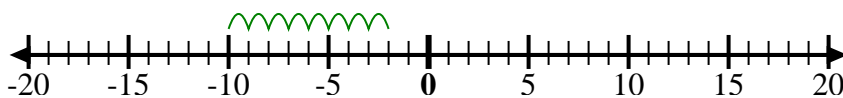
12. \_\_\_\_\_

Answers



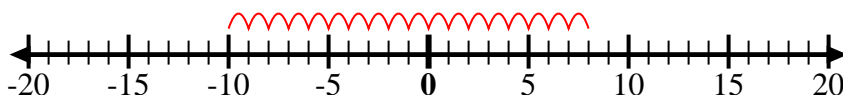
Use the numberlines to show each expression and solve.

Ex) Start at -2 and add -8



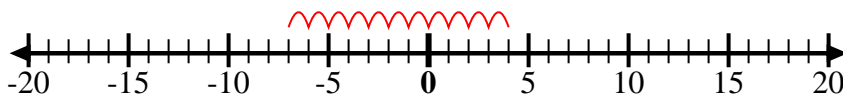
Ex.  $-2 + -8 = -10$

1) Start at 8 and add -18



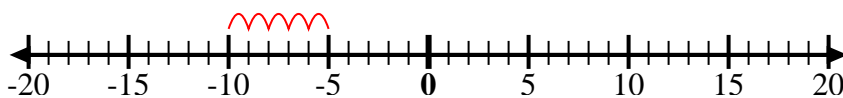
1.  $8 + -18 = -10$

2) Start at 4 and add -11



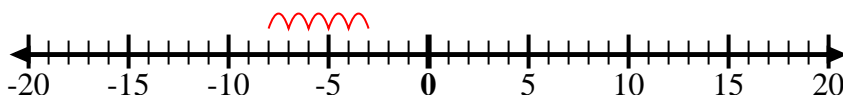
2.  $4 + -11 = -7$

3) Start at -5 and add -5



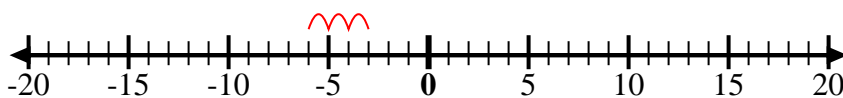
3.  $-5 + -5 = -10$

4) Start at -8 and add 5



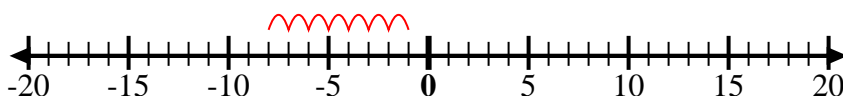
4.  $-8 + 5 = -3$

5) Start at -6 and add 3



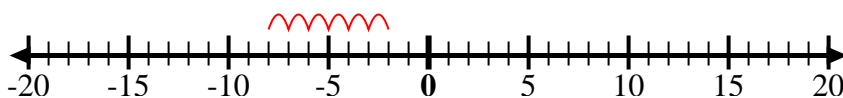
5.  $-6 + 3 = -3$

6) Start at -1 and add -7



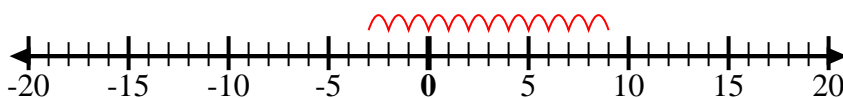
6.  $-1 + -7 = -8$

7) Start at -2 and add -6



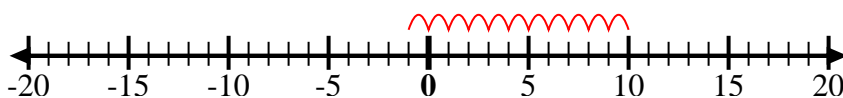
7.  $-2 + -6 = -8$

8) Start at -3 and add 12



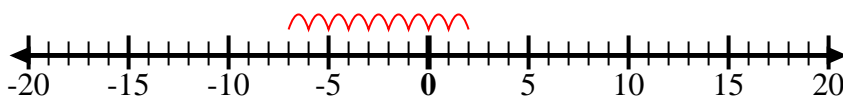
8.  $-3 + 12 = 9$

9) Start at -1 and add 11



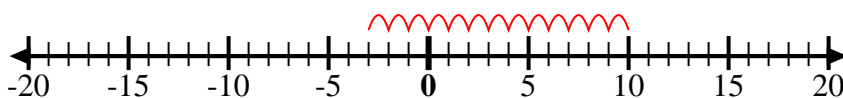
9.  $-1 + 11 = 10$

10) Start at 2 and add -9



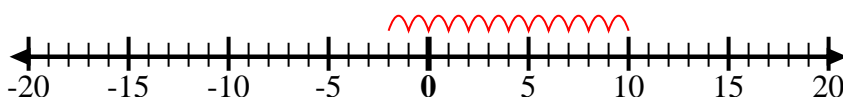
10.  $2 + -9 = -7$

11) Start at -3 and add 13



11.  $-3 + 13 = 10$

12) Start at 10 and add -12



12.  $10 + -12 = -2$

Answers