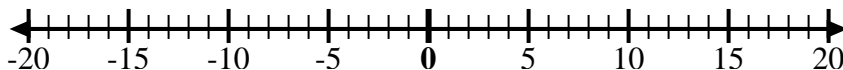




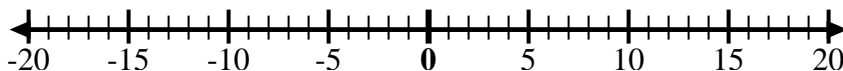
Use the numberlines to show each expression and solve.

Ex) Start at -8 and add 18



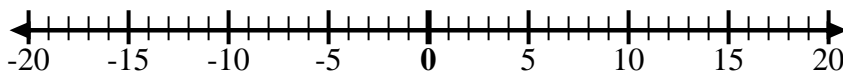
Ex. $-8 + 18 = 10$

1) Start at -6 and add 3



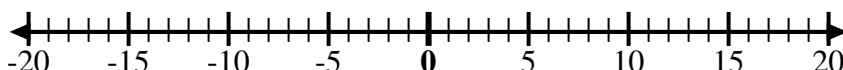
1. _____

2) Start at -4 and add -6



2. _____

3) Start at -1 and add -8



3. _____

4) Start at -4 and add -3



4. _____

5) Start at 0 and add -10



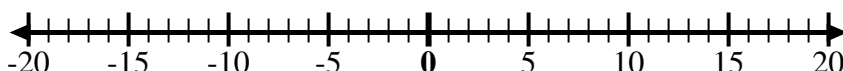
5. _____

6) Start at -7 and add 12



6. _____

7) Start at 2 and add -10



7. _____

8) Start at -6 and add -2



8. _____

9) Start at 1 and add -10



9. _____

10) Start at 3 and add -10



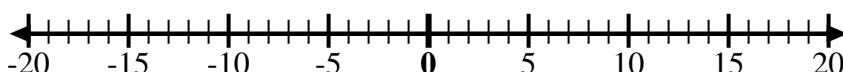
10. _____

11) Start at -4 and add -2



11. _____

12) Start at -10 and add 6



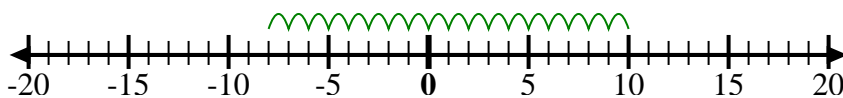
12. _____

Answers



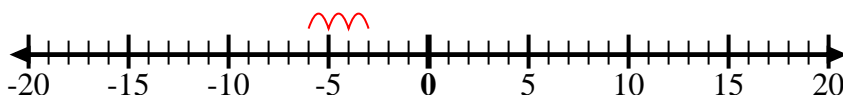
Use the numberlines to show each expression and solve.

Ex) Start at -8 and add 18



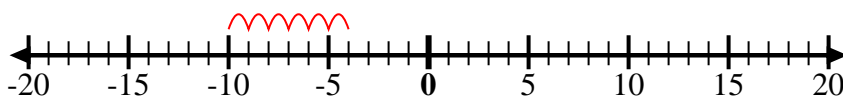
Ex. $-8 + 18 = 10$

1) Start at -6 and add 3



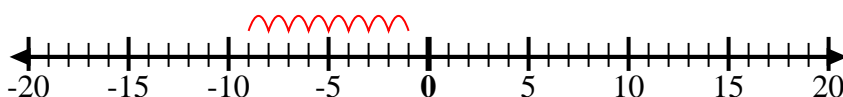
1. $-6 + 3 = -3$

2) Start at -4 and add -6



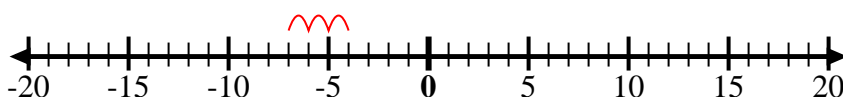
2. $-4 + -6 = -10$

3) Start at -1 and add -8



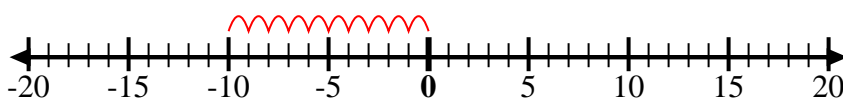
3. $-1 + -8 = -9$

4) Start at -4 and add -3



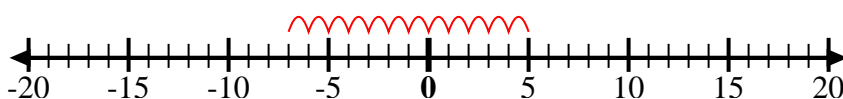
4. $-4 + -3 = -7$

5) Start at 0 and add -10



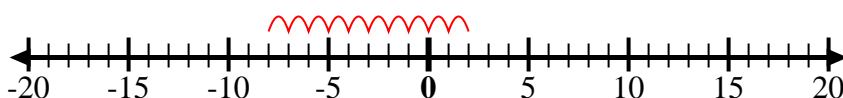
5. $0 + -10 = -10$

6) Start at -7 and add 12



6. $-7 + 12 = 5$

7) Start at 2 and add -10



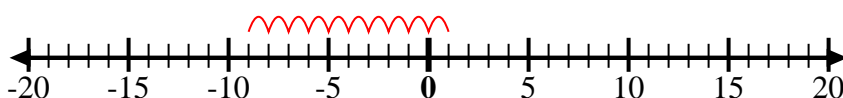
7. $2 + -10 = -8$

8) Start at -6 and add -2



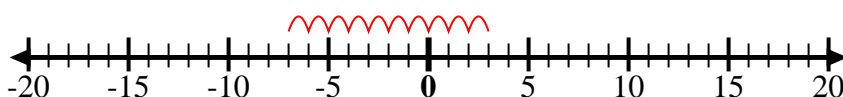
8. $-6 + -2 = -8$

9) Start at 1 and add -10



9. $1 + -10 = -9$

10) Start at 3 and add -10



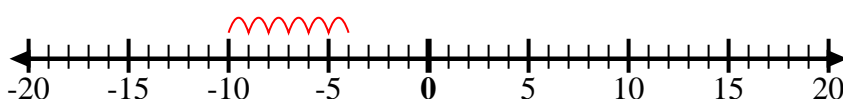
10. $3 + -10 = -7$

11) Start at -4 and add -2



11. $-4 + -2 = -6$

12) Start at -10 and add 6



12. $-10 + 6 = -4$

Answers