




Solve each problem.


**Answers**

1) Which letter best shows -21?




1. \_\_\_\_\_

2) Which letter best shows -20?




2. \_\_\_\_\_

3) Which letter best shows -96?



3. \_\_\_\_\_

4) Which letter best shows -30?



4. \_\_\_\_\_

5) Which letter best shows -37?



5. \_\_\_\_\_

6) Which letter best shows -24?




6. \_\_\_\_\_

7) Which letter best shows -15?




7. \_\_\_\_\_

8) Which letter best shows -82?




8. \_\_\_\_\_

9) Which letter best shows -28?



9. \_\_\_\_\_

10) Which letter best shows -14?




10. \_\_\_\_\_

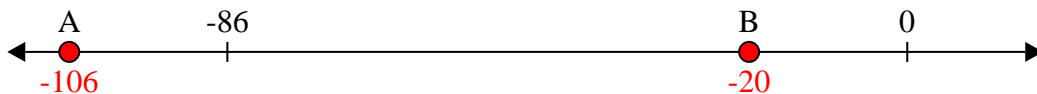


Solve each problem.

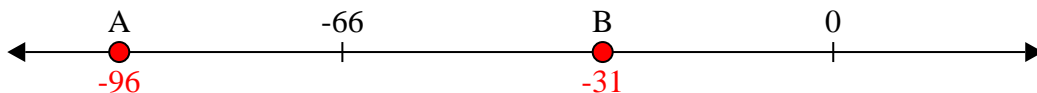
1) Which letter best shows -21?



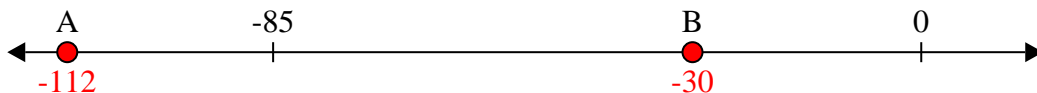
2) Which letter best shows -20?




3) Which letter best shows -96?




4) Which letter best shows -30?




5) Which letter best shows -37?



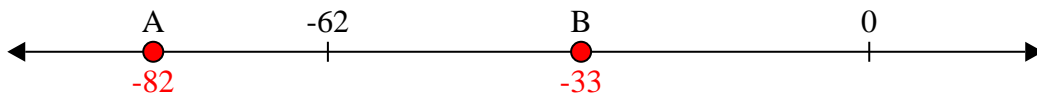
6) Which letter best shows -24?




7) Which letter best shows -15?



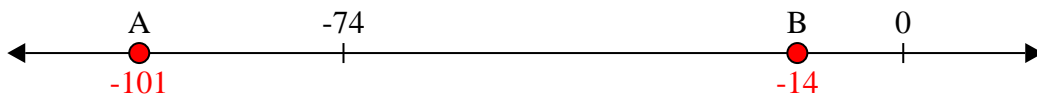
8) Which letter best shows -82?



9) Which letter best shows -28?



10) Which letter best shows -14?



**Answers**

1. **B**

2. **B**

3. **A**

4. **B**

5. **B**

6. **B**

7. **B**

8. **A**

9. **B**

10. **B**