




Solve each problem.


**Answers**

1) Which letter best shows -29?




1. \_\_\_\_\_

2) Which letter best shows -120?




2. \_\_\_\_\_

3) Which letter best shows -118?



3. \_\_\_\_\_

4) Which letter best shows -14?



4. \_\_\_\_\_

5) Which letter best shows -109?



5. \_\_\_\_\_

6) Which letter best shows -28?




6. \_\_\_\_\_

7) Which letter best shows -21?




7. \_\_\_\_\_

8) Which letter best shows -14?




8. \_\_\_\_\_

9) Which letter best shows -13?



9. \_\_\_\_\_

10) Which letter best shows -114?

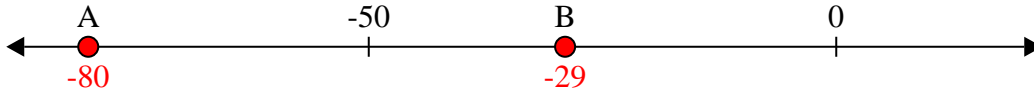


10. \_\_\_\_\_

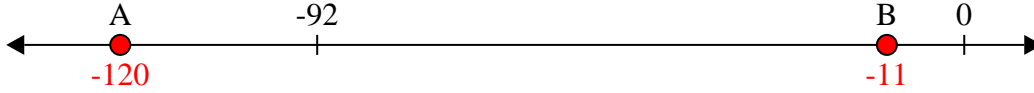


Solve each problem.

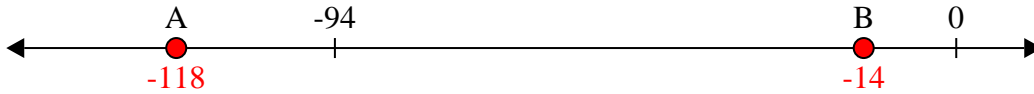
1) Which letter best shows -29?



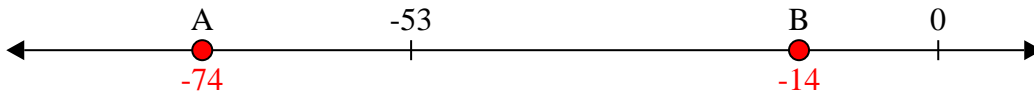
2) Which letter best shows -120?



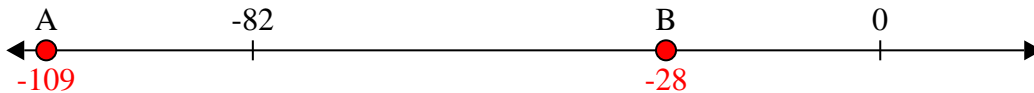
3) Which letter best shows -118?




4) Which letter best shows -14?




5) Which letter best shows -109?




6) Which letter best shows -28?




7) Which letter best shows -21?




8) Which letter best shows -14?



9) Which letter best shows -13?



10) Which letter best shows -114?



**Answers**

1. **B**

2. **A**

3. **A**

4. **B**

5. **A**

6. **B**

7. **B**

8. **B**

9. **B**

10. **A**