



Solve each problem.


Answers

1) Which letter best shows -27?




1. _____

2) Which letter best shows -16?




2. _____

3) Which letter best shows -18?




3. _____

4) Which letter best shows -15?




4. _____

5) Which letter best shows -91?




5. _____

6) Which letter best shows -75?




6. _____

7) Which letter best shows -81?



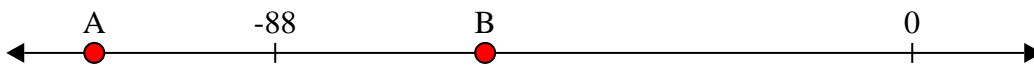
7. _____

8) Which letter best shows -10?




8. _____

9) Which letter best shows -59?



9. _____

10) Which letter best shows -87?

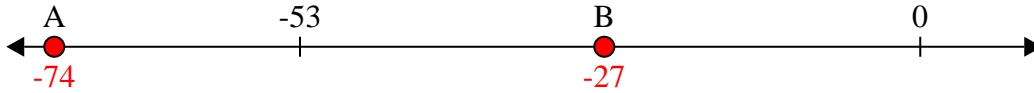


10. _____

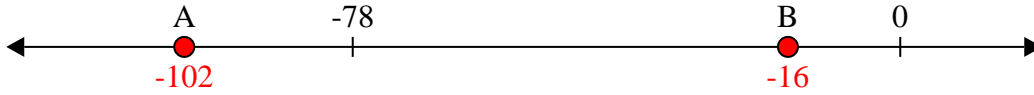


Solve each problem.

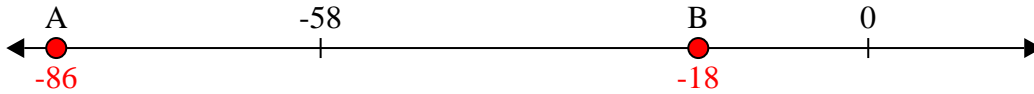
1) Which letter best shows -27?



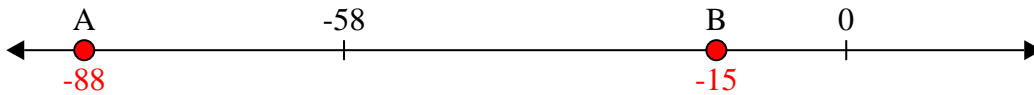
2) Which letter best shows -16?



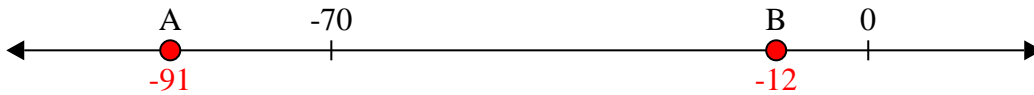
3) Which letter best shows -18?



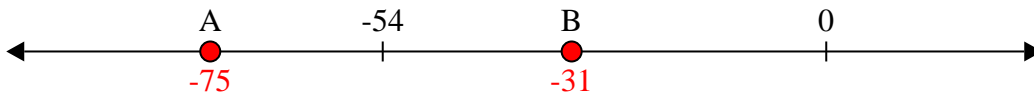
4) Which letter best shows -15?



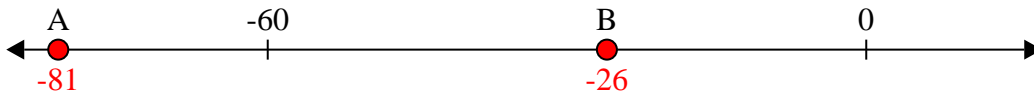
5) Which letter best shows -91?



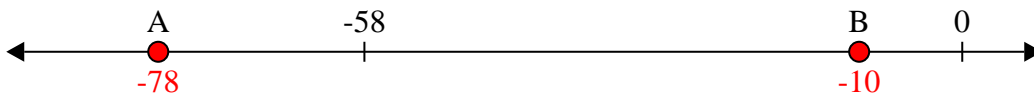
6) Which letter best shows -75?



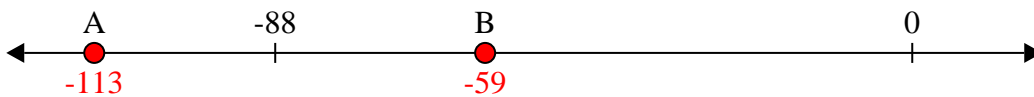
7) Which letter best shows -81?



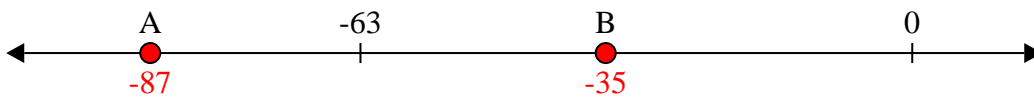
8) Which letter best shows -10?



9) Which letter best shows -59?



10) Which letter best shows -87?



Answers

1. **B**

2. **B**

3. **B**

4. **B**

5. **A**

6. **A**

7. **A**

8. **B**

9. **B**

10. **A**