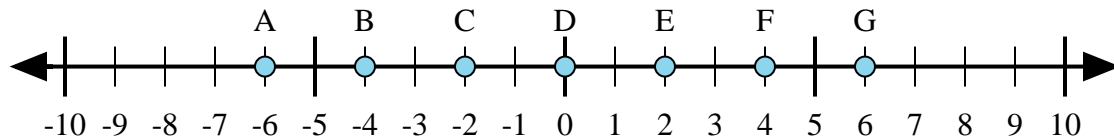




Determine which letter in the numberline best represents the answer to each problem.

Answers



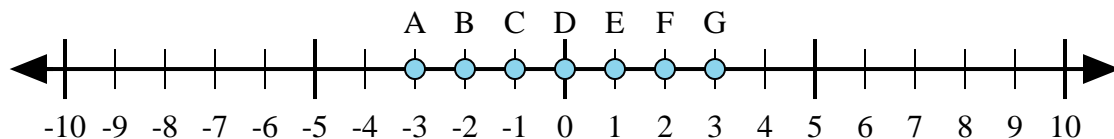
1) $2 + (-4) =$

2) $4 + (-2) =$

3) $(-2) + 4 =$

4) $(-4) + 2 =$

5) $(-2) + (-4) =$



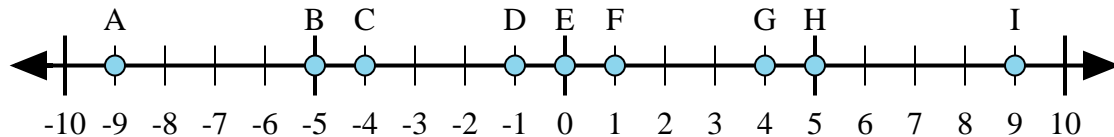
6) $1 + 2 =$

7) $(-1) + 2 =$

8) $2 + (-1) =$

9) $(-2) + 1 =$

10) $(-1) + (-2) =$



11) $(-4) + 5 =$

12) $(-4) + (-5) =$

13) $5 + (-4) =$

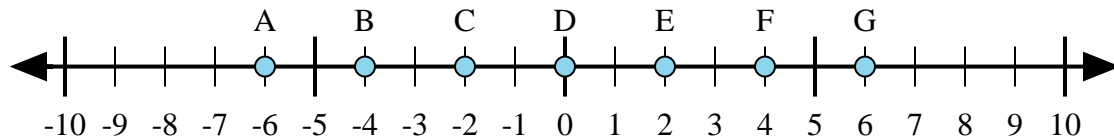
14) $(-5) + 4 =$

15) $4 + (-5) =$

1. _____
2. _____
3. _____
4. _____
5. _____
6. _____
7. _____
8. _____
9. _____
10. _____
11. _____
12. _____
13. _____
14. _____
15. _____



Determine which letter in the numberline best represents the answer to each problem.



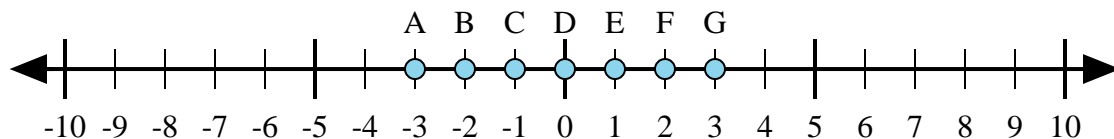
1) $2 + (-4) =$

2) $4 + (-2) =$

3) $(-2) + 4 =$

4) $(-4) + 2 =$

5) $(-2) + (-4) =$



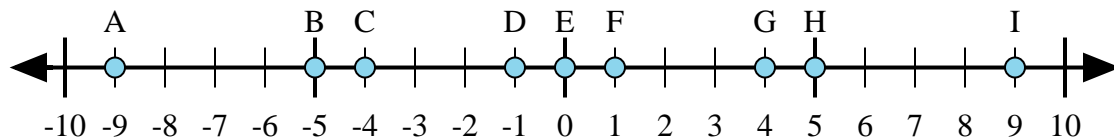
6) $1 + 2 =$

7) $(-1) + 2 =$

8) $2 + (-1) =$

9) $(-2) + 1 =$

10) $(-1) + (-2) =$



11) $(-4) + 5 =$

12) $(-4) + (-5) =$

13) $5 + (-4) =$

14) $(-5) + 4 =$

15) $4 + (-5) =$

Answers

1. C

2. E

3. E

4. C

5. A

6. G

7. E

8. E

9. C

10. A

11. F

12. A

13. F

14. D

15. D