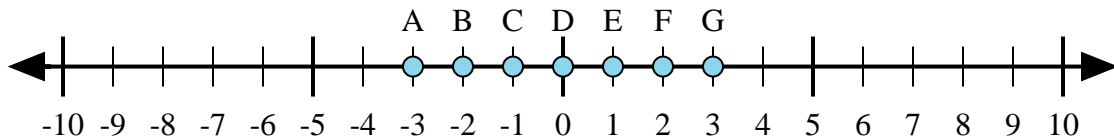




Determine which letter in the numberline best represents the answer to each problem.

Answers



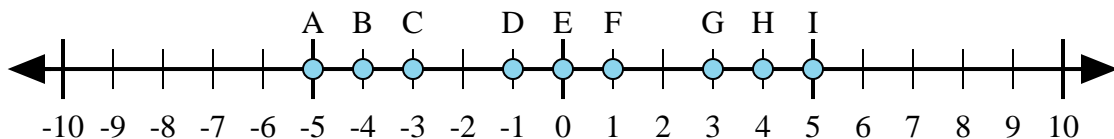
1)  $1 + 2 =$

2)  $(-1) + (-2) =$

3)  $(-2) + 1 =$

4)  $2 + (-1) =$

5)  $1 + (-2) =$



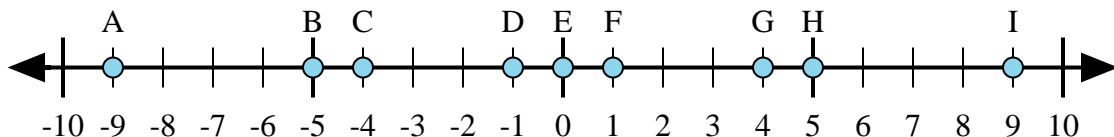
6)  $4 + (-1) =$

7)  $(-4) + (-1) =$

8)  $(-4) + 1 =$

9)  $(-1) + 4 =$

10)  $1 + (-4) =$



11)  $5 + (-4) =$

12)  $4 + (-5) =$

13)  $(-5) + 4 =$

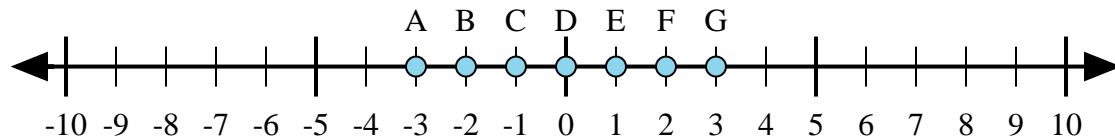
14)  $5 + 4 =$

15)  $(-4) + 5 =$

1. \_\_\_\_\_
2. \_\_\_\_\_
3. \_\_\_\_\_
4. \_\_\_\_\_
5. \_\_\_\_\_
6. \_\_\_\_\_
7. \_\_\_\_\_
8. \_\_\_\_\_
9. \_\_\_\_\_
10. \_\_\_\_\_
11. \_\_\_\_\_
12. \_\_\_\_\_
13. \_\_\_\_\_
14. \_\_\_\_\_
15. \_\_\_\_\_



Determine which letter in the numberline best represents the answer to each problem.



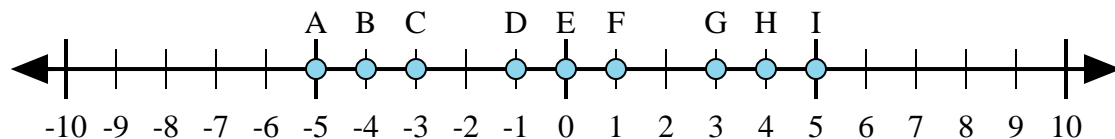
1)  $1 + 2 =$

2)  $(-1) + (-2) =$

3)  $(-2) + 1 =$

4)  $2 + (-1) =$

5)  $1 + (-2) =$



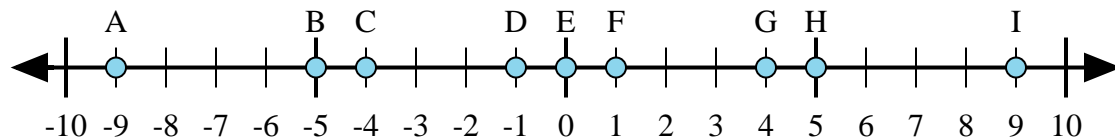
6)  $4 + (-1) =$

7)  $(-4) + (-1) =$

8)  $(-4) + 1 =$

9)  $(-1) + 4 =$

10)  $1 + (-4) =$



11)  $5 + (-4) =$

12)  $4 + (-5) =$

13)  $(-5) + 4 =$

14)  $5 + 4 =$

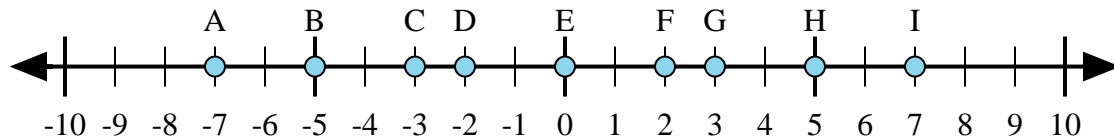
15)  $(-4) + 5 =$

Answers1.     **G**    2.     **A**    3.     **C**    4.     **E**    5.     **C**    6.     **G**    7.     **A**    8.     **C**    9.     **G**    10.     **C**    11.     **F**    12.     **D**    13.     **D**    14.     **I**    15.     **F**



Determine which letter in the numberline best represents the answer to each problem.

Answers



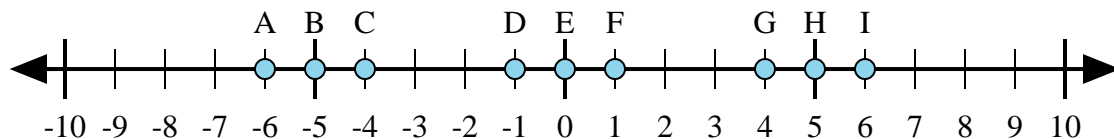
1)  $2 + (-5) =$

2)  $(-5) + (-2) =$

3)  $(-5) + 2 =$

4)  $5 + (-2) =$

5)  $(-2) + 5 =$



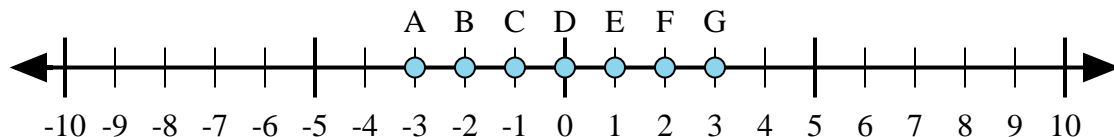
6)  $1 + 5 =$

7)  $(-1) + 5 =$

8)  $5 + (-1) =$

9)  $(-1) + (-5) =$

10)  $(-5) + 1 =$



11)  $(-1) + 2 =$

12)  $1 + (-2) =$

13)  $2 + 1 =$

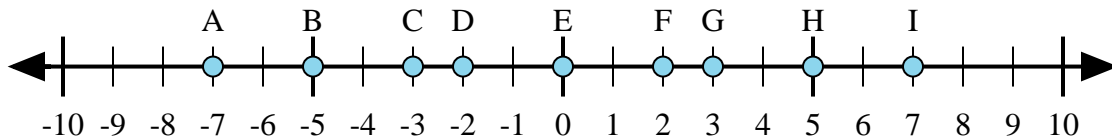
14)  $2 + (-1) =$

15)  $(-2) + 1 =$

1. \_\_\_\_\_
2. \_\_\_\_\_
3. \_\_\_\_\_
4. \_\_\_\_\_
5. \_\_\_\_\_
6. \_\_\_\_\_
7. \_\_\_\_\_
8. \_\_\_\_\_
9. \_\_\_\_\_
10. \_\_\_\_\_
11. \_\_\_\_\_
12. \_\_\_\_\_
13. \_\_\_\_\_
14. \_\_\_\_\_
15. \_\_\_\_\_



Determine which letter in the numberline best represents the answer to each problem.



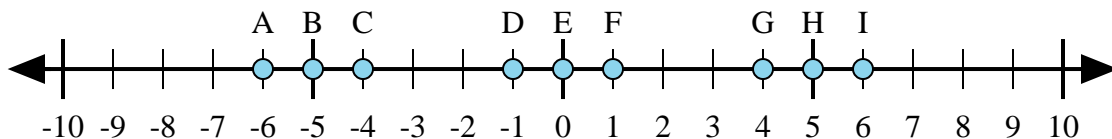
1)  $2 + (-5) =$

2)  $(-5) + (-2) =$

3)  $(-5) + 2 =$

4)  $5 + (-2) =$

5)  $(-2) + 5 =$



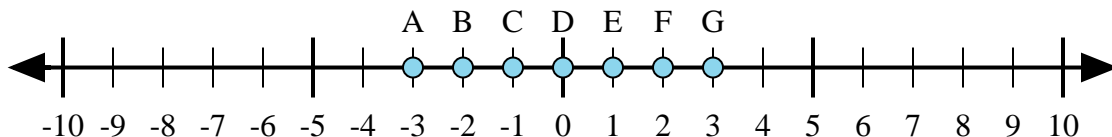
6)  $1 + 5 =$

7)  $(-1) + 5 =$

8)  $5 + (-1) =$

9)  $(-1) + (-5) =$

10)  $(-5) + 1 =$



11)  $(-1) + 2 =$

12)  $1 + (-2) =$

13)  $2 + 1 =$

14)  $2 + (-1) =$

15)  $(-2) + 1 =$

Answers

1. C

2. A

3. C

4. G

5. G

6. I

7. G

8. G

9. A

10. C

11. E

12. C

13. G

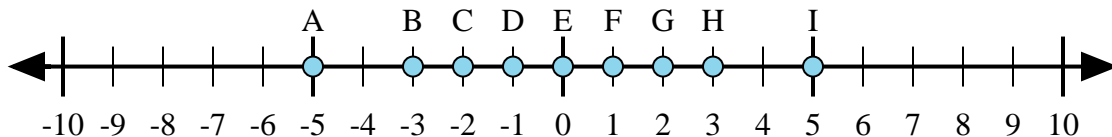
14. E

15. C



Determine which letter in the numberline best represents the answer to each problem.

Answers



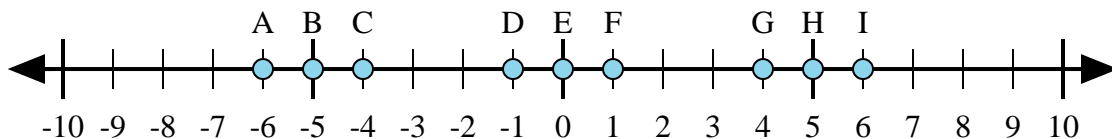
1)  $2 + (-3) =$

2)  $(-3) + (-2) =$

3)  $3 + (-2) =$

4)  $3 + 2 =$

5)  $(-2) + 3 =$



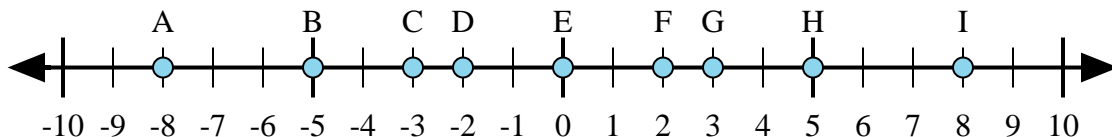
6)  $(-1) + 5 =$

7)  $(-5) + (-1) =$

8)  $5 + (-1) =$

9)  $1 + (-5) =$

10)  $5 + 1 =$



11)  $5 + 3 =$

12)  $(-5) + 3 =$

13)  $5 + (-3) =$

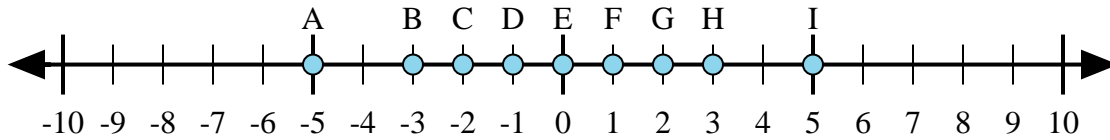
14)  $3 + (-5) =$

15)  $(-3) + 5 =$

1. \_\_\_\_\_
2. \_\_\_\_\_
3. \_\_\_\_\_
4. \_\_\_\_\_
5. \_\_\_\_\_
6. \_\_\_\_\_
7. \_\_\_\_\_
8. \_\_\_\_\_
9. \_\_\_\_\_
10. \_\_\_\_\_
11. \_\_\_\_\_
12. \_\_\_\_\_
13. \_\_\_\_\_
14. \_\_\_\_\_
15. \_\_\_\_\_



Determine which letter in the numberline best represents the answer to each problem.



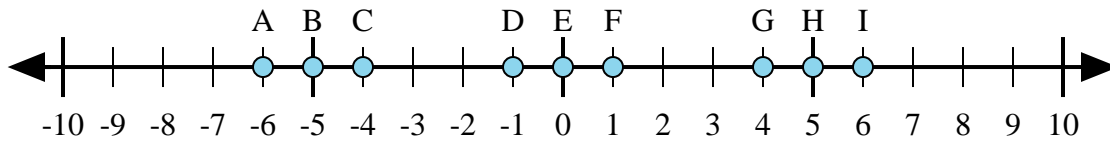
1)  $2 + (-3) =$

2)  $(-3) + (-2) =$

3)  $3 + (-2) =$

4)  $3 + 2 =$

5)  $(-2) + 3 =$



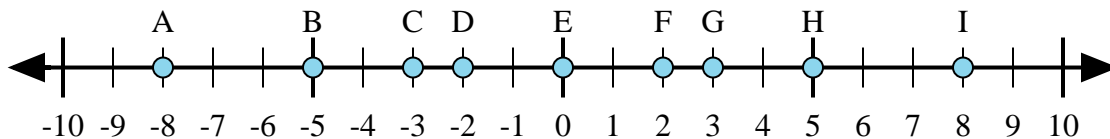
6)  $(-1) + 5 =$

7)  $(-5) + (-1) =$

8)  $5 + (-1) =$

9)  $1 + (-5) =$

10)  $5 + 1 =$



11)  $5 + 3 =$

12)  $(-5) + 3 =$

13)  $5 + (-3) =$

14)  $3 + (-5) =$

15)  $(-3) + 5 =$

Answers

1. D

2. A

3. F

4. I

5. F

6. G

7. A

8. G

9. C

10. I

11. I

12. D

13. F

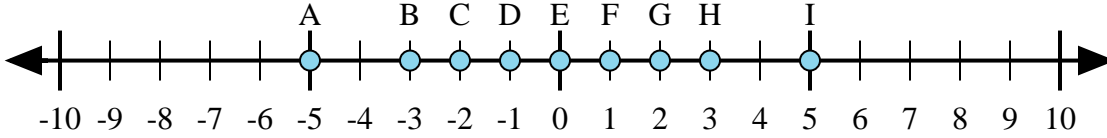
14. D

15. F



Determine which letter in the numberline best represents the answer to each problem.

Answers



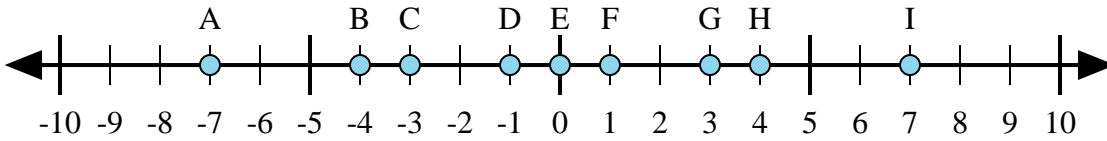
1)  $3 + (-2) =$

2)  $(-2) + 3 =$

3)  $2 + 3 =$

4)  $(-2) + (-3) =$

5)  $2 + (-3) =$



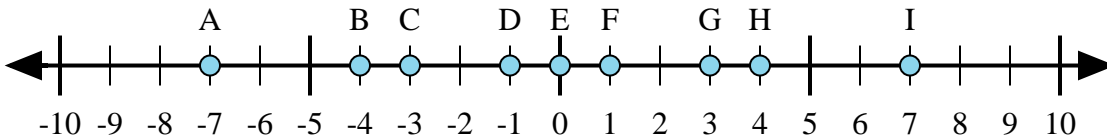
6)  $4 + (-3) =$

7)  $3 + 4 =$

8)  $(-4) + 3 =$

9)  $(-3) + 4 =$

10)  $(-3) + (-4) =$



11)  $4 + 3 =$

12)  $4 + (-3) =$

13)  $(-4) + 3 =$

14)  $(-3) + 4 =$

15)  $(-4) + (-3) =$

1. \_\_\_\_\_

2. \_\_\_\_\_

3. \_\_\_\_\_

4. \_\_\_\_\_

5. \_\_\_\_\_

6. \_\_\_\_\_

7. \_\_\_\_\_

8. \_\_\_\_\_

9. \_\_\_\_\_

10. \_\_\_\_\_

11. \_\_\_\_\_

12. \_\_\_\_\_

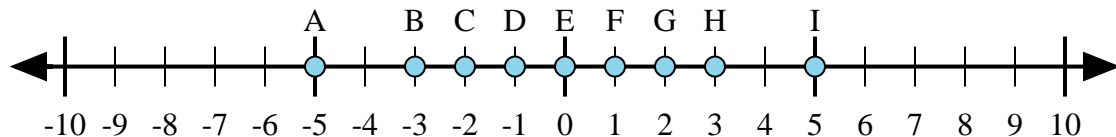
13. \_\_\_\_\_

14. \_\_\_\_\_

15. \_\_\_\_\_



Determine which letter in the numberline best represents the answer to each problem.



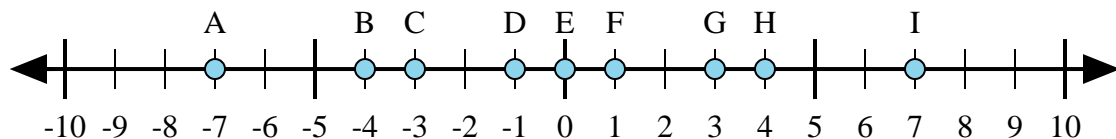
1)  $3 + (-2) =$

2)  $(-2) + 3 =$

3)  $2 + 3 =$

4)  $(-2) + (-3) =$

5)  $2 + (-3) =$



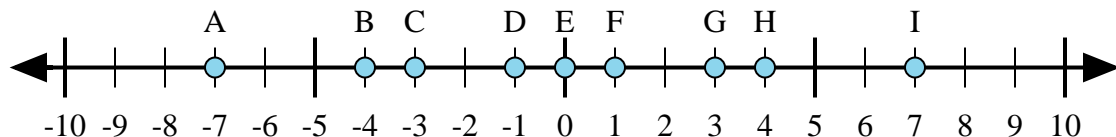
6)  $4 + (-3) =$

7)  $3 + 4 =$

8)  $(-4) + 3 =$

9)  $(-3) + 4 =$

10)  $(-3) + (-4) =$



11)  $4 + 3 =$

12)  $4 + (-3) =$

13)  $(-4) + 3 =$

14)  $(-3) + 4 =$

15)  $(-4) + (-3) =$

Answers

1. F

2. F

3. I

4. A

5. D

6. F

7. I

8. D

9. F

10. A

11. I

12. F

13. D

14. F

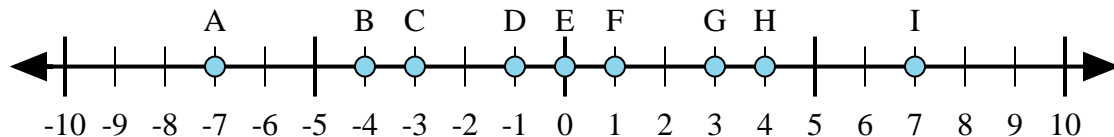
15. A





Determine which letter in the numberline best represents the answer to each problem.

Answers



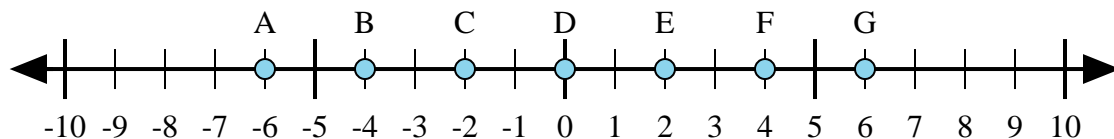
1)  $4 + (-3) =$

2)  $3 + (-4) =$

3)  $(-3) + (-4) =$

4)  $(-4) + 3 =$

5)  $3 + 4 =$



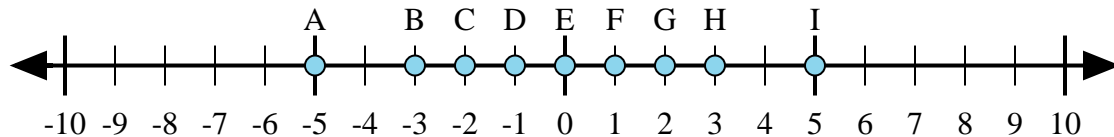
6)  $(-4) + 2 =$

7)  $(-2) + 4 =$

8)  $4 + 2 =$

9)  $(-4) + (-2) =$

10)  $2 + (-4) =$



11)  $(-3) + 2 =$

12)  $2 + (-3) =$

13)  $(-2) + 3 =$

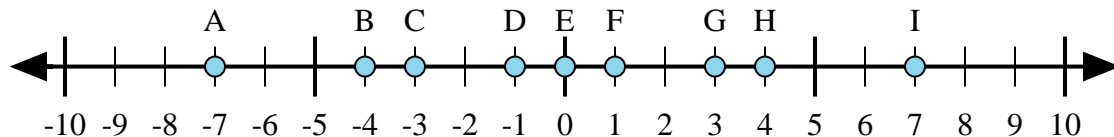
14)  $(-3) + (-2) =$

15)  $3 + (-2) =$

1. \_\_\_\_\_
2. \_\_\_\_\_
3. \_\_\_\_\_
4. \_\_\_\_\_
5. \_\_\_\_\_
6. \_\_\_\_\_
7. \_\_\_\_\_
8. \_\_\_\_\_
9. \_\_\_\_\_
10. \_\_\_\_\_
11. \_\_\_\_\_
12. \_\_\_\_\_
13. \_\_\_\_\_
14. \_\_\_\_\_
15. \_\_\_\_\_



Determine which letter in the numberline best represents the answer to each problem.



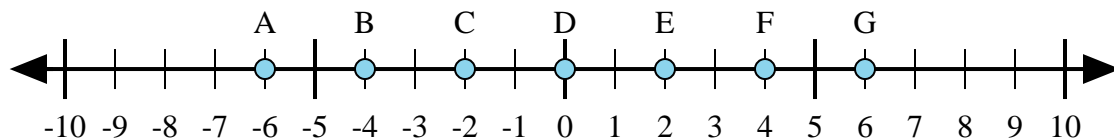
1)  $4 + (-3) =$

2)  $3 + (-4) =$

3)  $(-3) + (-4) =$

4)  $(-4) + 3 =$

5)  $3 + 4 =$



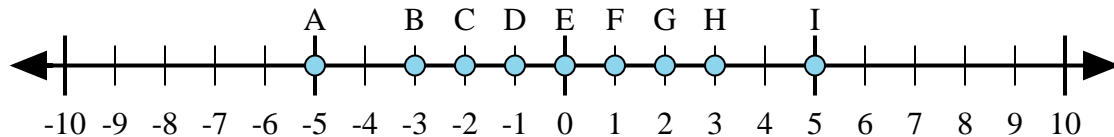
6)  $(-4) + 2 =$

7)  $(-2) + 4 =$

8)  $4 + 2 =$

9)  $(-4) + (-2) =$

10)  $2 + (-4) =$



11)  $(-3) + 2 =$

12)  $2 + (-3) =$

13)  $(-2) + 3 =$

14)  $(-3) + (-2) =$

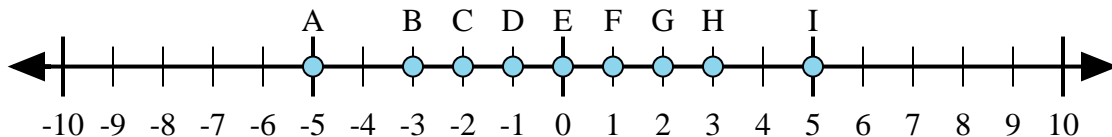
15)  $3 + (-2) =$

Answers1. **F**2. **D**3. **A**4. **D**5. **I**6. **C**7. **E**8. **G**9. **A**10. **C**11. **D**12. **D**13. **F**14. **A**15. **F**



Determine which letter in the numberline best represents the answer to each problem.

Answers



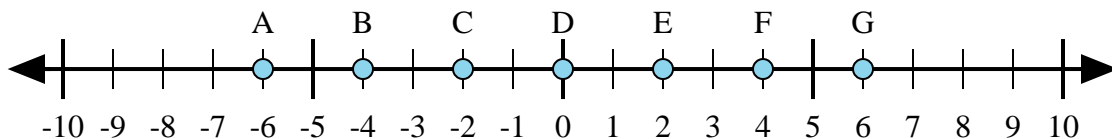
1)  $2 + 3 =$

2)  $2 + (-3) =$

3)  $3 + (-2) =$

4)  $(-2) + 3 =$

5)  $(-3) + 2 =$



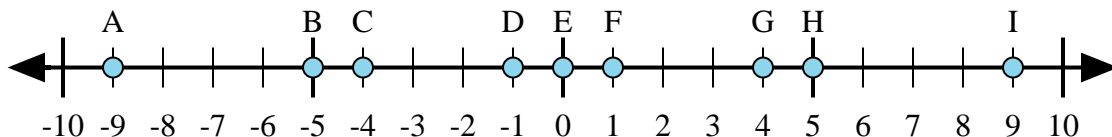
6)  $4 + (-2) =$

7)  $2 + 4 =$

8)  $(-2) + 4 =$

9)  $(-4) + 2 =$

10)  $(-2) + (-4) =$



11)  $5 + (-4) =$

12)  $4 + (-5) =$

13)  $4 + 5 =$

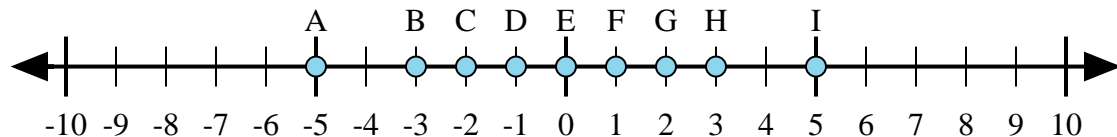
14)  $(-5) + 4 =$

15)  $(-4) + 5 =$

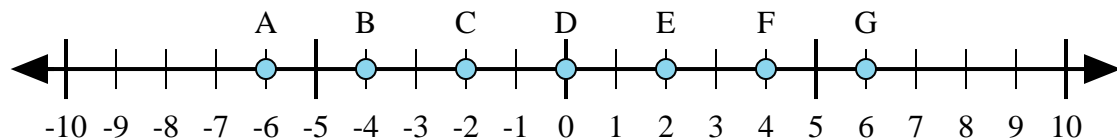
1. \_\_\_\_\_
2. \_\_\_\_\_
3. \_\_\_\_\_
4. \_\_\_\_\_
5. \_\_\_\_\_
6. \_\_\_\_\_
7. \_\_\_\_\_
8. \_\_\_\_\_
9. \_\_\_\_\_
10. \_\_\_\_\_
11. \_\_\_\_\_
12. \_\_\_\_\_
13. \_\_\_\_\_
14. \_\_\_\_\_
15. \_\_\_\_\_



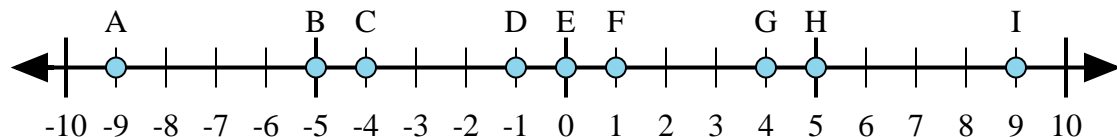
Determine which letter in the numberline best represents the answer to each problem.



- 1)  $2 + 3 =$
- 2)  $2 + (-3) =$
- 3)  $3 + (-2) =$
- 4)  $(-2) + 3 =$
- 5)  $(-3) + 2 =$



- 6)  $4 + (-2) =$
- 7)  $2 + 4 =$
- 8)  $(-2) + 4 =$
- 9)  $(-4) + 2 =$
- 10)  $(-2) + (-4) =$



- 11)  $5 + (-4) =$
- 12)  $4 + (-5) =$
- 13)  $4 + 5 =$
- 14)  $(-5) + 4 =$
- 15)  $(-4) + 5 =$

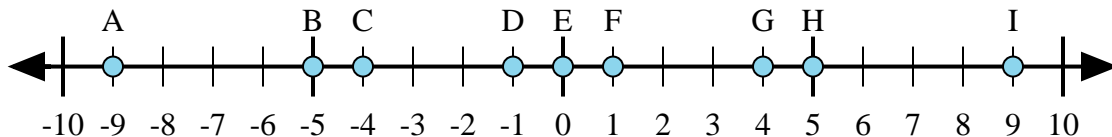
Answers

1. I
2. D
3. F
4. F
5. D
6. E
7. G
8. E
9. C
10. A
11. F
12. D
13. I
14. D
15. F



Determine which letter in the numberline best represents the answer to each problem.

Answers



1)  $(-5) + 4 =$

2)  $(-4) + (-5) =$

3)  $4 + 5 =$

4)  $(-4) + 5 =$

5)  $5 + (-4) =$

1. \_\_\_\_\_

2. \_\_\_\_\_

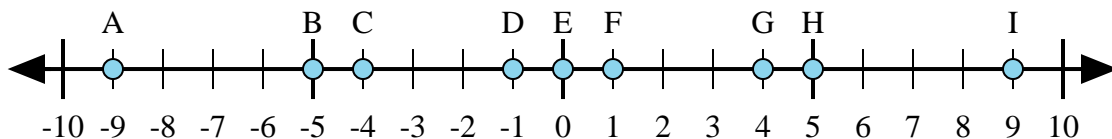
3. \_\_\_\_\_

4. \_\_\_\_\_

5. \_\_\_\_\_

6. \_\_\_\_\_

7. \_\_\_\_\_



6)  $(-5) + (-4) =$

7)  $5 + (-4) =$

8)  $4 + (-5) =$

9)  $(-5) + 4 =$

10)  $5 + 4 =$

8. \_\_\_\_\_

9. \_\_\_\_\_

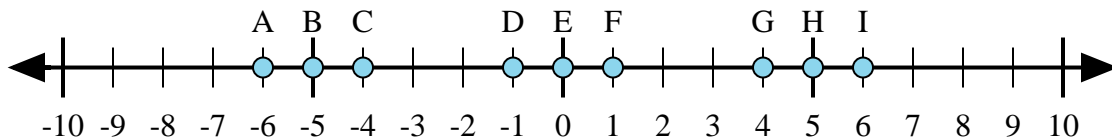
10. \_\_\_\_\_

11. \_\_\_\_\_

12. \_\_\_\_\_

13. \_\_\_\_\_

14. \_\_\_\_\_



11)  $(-5) + (-1) =$

12)  $(-5) + 1 =$

13)  $5 + 1 =$

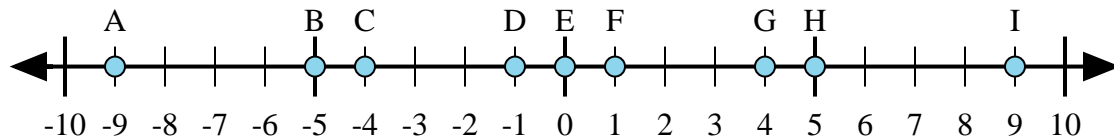
14)  $1 + (-5) =$

15)  $(-1) + 5 =$

15. \_\_\_\_\_



Determine which letter in the numberline best represents the answer to each problem.



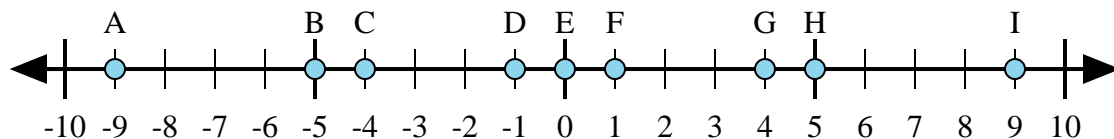
1)  $(-5) + 4 =$

2)  $(-4) + (-5) =$

3)  $4 + 5 =$

4)  $(-4) + 5 =$

5)  $5 + (-4) =$



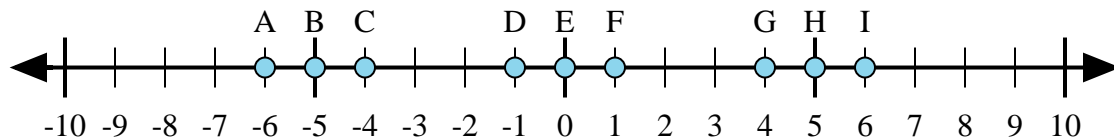
6)  $(-5) + (-4) =$

7)  $5 + (-4) =$

8)  $4 + (-5) =$

9)  $(-5) + 4 =$

10)  $5 + 4 =$



11)  $(-5) + (-1) =$

12)  $(-5) + 1 =$

13)  $5 + 1 =$

14)  $1 + (-5) =$

15)  $(-1) + 5 =$

Answers

1. D

2. A

3. I

4. F

5. F

6. A

7. F

8. D

9. D

10. I

11. A

12. C

13. I

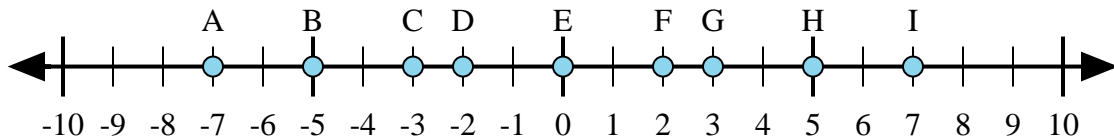
14. C

15. G



Determine which letter in the numberline best represents the answer to each problem.

Answers



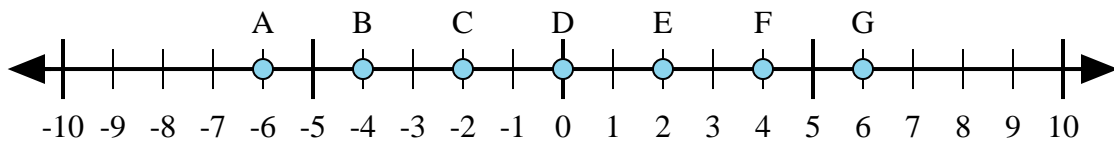
1)  $(-5) + 2 =$

2)  $(-2) + (-5) =$

3)  $2 + 5 =$

4)  $(-2) + 5 =$

5)  $2 + (-5) =$



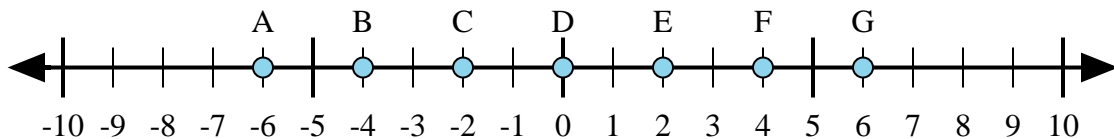
6)  $(-2) + 4 =$

7)  $(-4) + 2 =$

8)  $(-2) + (-4) =$

9)  $2 + (-4) =$

10)  $2 + 4 =$



11)  $4 + 2 =$

12)  $(-4) + (-2) =$

13)  $(-2) + 4 =$

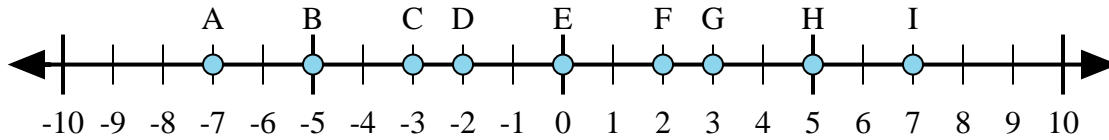
14)  $(-4) + 2 =$

15)  $2 + (-4) =$

1. \_\_\_\_\_
2. \_\_\_\_\_
3. \_\_\_\_\_
4. \_\_\_\_\_
5. \_\_\_\_\_
6. \_\_\_\_\_
7. \_\_\_\_\_
8. \_\_\_\_\_
9. \_\_\_\_\_
10. \_\_\_\_\_
11. \_\_\_\_\_
12. \_\_\_\_\_
13. \_\_\_\_\_
14. \_\_\_\_\_
15. \_\_\_\_\_



Determine which letter in the numberline best represents the answer to each problem.



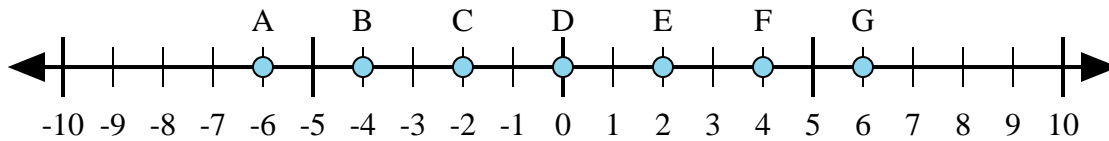
1)  $(-5) + 2 =$

2)  $(-2) + (-5) =$

3)  $2 + 5 =$

4)  $(-2) + 5 =$

5)  $2 + (-5) =$



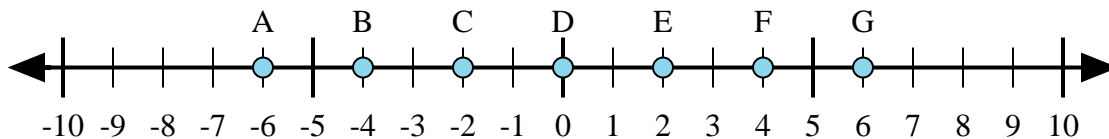
6)  $(-2) + 4 =$

7)  $(-4) + 2 =$

8)  $(-2) + (-4) =$

9)  $2 + (-4) =$

10)  $2 + 4 =$



11)  $4 + 2 =$

12)  $(-4) + (-2) =$

13)  $(-2) + 4 =$

14)  $(-4) + 2 =$

15)  $2 + (-4) =$

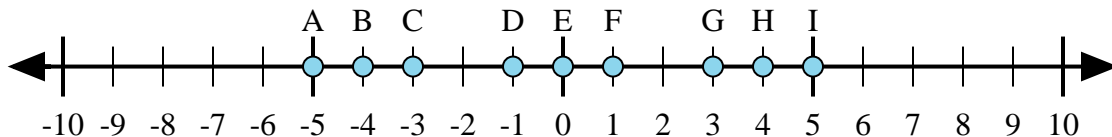
Answers1.     **C**    2.     **A**    3.     **I**    4.     **G**    5.     **C**    6.     **E**    7.     **C**    8.     **A**    9.     **C**    10.     **G**    11.     **G**    12.     **A**    13.     **E**    14.     **C**    15.     **C**





Determine which letter in the numberline best represents the answer to each problem.

Answers



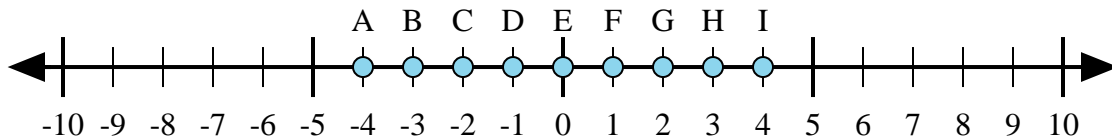
1)  $4 + (-1) =$

2)  $4 + 1 =$

3)  $1 + (-4) =$

4)  $(-4) + (-1) =$

5)  $(-4) + 1 =$



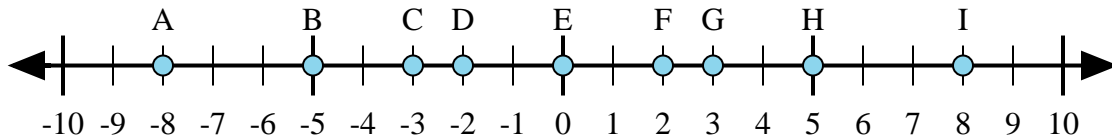
6)  $(-3) + (-1) =$

7)  $(-3) + 1 =$

8)  $3 + 1 =$

9)  $1 + (-3) =$

10)  $(-1) + 3 =$



11)  $3 + (-5) =$

12)  $(-5) + 3 =$

13)  $5 + 3 =$

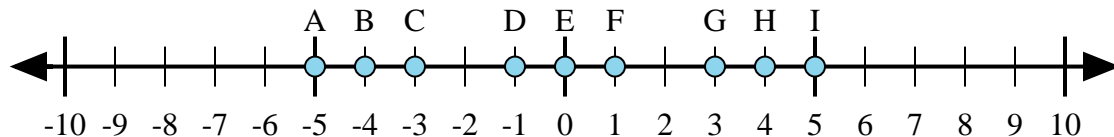
14)  $(-3) + 5 =$

15)  $(-5) + (-3) =$

1. \_\_\_\_\_
2. \_\_\_\_\_
3. \_\_\_\_\_
4. \_\_\_\_\_
5. \_\_\_\_\_
6. \_\_\_\_\_
7. \_\_\_\_\_
8. \_\_\_\_\_
9. \_\_\_\_\_
10. \_\_\_\_\_
11. \_\_\_\_\_
12. \_\_\_\_\_
13. \_\_\_\_\_
14. \_\_\_\_\_
15. \_\_\_\_\_



Determine which letter in the numberline best represents the answer to each problem.



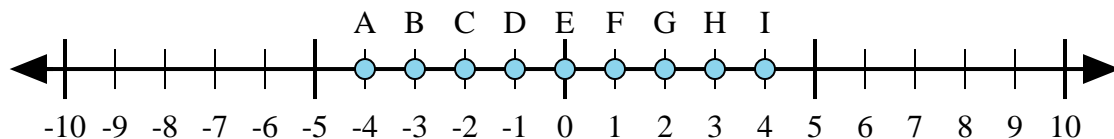
1)  $4 + (-1) =$

2)  $4 + 1 =$

3)  $1 + (-4) =$

4)  $(-4) + (-1) =$

5)  $(-4) + 1 =$



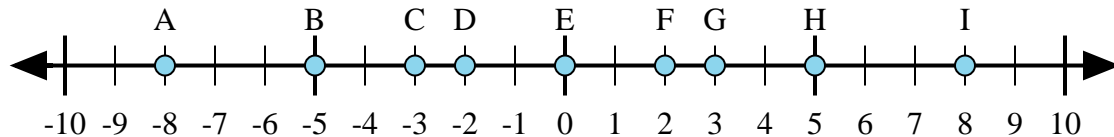
6)  $(-3) + (-1) =$

7)  $(-3) + 1 =$

8)  $3 + 1 =$

9)  $1 + (-3) =$

10)  $(-1) + 3 =$



11)  $3 + (-5) =$

12)  $(-5) + 3 =$

13)  $5 + 3 =$

14)  $(-3) + 5 =$

15)  $(-5) + (-3) =$

Answers

1.     **G**    

2.     **I**    

3.     **C**    

4.     **A**    

5.     **C**    

6.     **A**    

7.     **C**    

8.     **I**    

9.     **C**    

10.     **G**    

11.     **D**    

12.     **D**    

13.     **I**    

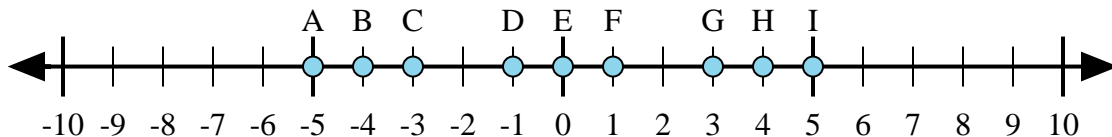
14.     **F**    

15.     **A**



Determine which letter in the numberline best represents the answer to each problem.

Answers



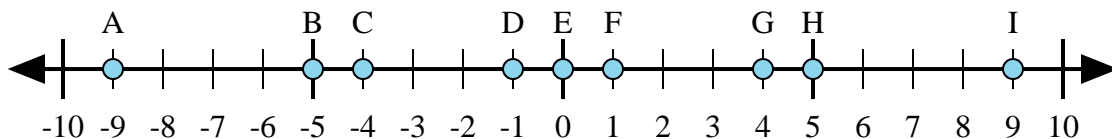
1)  $4 + 1 =$

2)  $4 + (-1) =$

3)  $1 + (-4) =$

4)  $(-4) + (-1) =$

5)  $(-1) + 4 =$



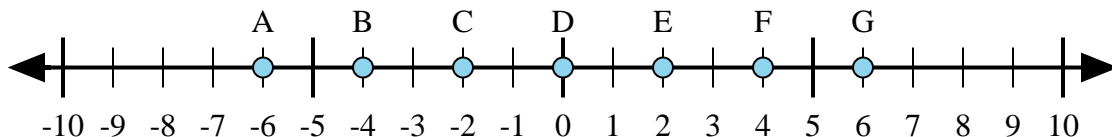
6)  $(-4) + 5 =$

7)  $4 + (-5) =$

8)  $4 + 5 =$

9)  $(-4) + (-5) =$

10)  $(-5) + 4 =$



11)  $(-4) + (-2) =$

12)  $2 + (-4) =$

13)  $4 + 2 =$

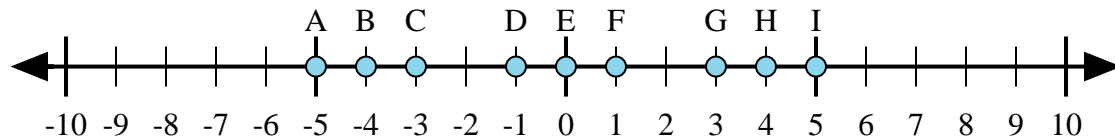
14)  $(-2) + 4 =$

15)  $4 + (-2) =$

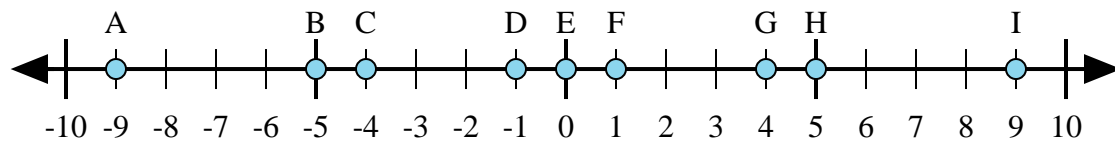
1. \_\_\_\_\_
2. \_\_\_\_\_
3. \_\_\_\_\_
4. \_\_\_\_\_
5. \_\_\_\_\_
6. \_\_\_\_\_
7. \_\_\_\_\_
8. \_\_\_\_\_
9. \_\_\_\_\_
10. \_\_\_\_\_
11. \_\_\_\_\_
12. \_\_\_\_\_
13. \_\_\_\_\_
14. \_\_\_\_\_
15. \_\_\_\_\_



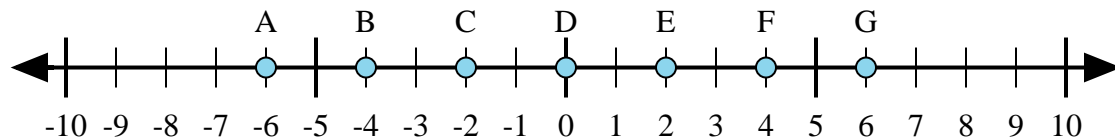
Determine which letter in the numberline best represents the answer to each problem.



- 1)  $4 + 1 =$
- 2)  $4 + (-1) =$
- 3)  $1 + (-4) =$
- 4)  $(-4) + (-1) =$
- 5)  $(-1) + 4 =$



- 6)  $(-4) + 5 =$
- 7)  $4 + (-5) =$
- 8)  $4 + 5 =$
- 9)  $(-4) + (-5) =$
- 10)  $(-5) + 4 =$



- 11)  $(-4) + (-2) =$
- 12)  $2 + (-4) =$
- 13)  $4 + 2 =$
- 14)  $(-2) + 4 =$
- 15)  $4 + (-2) =$

Answers

1. I
2. G
3. C
4. A
5. G
6. F
7. D
8. I
9. A
10. D
11. A
12. C
13. G
14. E
15. E