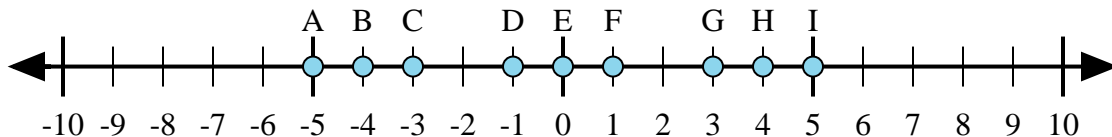




Determine which letter in the numberline best represents the answer to each problem.

Answers



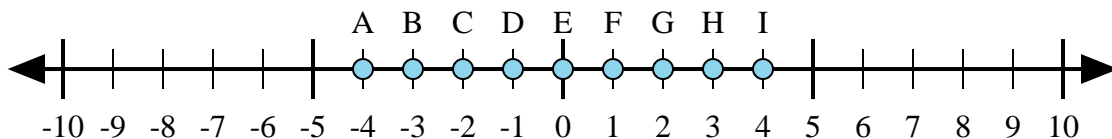
1)  $4 + (-1) =$

2)  $4 + 1 =$

3)  $1 + (-4) =$

4)  $(-4) + (-1) =$

5)  $(-4) + 1 =$



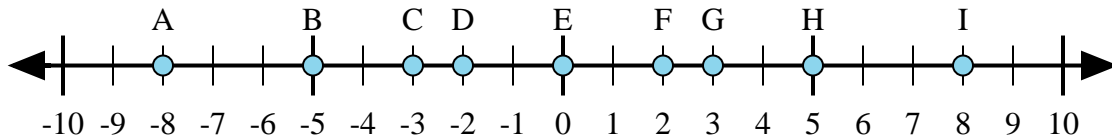
6)  $(-3) + (-1) =$

7)  $(-3) + 1 =$

8)  $3 + 1 =$

9)  $1 + (-3) =$

10)  $(-1) + 3 =$



11)  $3 + (-5) =$

12)  $(-5) + 3 =$

13)  $5 + 3 =$

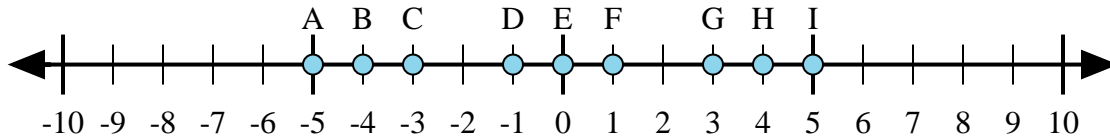
14)  $(-3) + 5 =$

15)  $(-5) + (-3) =$

1. \_\_\_\_\_
2. \_\_\_\_\_
3. \_\_\_\_\_
4. \_\_\_\_\_
5. \_\_\_\_\_
6. \_\_\_\_\_
7. \_\_\_\_\_
8. \_\_\_\_\_
9. \_\_\_\_\_
10. \_\_\_\_\_
11. \_\_\_\_\_
12. \_\_\_\_\_
13. \_\_\_\_\_
14. \_\_\_\_\_
15. \_\_\_\_\_



Determine which letter in the numberline best represents the answer to each problem.



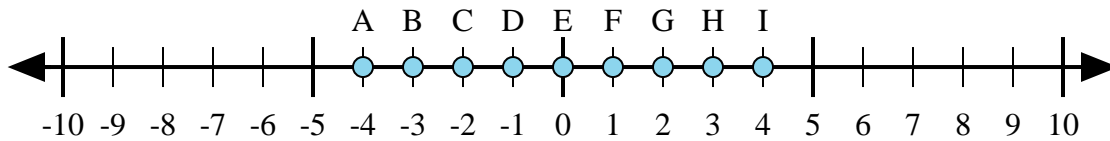
1)  $4 + (-1) =$

2)  $4 + 1 =$

3)  $1 + (-4) =$

4)  $(-4) + (-1) =$

5)  $(-4) + 1 =$



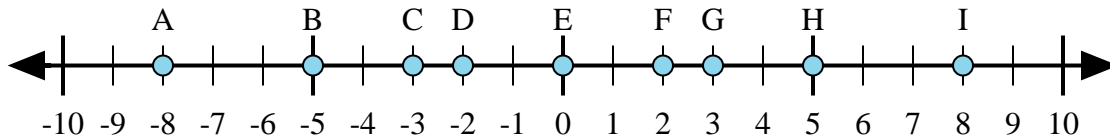
6)  $(-3) + (-1) =$

7)  $(-3) + 1 =$

8)  $3 + 1 =$

9)  $1 + (-3) =$

10)  $(-1) + 3 =$



11)  $3 + (-5) =$

12)  $(-5) + 3 =$

13)  $5 + 3 =$

14)  $(-3) + 5 =$

15)  $(-5) + (-3) =$

Answers

1.     **G**    

2.     **I**    

3.     **C**    

4.     **A**    

5.     **C**    

6.     **A**    

7.     **C**    

8.     **I**    

9.     **C**    

10.     **G**    

11.     **D**    

12.     **D**    

13.     **I**    

14.     **F**    

15.     **A**