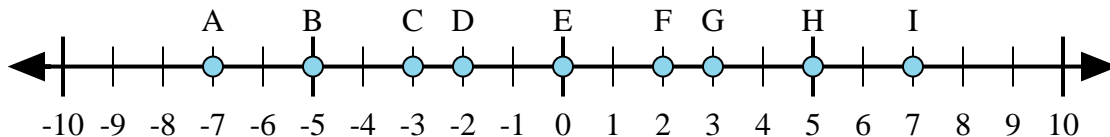




Determine which letter in the numberline best represents the answer to each problem.

Answers



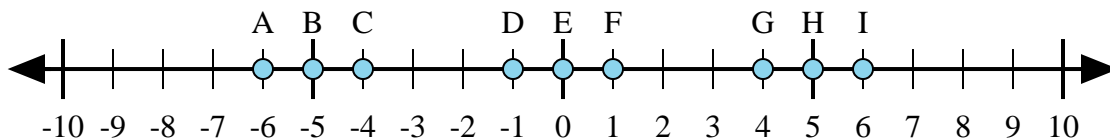
1)  $2 + (-5) =$

2)  $(-5) + (-2) =$

3)  $(-5) + 2 =$

4)  $5 + (-2) =$

5)  $(-2) + 5 =$



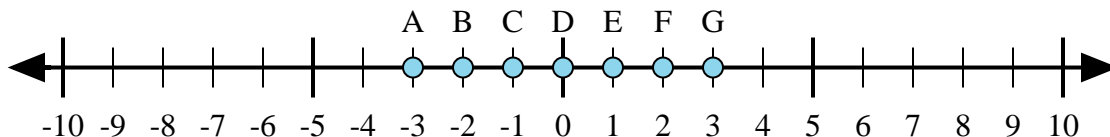
6)  $1 + 5 =$

7)  $(-1) + 5 =$

8)  $5 + (-1) =$

9)  $(-1) + (-5) =$

10)  $(-5) + 1 =$



11)  $(-1) + 2 =$

12)  $1 + (-2) =$

13)  $2 + 1 =$

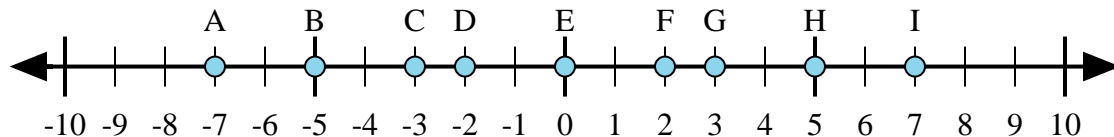
14)  $2 + (-1) =$

15)  $(-2) + 1 =$

1. \_\_\_\_\_
2. \_\_\_\_\_
3. \_\_\_\_\_
4. \_\_\_\_\_
5. \_\_\_\_\_
6. \_\_\_\_\_
7. \_\_\_\_\_
8. \_\_\_\_\_
9. \_\_\_\_\_
10. \_\_\_\_\_
11. \_\_\_\_\_
12. \_\_\_\_\_
13. \_\_\_\_\_
14. \_\_\_\_\_
15. \_\_\_\_\_



Determine which letter in the numberline best represents the answer to each problem.



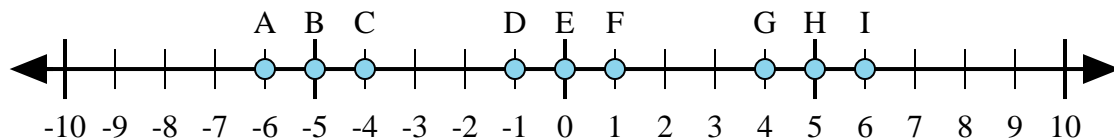
1)  $2 + (-5) =$

2)  $(-5) + (-2) =$

3)  $(-5) + 2 =$

4)  $5 + (-2) =$

5)  $(-2) + 5 =$



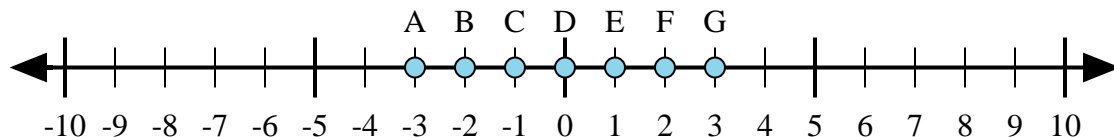
6)  $1 + 5 =$

7)  $(-1) + 5 =$

8)  $5 + (-1) =$

9)  $(-1) + (-5) =$

10)  $(-5) + 1 =$



11)  $(-1) + 2 =$

12)  $1 + (-2) =$

13)  $2 + 1 =$

14)  $2 + (-1) =$

15)  $(-2) + 1 =$

Answers1. C2. A3. C4. G5. G6. I7. G8. G9. A10. C11. E12. C13. G14. E15. C