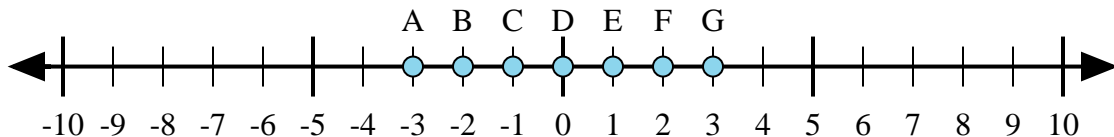




Determine which letter in the numberline best represents the answer to each problem.

Answers



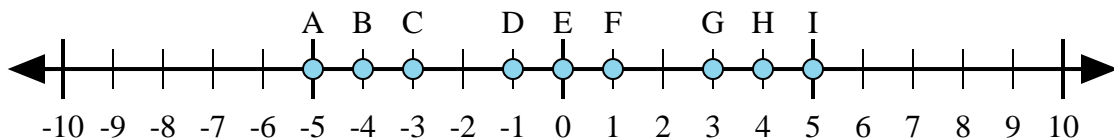
1) $1 + 2 =$

2) $(-1) + (-2) =$

3) $(-2) + 1 =$

4) $2 + (-1) =$

5) $1 + (-2) =$



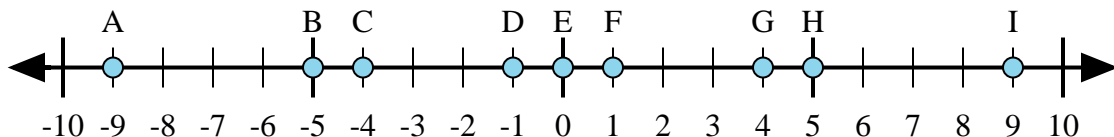
6) $4 + (-1) =$

7) $(-4) + (-1) =$

8) $(-4) + 1 =$

9) $(-1) + 4 =$

10) $1 + (-4) =$



11) $5 + (-4) =$

12) $4 + (-5) =$

13) $(-5) + 4 =$

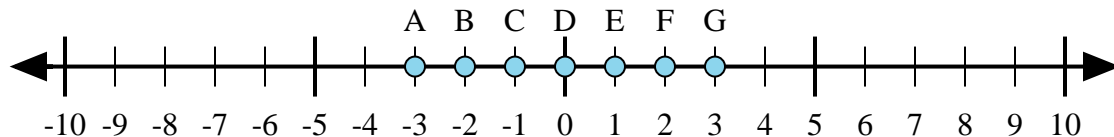
14) $5 + 4 =$

15) $(-4) + 5 =$

1. _____
2. _____
3. _____
4. _____
5. _____
6. _____
7. _____
8. _____
9. _____
10. _____
11. _____
12. _____
13. _____
14. _____
15. _____



Determine which letter in the numberline best represents the answer to each problem.



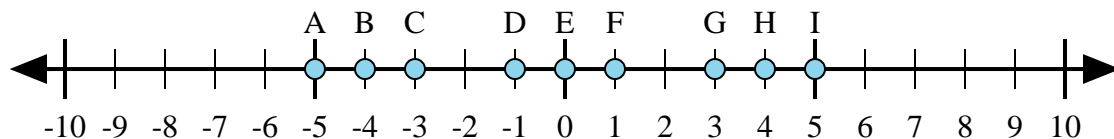
1) $1 + 2 =$

2) $(-1) + (-2) =$

3) $(-2) + 1 =$

4) $2 + (-1) =$

5) $1 + (-2) =$



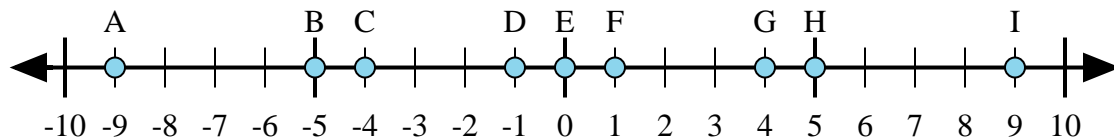
6) $4 + (-1) =$

7) $(-4) + (-1) =$

8) $(-4) + 1 =$

9) $(-1) + 4 =$

10) $1 + (-4) =$



11) $5 + (-4) =$

12) $4 + (-5) =$

13) $(-5) + 4 =$

14) $5 + 4 =$

15) $(-4) + 5 =$

Answers1. **G** 2. **A** 3. **C** 4. **E** 5. **C** 6. **G** 7. **A** 8. **C** 9. **G** 10. **C** 11. **F** 12. **D** 13. **D** 14. **I** 15. **F**