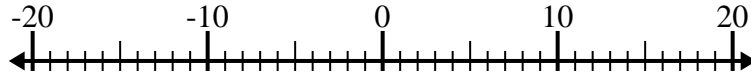




Solve each problem. Use the numberline if needed.

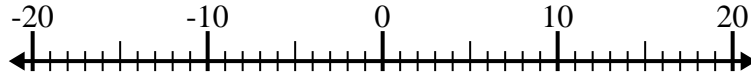
Answers

1) $(-15) - (-9) =$ _____



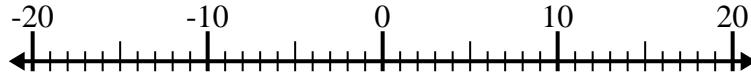
1. _____

2) $(-4) + 6 =$ _____



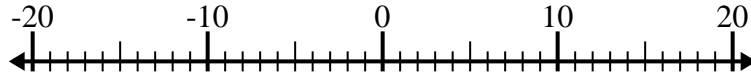
2. _____

3) $(-7) + (-12) =$ _____



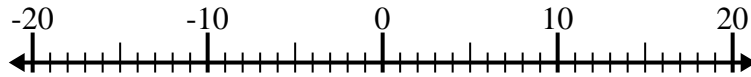
3. _____

4) $(-4) - 8 =$ _____



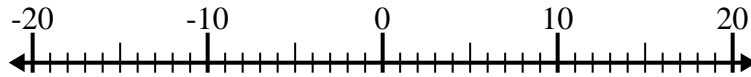
4. _____

5) $10 + (-1) =$ _____



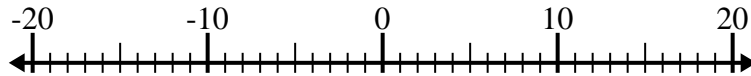
5. _____

6) $(-6) - 5 =$ _____



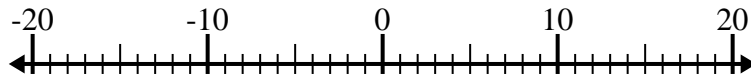
6. _____

7) $(-5) - (-1) =$ _____



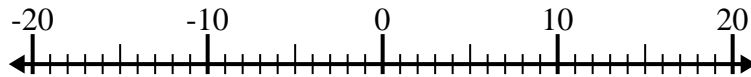
7. _____

8) $7 + (-1) =$ _____



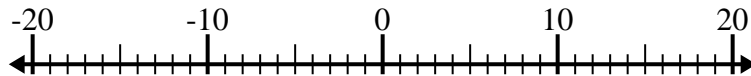
8. _____

9) $8 - (-4) =$ _____



9. _____

10) $14 - (-4) =$ _____



10. _____



Solve each problem. Use the numberline if needed.

1) $(-15) - (-9) = \underline{-6}$



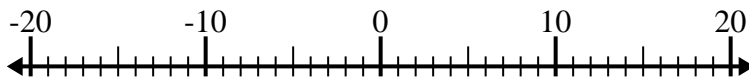
2) $(-4) + 6 = \underline{2}$



3) $(-7) + (-12) = \underline{-19}$



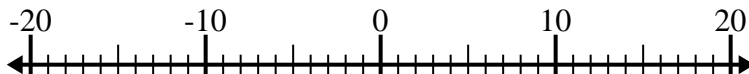
4) $(-4) - 8 = \underline{-12}$



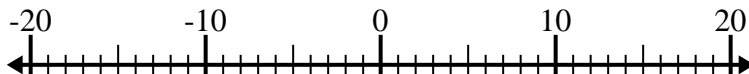
5) $10 + (-1) = \underline{9}$



6) $(-6) - 5 = \underline{-11}$



7) $(-5) - (-1) = \underline{-4}$



8) $7 + (-1) = \underline{6}$



9) $8 - (-4) = \underline{12}$



10) $14 - (-4) = \underline{18}$

**Answers**1. **-6**2. **2**3. **-19**4. **-12**5. **9**6. **-11**7. **-4**8. **6**9. **12**10. **18**