



Solve each problem. Use the numberline if needed.

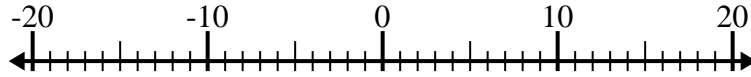
Answers

1) $(-4) - (-1) =$ _____



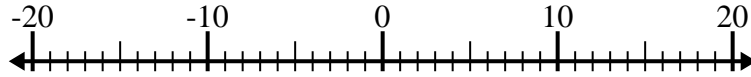
1. _____

2) $(-11) + 14 =$ _____



2. _____

3) $(-8) - 12 =$ _____



3. _____

4) $4 + (-5) =$ _____



4. _____

5) $11 - (-3) =$ _____



5. _____

6) $(-13) - 6 =$ _____



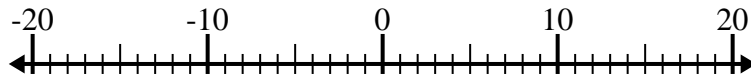
6. _____

7) $12 + (-8) =$ _____



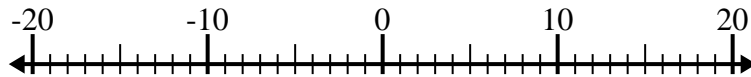
7. _____

8) $(-7) - (-12) =$ _____



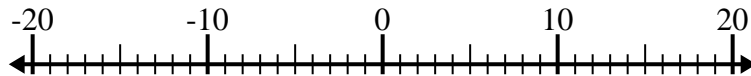
8. _____

9) $(-3) + (-1) =$ _____



9. _____

10) $(-5) + 2 =$ _____



10. _____



Solve each problem. Use the numberline if needed.

1) $(-4) - (-1) = \underline{-3}$



2) $(-11) + 14 = \underline{3}$



3) $(-8) - 12 = \underline{-20}$



4) $4 + (-5) = \underline{-1}$



5) $11 - (-3) = \underline{14}$



6) $(-13) - 6 = \underline{-19}$



7) $12 + (-8) = \underline{4}$



8) $(-7) - (-12) = \underline{5}$



9) $(-3) + (-1) = \underline{-4}$



10) $(-5) + 2 = \underline{-3}$

**Answers**1. **-3**2. **3**3. **-20**4. **-1**5. **14**6. **-19**7. **4**8. **5**9. **-4**10. **-3**