



Solve each problem. Use the numberline if needed.

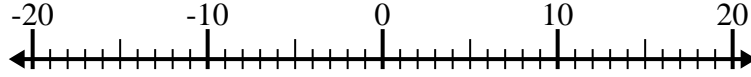
**Answers**

1)  $12 + (-15) =$  \_\_\_\_\_



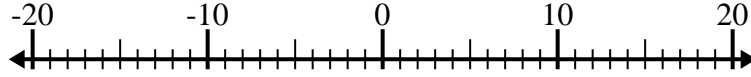
1. \_\_\_\_\_

2)  $(-8) - (-6) =$  \_\_\_\_\_



2. \_\_\_\_\_

3)  $5 - (-9) =$  \_\_\_\_\_



3. \_\_\_\_\_

4)  $(-10) + (-6) =$  \_\_\_\_\_



4. \_\_\_\_\_

5)  $3 + (-15) =$  \_\_\_\_\_



5. \_\_\_\_\_

6)  $(-12) - (-14) =$  \_\_\_\_\_



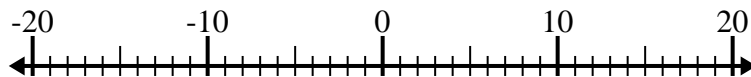
6. \_\_\_\_\_

7)  $(-11) - 7 =$  \_\_\_\_\_



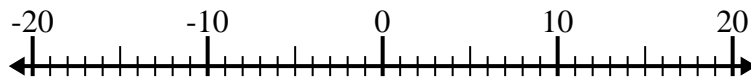
7. \_\_\_\_\_

8)  $(-4) + 10 =$  \_\_\_\_\_



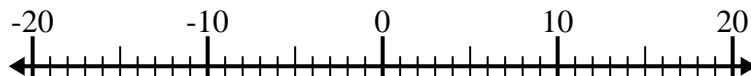
8. \_\_\_\_\_

9)  $(-13) - 2 =$  \_\_\_\_\_



9. \_\_\_\_\_

10)  $(-13) + (-7) =$  \_\_\_\_\_

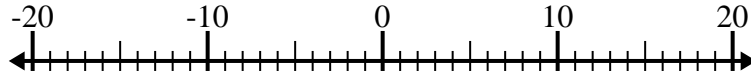


10. \_\_\_\_\_

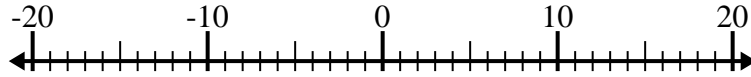


Solve each problem. Use the numberline if needed.

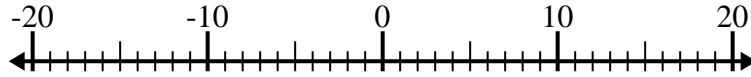
1)  $12 + (-15) = \underline{-3}$



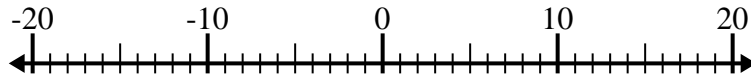
2)  $(-8) - (-6) = \underline{-2}$



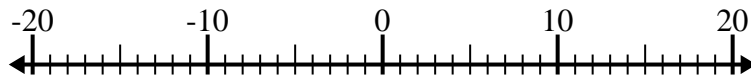
3)  $5 - (-9) = \underline{14}$



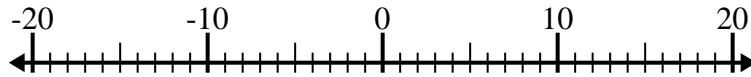
4)  $(-10) + (-6) = \underline{-16}$



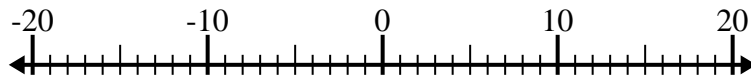
5)  $3 + (-15) = \underline{-12}$



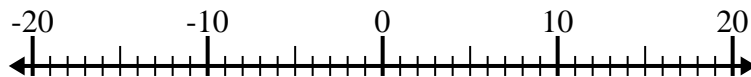
6)  $(-12) - (-14) = \underline{2}$



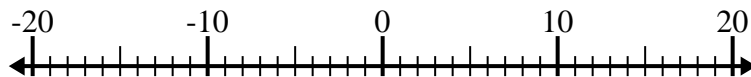
7)  $(-11) - 7 = \underline{-18}$



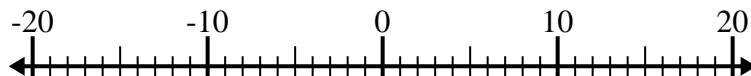
8)  $(-4) + 10 = \underline{6}$



9)  $(-13) - 2 = \underline{-15}$



10)  $(-13) + (-7) = \underline{-20}$

Answers1. **-3**2. **-2**3. **14**4. **-16**5. **-12**6. **2**7. **-18**8. **6**9. **-15**10. **-20**