



Solve each problem.

Answers

- 1) At Adam's Restaurant a group with two adults and seven children came in to eat. If each meal cost six dollars, how much was the bill?
- 2) Robin was selling her necklaces at a garage sale. She sold two bead necklaces and four gem stone necklaces. If each necklace cost three dollars, how much money did she earn?
- 3) A pet store has nine bird cages. If each cage has eight parrots and two parakeets in it, how many birds does the pet store have total?
- 4) Carol was organizing her book case making sure each of the shelves had exactly seven books on it. If she had two shelves of mystery books and six shelves of picture books, how many books did she have total?
- 5) At the town carnival Oliver rode the ferris wheel four times and the bumper cars three times. If each ride cost six tickets, how many tickets did he use?
- 6) While shopping for music online, Vanessa bought eight country albums and two pop albums. Each album came with a lyric sheet and had five songs. How many songs did Vanessa buy total?
- 7) Lana bought three new chairs and three new tables for her house. If she spent nine minutes on each piece furniture putting it together, how many minutes did it take her to finish?
- 8) Amy was playing a video game where she scores five points for each treasure she finds. If she found two treasures on the first level and eight on the second, what would her score be?
- 9) Victor was putting his spare change into piles. He had four piles of quarters and four piles of dimes. If each pile had eight coins in it, how many coins did he have total?
- 10) While playing a trivia game, Paul answered four questions correct in the first half and five questions correct in the second half. If each question was worth three points, what was his final score?

1. _____
2. _____
3. _____
4. _____
5. _____
6. _____
7. _____
8. _____
9. _____
10. _____



Solve each problem.

- 1) At Adam's Restaurant a group with two adults and seven children came in to eat. If each meal cost six dollars, how much was the bill?
- 2) Robin was selling her necklaces at a garage sale. She sold two bead necklaces and four gem stone necklaces. If each necklace cost three dollars, how much money did she earn?
- 3) A pet store has nine bird cages. If each cage has eight parrots and two parakeets in it, how many birds does the pet store have total?
- 4) Carol was organizing her book case making sure each of the shelves had exactly seven books on it. If she had two shelves of mystery books and six shelves of picture books, how many books did she have total?
- 5) At the town carnival Oliver rode the ferris wheel four times and the bumper cars three times. If each ride cost six tickets, how many tickets did he use?
- 6) While shopping for music online, Vanessa bought eight country albums and two pop albums. Each album came with a lyric sheet and had five songs. How many songs did Vanessa buy total?
- 7) Lana bought three new chairs and three new tables for her house. If she spent nine minutes on each piece furniture putting it together, how many minutes did it take her to finish?
- 8) Amy was playing a video game where she scores five points for each treasure she finds. If she found two treasures on the first level and eight on the second, what would her score be?
- 9) Victor was putting his spare change into piles. He had four piles of quarters and four piles of dimes. If each pile had eight coins in it, how many coins did he have total?
- 10) While playing a trivia game, Paul answered four questions correct in the first half and five questions correct in the second half. If each question was worth three points, what was his final score?

Answers

1. 54
2. 18
3. 90
4. 56
5. 42
6. 50
7. 54
8. 50
9. 64
10. 27



Solve each problem.

Answers

- 1) While shopping for music online, Haley bought five country albums and four pop albums. Each album came with a lyric sheet and had three songs. How many songs did Haley buy total?
- 2) April's discount flowers was having a sale where each flower was three dollars. If Carol bought seven roses and three daisies, how much did she spend?
- 3) At Cody's Restaurant a group with four adults and four children came in to eat. If each meal cost five dollars, how much was the bill?
- 4) Bianca bought four new chairs and five new tables for her house. If she spent seven minutes on each piece furniture putting it together, how many minutes did it take her to finish?
- 5) There were six friends playing a video game online when three more players joined the game. If each player had seven lives, how many lives did they have total?
- 6) Victor was collecting cans for recycling. On Saturday he filled three bags up and on Sunday he filled three more bags. If each bag had eight cans in it, how many cans did he pick up total?
- 7) Olivia was playing a video game where she scores five points for each treasure she finds. If she found six treasures on the first level and three on the second, what would her score be?
- 8) Debby had seven pages of math homework and two pages of reading homework. If each page had four problems on it, how many problems did she have to complete total?
- 9) A waiter had nine tables he was waiting on, with five women and five men at each table. How many customers total did the waiter have?
- 10) While playing a trivia game, Henry answered two questions correct in the first half and six questions correct in the second half. If each question was worth seven points, what was his final score?

1. _____
2. _____
3. _____
4. _____
5. _____
6. _____
7. _____
8. _____
9. _____
10. _____

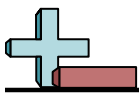


Solve each problem.

- 1) While shopping for music online, Haley bought five country albums and four pop albums. Each album came with a lyric sheet and had three songs. How many songs did Haley buy total?
- 2) April's discount flowers was having a sale where each flower was three dollars. If Carol bought seven roses and three daisies, how much did she spend?
- 3) At Cody's Restaurant a group with four adults and four children came in to eat. If each meal cost five dollars, how much was the bill?
- 4) Bianca bought four new chairs and five new tables for her house. If she spent seven minutes on each piece furniture putting it together, how many minutes did it take her to finish?
- 5) There were six friends playing a video game online when three more players joined the game. If each player had seven lives, how many lives did they have total?
- 6) Victor was collecting cans for recycling. On Saturday he filled three bags up and on Sunday he filled three more bags. If each bag had eight cans in it, how many cans did he pick up total?
- 7) Olivia was playing a video game where she scores five points for each treasure she finds. If she found six treasures on the first level and three on the second, what would her score be?
- 8) Debby had seven pages of math homework and two pages of reading homework. If each page had four problems on it, how many problems did she have to complete total?
- 9) A waiter had nine tables he was waiting on, with five women and five men at each table. How many customers total did the waiter have?
- 10) While playing a trivia game, Henry answered two questions correct in the first half and six questions correct in the second half. If each question was worth seven points, what was his final score?

Answers

1. 27
2. 30
3. 40
4. 63
5. 63
6. 48
7. 45
8. 36
9. 90
10. 56



Solve each problem.

Answers

- 1) Faye was playing a video game where she scores three points for each treasure she finds. If she found eight treasures on the first level and two on the second, what would her score be?
- 2) A pet store has nine bird cages. If each cage has five parrots and five parakeets in it, how many birds does the pet store have total?
- 3) Janet was organizing her book case making sure each of the shelves had exactly three books on it. If she had three shelves of mystery books and six shelves of picture books, how many books did she have total?
- 4) Lana bought eight new chairs and two new tables for her house. If she spent four minutes on each piece furniture putting it together, how many minutes did it take her to finish?
- 5) Amy had three pages of math homework and six pages of reading homework. If each page had eight problems on it, how many problems did she have to complete total?
- 6) A waiter had eight tables he was waiting on, with eight women and two men at each table. How many customers total did the waiter have?
- 7) While playing a trivia game, Adam answered three questions correct in the first half and four questions correct in the second half. If each question was worth four points, what was his final score?
- 8) April's discount flowers was having a sale where each flower was seven dollars. If Vanessa bought eight roses and two daisies, how much did she spend?
- 9) Carol's favorite band was holding a concert where tickets were seven dollars each. Carol bought five tickets for herself and her friends and two extra tickets in case anyone else wanted to go. How much did she spend?
- 10) While shopping for music online, Nancy bought six country albums and three pop albums. Each album came with a lyric sheet and had nine songs. How many songs did Nancy buy total?

1. _____
2. _____
3. _____
4. _____
5. _____
6. _____
7. _____
8. _____
9. _____
10. _____

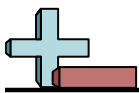


Solve each problem.

- 1) Faye was playing a video game where she scores three points for each treasure she finds. If she found eight treasures on the first level and two on the second, what would her score be?
- 2) A pet store has nine bird cages. If each cage has five parrots and five parakeets in it, how many birds does the pet store have total?
- 3) Janet was organizing her book case making sure each of the shelves had exactly three books on it. If she had three shelves of mystery books and six shelves of picture books, how many books did she have total?
- 4) Lana bought eight new chairs and two new tables for her house. If she spent four minutes on each piece furniture putting it together, how many minutes did it take her to finish?
- 5) Amy had three pages of math homework and six pages of reading homework. If each page had eight problems on it, how many problems did she have to complete total?
- 6) A waiter had eight tables he was waiting on, with eight women and two men at each table. How many customers total did the waiter have?
- 7) While playing a trivia game, Adam answered three questions correct in the first half and four questions correct in the second half. If each question was worth four points, what was his final score?
- 8) April's discount flowers was having a sale where each flower was seven dollars. If Vanessa bought eight roses and two daisies, how much did she spend?
- 9) Carol's favorite band was holding a concert where tickets were seven dollars each. Carol bought five tickets for herself and her friends and two extra tickets in case anyone else wanted to go. How much did she spend?
- 10) While shopping for music online, Nancy bought six country albums and three pop albums. Each album came with a lyric sheet and had nine songs. How many songs did Nancy buy total?

Answers

1. 30
2. 90
3. 27
4. 40
5. 72
6. 80
7. 28
8. 70
9. 49
10. 81



Solve each problem.

Answers

- 1) Gwen was selling her necklaces at a garage sale. She sold five bead necklaces and two gem stone necklaces. If each necklace cost four dollars, how much money did she earn?
- 2) Lana was unboxing some of her old winter clothes. She found nine boxes of clothing and inside each box there were four scarves and five mittens. How many pieces of winter clothing did Lana have total?
- 3) While playing a trivia game, Henry answered six questions correct in the first half and four questions correct in the second half. If each question was worth nine points, what was his final score?
- 4) While shopping for music online, Debby bought seven country albums and two pop albums. Each album came with a lyric sheet and had eight songs. How many songs did Debby buy total?
- 5) There were three friends playing a video game online when four more players joined the game. If each player had nine lives, how many lives did they have total?
- 6) Emily bought four new chairs and four new tables for her house. If she spent five minutes on each piece furniture putting it together, how many minutes did it take her to finish?
- 7) Katie's favorite band was holding a concert where tickets were four dollars each. Katie bought four tickets for herself and her friends and four extra tickets in case anyone else wanted to go. How much did she spend?
- 8) A pet store has four bird cages. If each cage has eight parrots and two parakeets in it, how many birds does the pet store have total?
- 9) Paige was playing a video game where she scores four points for each treasure she finds. If she found two treasures on the first level and six on the second, what would her score be?
- 10) Luke was working as a sacker at a grocery store where he made eight dollars an hour. On Monday he worked six hours and on Tuesday he worked four hours. How much money did Luke make in those two days?

1. _____
2. _____
3. _____
4. _____
5. _____
6. _____
7. _____
8. _____
9. _____
10. _____



Solve each problem.

- 1) Gwen was selling her necklaces at a garage sale. She sold five bead necklaces and two gem stone necklaces. If each necklace cost four dollars, how much money did she earn?
- 2) Lana was unboxing some of her old winter clothes. She found nine boxes of clothing and inside each box there were four scarves and five mittens. How many pieces of winter clothing did Lana have total?
- 3) While playing a trivia game, Henry answered six questions correct in the first half and four questions correct in the second half. If each question was worth nine points, what was his final score?
- 4) While shopping for music online, Debby bought seven country albums and two pop albums. Each album came with a lyric sheet and had eight songs. How many songs did Debby buy total?
- 5) There were three friends playing a video game online when four more players joined the game. If each player had nine lives, how many lives did they have total?
- 6) Emily bought four new chairs and four new tables for her house. If she spent five minutes on each piece furniture putting it together, how many minutes did it take her to finish?
- 7) Katie's favorite band was holding a concert where tickets were four dollars each. Katie bought four tickets for herself and her friends and four extra tickets in case anyone else wanted to go. How much did she spend?
- 8) A pet store has four bird cages. If each cage has eight parrots and two parakeets in it, how many birds does the pet store have total?
- 9) Paige was playing a video game where she scores four points for each treasure she finds. If she found two treasures on the first level and six on the second, what would her score be?
- 10) Luke was working as a sacker at a grocery store where he made eight dollars an hour. On Monday he worked six hours and on Tuesday he worked four hours. How much money did Luke make in those two days?

Answers

1. 28
2. 81
3. 90
4. 72
5. 63
6. 40
7. 32
8. 40
9. 32
10. 80



Solve each problem.

Answers

- 1) There were two friends playing a video game online when seven more players joined the game. If each player had five lives, how many lives did they have total?
- 2) A waiter had five tables he was waiting on, with seven women and three men at each table. How many customers total did the waiter have?
- 3) George and his friend were buying trick decks from the magic shop for three dollars each. How much did they spend if George bought three decks and his friend bought five decks?
- 4) Paul was collecting cans for recycling. On Saturday he filled eight bags up and on Sunday he filled two more bags. If each bag had nine cans in it, how many cans did he pick up total?
- 5) While shopping for music online, Vanessa bought three country albums and two pop albums. Each album came with a lyric sheet and had seven songs. How many songs did Vanessa buy total?
- 6) Janet was unboxing some of her old winter clothes. She found four boxes of clothing and inside each box there were four scarves and six mittens. How many pieces of winter clothing did Janet have total?
- 7) At the town carnival Frank rode the ferris wheel five times and the bumper cars three times. If each ride cost eight tickets, how many tickets did he use?
- 8) While playing a trivia game, Jerry answered five questions correct in the first half and five questions correct in the second half. If each question was worth five points, what was his final score?
- 9) A pet store has nine bird cages. If each cage has six parrots and three parakeets in it, how many birds does the pet store have total?
- 10) Carol was organizing her book case making sure each of the shelves had exactly eight books on it. If she had eight shelves of mystery books and two shelves of picture books, how many books did she have total?

1. _____
2. _____
3. _____
4. _____
5. _____
6. _____
7. _____
8. _____
9. _____
10. _____



Solve each problem.

- 1) There were two friends playing a video game online when seven more players joined the game. If each player had five lives, how many lives did they have total?
- 2) A waiter had five tables he was waiting on, with seven women and three men at each table. How many customers total did the waiter have?
- 3) George and his friend were buying trick decks from the magic shop for three dollars each. How much did they spend if George bought three decks and his friend bought five decks?
- 4) Paul was collecting cans for recycling. On Saturday he filled eight bags up and on Sunday he filled two more bags. If each bag had nine cans in it, how many cans did he pick up total?
- 5) While shopping for music online, Vanessa bought three country albums and two pop albums. Each album came with a lyric sheet and had seven songs. How many songs did Vanessa buy total?
- 6) Janet was unboxing some of her old winter clothes. She found four boxes of clothing and inside each box there were four scarves and six mittens. How many pieces of winter clothing did Janet have total?
- 7) At the town carnival Frank rode the ferris wheel five times and the bumper cars three times. If each ride cost eight tickets, how many tickets did he use?
- 8) While playing a trivia game, Jerry answered five questions correct in the first half and five questions correct in the second half. If each question was worth five points, what was his final score?
- 9) A pet store has nine bird cages. If each cage has six parrots and three parakeets in it, how many birds does the pet store have total?
- 10) Carol was organizing her book case making sure each of the shelves had exactly eight books on it. If she had eight shelves of mystery books and two shelves of picture books, how many books did she have total?

Answers

1. 45
2. 50
3. 24
4. 90
5. 35
6. 40
7. 64
8. 50
9. 81
10. 80



Solve each problem.

Answers

- 1) There were six friends playing a video game online when four more players joined the game. If each player had eight lives, how many lives did they have total?
- 2) Frank was putting his spare change into piles. He had eight piles of quarters and two piles of dimes. If each pile had six coins in it, how many coins did he have total?
- 3) Vanessa was playing a video game where she scores six points for each treasure she finds. If she found five treasures on the first level and four on the second, what would her score be?
- 4) George bought two boxes of chocolate candy and seven boxes of caramel candy. If each box has four pieces inside it, how much candy did he have total?
- 5) At Adam's Restaurant a group with three adults and six children came in to eat. If each meal cost nine dollars, how much was the bill?
- 6) Dave was collecting cans for recycling. On Saturday he filled five bags up and on Sunday he filled three more bags. If each bag had three cans in it, how many cans did he pick up total?
- 7) Katie was organizing her book case making sure each of the shelves had exactly four books on it. If she had eight shelves of mystery books and two shelves of picture books, how many books did she have total?
- 8) A waiter had seven tables he was waiting on, with seven women and two men at each table. How many customers total did the waiter have?
- 9) Bianca was unboxing some of her old winter clothes. She found nine boxes of clothing and inside each box there were four scarves and two mittens. How many pieces of winter clothing did Bianca have total?
- 10) Lana was selling her necklaces at a garage sale. She sold two bead necklaces and three gem stone necklaces. If each necklace cost eight dollars, how much money did she earn?

1. _____

2. _____

3. _____

4. _____

5. _____

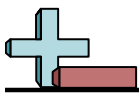
6. _____

7. _____

8. _____

9. _____

10. _____

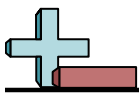


Solve each problem.

- 1) There were six friends playing a video game online when four more players joined the game. If each player had eight lives, how many lives did they have total?
- 2) Frank was putting his spare change into piles. He had eight piles of quarters and two piles of dimes. If each pile had six coins in it, how many coins did he have total?
- 3) Vanessa was playing a video game where she scores six points for each treasure she finds. If she found five treasures on the first level and four on the second, what would her score be?
- 4) George bought two boxes of chocolate candy and seven boxes of caramel candy. If each box has four pieces inside it, how much candy did he have total?
- 5) At Adam's Restaurant a group with three adults and six children came in to eat. If each meal cost nine dollars, how much was the bill?
- 6) Dave was collecting cans for recycling. On Saturday he filled five bags up and on Sunday he filled three more bags. If each bag had three cans in it, how many cans did he pick up total?
- 7) Katie was organizing her book case making sure each of the shelves had exactly four books on it. If she had eight shelves of mystery books and two shelves of picture books, how many books did she have total?
- 8) A waiter had seven tables he was waiting on, with seven women and two men at each table. How many customers total did the waiter have?
- 9) Bianca was unboxing some of her old winter clothes. She found nine boxes of clothing and inside each box there were four scarves and two mittens. How many pieces of winter clothing did Bianca have total?
- 10) Lana was selling her necklaces at a garage sale. She sold two bead necklaces and three gem stone necklaces. If each necklace cost eight dollars, how much money did she earn?

Answers

1. 80
2. 60
3. 54
4. 36
5. 81
6. 24
7. 40
8. 63
9. 54
10. 40



Solve each problem.

Answers

- 1) Henry bought seven boxes of chocolate candy and two boxes of caramel candy. If each box has three pieces inside it, how much candy did he have total?
- 2) Lana had two pages of math homework and six pages of reading homework. If each page had three problems on it, how many problems did she have to complete total?
- 3) There were eight friends playing a video game online when two more players joined the game. If each player had eight lives, how many lives did they have total?
- 4) A waiter had four tables he was waiting on, with three women and seven men at each table. How many customers total did the waiter have?
- 5) A pet store has nine bird cages. If each cage has five parrots and two parakeets in it, how many birds does the pet store have total?
- 6) Olivia bought eight new chairs and two new tables for her house. If she spent seven minutes on each piece furniture putting it together, how many minutes did it take her to finish?
- 7) While playing a trivia game, Sam answered six questions correct in the first half and four questions correct in the second half. If each question was worth nine points, what was his final score?
- 8) April's discount flowers was having a sale where each flower was four dollars. If Amy bought four roses and five daisies, how much did she spend?
- 9) Vanessa's favorite band was holding a concert where tickets were nine dollars each. Vanessa bought five tickets for herself and her friends and two extra tickets in case anyone else wanted to go. How much did she spend?
- 10) Victor was collecting cans for recycling. On Saturday he filled five bags up and on Sunday he filled four more bags. If each bag had seven cans in it, how many cans did he pick up total?

1. _____

2. _____

3. _____

4. _____

5. _____

6. _____

7. _____

8. _____

9. _____

10. _____



Solve each problem.

- 1) Henry bought seven boxes of chocolate candy and two boxes of caramel candy. If each box has three pieces inside it, how much candy did he have total?
- 2) Lana had two pages of math homework and six pages of reading homework. If each page had three problems on it, how many problems did she have to complete total?
- 3) There were eight friends playing a video game online when two more players joined the game. If each player had eight lives, how many lives did they have total?
- 4) A waiter had four tables he was waiting on, with three women and seven men at each table. How many customers total did the waiter have?
- 5) A pet store has nine bird cages. If each cage has five parrots and two parakeets in it, how many birds does the pet store have total?
- 6) Olivia bought eight new chairs and two new tables for her house. If she spent seven minutes on each piece furniture putting it together, how many minutes did it take her to finish?
- 7) While playing a trivia game, Sam answered six questions correct in the first half and four questions correct in the second half. If each question was worth nine points, what was his final score?
- 8) April's discount flowers was having a sale where each flower was four dollars. If Amy bought four roses and five daisies, how much did she spend?
- 9) Vanessa's favorite band was holding a concert where tickets were nine dollars each. Vanessa bought five tickets for herself and her friends and two extra tickets in case anyone else wanted to go. How much did she spend?
- 10) Victor was collecting cans for recycling. On Saturday he filled five bags up and on Sunday he filled four more bags. If each bag had seven cans in it, how many cans did he pick up total?

Answers

1. 27
2. 24
3. 80
4. 40
5. 63
6. 70
7. 90
8. 36
9. 63
10. 63

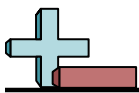


Solve each problem.

Answers

- 1) There were eight friends playing a video game online when two more players joined the game. If each player had six lives, how many lives did they have total?
- 2) Rachel had six pages of math homework and three pages of reading homework. If each page had three problems on it, how many problems did she have to complete total?
- 3) Oliver was collecting cans for recycling. On Saturday he filled six bags up and on Sunday he filled two more bags. If each bag had eight cans in it, how many cans did he pick up total?
- 4) Paul was putting his spare change into piles. He had five piles of quarters and four piles of dimes. If each pile had nine coins in it, how many coins did he have total?
- 5) Amy bought four new chairs and five new tables for her house. If she spent three minutes on each piece furniture putting it together, how many minutes did it take her to finish?
- 6) Bianca was organizing her book case making sure each of the shelves had exactly four books on it. If she had two shelves of mystery books and four shelves of picture books, how many books did she have total?
- 7) George bought seven boxes of chocolate candy and two boxes of caramel candy. If each box has five pieces inside it, how much candy did he have total?
- 8) Lana was unboxing some of her old winter clothes. She found eight boxes of clothing and inside each box there were eight scarves and two mittens. How many pieces of winter clothing did Lana have total?
- 9) At the town carnival Ned rode the ferris wheel four times and the bumper cars four times. If each ride cost five tickets, how many tickets did he use?
- 10) Sarah was selling her necklaces at a garage sale. She sold three bead necklaces and five gem stone necklaces. If each necklace cost nine dollars, how much money did she earn?

1. _____
2. _____
3. _____
4. _____
5. _____
6. _____
7. _____
8. _____
9. _____
10. _____



Solve each problem.

Answers

- | | |
|--|---------------|
| 1) There were eight friends playing a video game online when two more players joined the game. If each player had six lives, how many lives did they have total? | 1. <u>60</u> |
| 2) Rachel had six pages of math homework and three pages of reading homework. If each page had three problems on it, how many problems did she have to complete total? | 2. <u>27</u> |
| 3) Oliver was collecting cans for recycling. On Saturday he filled six bags up and on Sunday he filled two more bags. If each bag had eight cans in it, how many cans did he pick up total? | 3. <u>64</u> |
| 4) Paul was putting his spare change into piles. He had five piles of quarters and four piles of dimes. If each pile had nine coins in it, how many coins did he have total? | 4. <u>81</u> |
| 5) Amy bought four new chairs and five new tables for her house. If she spent three minutes on each piece furniture putting it together, how many minutes did it take her to finish? | 5. <u>27</u> |
| 6) Bianca was organizing her book case making sure each of the shelves had exactly four books on it. If she had two shelves of mystery books and four shelves of picture books, how many books did she have total? | 6. <u>24</u> |
| 7) George bought seven boxes of chocolate candy and two boxes of caramel candy. If each box has five pieces inside it, how much candy did he have total? | 7. <u>45</u> |
| 8) Lana was unboxing some of her old winter clothes. She found eight boxes of clothing and inside each box there were eight scarves and two mittens. How many pieces of winter clothing did Lana have total? | 8. <u>80</u> |
| 9) At the town carnival Ned rode the ferris wheel four times and the bumper cars four times. If each ride cost five tickets, how many tickets did he use? | 9. <u>40</u> |
| 10) Sarah was selling her necklaces at a garage sale. She sold three bead necklaces and five gem stone necklaces. If each necklace cost nine dollars, how much money did she earn? | 10. <u>72</u> |



Solve each problem.

Answers

- 1) Bianca's favorite band was holding a concert where tickets were nine dollars each. Bianca bought five tickets for herself and her friends and five extra tickets in case anyone else wanted to go. How much did she spend?
- 2) At Luke's Restaurant a group with five adults and two children came in to eat. If each meal cost eight dollars, how much was the bill?
- 3) Jerry bought six boxes of chocolate candy and two boxes of caramel candy. If each box has eight pieces inside it, how much candy did he have total?
- 4) Carol was organizing her book case making sure each of the shelves had exactly three books on it. If she had three shelves of mystery books and seven shelves of picture books, how many books did she have total?
- 5) At the town carnival George rode the ferris wheel six times and the bumper cars two times. If each ride cost five tickets, how many tickets did he use?
- 6) John was putting his spare change into piles. He had four piles of quarters and four piles of dimes. If each pile had six coins in it, how many coins did he have total?
- 7) Sarah was unboxing some of her old winter clothes. She found seven boxes of clothing and inside each box there were six scarves and two mittens. How many pieces of winter clothing did Sarah have total?
- 8) Emily had four pages of math homework and two pages of reading homework. If each page had nine problems on it, how many problems did she have to complete total?
- 9) Frank was working as a sacker at a grocery store where he made six dollars an hour. On Monday he worked eight hours and on Tuesday he worked two hours. How much money did Frank make in those two days?
- 10) There were two friends playing a video game online when seven more players joined the game. If each player had nine lives, how many lives did they have total?

1. _____
2. _____
3. _____
4. _____
5. _____
6. _____
7. _____
8. _____
9. _____
10. _____

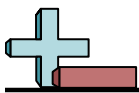


Solve each problem.

- 1) Bianca's favorite band was holding a concert where tickets were nine dollars each. Bianca bought five tickets for herself and her friends and five extra tickets in case anyone else wanted to go. How much did she spend?
- 2) At Luke's Restaurant a group with five adults and two children came in to eat. If each meal cost eight dollars, how much was the bill?
- 3) Jerry bought six boxes of chocolate candy and two boxes of caramel candy. If each box has eight pieces inside it, how much candy did he have total?
- 4) Carol was organizing her book case making sure each of the shelves had exactly three books on it. If she had three shelves of mystery books and seven shelves of picture books, how many books did she have total?
- 5) At the town carnival George rode the ferris wheel six times and the bumper cars two times. If each ride cost five tickets, how many tickets did he use?
- 6) John was putting his spare change into piles. He had four piles of quarters and four piles of dimes. If each pile had six coins in it, how many coins did he have total?
- 7) Sarah was unboxing some of her old winter clothes. She found seven boxes of clothing and inside each box there were six scarves and two mittens. How many pieces of winter clothing did Sarah have total?
- 8) Emily had four pages of math homework and two pages of reading homework. If each page had nine problems on it, how many problems did she have to complete total?
- 9) Frank was working as a sacker at a grocery store where he made six dollars an hour. On Monday he worked eight hours and on Tuesday he worked two hours. How much money did Frank make in those two days?
- 10) There were two friends playing a video game online when seven more players joined the game. If each player had nine lives, how many lives did they have total?

Answers

1. 90
2. 56
3. 64
4. 30
5. 40
6. 48
7. 56
8. 54
9. 60
10. 81



Solve each problem.

Answers

- 1) At the town carnival Tom rode the ferris wheel three times and the bumper cars five times. If each ride cost eight tickets, how many tickets did he use?
- 2) There were seven friends playing a video game online when three more players joined the game. If each player had seven lives, how many lives did they have total?
- 3) Victor and his friend were buying trick decks from the magic shop for seven dollars each. How much did they spend if Victor bought eight decks and his friend bought two decks?
- 4) April's discount flowers was having a sale where each flower was seven dollars. If Isabel bought three roses and six daisies, how much did she spend?
- 5) Edward was putting his spare change into piles. He had three piles of quarters and five piles of dimes. If each pile had six coins in it, how many coins did he have total?
- 6) Nancy's favorite band was holding a concert where tickets were seven dollars each. Nancy bought eight tickets for herself and her friends and two extra tickets in case anyone else wanted to go. How much did she spend?
- 7) At Henry's Restaurant a group with two adults and three children came in to eat. If each meal cost three dollars, how much was the bill?
- 8) Paul was working as a sacker at a grocery store where he made nine dollars an hour. On Monday he worked seven hours and on Tuesday he worked two hours. How much money did Paul make in those two days?
- 9) Robin bought eight new chairs and two new tables for her house. If she spent six minutes on each piece furniture putting it together, how many minutes did it take her to finish?
- 10) While shopping for music online, Olivia bought four country albums and four pop albums. Each album came with a lyric sheet and had four songs. How many songs did Olivia buy total?

1. _____
2. _____
3. _____
4. _____
5. _____
6. _____
7. _____
8. _____
9. _____
10. _____



Solve each problem.

- 1) At the town carnival Tom rode the ferris wheel three times and the bumper cars five times. If each ride cost eight tickets, how many tickets did he use?
- 2) There were seven friends playing a video game online when three more players joined the game. If each player had seven lives, how many lives did they have total?
- 3) Victor and his friend were buying trick decks from the magic shop for seven dollars each. How much did they spend if Victor bought eight decks and his friend bought two decks?
- 4) April's discount flowers was having a sale where each flower was seven dollars. If Isabel bought three roses and six daisies, how much did she spend?
- 5) Edward was putting his spare change into piles. He had three piles of quarters and five piles of dimes. If each pile had six coins in it, how many coins did he have total?
- 6) Nancy's favorite band was holding a concert where tickets were seven dollars each. Nancy bought eight tickets for herself and her friends and two extra tickets in case anyone else wanted to go. How much did she spend?
- 7) At Henry's Restaurant a group with two adults and three children came in to eat. If each meal cost three dollars, how much was the bill?
- 8) Paul was working as a sacker at a grocery store where he made nine dollars an hour. On Monday he worked seven hours and on Tuesday he worked two hours. How much money did Paul make in those two days?
- 9) Robin bought eight new chairs and two new tables for her house. If she spent six minutes on each piece furniture putting it together, how many minutes did it take her to finish?
- 10) While shopping for music online, Olivia bought four country albums and four pop albums. Each album came with a lyric sheet and had four songs. How many songs did Olivia buy total?

Answers

1. 64
2. 70
3. 70
4. 63
5. 48
6. 70
7. 15
8. 81
9. 60
10. 32