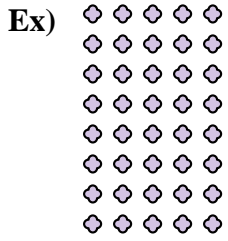




Write each array as a multiplication problem and solve.

Answers




Ex. $8 \times 5 = 40$

1. _____

2. _____

3. _____

4. _____





5. _____

6. _____

7. _____

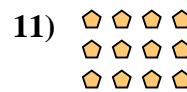

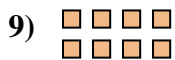
8. _____

9. _____



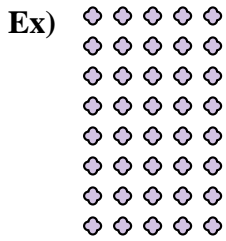
10. _____

11. _____





Write each array as a multiplication problem and solve.



Answers

Ex. $8 \times 5 = 40$

1. $9 \times 3 = 27$

2. $4 \times 5 = 20$

3. $5 \times 8 = 40$

4. $10 \times 2 = 20$

5. $5 \times 6 = 30$

6. $9 \times 5 = 45$

7. $8 \times 2 = 16$

8. $7 \times 8 = 56$

9. $2 \times 4 = 8$

10. $10 \times 4 = 40$

11. $3 \times 4 = 12$

