





Use the array provided to solve each problem.


1) $49 \times 20 =$



2) $43 \times 20 =$




3) $38 \times 30 =$




4) $20 \times 39 =$



5) $35 \times 20 =$



6) $30 \times 22 =$



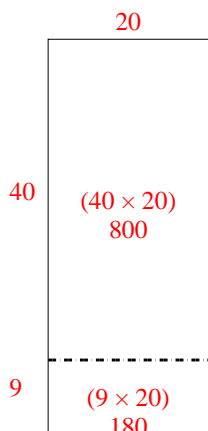
Answers

- 1. _____
- 2. _____
- 3. _____
- 4. _____
- 5. _____
- 6. _____

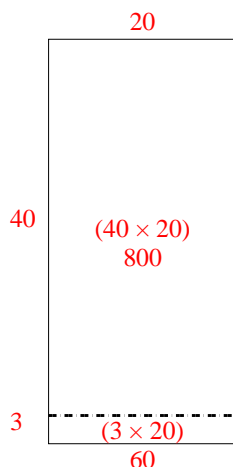


Use the array provided to solve each problem.

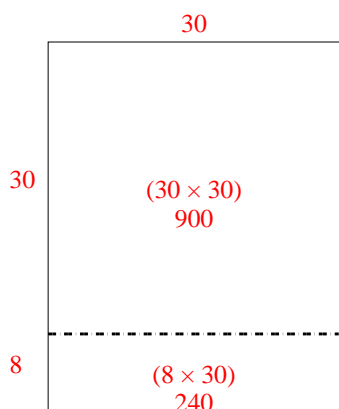
1) $49 \times 20 =$



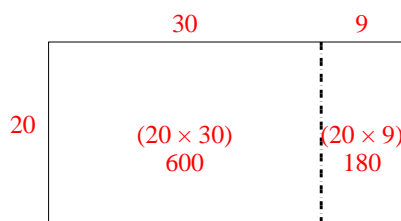
2) $43 \times 20 =$



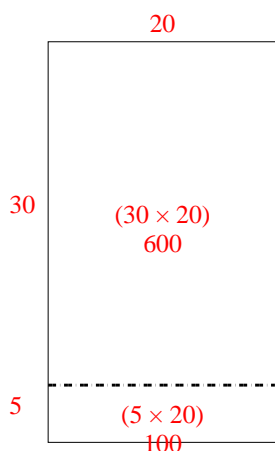
3) $38 \times 30 =$



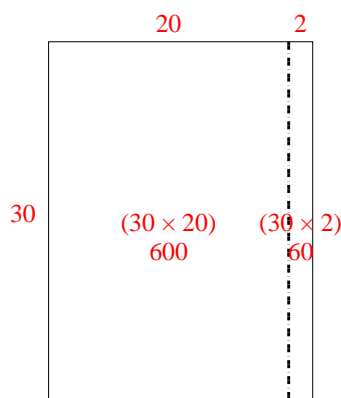
4) $20 \times 39 =$



5) $35 \times 20 =$



6) $30 \times 22 =$



Answers

1. 980

2. 860

3. 1,140

4. 780

5. 700

6. 660