





Use the array provided to solve each problem.


1) $45 \times 43 =$




2) $39 \times 45 =$




3) $45 \times 23 =$



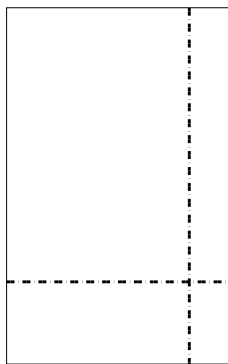
4) $32 \times 24 =$



5) $38 \times 18 =$



6) $39 \times 25 =$



Answers

1. _____

2. _____

3. _____

4. _____

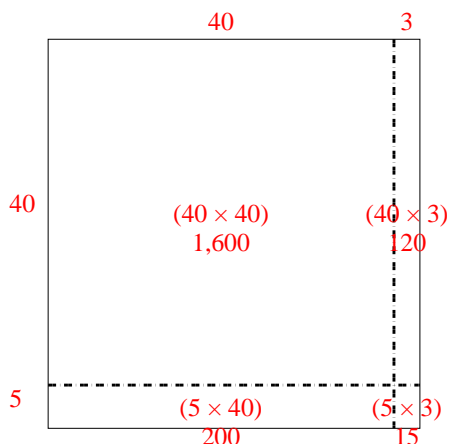
5. _____

6. _____

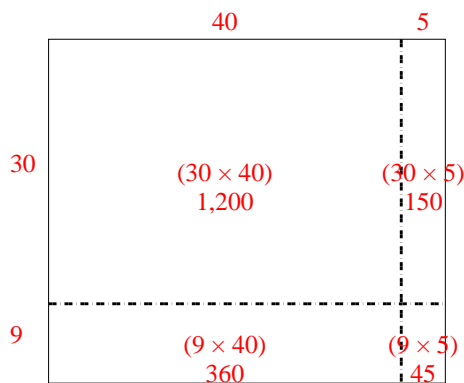


Use the array provided to solve each problem.

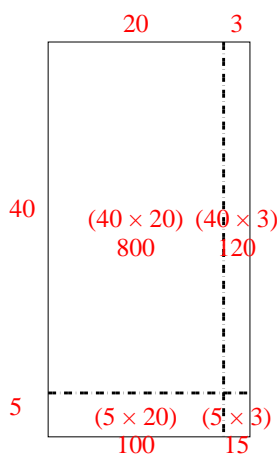
1) $45 \times 43 =$



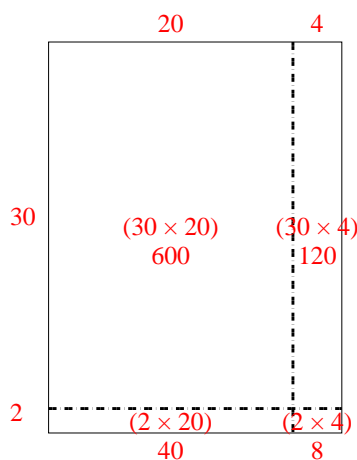
2) $39 \times 45 =$



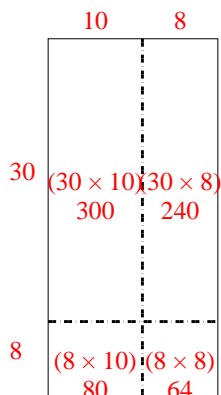
3) $45 \times 23 =$



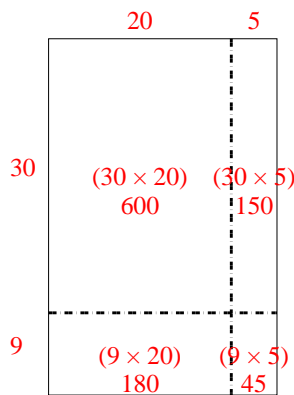
4) $32 \times 24 =$



5) $38 \times 18 =$



6) $39 \times 25 =$



Answers

1. **1,935**

2. **1,755**

3. **1,035**

4. **768**

5. **684**

6. **975**