





Use the array provided to solve each problem.


1) $20 \times 22 =$




2) $10 \times 13 =$




3) $15 \times 10 =$




4) $16 \times 10 =$



5) $12 \times 10 =$



6) $10 \times 11 =$



Answers

1. _____

2. _____

3. _____

4. _____

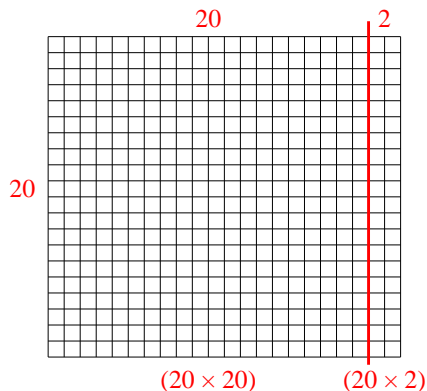
5. _____

6. _____

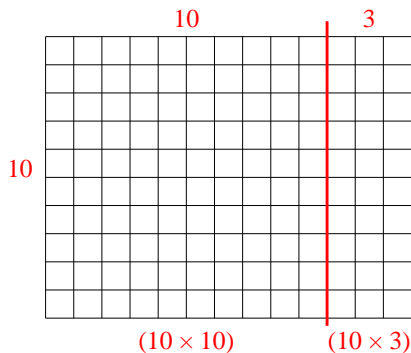


Use the array provided to solve each problem.

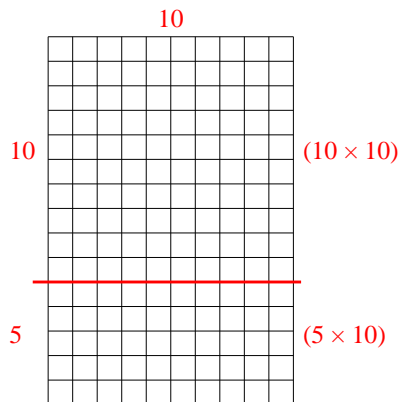
1) $20 \times 22 =$



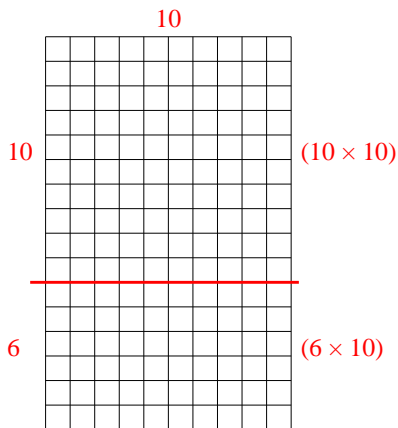
2) $10 \times 13 =$



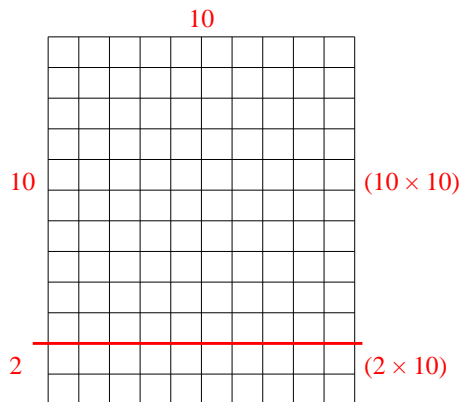
3) $15 \times 10 =$



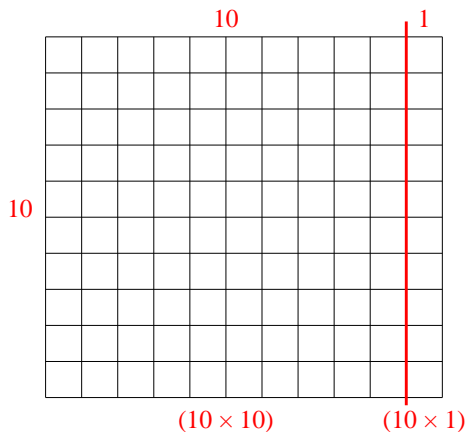
4) $16 \times 10 =$



5) $12 \times 10 =$



6) $10 \times 11 =$



Answers

1. **440**

2. **130**

3. **150**

4. **160**

5. **120**

6. **110**