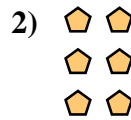




Write each array as an addition problem and solve.



Answers

Ex. $2+2=4$

1. _____

2. _____

3. _____

4. _____

5. _____

6. _____

7. _____

8. _____

9. _____


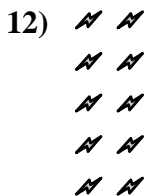
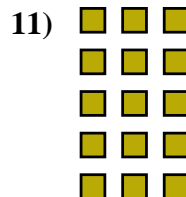
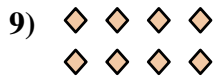




10. _____

11. _____

12. _____

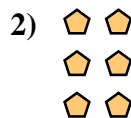
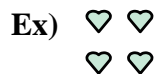
13. _____

14. _____







Write each array as an addition problem and solve.



Answers

Ex. 2+2=4



1. 3+3+3=9

2. 2+2+2=6


3. 3+3+3+3=12

4. 4+4+4=12

5. 2+2+2+2=8

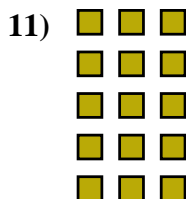

6. 4+4+4+4=16

7. 5+5+5=15



8. 5+5+5+5=20

9. 4+4=8





10. 3+3=6

11. 3+3+3+3+3=15

12. 2+2+2+2+2=10

13. 5+5=10



14. 4+4+4+4+4=20