




Use the units provided to measure the width of each of the bars.



Answers

1. _____

2. _____

3. _____

4. _____

5. _____

6. _____

7. _____




8. _____

9. _____

10. _____



Use the units provided to measure the width of each of the bars.



Answers

1. 5

2. 10

3. 13

4. 1

5. 11

6. 15

7. 8

8. 14

9. 6

10. 9