



Determine which letter best represents the length / height.

**Answers**

**Millimeter (mm)**

**Centimeter (cm)**

**Meter (m)**

**Kilometer (km)**

A millimeter is about the thickness of a credit card.


10 mm = 1 cm.  
The metal portion of a pencil is about 1 cm. A ruler is about 30 centimeters.

100 cm = 1 m  
From the floor to a door knob is about 1 meter.

1,000 m = 1 km  
Most major roads are at least a kilometer long.




1)



Cooking Pot

- A. 10 centimeters
- B. 3 centimeters
- C. 60 centimeters
- D. 25 centimeters

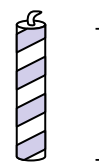
2)



Hammer

- A. 3 centimeters
- B. 40 centimeters
- C. 10 centimeters
- D. 1 meter

3)



Candle

- A. 20 centimeters
- B. 30 centimeters
- C. 5 centimeters
- D. 2 kilometers

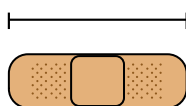
4)



Glue Stick

- A. 30 centimeters
- B. 6 kilometers
- C. 25 centimeters
- D. 10 centimeters

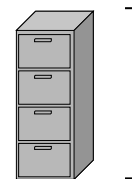
5)



Bandage

- A. 60 centimeters
- B. 3 kilometers
- C. 9 centimeters
- D. 1 meter

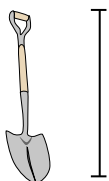
6)



File Cabinet

- A. 1.5 millimeters
- B. 30 millimeters
- C. 60 centimeters
- D. 30 centimeters

7)



Shovel

- A. 60 centimeters
- B. 1 meter
- C. 30 centimeters
- D. 3 meters

8)



Tree Height

- A. 2 kilometers
- B. 100 centimeters
- C. 5 meters
- D. 30 centimeters

9)

Flash Drive

- A. 60 centimeters
- B. 30 centimeters
- C. 15 centimeters
- D. 6 centimeters

1. \_\_\_\_\_
2. \_\_\_\_\_
3. \_\_\_\_\_
4. \_\_\_\_\_
5. \_\_\_\_\_
6. \_\_\_\_\_
7. \_\_\_\_\_
8. \_\_\_\_\_
9. \_\_\_\_\_



Determine which letter best represents the length / height.

**Answers**

**Millimeter (mm)**

**Centimeter (cm)**

**Meter (m)**

**Kilometer (km)**

A millimeter is about the thickness of a credit card.


10 mm = 1 cm.  
The metal portion of a pencil is about 1 cm. A ruler is about 30 centimeters.

100 cm = 1 m  
From the floor to a door knob is about 1 meter.

1,000 m = 1 km  
Most major roads are at least a kilometer long.




1)



Cooking Pot

- A. 10 centimeters
- B. 3 centimeters
- C. 60 centimeters
- D. 25 centimeters

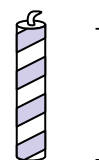
2)



Hammer

- A. 3 centimeters
- B. 40 centimeters
- C. 10 centimeters
- D. 1 meter

3)



Candle

- A. 20 centimeters
- B. 30 centimeters
- C. 5 centimeters
- D. 2 kilometers

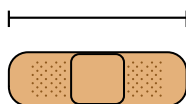
4)



Glue Stick

- A. 30 centimeters
- B. 6 kilometers
- C. 25 centimeters
- D. 10 centimeters

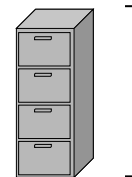
5)



Bandage

- A. 60 centimeters
- B. 3 kilometers
- C. 9 centimeters
- D. 1 meter

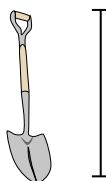
6)



File Cabinet

- A. 1.5 millimeters
- B. 30 millimeters
- C. 60 centimeters
- D. 30 centimeters

7)



Shovel

- A. 60 centimeters
- B. 1 meter
- C. 30 centimeters
- D. 3 meters

8)



Tree Height

- A. 2 kilometers
- B. 100 centimeters
- C. 5 meters
- D. 30 centimeters

9)

Flash Drive

- A. 60 centimeters
- B. 30 centimeters
- C. 15 centimeters
- D. 6 centimeters

- 1.     **D**
- 2.     **B**
- 3.     **C**
- 4.     **D**
- 5.     **C**
- 6.     **A**
- 7.     **B**
- 8.     **C**
- 9.     **D**