



Determine which letter best represents the length / height.

**Answers**

**Millimeter (mm)**

A millimeter is about the thickness of a credit card.



**Centimeter (cm)**

10 mm = 1 cm.

The metal portion of a pencil is about 1 cm. A ruler is about 30 centimeters.



**Meter (m)**

100 cm = 1 m

From the floor to a door knob is about 1 meter.



**Kilometer (km)**


1,000 m = 1 km

Most major roads are at least a kilometer long.



1. \_\_\_\_\_
2. \_\_\_\_\_
3. \_\_\_\_\_
4. \_\_\_\_\_
5. \_\_\_\_\_
6. \_\_\_\_\_
7. \_\_\_\_\_
8. \_\_\_\_\_
9. \_\_\_\_\_


1)



Notebook Paper

- A. 15 centimeters
- B. 25 centimeters
- C. 60 centimeters
- D. 1 meter

2)



Mountain

- A. 9 meters
- B. 3 kilometers
- C. 60 centimeters
- D. 700 millimeters

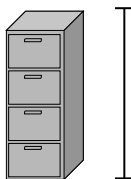
3)



Pen

- A. 5 meters
- B. 30 millimeters
- C. 12 centimeters
- D. 30 centimeters

4)



File Cabinet

- A. 30 millimeters
- B. 60 centimeters
- C. 1.5 millimeters
- D. 30 centimeters

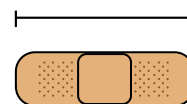
5)



Frog

- A. 4 millimeters
- B. 60 centimeters
- C. 8 centimeters
- D. 20 centimeters

6)



Bandage

- A. 9 centimeters
- B. 3 kilometers
- C. 60 centimeters
- D. 1 meter

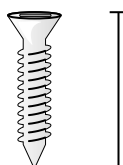
7)



Bug

- A. 30 centimeters
- B. 7 millimeters
- C. 5 centimeters
- D. 10 centimeters

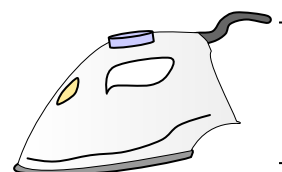
8)



Screw

- A. 3 centimeters
- B. 25 centimeters
- C. 20 centimeters
- D. 1 meter

9)



Clothes Iron

- A. 40 centimeters
- B. 15 centimeters
- C. 60 centimeters
- D. 240 centimeters



Determine which letter best represents the length / height.

**Answers**

**Millimeter (mm)**

**Centimeter (cm)**

**Meter (m)**


**Kilometer (km)**

A millimeter is about the thickness of a credit card.


10 mm = 1 cm.  
The metal portion of a pencil is about 1 cm. A ruler is about 30 centimeters.

100 cm = 1 m  
From the floor to a door knob is about 1 meter.

1,000 m = 1 km  
Most major roads are at least a kilometer long.



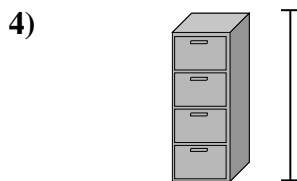
- Notebook Paper  
A. 15 centimeters  
B. 25 centimeters  
C. 60 centimeters  
D. 1 meter




- Mountain  
A. 9 meters  
B. 3 kilometers  
C. 60 centimeters  
D. 700 millimeters



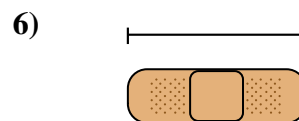
- Pen  
A. 5 meters  
B. 30 millimeters  
C. 12 centimeters  
D. 30 centimeters




- File Cabinet  
A. 30 millimeters  
B. 60 centimeters  
C. 1.5 millimeters  
D. 30 centimeters



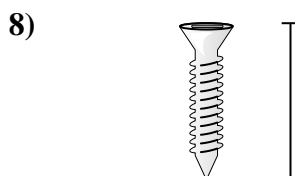
- Frog  
A. 4 millimeters  
B. 60 centimeters  
C. 8 centimeters  
D. 20 centimeters



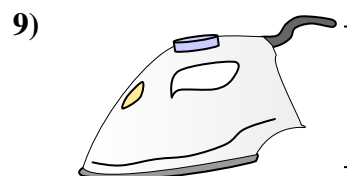
- Bandage  
A. 9 centimeters  
B. 3 kilometers  
C. 60 centimeters  
D. 1 meter



- Bug  
A. 30 centimeters  
B. 7 millimeters  
C. 5 centimeters  
D. 10 centimeters



- Screw  
A. 3 centimeters  
B. 25 centimeters  
C. 20 centimeters  
D. 1 meter



- Clothes Iron  
A. 40 centimeters  
B. 15 centimeters  
C. 60 centimeters  
D. 240 centimeters

1. **B**  
2. **B**  
3. **C**  
4. **C**  
5. **C**  
6. **A**  
7. **B**  
8. **A**  
9. **B**