




Measure the width and height of each block in inches and in centimeters.

Answers

Ex)



Ex. 1 1/2 1 1/2 3.8 3.8


1. _____

2. _____

3. _____

4. _____


1)



2)



3)




4)





Measure the width and height of each block in inches and in centimeters.

Ex)



Answers

Ex. 1 1/2 1 1/2 3.8 3.8


1. 1 1 1/2 2.5 3.8

2. 5 0 1/2 12.7 1.3

3. 2 1/2 1 1/2 6.4 3.8

4. 3 0 1/2 7.6 1.3


1)



2)



3)



4)

