




Measure the width and height of each block in inches and in centimeters.

Ex)



1)




2)



3)



4)



**Answers**

Ex. 4 1/2 1 11.4 2.5

1. \_\_\_\_\_

2. \_\_\_\_\_


3. \_\_\_\_\_

4. \_\_\_\_\_



Measure the width and height of each block in inches and in centimeters.

Ex)



**Answers**

Ex. 4 1/2 **1** 11.4 **2.5**

1. 5 1/2 1 1/2 **14** **3.8**

2. **1** 0 1/2 **2.5** **1.3**

3. 1 1/2 0 1/2 **3.8** **1.3**

4. **4** 1 1/2 **10.2** **3.8**

1)



2)



3)



4)

