

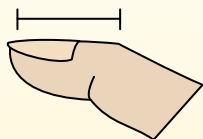


Determine which letter best represents the length / height.

**Answers**

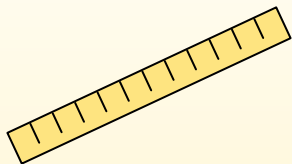
**Inch (in)**

An inch is about the distance of the last joint of your finger.



**Foot (ft)**

A foot is 12 inches. The length of a ruler.



**Yard (yd)**

1 yard is the same as 3 feet. From the floor to a door knob is about 1 yard.



**Mile (mi)**

A mile is 5,280 feet. Most major roads are at least a mile long.



1. \_\_\_\_\_
2. \_\_\_\_\_
3. \_\_\_\_\_
4. \_\_\_\_\_
5. \_\_\_\_\_
6. \_\_\_\_\_
7. \_\_\_\_\_
8. \_\_\_\_\_
9. \_\_\_\_\_


1)



Popcorn

- A. 1 inch
- B. 3 feet
- C. 1 mile
- D. 7 inches

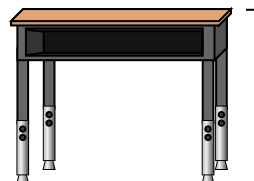
2)



Lollipop

- A. 1 mile
- B. 1 foot
- C. 5 inches
- D. 3 inches


3)



Desk

- A. 2 yards
- B. 2 feet
- C. 11 inches
- D. 6 inches

4)



Ferris Wheel

- A. 6 yards
- B. 1 mile
- C. 75 feet
- D. 100 inches


5)



Toothbrush

- A. 10 feet
- B. 1 yard
- C. 7 inches
- D. 4 inches

6)



Can of Soda

- A. 1 yard
- B. 4 inches
- C. 1 foot
- D. 1 inch

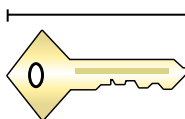
7)



Frog

- A. 2 feet
- B. 1 foot
- C. 3 inches
- D. 9 inches

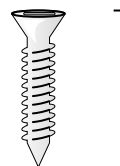
8)



Key

- A. 5 feet
- B. 2 inches
- C. 6 inches
- D. 2 yards

9)



Screw

- A. 1 yard
- B. 10 inches
- C. 8 inches
- D. 1 inch



Determine which letter best represents the length / height.

**Answers**

**Inch (in)**

**Foot (ft)**

**Yard (yd)**


**Mile (mi)**

An inch is about the distance of the last joint of your finger.

A foot is 12 inches. The length of a ruler.

1 yard is the same as 3 feet. From the floor to a door knob is about 1 yard.

A mile is 5,280 feet. Most major roads are at least a mile long.




1)



Popcorn

- A. 1 inch
- B. 3 feet
- C. 1 mile
- D. 7 inches

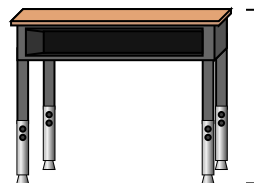
2)



Lollipop

- A. 1 mile
- B. 1 foot
- C. 5 inches
- D. 3 inches


3)



Desk

- A. 2 yards
- B. 2 feet
- C. 11 inches
- D. 6 inches

4)



Ferris Wheel

- A. 6 yards
- B. 1 mile
- C. 75 feet
- D. 100 inches


5)



Toothbrush

- A. 10 feet
- B. 1 yard
- C. 7 inches
- D. 4 inches

6)



Can of Soda

- A. 1 yard
- B. 4 inches
- C. 1 foot
- D. 1 inch

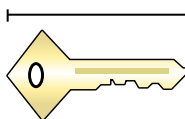
7)



Frog

- A. 2 feet
- B. 1 foot
- C. 3 inches
- D. 9 inches

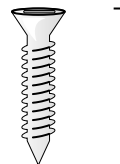
8)



Key

- A. 5 feet
- B. 2 inches
- C. 6 inches
- D. 2 yards

9)



Screw

- A. 1 yard
- B. 10 inches
- C. 8 inches
- D. 1 inch

- 1.   **A**
- 2.   **C**
- 3.   **B**
- 4.   **C**
- 5.   **C**
- 6.   **B**
- 7.   **C**
- 8.   **B**
- 9.   **D**

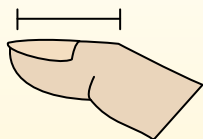


Determine which letter best represents the length / height.

**Answers**


**Inch (in)**

An inch is about the distance of the last joint of your finger.



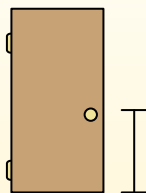
**Foot (ft)**

A foot is 12 inches. The length of a ruler.



**Yard (yd)**

1 yard is the same as 3 feet. From the floor to a door knob is about 1 yard.




**Mile (mi)**

A mile is 5,280 feet. Most major roads are at least a mile long.



1. \_\_\_\_\_
2. \_\_\_\_\_
3. \_\_\_\_\_
4. \_\_\_\_\_
5. \_\_\_\_\_
6. \_\_\_\_\_
7. \_\_\_\_\_
8. \_\_\_\_\_
9. \_\_\_\_\_

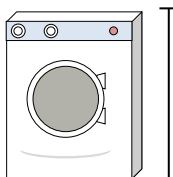
1)



Can of Beans

- A. 1 mile
- B. 2 yards
- C. 4 inches
- D. 4 feet

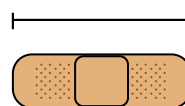
2)



Washing Machine

- A. 1 foot
- B. 4 inches
- C. 2 yards
- D. 3 feet


3)



Bandage

- A. 2 feet
- B. 2 miles
- C. 3 inches
- D. 1 yard


4)



Mountain

- A. 10 yards
- B. 20 feet
- C. 2 miles
- D. 300 inches


5)



Slice of Bread

- A. 4 inches
- B. 4 feet
- C. 2 yards
- D. 10 inches

6)



Elephant


- A. 5 feet
- B. 4 yards
- C. 1 mile
- D. 18 inches

7)

Dog

- A. 4 yards
- B. 2 feet
- C. 2 yards
- D. 4 inches

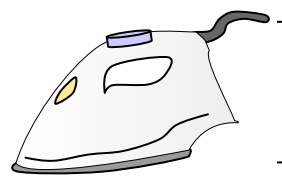
8)



Notebook Paper

- A. 11 inches
- B. 2 feet
- C. 6 inches
- D. 1 yard

9)



Clothes Iron

- A. 8 feet
- B. 2 feet
- C. 15 inches
- D. 6 inches

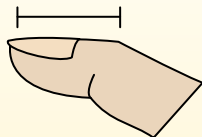


Determine which letter best represents the length / height.

**Answers**

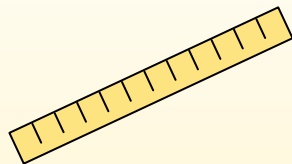
**Inch (in)**

An inch is about the distance of the last joint of your finger.



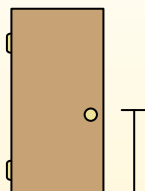
**Foot (ft)**

A foot is 12 inches. The length of a ruler.



**Yard (yd)**

1 yard is the same as 3 feet. From the floor to a door knob is about 1 yard.



**Mile (mi)**

A mile is 5,280 feet. Most major roads are at least a mile long.



1. **C**

2. **D**

3. **C**

4. **C**

5. **A**

6. **B**

7. **B**

8. **A**

9. **D**

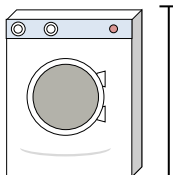
1)



Can of Beans

- A. 1 mile
- B. 2 yards
- C. 4 inches
- D. 4 feet

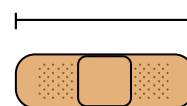
2)



Washing Machine

- A. 1 foot
- B. 4 inches
- C. 2 yards
- D. 3 feet


3)



Bandage

- A. 2 feet
- B. 2 miles
- C. 3 inches
- D. 1 yard


4)



Mountain

- A. 10 yards
- B. 20 feet
- C. 2 miles
- D. 300 inches


5)



Slice of Bread

- A. 4 inches
- B. 4 feet
- C. 2 yards
- D. 10 inches

6)



Elephant


- A. 5 feet
- B. 4 yards
- C. 1 mile
- D. 18 inches

7)

Dog

- A. 4 yards
- B. 2 feet
- C. 2 yards
- D. 4 inches

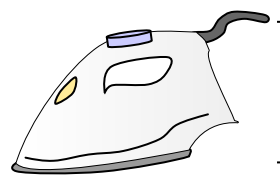
8)



Notebook Paper

- A. 11 inches
- B. 2 feet
- C. 6 inches
- D. 1 yard

9)



Clothes Iron

- A. 8 feet
- B. 2 feet
- C. 15 inches
- D. 6 inches

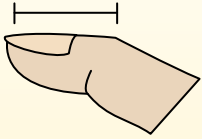


Determine which letter best represents the length / height.

**Answers**

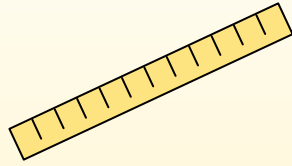
**Inch (in)**

An inch is about the distance of the last joint of your finger.



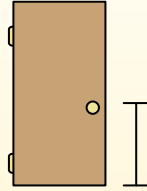
**Foot (ft)**

A foot is 12 inches. The length of a ruler.



**Yard (yd)**

1 yard is the same as 3 feet. From the floor to a door knob is about 1 yard.



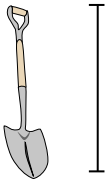
**Mile (mi)**

A mile is 5,280 feet. Most major roads are at least a mile long.



1. \_\_\_\_\_
2. \_\_\_\_\_
3. \_\_\_\_\_
4. \_\_\_\_\_
5. \_\_\_\_\_
6. \_\_\_\_\_
7. \_\_\_\_\_
8. \_\_\_\_\_
9. \_\_\_\_\_

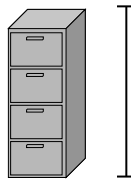
1)



Shovel

- A. 4 feet
- B. 2 feet
- C. 3 yards
- D. 11 inches


2)



File Cabinet

- A. 11 inches
- B. 2 feet
- C. 5 feet
- D. 1 foot


3)



Mountain

- A. 10 yards
- B. 2 miles
- C. 20 feet
- D. 300 inches

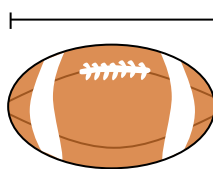
4)



Notebook Paper

- A. 2 feet
- B. 11 inches
- C. 6 inches
- D. 1 yard

5)



Football

- A. 11 inches
- B. 1 inch
- C. 2 feet
- D. 1 yard


6)



Pen

- A. 5 inches
- B. 1 foot
- C. 12 inches
- D. 5 yards

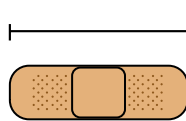
7)



Hammer

- A. 16 inches
- B. 1 inch
- C. 4 inches
- D. 1 yard

8)



Bandage

- A. 3 inches
- B. 1 yard
- C. 2 feet
- D. 2 miles

9)



Popcorn

- A. 1 inch
- B. 1 mile
- C. 7 inches
- D. 3 feet



Determine which letter best represents the length / height.

**Answers**

**Inch (in)**

**Foot (ft)**

**Yard (yd)**

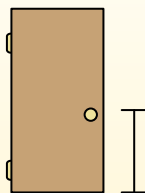
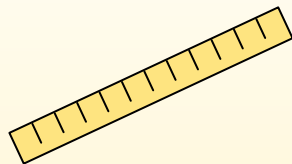
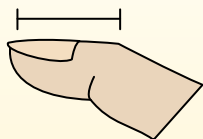
**Mile (mi)**

An inch is about the distance of the last joint of your finger.

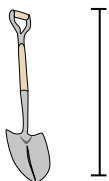
A foot is 12 inches. The length of a ruler.

1 yard is the same as 3 feet. From the floor to a door knob is about 1 yard.

A mile is 5,280 feet. Most major roads are at least a mile long.



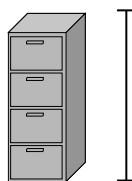
1)



Shovel

- A. 4 feet
- B. 2 feet
- C. 3 yards
- D. 11 inches


2)



File Cabinet

- A. 11 inches
- B. 2 feet
- C. 5 feet
- D. 1 foot


3)



Mountain

- A. 10 yards
- B. 2 miles
- C. 20 feet
- D. 300 inches

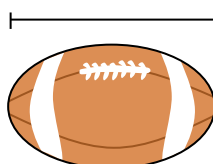
4)



Notebook Paper

- A. 2 feet
- B. 11 inches
- C. 6 inches
- D. 1 yard


5)



Football

- A. 11 inches
- B. 1 inch
- C. 2 feet
- D. 1 yard


6)



Pen

- A. 5 inches
- B. 1 foot
- C. 12 inches
- D. 5 yards

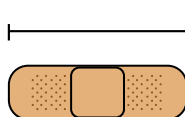
7)



Hammer

- A. 16 inches
- B. 1 inch
- C. 4 inches
- D. 1 yard

8)



Bandage

- A. 3 inches
- B. 1 yard
- C. 2 feet
- D. 2 miles

9)



Popcorn

- A. 1 inch
- B. 1 mile
- C. 7 inches
- D. 3 feet

- 1.   **A**
- 2.   **C**
- 3.   **B**
- 4.   **B**
- 5.   **A**
- 6.   **A**
- 7.   **A**
- 8.   **A**
- 9.   **A**

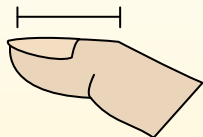


Determine which letter best represents the length / height.

**Answers**

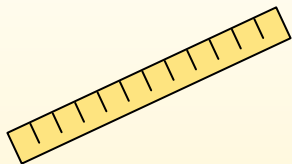
**Inch (in)**

An inch is about the distance of the last joint of your finger.



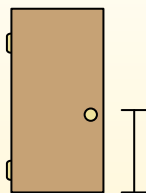
**Foot (ft)**

A foot is 12 inches. The length of a ruler.



**Yard (yd)**

1 yard is the same as 3 feet. From the floor to a door knob is about 1 yard.




**Mile (mi)**

A mile is 5,280 feet. Most major roads are at least a mile long.



1. \_\_\_\_\_
2. \_\_\_\_\_
3. \_\_\_\_\_
4. \_\_\_\_\_
5. \_\_\_\_\_
6. \_\_\_\_\_
7. \_\_\_\_\_
8. \_\_\_\_\_
9. \_\_\_\_\_


1)



Notebook Paper

- A. 1 yard
- B. 6 inches
- C. 2 feet
- D. 11 inches

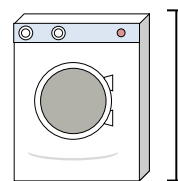
2)



Gallon of Milk

- A. 11 feet
- B. 9 inches
- C. 6 inches
- D. 3 inches

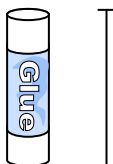
3)



Washing Machine

- A. 4 inches
- B. 1 foot
- C. 3 feet
- D. 2 yards


4)



Glue Stick

- A. 1 foot
- B. 3 inches
- C. 4 miles
- D. 10 inches

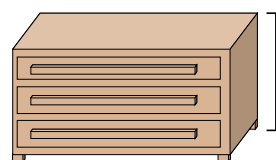
5)



Elephant

- A. 18 inches
- B. 4 yards
- C. 5 feet
- D. 1 mile

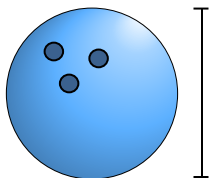
6)



Dresser

- A. 18 inches
- B. 12 inches
- C. 3 feet
- D. 3 yards

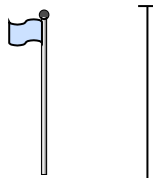
7)



Bowling Ball Height

- A. 4 inches
- B. 1 yard
- C. 10 inches
- D. 10 feet

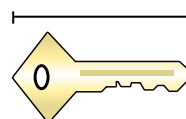
8)



Flag Pole

- A. 1 mile
- B. 10 yards
- C. 12 inches
- D. 5 feet

9)



Key

- A. 5 feet
- B. 2 inches
- C. 6 inches
- D. 2 yards



Determine which letter best represents the length / height.

**Answers**

**Inch (in)**

**Foot (ft)**

**Yard (yd)**

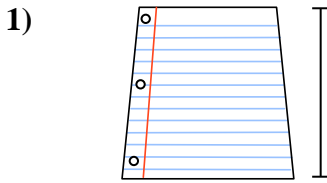
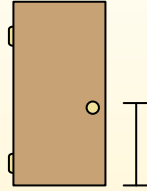
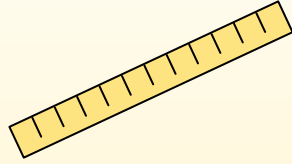
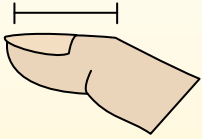
**Mile (mi)**

An inch is about the distance of the last joint of your finger.

A foot is 12 inches. The length of a ruler.


1 yard is the same as 3 feet. From the floor to a door knob is about 1 yard.

A mile is 5,280 feet. Most major roads are at least a mile long.



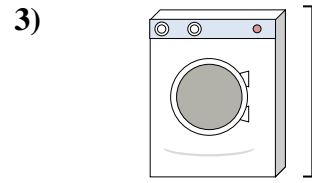
Notebook Paper

- A. 1 yard
- B. 6 inches
- C. 2 feet
- D. 11 inches



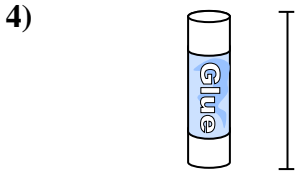
Gallon of Milk

- A. 11 feet
- B. 9 inches
- C. 6 inches
- D. 3 inches




Washing Machine

- A. 4 inches
- B. 1 foot
- C. 3 feet
- D. 2 yards



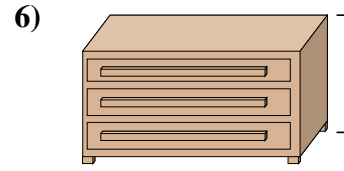
Glue Stick

- A. 1 foot
- B. 3 inches
- C. 4 miles
- D. 10 inches



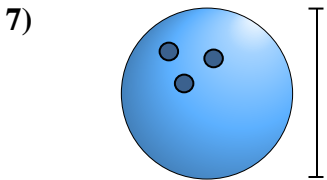
Elephant

- A. 18 inches
- B. 4 yards
- C. 5 feet
- D. 1 mile



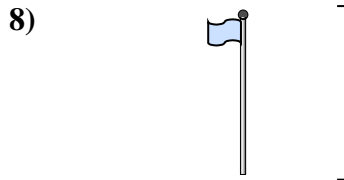
Dresser

- A. 18 inches
- B. 12 inches
- C. 3 feet
- D. 3 yards



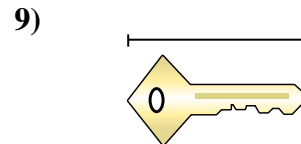
Bowling Ball Height

- A. 4 inches
- B. 1 yard
- C. 10 inches
- D. 10 feet



Flag Pole

- A. 1 mile
- B. 10 yards
- C. 12 inches
- D. 5 feet



Key

- A. 5 feet
- B. 2 inches
- C. 6 inches
- D. 2 yards

- 1. **D**
- 2. **B**
- 3. **C**
- 4. **B**
- 5. **B**
- 6. **C**
- 7. **C**
- 8. **B**
- 9. **B**





Determine which letter best represents the length / height.

**Answers**


**Inch (in)**

An inch is about the distance of the last joint of your finger.



**Foot (ft)**

A foot is 12 inches. The length of a ruler.



**Yard (yd)**

1 yard is the same as 3 feet. From the floor to a door knob is about 1 yard.




**Mile (mi)**

A mile is 5,280 feet. Most major roads are at least a mile long.



1. \_\_\_\_\_
2. \_\_\_\_\_
3. \_\_\_\_\_
4. \_\_\_\_\_
5. \_\_\_\_\_
6. \_\_\_\_\_
7. \_\_\_\_\_
8. \_\_\_\_\_
9. \_\_\_\_\_


1)



Notebook Paper

- A. 6 inches
- B. 11 inches
- C. 1 yard
- D. 2 feet

2)



Mountain

- A. 20 feet
- B. 2 miles
- C. 300 inches
- D. 10 yards

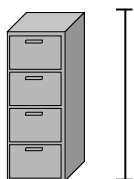
3)



Pen

- A. 5 yards
- B. 12 inches
- C. 5 inches
- D. 1 foot

4)



File Cabinet

- A. 1 foot
- B. 2 feet
- C. 5 feet
- D. 11 inches

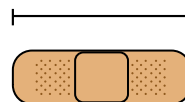
5)



Frog

- A. 1 foot
- B. 2 feet
- C. 3 inches
- D. 9 inches

6)



Bandage

- A. 3 inches
- B. 2 miles
- C. 2 feet
- D. 1 yard

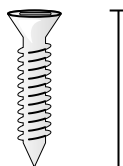
7)



Bug

- A. 3 yards
- B. 1 inch
- C. 1 foot
- D. 3 inches


8)



Screw

- A. 1 inch
- B. 10 inches
- C. 8 inches
- D. 1 yard

9)



Clothes Iron

- A. 15 inches
- B. 6 inches
- C. 2 feet
- D. 8 feet



Determine which letter best represents the length / height.

**Answers**

**Inch (in)**

**Foot (ft)**

**Yard (yd)**


**Mile (mi)**

An inch is about the distance of the last joint of your finger.

A foot is 12 inches. The length of a ruler.


1 yard is the same as 3 feet. From the floor to a door knob is about 1 yard.

A mile is 5,280 feet. Most major roads are at least a mile long.



Notebook Paper

- A. 6 inches
- B. 11 inches
- C. 1 yard
- D. 2 feet



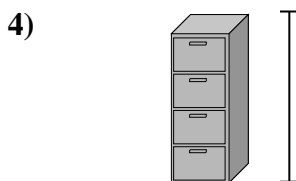
Mountain

- A. 20 feet
- B. 2 miles
- C. 300 inches
- D. 10 yards




Pen

- A. 5 yards
- B. 12 inches
- C. 5 inches
- D. 1 foot



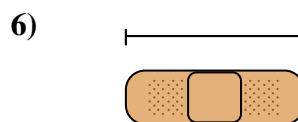
File Cabinet

- A. 1 foot
- B. 2 feet
- C. 5 feet
- D. 11 inches



Frog

- A. 1 foot
- B. 2 feet
- C. 3 inches
- D. 9 inches



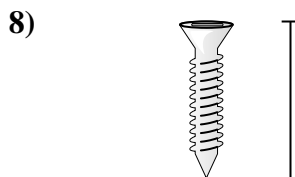
Bandage

- A. 3 inches
- B. 2 miles
- C. 2 feet
- D. 1 yard



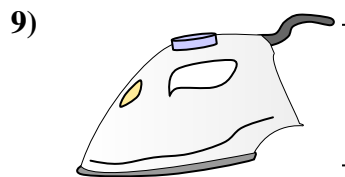
Bug

- A. 3 yards
- B. 1 inch
- C. 1 foot
- D. 3 inches



Screw

- A. 1 inch
- B. 10 inches
- C. 8 inches
- D. 1 yard



Clothes Iron

- A. 15 inches
- B. 6 inches
- C. 2 feet
- D. 8 feet

1. **B**

2. **B**

3. **C**

4. **C**

5. **C**

6. **A**

7. **B**

8. **A**

9. **B**

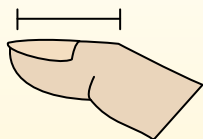


Determine which letter best represents the length / height.

**Answers**

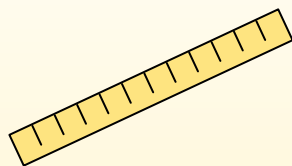
**Inch (in)**

An inch is about the distance of the last joint of your finger.



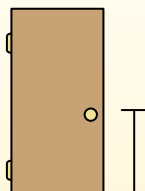
**Foot (ft)**

A foot is 12 inches. The length of a ruler.



**Yard (yd)**

1 yard is the same as 3 feet. From the floor to a door knob is about 1 yard.




**Mile (mi)**

A mile is 5,280 feet. Most major roads are at least a mile long.



1. \_\_\_\_\_
2. \_\_\_\_\_
3. \_\_\_\_\_
4. \_\_\_\_\_
5. \_\_\_\_\_
6. \_\_\_\_\_
7. \_\_\_\_\_
8. \_\_\_\_\_
9. \_\_\_\_\_


1)



Cooking Pot

- A. 4 inches
- B. 1 inch
- C. 2 feet
- D. 10 inches

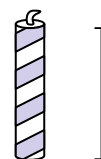
2)



Hammer

- A. 1 yard
- B. 16 inches
- C. 4 inches
- D. 1 inch

3)



Candle

- A. 8 inches
- B. 1 foot
- C. 3 inches
- D. 1 mile

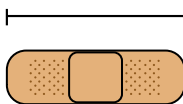
4)



Glue Stick

- A. 1 foot
- B. 4 miles
- C. 10 inches
- D. 3 inches


5)



Bandage

- A. 2 feet
- B. 2 miles
- C. 3 inches
- D. 1 yard

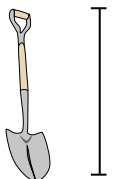
6)



File Cabinet

- A. 5 feet
- B. 1 foot
- C. 2 feet
- D. 11 inches


7)



Shovel

- A. 2 feet
- B. 4 feet
- C. 11 inches
- D. 3 yards

8)



Tree Height

- A. 1 mile
- B. 4 feet
- C. 6 yards
- D. 18 inches

9)

Flash Drive

- A. 6 inches
- B. 11 inches
- C. 2 feet
- D. 2 inches



Determine which letter best represents the length / height.

**Answers**

**Inch (in)**

**Foot (ft)**

**Yard (yd)**

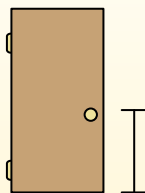
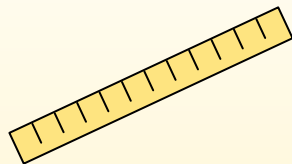
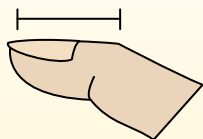
**Mile (mi)**

An inch is about the distance of the last joint of your finger.


A foot is 12 inches. The length of a ruler.

1 yard is the same as 3 feet. From the floor to a door knob is about 1 yard.

A mile is 5,280 feet. Most major roads are at least a mile long.




1)



Cooking Pot

- A. 4 inches
- B. 1 inch
- C. 2 feet
- D. 10 inches

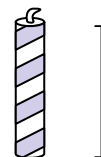
2)



Hammer

- A. 1 yard
- B. 16 inches
- C. 4 inches
- D. 1 inch

3)



Candle

- A. 8 inches
- B. 1 foot
- C. 3 inches
- D. 1 mile

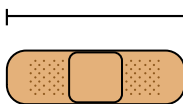
4)



Glue Stick

- A. 1 foot
- B. 4 miles
- C. 10 inches
- D. 3 inches

5)



Bandage

- A. 2 feet
- B. 2 miles
- C. 3 inches
- D. 1 yard

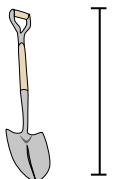
6)



File Cabinet

- A. 5 feet
- B. 1 foot
- C. 2 feet
- D. 11 inches


7)



Shovel

- A. 2 feet
- B. 4 feet
- C. 11 inches
- D. 3 yards

8)



Tree Height

- A. 1 mile
- B. 4 feet
- C. 6 yards
- D. 18 inches

9)

Flash Drive

- A. 6 inches
- B. 11 inches
- C. 2 feet
- D. 2 inches

- 1.   **D**
- 2.   **B**
- 3.   **C**
- 4.   **D**
- 5.   **C**
- 6.   **A**
- 7.   **B**
- 8.   **C**
- 9.   **D**

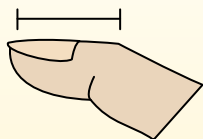


Determine which letter best represents the length / height.

**Answers**

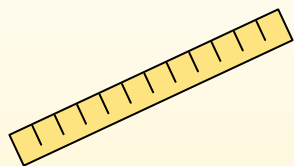
**Inch (in)**

An inch is about the distance of the last joint of your finger.



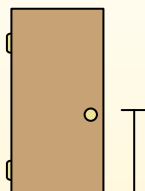
**Foot (ft)**

A foot is 12 inches. The length of a ruler.



**Yard (yd)**

1 yard is the same as 3 feet. From the floor to a door knob is about 1 yard.



**Mile (mi)**

A mile is 5,280 feet. Most major roads are at least a mile long.



1. \_\_\_\_\_
2. \_\_\_\_\_
3. \_\_\_\_\_
4. \_\_\_\_\_
5. \_\_\_\_\_
6. \_\_\_\_\_
7. \_\_\_\_\_
8. \_\_\_\_\_
9. \_\_\_\_\_

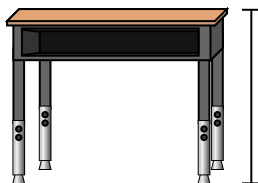
1)



Pen

- A. 5 inches
- B. 12 inches
- C. 1 foot
- D. 5 yards

2)



Desk

- A. 6 inches
- B. 2 yards
- C. 2 feet
- D. 11 inches

3)



Frog

- A. 9 inches
- B. 3 inches
- C. 1 foot
- D. 2 feet

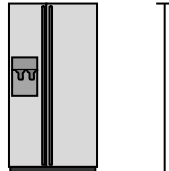
4)



Bicycle

- A. 3 inches
- B. 1 yard
- C. 3 yards
- D. 10 inches

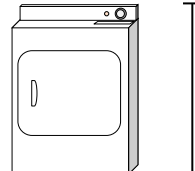
5)



Refrigerator

- A. 6 feet
- B. 1 foot
- C. 12 inches
- D. 4 yards

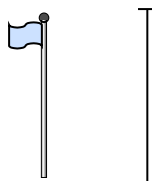
6)



Clothes Dryer

- A. 2 feet
- B. 1 yard
- C. 11 inches
- D. 6 inches


7)



Flag Pole

- A. 5 feet
- B. 10 yards
- C. 1 mile
- D. 12 inches

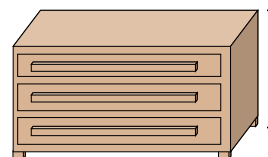
8)



Tennis Ball

- A. 1 foot
- B. 7 inches
- C. 3 inches
- D. 2 feet

9)



Dresser

- A. 18 inches
- B. 3 feet
- C. 3 yards
- D. 12 inches



Determine which letter best represents the length / height.

**Answers**

**Inch (in)**

**Foot (ft)**

**Yard (yd)**

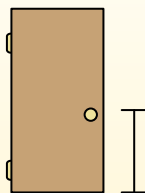
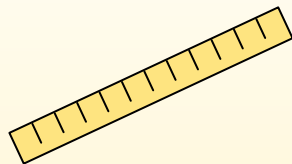
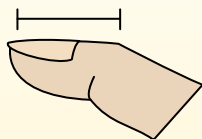
**Mile (mi)**

An inch is about the distance of the last joint of your finger.

A foot is 12 inches. The length of a ruler.

1 yard is the same as 3 feet. From the floor to a door knob is about 1 yard.

A mile is 5,280 feet. Most major roads are at least a mile long.



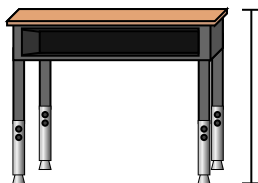
1)



Pen

- A. 5 inches
- B. 12 inches
- C. 1 foot
- D. 5 yards

2)



Desk

- A. 6 inches
- B. 2 yards
- C. 2 feet
- D. 11 inches

3)



Frog

- A. 9 inches
- B. 3 inches
- C. 1 foot
- D. 2 feet

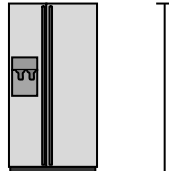
4)



Bicycle

- A. 3 inches
- B. 1 yard
- C. 3 yards
- D. 10 inches

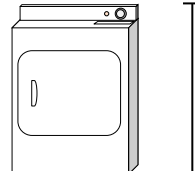
5)



Refrigerator

- A. 6 feet
- B. 1 foot
- C. 12 inches
- D. 4 yards

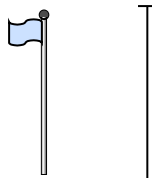
6)



Clothes Dryer

- A. 2 feet
- B. 1 yard
- C. 11 inches
- D. 6 inches


7)



Flag Pole

- A. 5 feet
- B. 10 yards
- C. 1 mile
- D. 12 inches

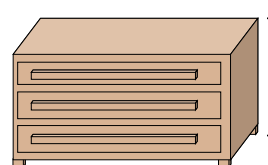
8)



Tennis Ball

- A. 1 foot
- B. 7 inches
- C. 3 inches
- D. 2 feet

9)



Dresser

- A. 18 inches
- B. 3 feet
- C. 3 yards
- D. 12 inches

- 1. **A**
- 2. **C**
- 3. **B**
- 4. **B**
- 5. **A**
- 6. **B**
- 7. **B**
- 8. **C**
- 9. **B**

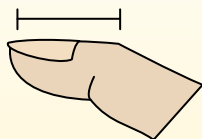


Determine which letter best represents the length / height.

**Answers**

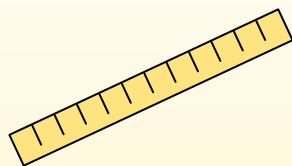
**Inch (in)**

An inch is about the distance of the last joint of your finger.



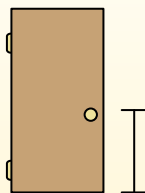
**Foot (ft)**

A foot is 12 inches. The length of a ruler.



**Yard (yd)**

1 yard is the same as 3 feet. From the floor to a door knob is about 1 yard.



**Mile (mi)**

A mile is 5,280 feet. Most major roads are at least a mile long.



1. \_\_\_\_\_
2. \_\_\_\_\_
3. \_\_\_\_\_
4. \_\_\_\_\_
5. \_\_\_\_\_
6. \_\_\_\_\_
7. \_\_\_\_\_
8. \_\_\_\_\_
9. \_\_\_\_\_

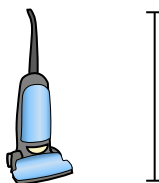
1)



Bicycle

- A. 3 inches
- B. 10 inches
- C. 1 yard
- D. 3 yards

2)



Vacuum

- A. 11 inches
- B. 4 feet
- C. 3 yards
- D. 1 foot


3)



Toothbrush

- A. 1 yard
- B. 10 feet
- C. 7 inches
- D. 4 inches


4)



Cereal Box Height

- A. 4 inches
- B. 2 feet
- C. 1 inch
- D. 1 foot

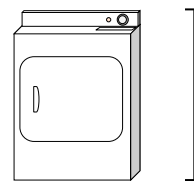
5)



Elephant

- A. 1 mile
- B. 5 feet
- C. 18 inches
- D. 4 yards

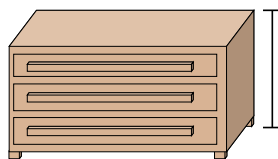
6)



Clothes Dryer

- A. 6 inches
- B. 2 feet
- C. 11 inches
- D. 1 yard

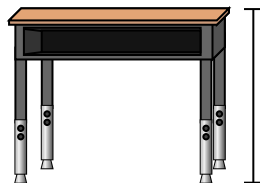
7)



Dresser

- A. 12 inches
- B. 3 yards
- C. 3 feet
- D. 18 inches

8)



Desk

- A. 6 inches
- B. 11 inches
- C. 2 feet
- D. 2 yards

9)



Bug

- A. 3 yards
- B. 3 inches
- C. 1 foot
- D. 1 inch



Determine which letter best represents the length / height.

**Answers**

**Inch (in)**

**Foot (ft)**

**Yard (yd)**

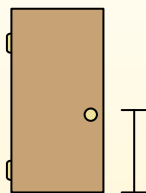
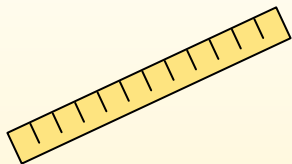
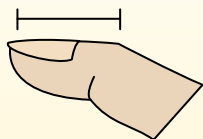
**Mile (mi)**

An inch is about the distance of the last joint of your finger.

A foot is 12 inches. The length of a ruler.

1 yard is the same as 3 feet. From the floor to a door knob is about 1 yard.


A mile is 5,280 feet. Most major roads are at least a mile long.




- Bicycle
- A. 3 inches
  - B. 10 inches
  - C. 1 yard
  - D. 3 yards




- Vacuum
- A. 11 inches
  - B. 4 feet
  - C. 3 yards
  - D. 1 foot



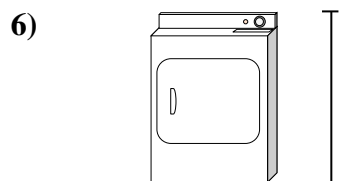
- Toothbrush
- A. 1 yard
  - B. 10 feet
  - C. 7 inches
  - D. 4 inches



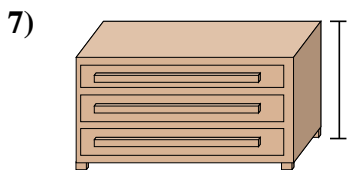
- Cereal Box Height
- A. 4 inches
  - B. 2 feet
  - C. 1 inch
  - D. 1 foot



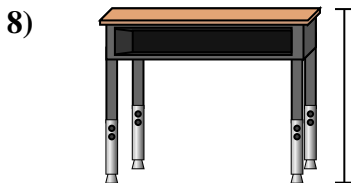
- Elephant
- A. 1 mile
  - B. 5 feet
  - C. 18 inches
  - D. 4 yards



- Clothes Dryer
- A. 6 inches
  - B. 2 feet
  - C. 11 inches
  - D. 1 yard



- Dresser
- A. 12 inches
  - B. 3 yards
  - C. 3 feet
  - D. 18 inches



- Desk
- A. 6 inches
  - B. 11 inches
  - C. 2 feet
  - D. 2 yards



- Bug
- A. 3 yards
  - B. 3 inches
  - C. 1 foot
  - D. 1 inch

- 1.   **C**
- 2.   **B**
- 3.   **C**
- 4.   **D**
- 5.   **D**
- 6.   **D**
- 7.   **C**
- 8.   **C**
- 9.   **D**





Determine which letter best represents the length / height.

**Answers**

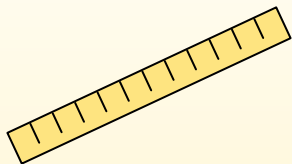
**Inch (in)**

An inch is about the distance of the last joint of your finger.



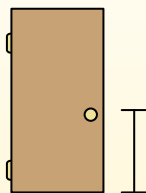
**Foot (ft)**

A foot is 12 inches. The length of a ruler.



**Yard (yd)**

1 yard is the same as 3 feet. From the floor to a door knob is about 1 yard.




**Mile (mi)**

A mile is 5,280 feet. Most major roads are at least a mile long.



1. \_\_\_\_\_
2. \_\_\_\_\_
3. \_\_\_\_\_
4. \_\_\_\_\_
5. \_\_\_\_\_
6. \_\_\_\_\_
7. \_\_\_\_\_
8. \_\_\_\_\_
9. \_\_\_\_\_

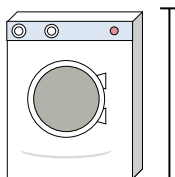
1)



Can of Soda

- A. 1 foot
- B. 1 inch
- C. 1 yard
- D. 4 inches


2)



Washing Machine

- A. 3 feet
- B. 1 foot
- C. 2 yards
- D. 4 inches

3)



Lollipop

- A. 1 foot
- B. 3 inches
- C. 1 mile
- D. 5 inches

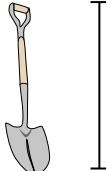
4)



Bicycle

- A. 10 inches
- B. 3 inches
- C. 1 yard
- D. 3 yards


5)



Shovel

- A. 11 inches
- B. 2 feet
- C. 4 feet
- D. 3 yards

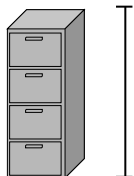
6)



Bowling Ball Height

- A. 10 inches
- B. 10 feet
- C. 1 yard
- D. 4 inches

7)



File Cabinet

- A. 11 inches
- B. 5 feet
- C. 1 foot
- D. 2 feet

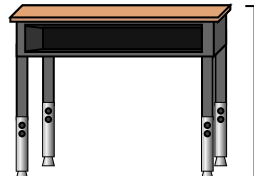
8)



Pencil

- A. 1 yard
- B. 7 inches
- C. 1 foot
- D. 1 inch

9)



Desk

- A. 2 yards
- B. 6 inches
- C. 11 inches
- D. 2 feet



Determine which letter best represents the length / height.

**Answers**

**Inch (in)**

**Foot (ft)**

**Yard (yd)**


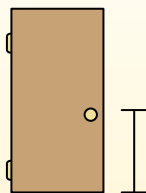

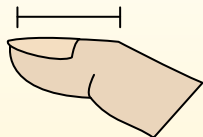
**Mile (mi)**

An inch is about the distance of the last joint of your finger.

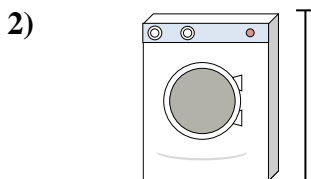
A foot is 12 inches. The length of a ruler.

1 yard is the same as 3 feet. From the floor to a door knob is about 1 yard.


A mile is 5,280 feet. Most major roads are at least a mile long.



- Can of Soda
- A. 1 foot
  - B. 1 inch
  - C. 1 yard
  - D. 4 inches




- Washing Machine
- A. 3 feet
  - B. 1 foot
  - C. 2 yards
  - D. 4 inches




- Lollipop
- A. 1 foot
  - B. 3 inches
  - C. 1 mile
  - D. 5 inches



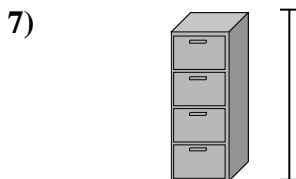
- Bicycle
- A. 10 inches
  - B. 3 inches
  - C. 1 yard
  - D. 3 yards



- Shovel
- A. 11 inches
  - B. 2 feet
  - C. 4 feet
  - D. 3 yards



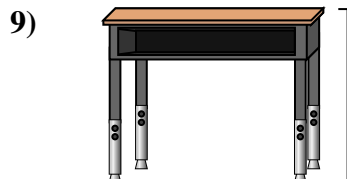
- Bowling Ball Height
- A. 10 inches
  - B. 10 feet
  - C. 1 yard
  - D. 4 inches



- File Cabinet
- A. 11 inches
  - B. 5 feet
  - C. 1 foot
  - D. 2 feet



- Pencil
- A. 1 yard
  - B. 7 inches
  - C. 1 foot
  - D. 1 inch



- Desk
- A. 2 yards
  - B. 6 inches
  - C. 11 inches
  - D. 2 feet

- 1.   **D**
- 2.   **A**
- 3.   **D**
- 4.   **C**
- 5.   **C**
- 6.   **A**
- 7.   **B**
- 8.   **B**
- 9.   **D**

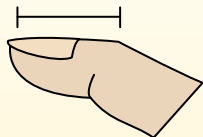


Determine which letter best represents the length / height.

**Answers**


**Inch (in)**

An inch is about the distance of the last joint of your finger.



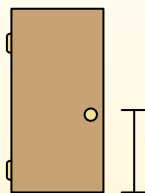
**Foot (ft)**

A foot is 12 inches. The length of a ruler.



**Yard (yd)**

1 yard is the same as 3 feet. From the floor to a door knob is about 1 yard.



**Mile (mi)**

A mile is 5,280 feet. Most major roads are at least a mile long.




1. \_\_\_\_\_
2. \_\_\_\_\_
3. \_\_\_\_\_
4. \_\_\_\_\_
5. \_\_\_\_\_
6. \_\_\_\_\_
7. \_\_\_\_\_
8. \_\_\_\_\_
9. \_\_\_\_\_

1)

DVD

- A. 4 inches
- B. 1 yard
- C. 12 inches
- D. 1 foot


2)



Mountain

- A. 10 yards
- B. 2 miles
- C. 300 inches
- D. 20 feet

3)



Slice of Bread

- A. 4 feet
- B. 2 yards
- C. 4 inches
- D. 10 inches

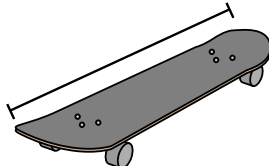
4)



Bicycle

- A. 3 yards
- B. 10 inches
- C. 3 inches
- D. 1 yard

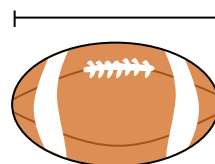
5)



Skateboard

- A. 30 inches
- B. 1 inch
- C. 2 yards
- D. 12 inches

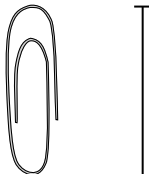
6)



Football

- A. 1 yard
- B. 11 inches
- C. 1 inch
- D. 2 feet

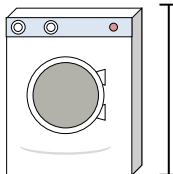
7)



Paperclip

- A. 1 inch
- B. 2 feet
- C. 1 foot
- D. 4 inches

8)



WashingMachine

- A. 1 foot
- B. 3 feet
- C. 2 yards
- D. 4 inches

9)



Glue Stick

- A. 3 inches
- B. 1 foot
- C. 10 inches
- D. 4 miles



Determine which letter best represents the length / height.

**Answers**

**Inch (in)**

**Foot (ft)**

**Yard (yd)**

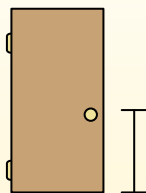

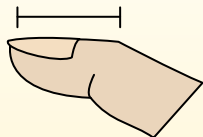
**Mile (mi)**

An inch is about the distance of the last joint of your finger.

A foot is 12 inches. The length of a ruler.

1 yard is the same as 3 feet. From the floor to a door knob is about 1 yard.

A mile is 5,280 feet. Most major roads are at least a mile long.




1)

DVD

- A. 4 inches
- B. 1 yard
- C. 12 inches
- D. 1 foot


2)



Mountain

- A. 10 yards
- B. 2 miles
- C. 300 inches
- D. 20 feet

3)



Slice of Bread

- A. 4 feet
- B. 2 yards
- C. 4 inches
- D. 10 inches

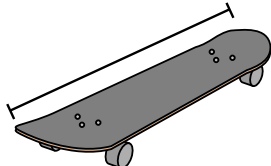
4)



Bicycle

- A. 3 yards
- B. 10 inches
- C. 3 inches
- D. 1 yard

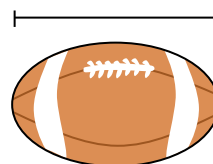
5)



Skateboard

- A. 30 inches
- B. 1 inch
- C. 2 yards
- D. 12 inches

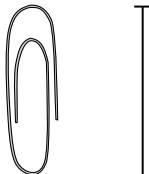
6)



Football

- A. 1 yard
- B. 11 inches
- C. 1 inch
- D. 2 feet

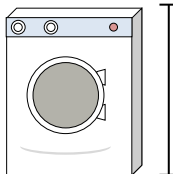
7)



Paperclip

- A. 1 inch
- B. 2 feet
- C. 1 foot
- D. 4 inches

8)



Washing Machine

- A. 1 foot
- B. 3 feet
- C. 2 yards
- D. 4 inches

9)



Glue Stick

- A. 3 inches
- B. 1 foot
- C. 10 inches
- D. 4 miles

- 1.   **A**
- 2.   **B**
- 3.   **C**
- 4.   **D**
- 5.   **A**
- 6.   **B**
- 7.   **A**
- 8.   **B**
- 9.   **A**