



Determine which letter best represents the length / height.

Answers

Inch (in)

An inch is about the distance of the last joint of your finger.



Foot (ft)

A foot is 12 inches. The length of a ruler.



Yard (yd)

1 yard is the same as 3 feet. From the floor to a door knob is about 1 yard.




Mile (mi)

A mile is 5,280 feet. Most major roads are at least a mile long.



1. _____
2. _____
3. _____
4. _____
5. _____
6. _____
7. _____
8. _____
9. _____

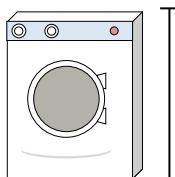
1)



Can of Soda

- A. 1 foot
- B. 1 inch
- C. 1 yard
- D. 4 inches


2)



Washing Machine

- A. 3 feet
- B. 1 foot
- C. 2 yards
- D. 4 inches

3)



Lollipop

- A. 1 foot
- B. 3 inches
- C. 1 mile
- D. 5 inches

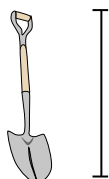
4)



Bicycle

- A. 10 inches
- B. 3 inches
- C. 1 yard
- D. 3 yards


5)



Shovel

- A. 11 inches
- B. 2 feet
- C. 4 feet
- D. 3 yards

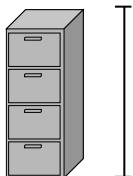
6)



Bowling Ball Height

- A. 10 inches
- B. 10 feet
- C. 1 yard
- D. 4 inches

7)



File Cabinet

- A. 11 inches
- B. 5 feet
- C. 1 foot
- D. 2 feet

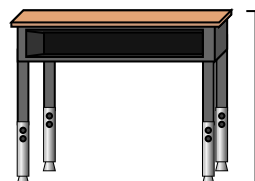
8)



Pencil

- A. 1 yard
- B. 7 inches
- C. 1 foot
- D. 1 inch

9)



Desk

- A. 2 yards
- B. 6 inches
- C. 11 inches
- D. 2 feet



Determine which letter best represents the length / height.

Answers

Inch (in)

Foot (ft)

Yard (yd)


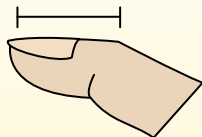
Mile (mi)

An inch is about the distance of the last joint of your finger.

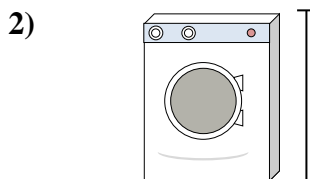
A foot is 12 inches. The length of a ruler.

1 yard is the same as 3 feet. From the floor to a door knob is about 1 yard.


A mile is 5,280 feet. Most major roads are at least a mile long.



- Can of Soda
- A. 1 foot
 - B. 1 inch
 - C. 1 yard
 - D. 4 inches




- Washing Machine
- A. 3 feet
 - B. 1 foot
 - C. 2 yards
 - D. 4 inches



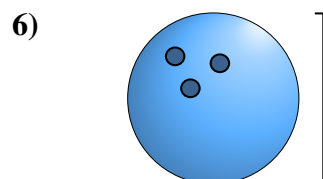
- Lollipop
- A. 1 foot
 - B. 3 inches
 - C. 1 mile
 - D. 5 inches



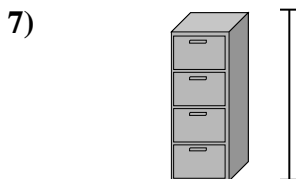
- Bicycle
- A. 10 inches
 - B. 3 inches
 - C. 1 yard
 - D. 3 yards



- Shovel
- A. 11 inches
 - B. 2 feet
 - C. 4 feet
 - D. 3 yards



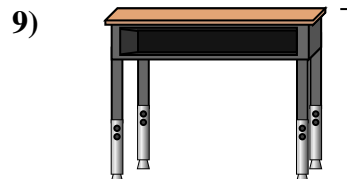
- Bowling Ball Height
- A. 10 inches
 - B. 10 feet
 - C. 1 yard
 - D. 4 inches



- File Cabinet
- A. 11 inches
 - B. 5 feet
 - C. 1 foot
 - D. 2 feet



- Pencil
- A. 1 yard
 - B. 7 inches
 - C. 1 foot
 - D. 1 inch



- Desk
- A. 2 yards
 - B. 6 inches
 - C. 11 inches
 - D. 2 feet

- 1. **D**
- 2. **A**
- 3. **D**
- 4. **C**
- 5. **C**
- 6. **A**
- 7. **B**
- 8. **B**
- 9. **D**