



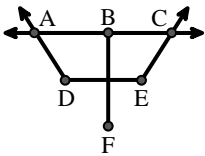
Match the description on the top with the visual image on the bottom.

**Answers**

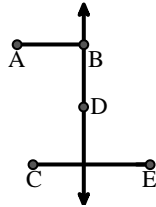
- 1) Acute  $\angle BED$
- 2)  $\overleftrightarrow{BC}$  intersecting  $\angle ACD$
- 3)  $\angle BAC$  creating an obtuse angle
- 4)  $\angle DEC$  intersected by  $\overleftrightarrow{AC}$
- 5)  $\overleftrightarrow{BD}$  intersecting  $\overline{CE}$
- 6)  $\overleftrightarrow{AD}$  intersecting  $\overleftrightarrow{BC}$  at point E
- 7)  $\overleftrightarrow{BD}$  intersecting  $\angle ACE$
- 8)  $\overleftrightarrow{AC}$  parallel to  $\overleftrightarrow{EB}$
- 9) Acute  $\angle BDE$
- 10)  $\overleftrightarrow{AB}$  parallel to  $\overleftrightarrow{CD}$
- 11)  $\overleftrightarrow{AB}$  intersecting  $\overleftrightarrow{AD}$
- 12) D as the midpoint of  $\overleftrightarrow{CE}$

1. \_\_\_\_\_
2. \_\_\_\_\_
3. \_\_\_\_\_
4. \_\_\_\_\_
5. \_\_\_\_\_
6. \_\_\_\_\_
7. \_\_\_\_\_
8. \_\_\_\_\_
9. \_\_\_\_\_
10. \_\_\_\_\_
11. \_\_\_\_\_
12. \_\_\_\_\_

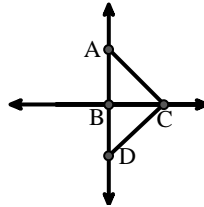
A.



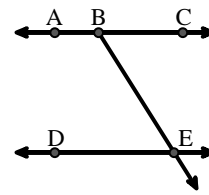
B.



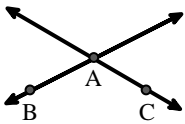
C.



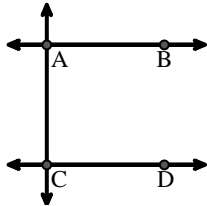
D.



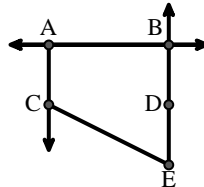
E.



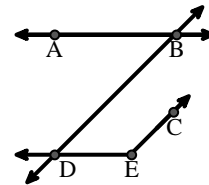
F.



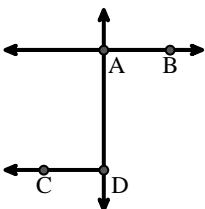
G.



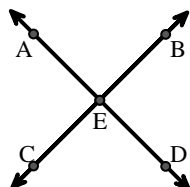
H.



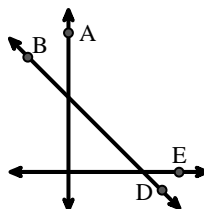
I.



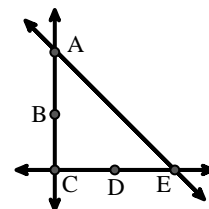
J.



K.



L.





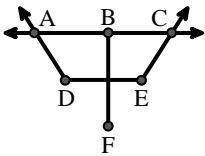
Match the description on the top with the visual image on the bottom.

**Answers**

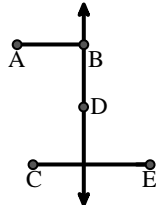
- 1) Acute  $\angle BED$
- 2)  $\overleftrightarrow{BC}$  intersecting  $\angle ACD$
- 3)  $\angle BAC$  creating an obtuse angle
- 4)  $\angle DEC$  intersected by  $\overleftrightarrow{AC}$
- 5)  $\overleftrightarrow{BD}$  intersecting  $\overline{CE}$
- 6)  $\overleftrightarrow{AD}$  intersecting  $\overleftrightarrow{BC}$  at point E
- 7)  $\overleftrightarrow{BD}$  intersecting  $\angle ACE$
- 8)  $\overleftrightarrow{AC}$  parallel to  $\overleftrightarrow{EB}$
- 9) Acute  $\angle BDE$
- 10)  $\overleftrightarrow{AB}$  parallel to  $\overleftrightarrow{CD}$
- 11)  $\overleftrightarrow{AB}$  intersecting  $\overleftrightarrow{AD}$
- 12) D as the midpoint of  $\overleftrightarrow{CE}$

1.     **D**
2.     **C**
3.     **E**
4.     **A**
5.     **B**
6.     **J**
7.     **K**
8.     **G**
9.     **H**
10.     **F**
11.     **I**
12.     **L**

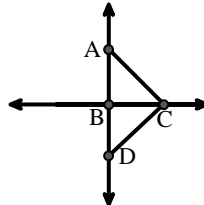
A.



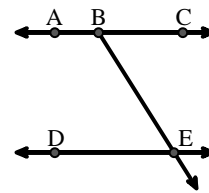
B.



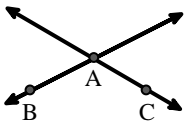
C.



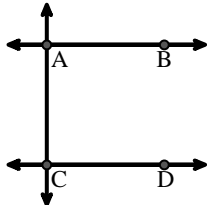
D.



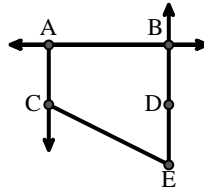
E.



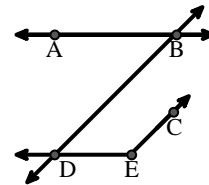
F.



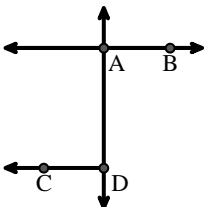
G.



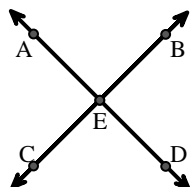
H.



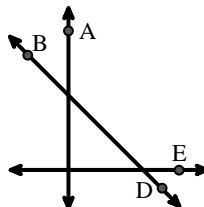
I.



J.



K.



L.

